

# THE AREA OF THE SURFACE GENERATED BY REVOLVING A GRAPH ABOUT ANY LINE

EDRAY HERBER GOINS AND TALITHA M. WASHINGTON

ABSTRACT. We discuss a general formula for the area of the surface that is generated by a graph  $[t_0, t_1] \rightarrow \mathbb{R}^2$  sending  $t \mapsto (x(t), y(t))$  revolved around a general line  $L : Ax + By = C$ . As a corollary, we obtain a formula for the area of the surface formed by revolving  $y = f(x)$  around the line  $y = mx + k$ .

## 1. INTRODUCTION

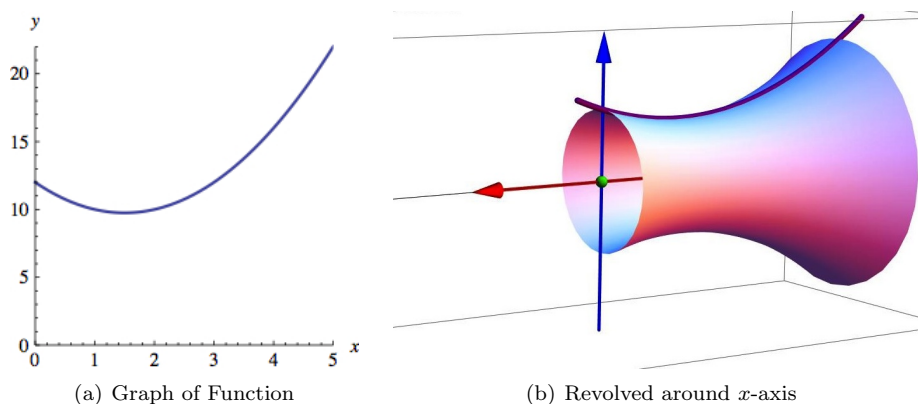
*You spin me right round, baby, right round!*  
– *Dead or Alive*

Many students in advanced Calculus courses learn how to compute the area of a surface of revolution. Perhaps the best known example goes something like this: For functions  $y = f(x)$  differentiable on the interval  $a \leq x \leq b$ , the area of the surface of revolution of its graph about the  $x$ -axis is given by the integral

$$(1) \quad 2\pi \int_a^b |y| \sqrt{1 + \left(\frac{dy}{dx}\right)^2} dx = 2\pi \int_a^b |f(x)| \sqrt{1 + [f'(x)]^2} dx.$$

An example of this type of rotation can be found in Figure 1 below.

FIGURE 1. Surfaces of Revolution of  $y = x^2 - 3x + 12$



2010 *Mathematics Subject Classification.* 26B15, 28A75.

*Key words and phrases.* Surfaces; Area; Rotation.

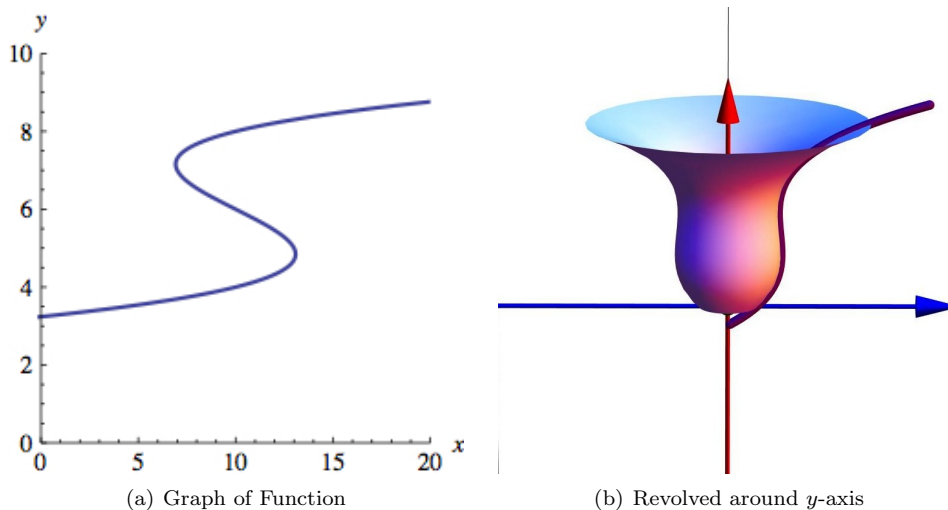
This exposition is dedicated to the inquisitive students in advanced Calculus courses who enjoy seeing mathematics beyond those topics covered in a standard textbook on the subject.

There is a similar formula for computing the area of the surface of revolution about the  $y$ -axis, but one must work with the inverse function  $x = g(y)$  and assume that it is a function differentiable on the interval  $c \leq y \leq d$ :

$$(2) \quad 2\pi \int_c^d |x| \sqrt{1 + \left(\frac{dx}{dy}\right)^2} dy = 2\pi \int_c^d |g(y)| \sqrt{1 + [g'(y)]^2} dy.$$

As above, an example of this type of rotation can be found in Figure 2 below.

FIGURE 2. Surfaces of Revolution of  $x = y^3 - 12y^2 + 444y + 62$



These are special cases of graphs which can be parametrized by continuous functions, say  $x = x(t)$  and  $y = y(t)$ , which are both differentiable on the interval  $t_0 \leq t \leq t_1$ . The area of the surface of revolution of parametrized graph is given by the integral

$$(3) \quad \begin{aligned} & 2\pi \int_{t_0}^{t_1} |y(t)| \sqrt{\left(\frac{dx}{dt}\right)^2 + \left(\frac{dy}{dt}\right)^2} dt \quad \text{when revolved about the } x\text{-axis,} \\ & 2\pi \int_{t_0}^{t_1} |x(t)| \sqrt{\left(\frac{dx}{dt}\right)^2 + \left(\frac{dy}{dt}\right)^2} dt \quad \text{when revolved about the } y\text{-axis.} \end{aligned}$$

Such formulas can be found in Stewart's *Calculus* [2, Section 8.2, Section 10.2]. A general discussion of integrals over surfaces can be found in Apostol's *Calculus* [1, Chapter 12].

## 2. ROTATIONS ON A SLANT

These seemingly unrelated formulas must be intimidating for advanced Calculus students. Which one should they use to solve problems? Why are the formulas so different? And where do these formulas come from in the first place? As educators,

it's our job to ease fears and provide the simplest explanations possible to even the most complex mathematical concepts. In this note, we'll provide a relatively simple proof of the following generalization.

**Proposition 1.** *Consider the graph parametrized by functions  $x = x(t)$  and  $y = y(t)$ , both differentiable on the interval  $t_0 \leq t \leq t_1$ . The area of the surface of revolution of this graph, when revolved about a line  $L : Ax + By = C$ , is given by the integral*

$$(4) \quad \begin{aligned} 2\pi \int_{t_0}^{t_1} r(t) \sqrt{\left(\frac{dx}{dt}\right)^2 + \left(\frac{dy}{dt}\right)^2} dt \\ = 2\pi \int_{t_0}^{t_1} r(t) \sqrt{[x'(t)]^2 + [y'(t)]^2} dt \end{aligned}$$

in terms of the nonnegative function

$$(5) \quad r(t) = \frac{|Ax(t) + By(t) - C|}{\sqrt{A^2 + B^2}}.$$

Before we present the proof, we explain how to use this generalization to derive Equations (1) and (2). For the former, the graph of  $y = f(x)$  can be parametrized by the functions  $x(t) = t$  and  $y(t) = f(t)$  on the interval  $a \leq t \leq b$ . The  $x$ -axis is simply the line  $L : y = 0$ , so we may choose  $(A, B, C) = (0, 1, 0)$ . Then  $r(t) = |f(t)|$ , and we find Equation (1). For the latter, the graph of  $x = g(y)$  can be parametrized by the functions  $x(t) = g(t)$  and  $y(t) = t$  on the interval  $c \leq t \leq d$ . The  $y$ -axis is simply the line  $L : x = 0$ , so we may choose  $(A, B, C) = (1, 0, 0)$ . Then  $r(t) = |g(t)|$ , and we find Equation (2).

On pages 551 and 552 of Stewart's *Calculus* [2], there is a Discovery Project entitled "Rotations on a Slant", where a differentiable function  $y = f(x)$  is rotated about the line  $y = mx + k$  expressed in point-slope form. As a solution to Exercise 5, we recover the following result.

**Corollary 2.** *Consider a function  $y = f(x)$  which is differentiable on the interval  $a \leq x \leq b$ . The area of the surface of revolution of its graph about the line  $y = mx + k$  is given by the integral*

$$(6) \quad \begin{aligned} 2\pi \int_a^b |y - mx - k| \sqrt{\frac{1 + (dy/dx)^2}{1 + m^2}} dx \\ = 2\pi \int_a^b |f(x) - mx - k| \sqrt{\frac{1 + [f'(x)]^2}{1 + m^2}} dx. \end{aligned}$$

We explain why this corollary is true. As above, write  $y = f(x)$  in terms of the functions  $x(t) = t$  and  $y(t) = f(t)$  on the interval  $a \leq t \leq b$ . The line  $L : y = mx + k$  can be expressed in the form  $Ax + By = C$  upon choosing  $(A, B, C) = (-m, 1, k)$ , so that we have the nonnegative function

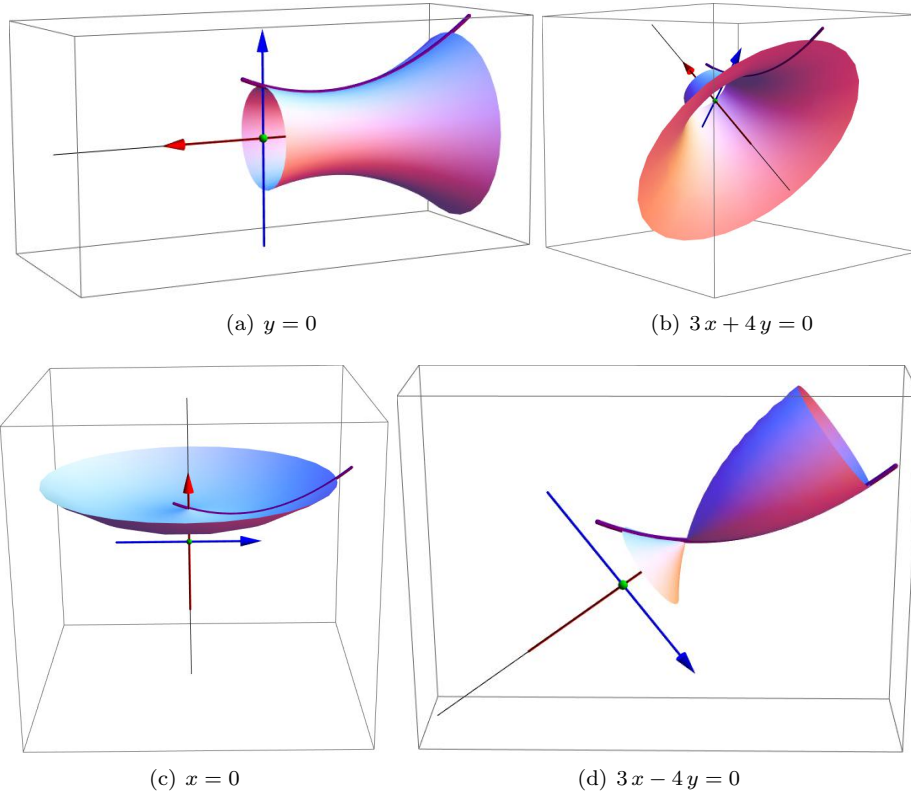
$$(7) \quad r(t) = \frac{|Ax(t) + By(t) - C|}{\sqrt{A^2 + B^2}} = \frac{|f(t) - mt - k|}{\sqrt{1 + m^2}}.$$

Proposition 1 implies that we have the area

$$(8) \quad \begin{aligned} & 2\pi \int_{t_0}^{t_1} r(t) \sqrt{[x'(t)]^2 + [y'(t)]^2} dt \\ & = 2\pi \int_a^b \frac{|f(x) - mx - k|}{\sqrt{1+m^2}} \sqrt{1+[f'(x)]^2} dx. \end{aligned}$$

Some examples of this result can be found in Figure 3 below.

FIGURE 3. Revolutions of  $y = x^2 - 3x + 12$  Around Lines



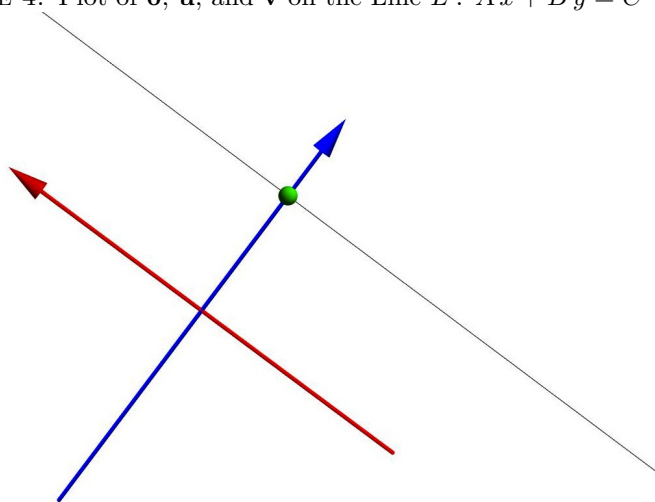
## 3. PROOF OF MAIN RESULT

The idea for the proof will be to create a new coordinate system using the line  $L$  as an axis. To this end, let's define the following three points in the plane:

$$(9) \quad \begin{aligned} \mathbf{O} &= \left( \frac{AC}{A^2 + B^2}, \frac{BC}{A^2 + B^2} \right), \\ \mathbf{u} &= \left( -\frac{B}{\sqrt{A^2 + B^2}}, \frac{A}{\sqrt{A^2 + B^2}} \right), \\ \mathbf{v} &= \left( \frac{A}{\sqrt{A^2 + B^2}}, \frac{B}{\sqrt{A^2 + B^2}} \right). \end{aligned}$$

Each of these points has a geometric interpretation. The first point  $\mathbf{O}$  will act as our "origin"; it lies on the line  $L$ . The second point  $\mathbf{u}$  lies along the direction of  $L$ , while the third point  $\mathbf{v}$  lies perpendicular to  $L$ . A diagram of these points with respect to  $L$  can be found in Figure 4.

FIGURE 4. Plot of  $\mathbf{O}$ ,  $\mathbf{u}$ , and  $\mathbf{v}$  on the Line  $L : Ax + By = C$



In order to prove Proposition 1, we will prove a series of results.

**Lemma 3.**  $\{\mathbf{u}, \mathbf{v}\}$  forms an orthonormal basis for  $\mathbb{R}^2$ .

Recall that an orthonormal basis  $\{\mathbf{u}, \mathbf{v}\}$  is a set of two vectors which are orthogonal (that is,  $\mathbf{u} \cdot \mathbf{v} = 0$ ) and normal (that is,  $\|\mathbf{u}\| = \|\mathbf{v}\| = 1$ ). This is indeed the

case for the vectors above because we have the identities

$$\begin{aligned}
\mathbf{u} \cdot \mathbf{v} &= -\frac{B}{\sqrt{A^2 + B^2}} \frac{A}{\sqrt{A^2 + B^2}} + \frac{A}{\sqrt{A^2 + B^2}} \frac{B}{\sqrt{A^2 + B^2}} \\
&= \frac{-BA + AB}{A^2 + B^2} = 0, \\
(10) \quad \|\mathbf{u}\| &= \sqrt{\left(-\frac{B}{\sqrt{A^2 + B^2}}\right)^2 + \left(\frac{A}{\sqrt{A^2 + B^2}}\right)^2} = \sqrt{\frac{B^2 + A^2}{A^2 + B^2}} = 1, \\
\|\mathbf{v}\| &= \sqrt{\left(\frac{A}{\sqrt{A^2 + B^2}}\right)^2 + \left(-\frac{B}{\sqrt{A^2 + B^2}}\right)^2} = \sqrt{\frac{A^2 + B^2}{A^2 + B^2}} = 1.
\end{aligned}$$

Next, we'll use these three points  $\mathbf{O}$ ,  $\mathbf{u}$ , and  $\mathbf{v}$  to decompose points  $(x, y)$  in the plane along the axes defined above.

**Lemma 4.** *Every point in the plane can be decomposed into parts that lie on the line  $L$  and parts that lie perpendicular to the line. Explicitly,*

$$(11) \quad (x, y) = \underbrace{\left[ \mathbf{O} + \frac{-Bx + Ay}{\sqrt{A^2 + B^2}} \mathbf{u} \right]}_{\text{on the line } L} + \underbrace{\left[ \frac{Ax + By - C}{\sqrt{A^2 + B^2}} \mathbf{v} \right]}_{\text{perpendicular to the line } L}.$$

In order to prove this, we must perform some algebra. The decomposition holds because we have the sum

$$(12) \quad \begin{array}{r}
\mathbf{O} = \left( \begin{array}{cc} \frac{AC}{A^2 + B^2}, & \frac{BC}{A^2 + B^2} \end{array} \right) \\
\frac{-Bx + Ay}{\sqrt{A^2 + B^2}} \mathbf{u} = \left( \begin{array}{cc} \frac{B^2x - AB y}{A^2 + B^2}, & \frac{-ABx + A^2y}{A^2 + B^2} \end{array} \right) \\
\frac{Ax + By - C}{\sqrt{A^2 + B^2}} \mathbf{v} = \left( \begin{array}{cc} \frac{A^2x + AB y - AC}{A^2 + B^2}, & \frac{ABx + B^2y - BC}{A^2 + B^2} \end{array} \right) \\
\hline
\text{Sum of Points} = \left( \begin{array}{cc} \frac{A^2 + B^2}{A^2 + B^2} x, & \frac{A^2 + B^2}{A^2 + B^2} y \end{array} \right)
\end{array}$$

Moreover, the sum of the first two points

$$(13) \quad \mathbf{O} + \frac{-Bx + Ay}{\sqrt{A^2 + B^2}} \mathbf{u} = \left( \frac{B^2x - AB y + AC}{A^2 + B^2}, \frac{-ABx + A^2y + BC}{A^2 + B^2} \right)$$

lies on the line  $L$ :

$$(14) \quad \begin{aligned}
&A \left( \frac{B^2x - AB y + AC}{A^2 + B^2} \right) + B \left( \frac{-ABx + A^2y + BC}{A^2 + B^2} \right) \\
&= \frac{(AB^2x - A^2By + A^2C) + (-AB^2x + A^2By + B^2C)}{A^2 + B^2} = C.
\end{aligned}$$

The third point is perpendicular to the line because  $\mathbf{v}$  is orthogonal to  $\mathbf{u}$ .

Next, we put these results together to compute a useful formula.

**Lemma 5.** *The distance from a point  $(x, y)$  to the line  $L$  is given by*

$$(15) \quad r = \frac{|Ax + By - C|}{\sqrt{A^2 + B^2}}.$$

To prove this, we essentially use the Pythagorean Theorem: we project any point  $(x, y)$  in the plane into two directions, one along the line  $L$  and the other perpendicular to it. The distance from this point to the line is simply the length of the perpendicular direction, that is, the length of the vector along  $\mathbf{v}$ .

$$(16) \quad r = \left\| \frac{Ax + By - C}{\sqrt{A^2 + B^2}} \mathbf{v} \right\| = \frac{|Ax + By - C|}{\sqrt{A^2 + B^2}} \|\mathbf{v}\| = \frac{|Ax + By - C|}{\sqrt{A^2 + B^2}}.$$

*Proof of Proposition 1:* Say that we have two functions  $x = x(t)$  and  $y = y(t)$ , both differentiable on the interval  $t_0 \leq t \leq t_1$ , as well as a line  $L: Ax + By = C$ . According to Lemma 5, the distance from a point  $(x, y) = (x(t), y(t))$  to the line  $L$  is given by the function

$$(17) \quad r(t) = \frac{|Ax(t) + By(t) - C|}{\sqrt{A^2 + B^2}}.$$

This will act as the radius of rotation around the line. A small arc length along the graph at this point is given by the differential

$$(18) \quad ds = \sqrt{dx^2 + dy^2} = \sqrt{\left(\frac{dx}{dt}\right)^2 + \left(\frac{dy}{dt}\right)^2} dt = \sqrt{[x'(t)]^2 + [y'(t)]^2} dt.$$

This will act as the width of the cylindrical shell. (See Figure 5 for an illustration.) Putting these together, the area differential of the surface of revolution is

$$(19) \quad \begin{aligned} d\text{Area} &= 2\pi r(t) ds \\ &= 2\pi \frac{|Ax(t) + By(t) - C|}{\sqrt{A^2 + B^2}} \sqrt{[x'(t)]^2 + [y'(t)]^2} dt, \end{aligned}$$

so that the desired area of revolution is given by

$$(20) \quad \begin{aligned} \text{Area} &= 2\pi \int_{t_0}^{t_1} r(t) ds \\ &= 2\pi \int_{t_0}^{t_1} \frac{|Ax(t) + By(t) - C|}{\sqrt{A^2 + B^2}} \sqrt{[x'(t)]^2 + [y'(t)]^2} dt. \end{aligned}$$

#### 4. EXAMPLE

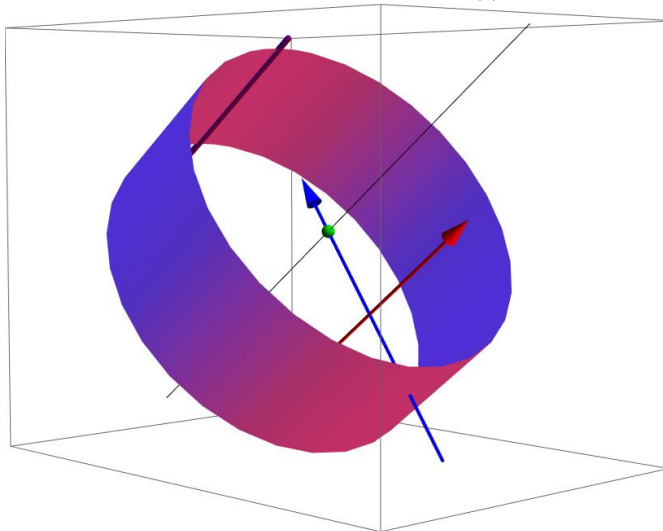
We illustrate these ideas with an example. Say that we wish to rotate the circle  $x^2 + y^2 = r^2$  of radius  $r$  around the line  $Ax + By = C$  – but we'll assume for simplicity that

$$(21) \quad R = \frac{C}{\sqrt{A^2 + B^2}} > r.$$

As shown in Figure 6, this is just a torus. We'll show that the area of this surface is  $4\pi^2 Rr$ .

To begin, we'll plot the circle using the functions  $x(t) = r \cos t$  and  $y(t) = r \sin t$  for  $t_0 \leq t \leq 2\pi + t_0$ , where  $t_0$  is an angle such that

$$(22) \quad \cos t_0 = \frac{A}{\sqrt{A^2 + B^2}} \quad \text{and} \quad \sin t_0 = \frac{B}{\sqrt{A^2 + B^2}}.$$

FIGURE 5. Cylindrical Shell of Radius  $r(t)$  and Length  $ds$ 

The distance from a point  $(x(t), y(t))$  to the line is given by the function

$$(23) \quad r(t) = \frac{|Ax(t) + By(t) - C|}{\sqrt{A^2 + B^2}} = |\cos t_0 \cdot r \cos t + \sin t_0 \cdot r \sin t - R| \\ = R - r \cos(t - t_0).$$

(We have used the Angle Difference Formula  $\cos(t - t_0) = \cos t \cos t_0 + \sin t \sin t_0$ . Recall that  $R > r$  by assumption.) We have the arc length differential

$$(24) \quad ds = \sqrt{[x'(t)]^2 + [y'(t)]^2} dt = \sqrt{[-r \sin t]^2 + [r \cos t]^2} dt = r dt.$$

The desired area of revolution is given by the integral

$$(25) \quad 2\pi \int_{t_0}^{t_1} r(t) ds = 2\pi r \int_{t_0}^{2\pi+t_0} (R - r \cos(t - t_0)) dt = 4\pi^2 Rr.$$

#### REFERENCES

- [1] Tom M. Apostol. *Calculus. Vol. II: Multi-variable Calculus and Linear Algebra, with Applications to Differential Equations and Probability*. Wiley and Sons, 1969.
- [2] James Stewart. *Calculus: Early Transcendentals*, Volume 6E. Cengage Learning, 2008.

PURDUE UNIVERSITY, DEPARTMENT OF MATHEMATICS, 150 NORTH UNIVERSITY STREET, WEST LAFAYETTE, IN 47907

*E-mail address:* [egoins@math.purdue.edu](mailto:egoins@math.purdue.edu)

HOWARD UNIVERSITY, COLLEGE OF ARTS AND SCIENCES, DEPARTMENT OF MATHEMATICS, 204 ACADEMIC SUPPORT BUILDING B, WASHINGTON, DC 20059

*E-mail address:* [tw65@evansville.edu](mailto:tw65@evansville.edu)



FIGURE 6. Circle  $x^2 + y^2 = r^2$  Revolved Around  $Ax + By = C$ 