

Euclidean plane and its relatives

A minimalist introduction

Anton Petrunin



This work is licensed under the Creative Commons Attribution-ShareAlike 4.0 International License. To view a copy of this license, visit <http://creativecommons.org/licenses/by-sa/4.0/>

Contents

Preface	6
A. Prerequisite 6 ; B. Overview 6 ; C. Disclaimer 8 ; D. Recommended resources 8 ; E. Acknowledgments 8 .	
1 Preliminaries	9
A. What is the axiomatic approach? 9 ; B. What is a model? 9 ; C. Metric spaces 10 ; D. Shortcut for distance 11 ; E. Isometries, motions, and lines 12 ; F. Half-lines and segments 13 ; G. Angles 13 ; H. Reals modulo $2\cdot\pi$ 14 ; I. Continuity 15 ; J. Congruent triangles 16 .	
Euclidean geometry	
2 Axioms	18
A. The axioms 19 ; B. Lines and half-lines 20 ; C. Zero angle 20 ; D. Straight angle 21 ; E. Vertical angles 22 .	
3 Half-planes	23
A. Sign of an angle 23 ; B. Intermediate value theorem 24 ; C. Same sign lemmas 24 ; D. Half-planes 25 ; E. Triangle with given sides 27 .	
4 Congruent triangles	30
A. Side-angle-side 30 ; B. Angle-side-angle 30 ; C. Isosceles triangles 31 ; D. Side-side-side 32 ; E. On side-side-angle and side-angle-angle 33 .	
5 Perpendicular lines	34
A. Right, acute and obtuse angles 34 ; B. Perpendicular bisector 34 ; C. Uniqueness of a perpendicular 35 ; D. Reflection across a line 36 ; E. Direct and indirect motions 38 ; F. Perpendicular is shortest 38 ; G. Circles 39 ; H. Geometric constructions 40 .	

6	Similar triangles	42
	A. Similarity conditions 43 ; B. Pythagorean theorem 44 ; C. Method of similar triangles 45 ; D. Ptolemy's inequality 45 .	
7	Parallel lines	47
	A. Reflection across a point 49 ; B. Transversal property 50 ; C. Angles of triangles 51 ; D. Parallelograms 53 ; E. Method of coordinates 54 ; F. Apollonian circle 55 .	
8	Triangle geometry	56
	A. Circumcircle and circumcenter 56 ; B. Altitudes and orthocenter 57 ; C. Medians and centroid 57 ; D. Angle bisectors 58 ; E. Equidistant property 60 ; F. Incenter 61 .	
Inversive geometry		
9	Inscribed angles	63
	A. Angle between a tangent line and a chord 63 ; B. Inscribed angle 64 ; C. Points on a circle 65 ; D. Method of additional circle 67 ; E. Arcs of circlines 68 ; F. Tangent half-lines 69 .	
10	Inversion	71
	A. Cross-ratio 72 ; B. Inversive plane and circlines 73 ; C. Method of inversion 75 ; D. Perpendicular circles 76 ; E. Angles after inversion 79 .	
Non-Euclidean geometry		
11	Neutral plane	81
	A. Two angles of a triangle 82 ; B. Three angles of triangle 83 ; C. Defect 85 ; D. Proving that something cannot be proved 86 ; E. Curvature 87 .	
12	Hyperbolic plane	89
	A. Conformal disc model 90 ; B. Plan of the proof 91 ; C. Auxiliary statements 92 ; D. Axioms 95 ; E. Hyperbolic trigonometry 99 .	
13	Geometry of the h-plane	101
	A. Angle of parallelism 101 ; B. Inradius of h-triangle 103 ; C. Circles, horocycles, and equidistants 104 ; D. Hyperbolic triangles 105 ; E. Conformal interpretation 107 ; F. Pythagorean theorem 110 .	

Additional topics

14 Affine geometry	112
A. Affine transformations 112 ; B. Constructions 113 ; C. Fundamental theorem of affine geometry 114 ; D. Algebraic lemma 115 ; E. Three theorems 117 .	
15 Projective geometry	119
A. Projective completion 119 ; B. Euclidean space 120 ; C. Model of space 120 ; D. Perspective projection 121 ; E. Projective transformations 122 ; F. Moving points to infinity 123 ; G. Duality 125 ; H. Polar and pole 127 .	
16 Spherical geometry	129
A. Sphere 129 ; B. Central projection 130 ; C. Stereographic projection 131 ; D. Inversion 131 ; E. Pythagorean theorem 133 ; F. Imaginary distance 134 .	
17 Projective model	136
A. Special bijection on the h-plane 136 ; B. Projective model 138 ; C. Bolyai's construction 141 .	
18 Complex coordinates	143
A. Complex numbers 143 ; B. Complex coordinates 143 ; C. Conjugation and absolute value 144 ; D. Euler's formula 145 ; E. Argument and polar coordinates 146 ; F. Method of complex coordinates 147 ; G. Fractional linear transformations 149 ; H. Elementary transformations 149 ; I. Complex cross-ratio 151 ; J. Schwarz–Pick theorem 152 .	
19 Geometric constructions	154
A. Classical problems 154 ; B. Impossible constructions 154 ; C. Constructible numbers 155 ; D. Set-square constructions 158 ; E. Verifications 159 ; F. Comparison of construction tools 161 .	
20 Area	162
A. Solid triangles 162 ; B. Polygonal sets 163 ; C. Definition of area 164 ; D. Vanishing area and subdivisions 165 ; E. Rectangles 167 ; F. Parallelograms 168 ; G. Triangles 170 ; H. Area method 171 ; I. Neutral planes and spheres 173 ; J. Quadrable sets 174 .	
Hints	176
Index	194
Used resources	197

Preface

This book is meant to be rigorous, conservative, elementary, and minimalist. At the same time, it includes about the maximum that students can absorb in one semester.

The present book is based on courses given by the author at Pennsylvania State University. These lectures were oriented toward sophomore and senior university students who are familiar with real numbers and continuity. It makes it possible to cover the material faster and in a more rigorous way than it could be done in high school. Approximately one-third of the material used to be covered in high school, but not anymore.

A Prerequisite

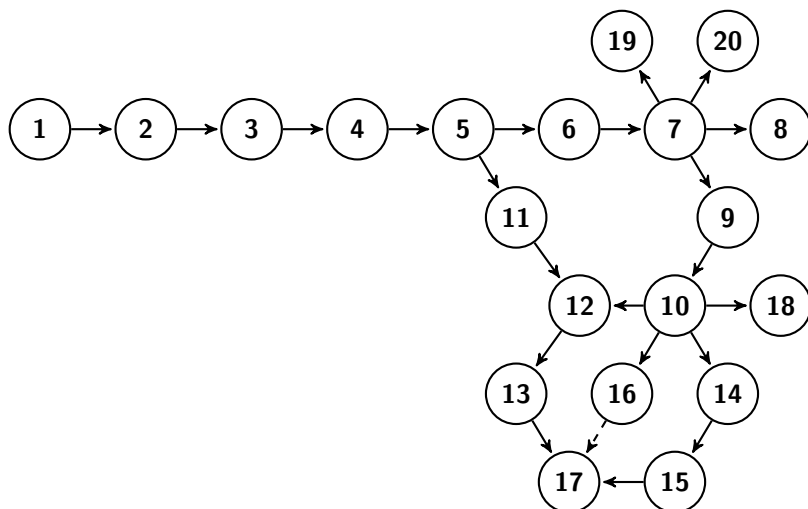
The students should be familiar with the following topics:

- ◇ Elementary set theory: \in , \cup , \cap , \setminus , \subset , \times .
- ◇ Real numbers: intervals, inequalities, algebraic identities.
- ◇ Limits, continuous functions, and the intermediate value theorem.
- ◇ Standard functions: absolute value, natural logarithm, exponential function. Occasionally, trigonometric functions are used.
- ◇ Chapter 14 uses basic vector algebra.
- ◇ To read Chapter 16, it is better to have some previous experience with the *scalar product*, also known as the *dot product*.
- ◇ To read Chapter 18, it is better to have some previous experience with complex numbers.

B Overview

We use the so-called *metric approach* introduced by Birkhoff. It means that we define the Euclidean plane as a *metric space* that satisfies a list of properties (*axioms*). This way we minimize the tedious parts which are unavoidable in the more classical Hilbert's approach. At the same time, the students have a chance to learn the geometry of metric spaces.

Here is a dependency graph of the chapters.



In (1) we introduce the concepts necessary to formulate the axioms; it includes metric spaces, lines, angle measure, continuous maps, and congruent triangles.

Next, we dive into Euclidean geometry: (2) Axioms and immediate corollaries; (3) Half-planes and continuity; (4) Congruent triangles; (5) Circles, motions, and perpendicular lines; (6) Similar triangles and (7) Parallel lines — these are the first two chapters where we use Axiom V, an equivalent of Euclid’s parallel postulate. In (8) we give the most classical theorems of triangle geometry; this chapter is included mainly as an illustration.

In the following two chapters, we discuss the geometry of circles on the Euclidean plane: (9) Inscribed angles; (10) Inversion. It will be used to construct the model of the hyperbolic plane.

Next, we discuss non-Euclidean geometry: (11) Neutral geometry — geometry without the parallel postulate; (12) Conformal disc model — this is a construction of the hyperbolic plane, an example of a neutral plane that is not Euclidean. In (13) we discuss geometry of the constructed hyperbolic plane — this is the highest point in the book.

In the remaining chapters, we discuss additional topics: (14) Affine geometry; (15) Projective geometry; (16) Spherical geometry; (17) Projective model of the hyperbolic plane; (18) Complex coordinates; (19) Geometric constructions; (20) Area. The proofs in these chapters are not completely rigorous.

We encourage the use of visual assignments on the author’s website.

C Disclaimer

Most of the proofs in the book already appeared in Euclid's Elements. I did not try to find original references; it is an impossible task.

D Recommended resources

- ◇ Byrne's Euclid [7] — a colored version of the first six books of Euclid's Elements edited by Oliver Byrne.
- ◇ Kiselyov's geometry [12] — a classical textbook for school students written by Andrey Kiselyov; it should help if you have trouble following this book.
- ◇ Lessons in Geometry by Jacques Hadamard [11] — an encyclopedia of elementary geometry originally written for school teachers.
- ◇ Problems in geometry by Victor Prasolov [17] is perfect for mastering your problem-solving skills.
- ◇ Geometry in figures by Arseniy Akopyan [1] — an encyclopedia of Euclidean geometry with barely any words.
- ◇ Euclidean [10] — a fun and challenging way to learn Euclidean constructions.
- ◇ Geometry by Igor Sharygin [19] — the greatest textbook in geometry for school students, I recommend it to anyone who can read Russian.
- ◇ problems.ru [22] — an on-line collection of problems in Russian.

E Acknowledgments

Let me thank Stephanie Alexander, Thomas Barthelme, Matthew Chao, Quinn Culver, Svetlana Katok, Nina Lebedeva, Alexander Lytchak, Alexei Novikov, and Lukeria Petrunina for useful suggestions and for correcting misprints.

This work was partially supported by NSF grants DMS-0103957, DMS-0406482, DMS-0905138, DMS-1309340, DMS-2005279, and Simons Foundation grants 245094, 584781.

Chapter 1

Preliminaries

A What is the axiomatic approach?

In the axiomatic approach, one defines the plane as anything that satisfies a specified set of properties known as axioms. These axioms essentially serve as the rules for a mathematical game. Once the axiom system is fixed, a statement is true if it logically follows from the axioms, and nothing else is.

The formulations of the first axioms were not rigorous at all. For example, Euclid described a line as *breadthless length* and a straight line as a line that *lies evenly with the points on itself*. However, these formulations were clear enough for one mathematician to understand another.

The best way to understand an axiomatic system is to make one by yourself. For now, let's assume an intuitive understanding of concepts like lines and points. Imagine an infinite and perfect surface of a chalkboard. Let us try to collect the key observations about this model.

- (i) We can measure distances between points.
- (ii) We can draw a unique line thru two given points.
- (iii) We can measure angles.
- (iv) If we rotate or shift we will not see the difference.
- (v) If we change the scale we will not see the difference.

These observations are good to start with. Later, we will develop a language to reformulate them rigorously.

B What is a model?

The Euclidean plane can be defined rigorously the following way:

Define a point in the Euclidean plane as a pair of real numbers (x, y) and define the distance between two points (x_1, y_1) and (x_2, y_2) by the following formula:

$$\sqrt{(x_1 - x_2)^2 + (y_1 - y_2)^2}.$$

That is it! We gave a numerical model of the Euclidean plane; it builds the Euclidean plane from real numbers while the latter is assumed to be known.

Shortness is the main advantage of the model approach, but it is not intuitively clear why we define points and distances this way.

On the other hand, the observations made in the previous section are intuitively obvious — this is the primary advantage of the axiomatic approach. Another advantage — the axiomatic approach is easily adjustable. For example, we can remove or replace an axiom from the list. We will do it in Chapter 11.

C Metric spaces

The concept of a metric space provides a rigorous way to say: “we can measure distances between points”. That is, instead of (i) in Section 1A, we can say “Euclidean plane is a metric space”.

1.1. Definition. Let \mathcal{X} be a nonempty set and let d be a function that assigns a real number $d(A, B)$ to any pair $A, B \in \mathcal{X}$. Then d is called a metric on \mathcal{X} if, for any $A, B, C \in \mathcal{X}$, the following conditions are satisfied:

- (a) Positiveness: $d(A, B) \geq 0$.
- (b) $A = B$ if and only if $d(A, B) = 0$.
- (c) Symmetry: $d(A, B) = d(B, A)$.
- (d) Triangle inequality: $d(A, C) \leq d(A, B) + d(B, C)$.

A metric space is defined as a set equipped with a metric. More formally, a metric space is a pair (\mathcal{X}, d) where \mathcal{X} is a set and d is a metric on \mathcal{X} .

The elements of \mathcal{X} are referred to as points of the metric space. The value $d(A, B)$ is called the distance from A to B .

Examples

- ◊ Discrete metric. Let \mathcal{X} be an arbitrary set. For any $A, B \in \mathcal{X}$ set $d(A, B) = 0$ if $A = B$ and $d(A, B) = 1$ otherwise. The metric d is called the discrete metric on \mathcal{X} .
- ◊ Real line. Set of all real numbers (\mathbb{R}) with the metric d defined as

$$d(A, B) := |A - B|.$$

1.2. Exercise. Show that $d(A, B) = |A - B|^2$ is not a metric on \mathbb{R} .

- ◊ Metrics on the plane. Suppose that \mathbb{R}^2 denotes the set of all pairs (x, y) of real numbers. Assume $A = (x_A, y_A)$ and $B = (x_B, y_B)$. Consider the following metrics on \mathbb{R}^2 :

- Euclidean metric, denoted by d_2 , and defined as

$$d_2(A, B) = \sqrt{(x_A - x_B)^2 + (y_A - y_B)^2}.$$

- Manhattan metric, denoted by d_1 and defined as

$$d_1(A, B) = |x_A - x_B| + |y_A - y_B|.$$

- Maximum metric, denoted by d_∞ and defined as

$$d_\infty(A, B) = \max\{|x_A - x_B|, |y_A - y_B|\}.$$

1.3. Exercise. Prove that the following functions are metrics on \mathbb{R}^2 :
(a) d_1 ; (b) d_2 ; (c) d_∞ .

D Shortcut for distance

Most of the time, we need only one metric on a space. Therefore, we will not need to name the metric each time.

Given a metric space \mathcal{X} , the distance between points A and B will be further denoted by

$$AB \quad \text{or} \quad d_{\mathcal{X}}(A, B);$$

the latter is used only if we need to emphasize that A and B are points of the metric space \mathcal{X} .

For example, the triangle inequality can be written as

$$AC \leq AB + BC.$$

To avoid confusion, we will always use “ \cdot ” for multiplication, so AB is not mistaken for $A \cdot B$.

1.4. Exercise. Show that the inequality

$$AB + PQ \leq AP + AQ + BP + BQ$$

holds for any four points A, B, P, Q in a metric space.

E Isometries, motions, and lines

In this section, we define lines in a metric space. Once it is done the sentence “*We can draw a unique line that passes thru two given points.*” becomes rigorous; see (ii) in Section 1A.

Recall that a map $f: \mathcal{X} \rightarrow \mathcal{Y}$ is a bijection if it gives an exact pairing of the elements of two sets. Equivalently, $f: \mathcal{X} \rightarrow \mathcal{Y}$ is a bijection if it has an inverse; that is, a map $g: \mathcal{Y} \rightarrow \mathcal{X}$ such that $g(f(A)) = A$ for any $A \in \mathcal{X}$ and $f(g(B)) = B$ for any $B \in \mathcal{Y}$.

Let \mathcal{X} and \mathcal{Y} be two metric spaces and $d_{\mathcal{X}}, d_{\mathcal{Y}}$ be their metrics. A map

$$f: \mathcal{X} \rightarrow \mathcal{Y}$$

is called distance-preserving if

$$d_{\mathcal{Y}}(f(A), f(B)) = d_{\mathcal{X}}(A, B)$$

for any $A, B \in \mathcal{X}$.

A bijective distance-preserving map is called an isometry.

Two metric spaces are called isometric if there exists an isometry between them.

An isometry from a metric space to itself is also referred a motion.

1.5. Exercise. *Show that any distance-preserving map is injective; that is, if $f: \mathcal{X} \rightarrow \mathcal{Y}$ is a distance-preserving map, then $f(A) \neq f(B)$ for any pair of distinct points $A, B \in \mathcal{X}$.*

1.6. Exercise. *Show that if $f: \mathbb{R} \rightarrow \mathbb{R}$ is a motion of the real line, then either (a) $f(x) = f(0) + x$ for any $x \in \mathbb{R}$, or (b) $f(x) = f(0) - x$ for any $x \in \mathbb{R}$.*

1.7. Exercise. *Prove that (\mathbb{R}^2, d_1) is isometric to $(\mathbb{R}^2, d_{\infty})$.*

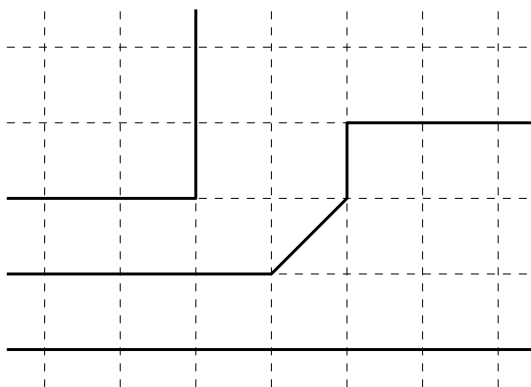
1.8. Advanced exercise. *Describe all the motions of the Manhattan plane (defined in 1.2).*

If \mathcal{X} is a metric space and \mathcal{Y} is a subset of \mathcal{X} , then a metric on \mathcal{Y} can be obtained by restricting the metric from \mathcal{X} . In other words, the distance between two points in \mathcal{Y} is defined to be the distance between these points in \mathcal{X} . This way any subset of a metric space can be also considered as a metric space.

1.9. Definition. *A subset ℓ of a metric space is called a line if it is isometric to the real line.*

A triple of points that lie on one line is called collinear. Note that if A, B , and C are collinear, $AC \geq AB$, and $AC \geq BC$, then $AC = AB + BC$.

Some metric spaces have no lines; for example, discrete metrics. The picture shows examples of lines on the Manhattan plane (\mathbb{R}^2, d_1) .



1.10. Exercise. Consider the graph $y = |x|$ in \mathbb{R}^2 . Determine in which of the following spaces (a) (\mathbb{R}^2, d_1) , (b) (\mathbb{R}^2, d_2) , (c) (\mathbb{R}^2, d_∞) does it form a line? Why?

1.11. Exercise. Show that any motion maps a line to a line.

F Half-lines and segments

Assume there is a line ℓ passing thru two distinct points P and Q . In this case, we might denote ℓ as (PQ) . There might be more than one line thru P and Q , but if we write (PQ) we assume that we made a choice of such a line.

We will denote by $[PQ)$ the half-line that starts at P and contains Q . Formally speaking, $[PQ)$ is a subset of (PQ) that corresponds to $[0, \infty)$ under an isometry $f: (PQ) \rightarrow \mathbb{R}$ such that $f(P) = 0$ and $f(Q) > 0$.

The subset of line (PQ) between P and Q is called the segment between P and Q ; it is denoted by $[PQ]$. Formally, the segment can be defined as the intersection of two half-lines: $[PQ] = [PQ) \cap [QP)$.

1.12. Exercise. Show that

- (a) if $X \in [PQ)$, then $QX = |PX - PQ|$;
- (b) if $X \in [PQ]$, then $PX + XQ = PQ$.

G Angles

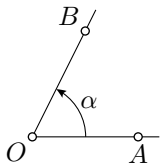
Our next goal is to introduce angles and angle measures; after that, the statement “we can measure angles” will become rigorous; see (iii) in Sec-

tion 1A.

An ordered pair of half-lines that start at the same point is called an angle. The angle AOB (also denoted by $\angle AOB$) is the pair of half-lines $[OA)$ and $[OB)$; the point O is called the vertex of the angle.

Intuitively, the angle measure tells how much one has to rotate the first half-line counterclockwise, so it gets the position of the second half-line of the angle. The full turn is assumed to be $2\cdot\pi$; it corresponds to the angle measure in radians.¹

The angle measure of $\angle AOB$ is denoted as $\angle AOB$; it is a real number in the interval $(-\pi, \pi]$.



The notations $\angle AOB$ and $\angle AOB$ look similar; they also have close but different meanings which better not be confused. For example, the equality $\angle AOB = \angle A'O'B'$ means that $[OA) = [O'A')$ and $[OB) = [O'B')$; in particular, $O = O'$. On the other hand, the equality $\angle AOB = \angle A'O'B'$ means only equality of two real numbers; in this case, O may be distinct from O' .

Here is the first property of angle measure which will become a part of the axiom. *Given a half-line $[OA)$ and $\alpha \in (-\pi, \pi]$ there is a unique half-line $[OB)$ such that $\angle AOB = \alpha$.*

H Reals modulo $2\cdot\pi$

Consider three half-lines starting from the same point, $[OA)$, $[OB)$, and $[OC)$. They make three angles AOB , BOC , and AOC , so the value $\angle AOC$ should coincide with the sum $\angle AOB + \angle BOC$ up to full rotation. This property will be expressed by the formula

$$\angle AOB + \angle BOC \equiv \angle AOC,$$

where “ \equiv ” is a new notation that we are about to introduce. The last identity will become a part of the axioms.

We will write $\alpha \equiv \beta \pmod{2\cdot\pi}$, or briefly

$$\alpha \equiv \beta$$

if $\alpha = \beta + 2\cdot\pi\cdot n$ for an integer n . In this case, we say

“ α is equal to β modulo $2\cdot\pi$ ”.

For example, $-\pi \equiv \pi \equiv 3\cdot\pi$ and $\frac{1}{2}\cdot\pi \equiv -\frac{3}{2}\cdot\pi$.

¹For now, you can think of π as a the size of a half-turn in specific units. Its numerical value, $\pi \approx 3.14$, is not essential at this stage.

The introduced relation “ \equiv ” behaves like an equality sign, but

$$\dots \equiv \alpha - 2 \cdot \pi \equiv \alpha \equiv \alpha + 2 \cdot \pi \equiv \alpha + 4 \cdot \pi \equiv \dots;$$

that is, if the angle measures differ by full turn, then they are considered to be the same.

With “ \equiv ”, we can do addition, subtraction, and multiplication with integer numbers without getting into trouble. That is, if

$$\alpha \equiv \beta \quad \text{and} \quad \alpha' \equiv \beta',$$

then

$$\alpha + \alpha' \equiv \beta + \beta', \quad \alpha - \alpha' \equiv \beta - \beta' \quad \text{and} \quad n \cdot \alpha \equiv n \cdot \beta$$

for any integer n . However, “ \equiv ” does not respect multiplication with non-integer numbers; for example,

$$\pi \equiv -\pi \quad \text{but} \quad \frac{1}{2} \cdot \pi \not\equiv -\frac{1}{2} \cdot \pi.$$

1.13. Exercise. Show that $2 \cdot \alpha \equiv 0$ if and only if $\alpha \equiv 0$ or $\alpha \equiv \pi$.

I Continuity

The angle measure is also assumed to be continuous. Namely, the following property of angle measure will become a part of the axioms:

The function

$$\angle: (A, O, B) \mapsto \angle AOB$$

is continuous at any triple of points (A, O, B) such that $O \neq A$ and $O \neq B$ and $\angle AOB \neq \pi$.

To clarify this property, we need to extend the concept of continuity to functions between metric spaces. The definition is a straightforward generalization of the standard definition for real-to-real functions.

Let \mathcal{X} and \mathcal{Y} be two metric spaces, and $d_{\mathcal{X}}$, $d_{\mathcal{Y}}$ be their metrics.

A map $f: \mathcal{X} \rightarrow \mathcal{Y}$ is called continuous at point $A \in \mathcal{X}$ if, for any $\varepsilon > 0$, there is $\delta > 0$, such that

$$d_{\mathcal{X}}(A, A') < \delta \quad \Rightarrow \quad d_{\mathcal{Y}}(f(A), f(A')) < \varepsilon.$$

(Informally it means that sufficiently small changes of A result in arbitrarily small changes of $f(A)$.)

A map $f: \mathcal{X} \rightarrow \mathcal{Y}$ is called continuous if it is continuous at every point $A \in \mathcal{X}$.

One may define a continuous map of several variables in a similar manner. Assume f is a function that returns a point in \mathcal{Y} for a triple of

points (A, B, C) in \mathcal{X} . The map f might be defined only for some triples in \mathcal{X} .

Assume $f(A, B, C)$ is defined. Then, we say that f is continuous at the triple (A, B, C) if, for any $\varepsilon > 0$, there is $\delta > 0$ such that

$$d_{\mathcal{Y}}(f(A, B, C), f(A', B', C')) < \varepsilon.$$

if $d_{\mathcal{X}}(A, A') < \delta$, $d_{\mathcal{X}}(B, B') < \delta$, and $d_{\mathcal{X}}(C, C') < \delta$.

1.14. Exercise. Let \mathcal{X} be a metric space.

(a) Let $A \in \mathcal{X}$ be a fixed point. Show that the function

$$f: B \mapsto d_{\mathcal{X}}(A, B)$$

is continuous at any point B .

(b) Show that the function $g: (A, B) \mapsto d_{\mathcal{X}}(A, B)$ is continuous at any pair $A, B \in \mathcal{X}$.

1.15. Exercise. Let \mathcal{X} , \mathcal{Y} , and \mathcal{Z} be metric spaces. Assume that the functions $f: \mathcal{X} \rightarrow \mathcal{Y}$ and $g: \mathcal{Y} \rightarrow \mathcal{Z}$ are continuous at any point, and $h = g \circ f$ is their composition; that is, $h(A) = g(f(A))$ for any $A \in \mathcal{X}$. Show that $h: \mathcal{X} \rightarrow \mathcal{Z}$ is continuous at any point.

1.16. Exercise. Show that any distance-preserving map is continuous.

J Congruent triangles

Our next goal is to find a rigorous interpretation for statement (iv) in Section 1A. To do this, we will introduce the concept of congruent triangles so instead of “if we rotate or shift we will not see the difference” we say that for triangles, the side-angle-side congruence holds.

An ordered triple of *distinct* points in a metric space \mathcal{X} , say A, B, C , is called a triangle ABC (briefly $\triangle ABC$). Note that the triangles ABC and ACB are different.

Two triangles $A'B'C'$ and ABC are congruent (briefly $\triangle A'B'C' \cong \triangle ABC$) if there is a motion $f: \mathcal{X} \rightarrow \mathcal{X}$ such that

$$A' = f(A), \quad B' = f(B) \quad \text{and} \quad C' = f(C).$$

Let \mathcal{X} be a metric space, and $f, g: \mathcal{X} \rightarrow \mathcal{X}$ be two motions. Note that the inverse $f^{-1}: \mathcal{X} \rightarrow \mathcal{X}$, as well as the composition $f \circ g: \mathcal{X} \rightarrow \mathcal{X}$, are also motions.

It follows that “ \cong ” is an equivalence relation; that is, any triangle is congruent to itself, and the following two conditions hold:

- ◊ If $\triangle A'B'C' \cong \triangle ABC$, then $\triangle ABC \cong \triangle A'B'C'$.

◇ If $\triangle A''B''C'' \cong \triangle A'B'C'$ and $\triangle A'B'C' \cong \triangle ABC$, then

$$\triangle A''B''C'' \cong \triangle ABC.$$

Note that if $\triangle A'B'C' \cong \triangle ABC$, then $AB = A'B'$, $BC = B'C'$ and $CA = C'A'$.

For a discrete metric, as well as some other metrics, the converse also holds. The following example shows that it does not hold in the Manhattan plane:

Example. Consider three points $A = (0, 1)$, $B = (1, 0)$, and $C = (-1, 0)$ on the Manhattan plane (\mathbb{R}^2, d_1) . Note that

$$d_1(A, B) = d_1(A, C) = d_1(B, C) = 2.$$

On one hand,

$$\triangle ABC \cong \triangle ACB.$$

Indeed, the map $(x, y) \mapsto (-x, y)$ is a motion of (\mathbb{R}^2, d_1) that sends $A \mapsto A$, $B \mapsto C$, and $C \mapsto B$.

On the other hand,

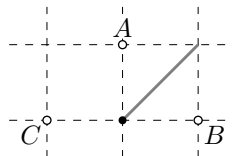
$$\triangle ABC \not\cong \triangle BCA.$$

Indeed, arguing by contradiction, assume that $\triangle ABC \cong \triangle BCA$; that is, there is a motion f of (\mathbb{R}^2, d_1) that sends $A \mapsto B$, $B \mapsto C$, and $C \mapsto A$.

We say that M is a midpoint of A and B if

$$d_1(A, M) = d_1(B, M) = \frac{1}{2} \cdot d_1(A, B).$$

Note that a point M is a midpoint of A and B if and only if $f(M)$ is a midpoint of B and C .



The set of midpoints for A and B is infinite, it contains all points (t, t) for $t \in [0, 1]$ (it is the gray segment in the picture above). In contrast, the midpoint for B and C is unique. Thus, the map f cannot be bijective, leading to a contradiction.

1.17. Exercise. Consider a metric space with four points A, B, C, D and a metric defined by $AB = AC = AD = BC = BD = 1$, and $CD = 2$. Show that (a) $\triangle ABC \cong \triangle BAC$, and (b) $\triangle ABC \not\cong \triangle BCA$.

Chapter 2

Axioms

A system of axioms appears already in Euclid’s “Elements” — the most successful and influential textbook ever written.

The systematic study of geometries as axiomatic systems was triggered by the discovery of non-Euclidean geometry. The branch of mathematics, emerging this way, is called “Foundations of geometry”.

The most popular system of axioms was proposed by David Hilbert in 1899. This is also the first rigorous system by modern standards. It consists of twenty axioms in five groups, six “primitive notions”, and three “primitive terms”; these are not defined in terms of previously defined concepts.

Later many different systems were proposed. It is worth mentioning the system developed by Alexandr Alexandrov [2] which is intuitive and elementary, the system by Friedrich Bachmann [3] based on the concept of symmetry, and the system by Alfred Tarski [20] — a minimalist system designed for analysis using mathematical logic.

We will use another system close to the one proposed by George Birkhoff [5]. It is based on the key observations (i)–(v) listed in Section 1A. The axioms use the notions of metric space, lines, angles, triangles, equalities modulo $2\cdot\pi$ (\equiv), the continuity of maps between metric spaces, and the congruence of triangles (\cong). All of these concepts are discussed in the preliminaries.

Our system is built upon metric spaces. In particular, we use real numbers as a building block. For this reason our approach is not purely axiomatic — we build the theory upon something else; it resembles a model-based introduction to Euclidean geometry discussed in Section 1B. We used this approach to minimize the tedious parts which are unavoidable in purely axiomatic foundations.

A The axioms

- I. The Euclidean plane is a metric space with at least two points.
- II. There is one and only one line that contains any two given distinct points P and Q in the Euclidean plane.
- III. Any angle AOB in the Euclidean plane defines a real number in the interval $(-\pi, \pi]$. This number is called the angle measure of $\angle AOB$ and is denoted by $\angle AOB$. It satisfies the following conditions:

(a) Given a half-line $[OA)$ and $\alpha \in (-\pi, \pi]$, there is a unique half-line $[OB)$, such that $\angle AOB = \alpha$.

(b) For any points A , B , and C , distinct from O we have

$$\angle AOB + \angle BOC \equiv \angle AOC.$$

(c) The function

$$\angle: (A, O, B) \mapsto \angle AOB$$

is continuous at any triple of points (A, O, B) , such that $O \neq A$ and $O \neq B$ and $\angle AOB \neq \pi$.

- IV. In the Euclidean plane, we have $\triangle ABC \cong \triangle A'B'C'$ if and only if

$$A'B' = AB, \quad A'C' = AC, \quad \text{and} \quad \angle C'A'B' = \pm \angle CAB.$$

- V. If for two triangles ABC , $AB'C'$ in the Euclidean plane and for $k > 0$ we have

$$\begin{aligned} B' &\in [AB), & C' &\in [AC), \\ AB' &= k \cdot AB, & AC' &= k \cdot AC, \end{aligned}$$

then

$$B'C' = k \cdot BC, \quad \angle ABC = \angle AB'C', \quad \angle ACB = \angle AC'B'.$$

From now on, we can use no information about the Euclidean plane that does not follow from the five axioms above.

2.1. Exercise. Show that there are (a) an infinite set of points, (b) an infinite set of lines on the plane.

B Lines and half-lines

2.2. Proposition.[✓] *Any two distinct lines intersect at most at one point.*

Proof. Assume that two lines ℓ and m intersect at two distinct points P and Q . Applying Axiom II, we get that $\ell = m$. \square

2.3. Exercise. *Suppose $A' \in [OA)$ and $A' \neq O$. Show that*

$$[OA) = [OA').$$

2.4. Proposition.[✓] *Given $r \geq 0$ and a half-line $[OA)$ there is a unique $A' \in [OA)$ such that $OA' = r$.*

Proof. According to the definition of a half-line, there is an isometry

$$f: [OA) \rightarrow [0, \infty)$$

such that $f(O) = 0$. By the definition of an isometry, $OA' = f(A')$ for any $A' \in [OA)$. Thus, $OA' = r$ if and only if $f(A') = r$.

Since an isometry must be bijective, the statement follows. \square

C Zero angle

2.5. Proposition.[✓] $\angle AOA = 0$ for any $A \neq O$.

Proof. According to Axiom IIIb,

$$\angle AOA + \angle AOA \equiv \angle AOA.$$

Subtract $\angle AOA$ from both sides, we get that $\angle AOA \equiv 0$.

By Axiom III, $-\pi < \angle AOA \leq \pi$; therefore $\angle AOA = 0$. \square

2.6. Exercise. *Assume $\angle AOB = 0$. Show that $[OA) = [OB)$.*

2.7. Proposition.[✓] *For any A and B distinct from O , we have*

$$\angle AOB \equiv -\angle BOA.$$

Proof. According to Axiom IIIb,

$$\angle AOB + \angle BOA \equiv \angle AOA.$$

By Proposition 2.5, $\angle AOA = 0$. Hence the result. \square

[✓] The mark “✓” indicates that Axiom V is not used in the proof. Please ignore this mark for now; it will become important in Chapter 11.

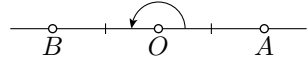
D Straight angle

If $\angle AOB = \pi$, we say that $\angle AOB$ is a straight angle. Note that by Proposition 2.7, if $\angle AOB$ is straight, then so is $\angle BOA$.

We say that point O lies between points A and B , if $O \neq A$, $O \neq B$, and $O \in [AB]$.

2.8. Theorem. *An angle AOB is straight if and only if O lies between A and B .*

Proof. By Proposition 2.4, we may assume that $OA = OB = 1$.



“If” part. Assume O lies between A and B . Set $\alpha = \angle AOB$.

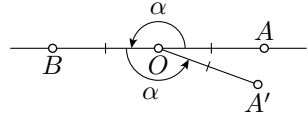
Applying Axiom IIIa, we get a half-line $[OA')$ such that $\alpha = \angle BOA'$. By Proposition 2.4, we can assume that $OA' = 1$. According to Axiom IV,

$$\triangle AOB \cong \triangle BOA'$$

Suppose that f denotes the corresponding motion of the plane; that is, f is a motion such that $f(A) = B$, $f(O) = O$, and $f(B) = A'$.

Then

$$(A'B) = f((AB)) \ni f(O) = O.$$



Therefore, both lines (AB) and $(A'B)$ contain B and O . By Axiom II, $(AB) = (A'B)$.

By the definition of a line, (AB) contains exactly two points A and B at distance 1 from O . Since $OA' = 1$ and $A' \neq B$, we get that $A = A'$.

By Axiom IIIb and Proposition 2.5, we get that

$$\begin{aligned} 2 \cdot \alpha &= \angle AOB + \angle BOA' = \\ &= \angle AOB + \angle BOA \equiv \\ &\equiv \angle AOA = \\ &= 0. \end{aligned}$$

Therefore, by Exercise 1.13, α is either 0 or π .

Since $[OA] \neq [OB]$, we have that $\alpha \neq 0$, see Exercise 2.6. Therefore, $\alpha = \pi$.

“Only if” part. Suppose that $\angle AOB = \pi$. Consider the line (OA) and choose a point B' on (OA) so that O lies between A and B' .

From above, we have that $\angle AOB' = \pi$. Applying Axiom IIIa, we get that $[OB) = [OB')$. In particular, O lies between A and B . \square

A triangle ABC is called degenerate if A , B , and C lie on one line. The following corollary is just a reformulation of Theorem 2.8.

2.9. Corollary.[✓] *A triangle is degenerate if and only if one of its angles is equal to π or 0. Moreover, in a degenerate triangle, the angle measures are 0, 0, and π .*

2.10. Exercise. *Show that three distinct points A , O , and B lie on one line if and only if*

$$2 \cdot \angle AOB \equiv 0.$$

2.11. Exercise. *Let A , B , and C be three points distinct from O . Show that B , O , and C lie on one line if and only if*

$$2 \cdot \angle AOB \equiv 2 \cdot \angle AOC.$$

2.12. Exercise. *Show that there is a nondegenerate triangle.*

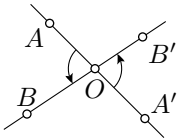
E Vertical angles

A pair of angles AOB and $A'OB'$ is called vertical if point O lies between A and A' and between B and B' at the same time.

2.13. Proposition.[✓] *Vertical angles have equal measures.*

Proof. Assume that the angles AOB and $A'OB'$ are vertical. Note that $\angle AOA'$ and $\angle BOB'$ are straight. Therefore, $\angle AOA' = \angle BOB' = \pi$.

It follows that



$$\begin{aligned} 0 &= \angle AOA' - \angle BOB' \equiv \\ &\equiv \angle AOB + \angle BOA' - \angle BOA' - \angle A'OB' \equiv \\ &\equiv \angle AOB - \angle A'OB'. \end{aligned}$$

Since $-\pi < \angle AOB \leq \pi$ and $-\pi < \angle A'OB' \leq \pi$, we get that $\angle AOB = \angle A'OB'$. □

2.14. Exercise. *Assume O is the midpoint for both segments $[AB]$ and $[CD]$. Prove that $AC = BD$.*

Chapter 3

Half-planes

This chapter contains lengthy proofs of intuitively evident statements. It is okay to skip it, but make sure you understand the definitions of positive/negative angles and that your intuition agrees with statements 3.7, 3.9, 3.10, 3.12, and 3.17.

A Sign of an angle

Positive and negative angles can be visualized as counterclockwise and clockwise directions; they are defined the following way:

- ◇ The angle AOB is called positive if $0 < \angle AOB < \pi$;
- ◇ The angle AOB is called negative if $\angle AOB < 0$.

Note that according to the above definitions the straight angle, as well as the zero angle, are neither positive nor negative.

3.1. Exercise. *Show that $\angle AOB$ is positive if and only if $\angle BOA$ is negative.*

3.2. Lemma. *Let $\angle AOB$ be straight. Then $\angle AOX$ is positive if and only if $\angle BOX$ is negative.*

Proof. Set $\alpha = \angle AOX$ and $\beta = \angle BOX$. Since $\angle AOB$ is straight,

$$\textcircled{1} \quad \alpha - \beta \equiv \pi.$$

It follows that $\alpha = \pi \Leftrightarrow \beta = 0$ and $\alpha = 0 \Leftrightarrow \beta = \pi$. In these two cases, the signs of $\angle AOX$ and $\angle BOX$ are undefined.

In the remaining cases we have that $|\alpha| < \pi$ and $|\beta| < \pi$. If α and β have the same sign, then $|\alpha - \beta| < \pi$; the latter contradicts $\textcircled{1}$. Hence the statement follows. \square

3.3. Exercise. Assume that angles ABC and $A'B'C'$ have the same sign and

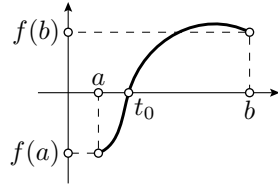
$$2 \cdot \angle ABC \equiv 2 \cdot \angle A'B'C'.$$

Show that $\angle ABC = \angle A'B'C'$.

B Intermediate value theorem

3.4. Intermediate value theorem. Let $f: [a, b] \rightarrow \mathbb{R}$ be a continuous function. Assume $f(a)$ and $f(b)$ have opposite signs. Then $f(t_0) = 0$ for some $t_0 \in [a, b]$.

The intermediate value theorem is assumed to be known; it should be covered in any calculus course. We will use only the following corollary:



3.5. Corollary. Assume that for any $t \in [0, 1]$ we have three points in the plane O_t , A_t , and B_t , such that

- (a) Each function $t \mapsto O_t$, $t \mapsto A_t$, and $t \mapsto B_t$ is continuous.
 - (b) For any $t \in [0, 1]$, the points O_t , A_t , and B_t do not lie on one line.
- Then $\angle A_0 O_0 B_0$ and $\angle A_1 O_1 B_1$ have the same sign.

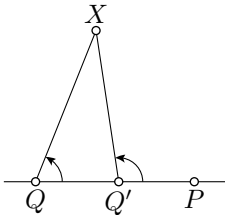
Proof. Consider the function $f(t) = \angle A_t O_t B_t$.

Since the points O_t , A_t , and B_t do not lie on one line, Theorem 2.8 implies that $f(t) = \angle A_t O_t B_t \neq 0$ nor π for any $t \in [0, 1]$.

Therefore, by Axiom IIIc and Exercise 1.15, f is a continuous function. By the intermediate value theorem, $f(0)$ and $f(1)$ have the same sign; hence the result follows. □

C Same sign lemmas

3.6. Lemma. Assume $Q' \in [PQ)$ and $Q' \neq P$. Then for any $X \notin \ell(PQ)$ the angles PQX and $PQ'X$ have the same sign.



Proof. By Proposition 2.4, for any $t \in [0, 1]$ there is a unique point $Q_t \in [PQ)$ such that

$$PQ_t = (1 - t) \cdot PQ + t \cdot PQ'.$$

Note that the map $t \mapsto Q_t$ is continuous,

$$Q_0 = Q, \quad Q_1 = Q'$$

and for any $t \in [0, 1]$, we have that $P \neq Q_t$.

Applying Corollary 3.5, for $P_t = P$, Q_t , and $X_t = X$, we get that $\angle PQX$ has the same sign as $\angle PQ'X$. \square

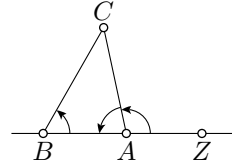
3.7. Signs of angles of a triangle.[✓] *In arbitrary nondegenerate triangle ABC , the angles ABC , BCA , and CAB have the same sign.*

Proof. Choose a point $Z \in (AB)$ so that A lies between B and Z .

According to Lemma 3.6, the angles ZBC and ZAC have the same sign.

Note that $\angle ABC = \angle ZBC$ and

$$\angle ZAC + \angle CAB \equiv \pi.$$



Therefore, $\angle CAB$ has the same sign as $\angle ZAC$ which in turn has the same sign as $\angle ABC = \angle ZBC$.

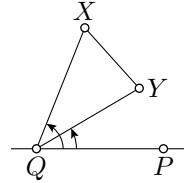
Repeating the same argument for $\angle BCA$ and $\angle CAB$, we get the result. \square

3.8. Lemma.[✓] *Assume $[XY]$ does not intersect (PQ) , then angles PQX and PQY have the same sign.*

The proof is nearly identical to the one above.

Proof. According to Proposition 2.4, for any $t \in [0, 1]$ there is a point $X_t \in [XY]$, such that

$$XX_t = t \cdot XY.$$

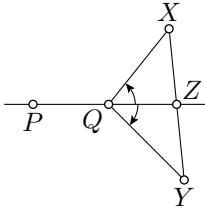


Note that the map $t \mapsto X_t$ is continuous. Moreover, $X_0 = X$, $X_1 = Y$, and $X_t \notin (PQ)$ for any $t \in [0, 1]$.

Applying Corollary 3.5, for $P_t = P$, $Q_t = Q$, and X_t , we get that $\angle PQX$ has the same sign as $\angle PQY$. \square

D Half-planes

3.9. Proposition. *Assume $X, Y \notin (PQ)$. Then angles PQX and PQY have the same sign if and only if $[XY]$ does not intersect (PQ) .*



Proof. The if-part follows from Lemma 3.8.

Assume $[XY]$ intersects (PQ) ; suppose that Z denotes the point of intersection. Without loss of generality, we can assume $Z \neq P$.

Note that Z lies between X and Y . According to Lemma 3.2, $\angle PZX$ and $\angle PZY$ have opposite signs. It proves the statement if $Z = Q$.

If $Z \neq Q$, then $\angle ZQX$ and $\angle QZX$ have opposite signs by 3.7. In the same way, we get that $\angle ZQY$ and $\angle QZY$ have opposite signs.

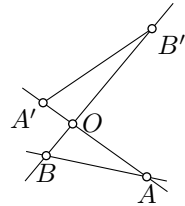
If Q lies between Z and P , then by Lemma 3.2 two pairs of angles $\angle PQX$, $\angle ZQX$ and $\angle PQY$, $\angle ZQY$ have opposite signs. It follows that $\angle PQX$ and $\angle PQY$ have opposite signs as required.

In the remaining case $[QZ] = [QP]$ and therefore $\angle PQX = \angle ZQX$ and $\angle PQY = \angle ZQY$. Therefore again $\angle PQX$ and $\angle PQY$ have opposite signs as required. \square

3.10. Corollary. *The complement of a line (PQ) in the plane can be presented in a unique way as a union of two disjoint subsets called half-planes such that*

- (a) *Two points $X, Y \notin (PQ)$ lie in the same half-plane if and only if the angles PQX and PQY have the same sign.*
- (b) *Two points $X, Y \notin (PQ)$ lie in the same half-plane if and only if $[XY]$ does not intersect (PQ) .*

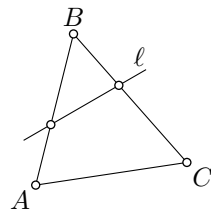
We say that X and Y lie on one side of (PQ) if they lie in one of the half-planes of (PQ) and we say that P and Q lie on opposite sides of ℓ if they lie in different half-planes of ℓ .



3.11. Exercise. *Suppose that angles AOB and $A'OB'$ are vertical and $B \notin (OA)$. Show that the line (AB) does not intersect the segment $[A'B']$.*

Consider the triangle ABC . Segments $[AB]$, $[BC]$, and $[CA]$ are called the sides of the triangle.

3.12. Pasch's theorem. *Assume that a line ℓ does not pass thru any vertex of a triangle. Then it intersects either two or zero sides of the triangle.*

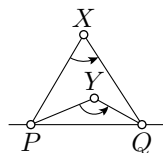


Proof. Assume that line ℓ intersects side $[AB]$ of the triangle ABC and does not pass thru A , B , and C .

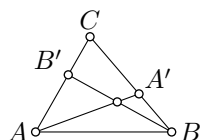
By Corollary 3.10, the vertices A and B lie on opposite sides of ℓ .

The vertex C may lie on the same side with A and on the opposite side with B or the other way around. By Corollary 3.10, in the first case, ℓ intersects side $[BC]$ and does not intersect $[AC]$; in the second case, ℓ intersects side $[AC]$ and does not intersect $[BC]$. Hence the statement follows. \square

3.13. Exercise. Show that two points $X, Y \notin (PQ)$ lie on the same side of (PQ) if and only if angles PXQ and PYQ have the same sign.



3.14. Exercise. Let $\triangle ABC$ be a nondegenerate triangle, $A' \in [BC]$ and $B' \in [AC]$. Show that $[AA']$ intersects $[BB']$.



3.15. Exercise. Assume that points X and Y lie on opposite sides of the line (PQ) . Show that $[PX]$ does not intersect $[QY]$.

3.16. Advanced exercise. Note that the following quantity

$$\tilde{\angle}ABC = \begin{cases} \pi & \text{if } \angle ABC = \pi \\ -\angle ABC & \text{if } \angle ABC < \pi \end{cases}$$

can serve as the angle measure; that is, the axioms hold if one exchanges \angle to $\tilde{\angle}$ everywhere.

Show that \angle and $\tilde{\angle}$ are the only possible angle measures on the plane.

Show that without Axiom IIIc, this is no longer true.

E Triangle with given sides

Given $\triangle ABC$, set

$$a = BC, \quad b = CA, \quad c = AB.$$

Without loss of generality, we may assume that

$$a \leq b \leq c.$$

Then all three triangle inequalities for $\triangle ABC$ hold if and only if

$$c \leq a + b.$$

The following theorem states that this is the only restriction on a , b , and c .

3.17. Theorem.[✓] Assume that $0 < a \leq b \leq c \leq a + b$. Then there is a triangle with sides a , b , and c ; that is, there is $\triangle ABC$ such that $a = BC$, $b = CA$, and $c = AB$.

A proof of the following proposition is given at the end of the section.

3.18. Proposition.[✓] Fix a real number $r > 0$ and two distinct points A and B . Then for any real number $\beta \in [0, \pi]$, there is a unique point C_β such that $BC_\beta = r$ and $\angle ABC_\beta = \beta$. Moreover, $\beta \mapsto C_\beta$ is a continuous map from $[0, \pi]$ to the plane.

Proof of Theorem 3.17 modulo Proposition 3.18. Fix the points A and B such that $AB = c$. Given $\beta \in [0, \pi]$, suppose that C_β denotes the point in the plane such that $BC_\beta = a$ and $\angle ABC = \beta$.

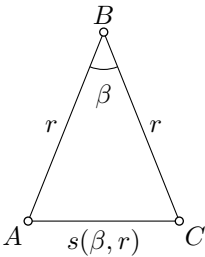
According to 3.18, the map $\beta \mapsto C_\beta$ is continuous. Therefore, the function $b: \beta \mapsto AC_\beta$ is continuous (formally, it follows from Exercise 1.14 and Exercise 1.15).

Note that $b(0) = c - a$ and $b(\pi) = c + a$. Since $c - a \leq b \leq c + a$, by the intermediate value theorem (3.4) there is $\beta_0 \in [0, \pi]$ such that $b(\beta_0) = b$, hence the result. \square

The proof of Proposition 3.18 relies on the following lemma.

Assume $r > 0$ and $\pi > \beta > 0$. Consider the triangle ABC such that $AB = BC = r$ and $\angle ABC = \beta$. The existence of such a triangle follows from Axiom IIIa and Proposition 2.4.

Note that according to Axiom IV, the values β and r define the triangle ABC up to the congruence. In particular, the distance AC depends only on β and r . Set



$$s(\beta, r) := AC.$$

3.19. Lemma.[✓] Given $r > 0$ and $\varepsilon > 0$, there is $\delta > 0$ such that

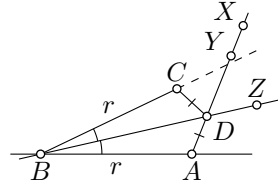
$$0 < \beta < \delta \implies s(r, \beta) < \varepsilon.$$

Proof. Fix two points A and B such that $AB = r$.

Choose a point X such that $\angle ABX$ is positive. Let $Y \in [AX)$ be the point such that $AY = \frac{\varepsilon}{2}$; it exists by Proposition 2.4.

Note that X and Y lie on the same side of (AB) ; therefore, $\angle ABY$ is positive. Set $\delta = \angle ABY$.

Suppose $0 < \beta < \delta$; by Axiom IIIa, we can choose C so that $\angle ABC = \beta$ and $BC = r$. Furthermore, we can choose a half-line $[BZ)$ such that $\angle ABZ = \frac{1}{2} \cdot \beta$.



Note that A and Y lie on opposite sides of (BZ) and $\angle ABZ \equiv -\angle CBZ$. In particular, (BZ) intersects $[AY]$; denote by D the point of intersection.

Since D lies between A and Y , we have $AD < AY$.

Since D lies on (BZ) we have that $\angle ABD \equiv -\angle CBD$. By Axiom IV, $\triangle ABD \cong \triangle CBD$. It follows that

$$\begin{aligned} s(r, \beta) &= AC \leq \\ &\leq AD + DC = \\ &= 2 \cdot AD < \\ &< 2 \cdot AY = \\ &= \varepsilon. \end{aligned}$$

□

Proof of Proposition 3.18. The existence and uniqueness of C_β follow from Axiom IIIa and Proposition 2.4.

Note that if $\beta_1 \neq \beta_2$, then

$$C_{\beta_1} C_{\beta_2} = s(r, |\beta_1 - \beta_2|).$$

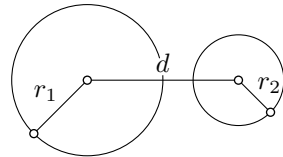
By 3.19, the map $\beta \mapsto C_\beta$ is continuous. □

Given a positive real number r and a point O , the set Γ of all points on distance r from O is called a circle with radius r and center O .

3.20. Exercise. Show that two circles intersect if and only if

$$|r_1 - r_2| \leq d \leq r_1 + r_2,$$

where r_1 and r_2 denote their radiuses, and d is the distance between their centers.



Chapter 4

Congruent triangles

A Side-angle-side

Our next goal is to give conditions that guarantee the congruence of two triangles.

One such condition is given in Axiom IV; it states that if two pairs of sides of two triangles are equal, and the included angles are equal up to sign, then the triangles are congruent. This axiom is also called the side-angle-side congruence condition, or briefly, SAS.

B Angle-side-angle

4.1. ASA condition. ✓ *Assume that*

$$AB = A'B', \quad \angle ABC = \pm \angle A'B'C', \quad \angle CAB = \pm \angle C'A'B'$$

and $\triangle A'B'C'$ is nondegenerate. Then

$$\triangle ABC \cong \triangle A'B'C'.$$

Note that for degenerate triangles this statement does not hold. For example, consider one triangle with sides 1, 4, 5 and the other with sides 2, 3, 5.

Proof. According to Theorem 3.7, either

❶ $\angle ABC = \angle A'B'C'$ and $\angle CAB = \angle C'A'B'$

or

❷ $\angle ABC = -\angle A'B'C'$ and $\angle CAB = -\angle C'A'B'$.

Let us assume that ❶ holds; the case ❷ is analogous.

Let C'' be the point on the half-line $[A'C')$ such that $A'C'' = AC$.

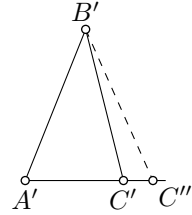
By Axiom IV, $\triangle A'B'C'' \cong \triangle ABC$. Applying Axiom IV again, we get that

$$\angle A'B'C'' = \angle ABC = \angle A'B'C'.$$

By Axiom IIIa, $[B'C') = [BC'')$. Hence C'' lies on $(B'C')$ as well as on $(A'C')$.

Since $\triangle A'B'C'$ is not degenerate, $(A'C')$ is distinct from $(B'C')$. Applying Axiom II, we get that $C'' = C'$.

Therefore, $\triangle A'B'C' = \triangle A'B'C'' \cong \triangle ABC$. □



C Isosceles triangles

A triangle with two equal sides is called isosceles; the remaining side is called the base.

4.2. Theorem. *Assume $\triangle ABC$ is an isosceles triangle with the base $[AB]$. Then*

$$\angle ABC \equiv -\angle BAC.$$

Moreover, the converse holds if $\triangle ABC$ is nondegenerate.

The following proof is due to Pappus of Alexandria.

Proof. Note that

$$CA = CB, \quad CB = CA, \quad \angle ACB \equiv -\angle BCA.$$

By Axiom IV,

$$\triangle CAB \cong \triangle CBA.$$

Applying the theorem on the signs of angles of triangles (3.7) and Axiom IV again, we get that

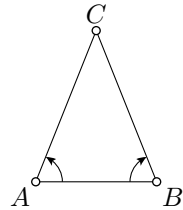
$$\angle BAC \equiv -\angle ABC.$$

To prove the converse, we assume that $\angle CAB \equiv -\angle CBA$. By the ASA condition (4.1), $\triangle CAB \cong \triangle CBA$. Therefore, $CA = CB$. □

A triangle with three equal sides is called equilateral.

4.3. Exercise. *Let $\triangle ABC$ be an equilateral triangle. Show that*

$$\angle ABC = \angle BCA = \angle CAB.$$



D Side-side-side

4.4. SSS condition. $\triangle ABC \cong \triangle A'B'C'$ if

$$A'B' = AB, \quad B'C' = BC, \quad \text{and} \quad C'A' = CA.$$

Note that this condition is valid for degenerate triangles as well.

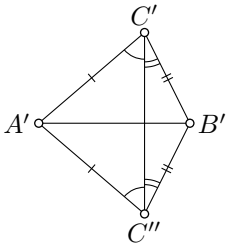
Proof. Choose C'' so that $A'C'' = A'C'$ and $\angle B'A'C'' = \angle BAC$. According to Axiom IV,

$$\triangle A'B'C'' \cong \triangle ABC.$$

It will suffice to prove that

$$\textcircled{3} \quad \triangle A'B'C' \cong \triangle A'B'C''.$$

The condition $\textcircled{3}$ holds trivially if $C'' = C'$. Thus, it remains to consider the case $C'' \neq C'$.



Clearly, the corresponding sides of $\triangle A'B'C'$ and $\triangle A'B'C''$ are equal. Hence the triangles $\triangle C'A'C''$ and $\triangle C'B'C''$ are isosceles. By Theorem 4.2, we have

$$\begin{aligned} \angle A'C''C' &\equiv -\angle A'C'C'', \\ \angle C'C''B' &\equiv -\angle C''C'B'. \end{aligned}$$

Adding them, we get that

$$\angle A'C''B' \equiv -\angle A'C'B'.$$

Applying Axiom IV again, we get $\textcircled{3}$. □

4.5. Corollary. *If $AB + BC = AC$, then $B \in [AC]$.*

Proof. Since $AB + BC = AC$, we can choose $B' \in [AC]$ such that $AB = AB'$; observe that $BC = B'C$.

We may assume that $AB > 0$ and $BC > 0$; otherwise, $A = B$ or $B = C$, and the statement follows. In this case, $\angle AB'C = \pi$.

By SSS,

$$\triangle ABC \cong \triangle AB'C.$$

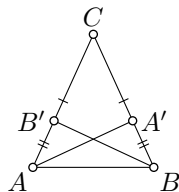
Therefore $\angle ABC = \pi$. By Theorem 2.8, B lies between A and C . □

4.6. Advanced exercise. *Consider two triangles ABC and $A'B'C'$. Let M be the midpoint of $[AB]$, and M' be the midpoint of $[A'B']$. Assume $C'A' = CA$, $C'B' = CB$, and $C'M' = CM$. Prove that*

$$\triangle A'B'C' \cong \triangle ABC.$$

4.7. Exercise. Let $\triangle ABC$ be an isosceles triangle with the base $[AB]$. Suppose that point A' lies between B and C , point B' lies between A and C , and $CA' = CB'$. Show that

- (a) $\triangle AA'C \cong \triangle BB'C$;
 (b) $\triangle ABB' \cong \triangle BAA'$.



4.8. Exercise. Let $\triangle ABC$ be a nondegenerate triangle and let f be a motion of the plane such that

$$f(A) = A, \quad f(B) = B, \quad \text{and} \quad f(C) = C.$$

Show that f is the identity map; that is, $f(X) = X$ for any point X on the plane.

E On side-side-angle and side-angle-angle

In each of the conditions SAS, ASA, and SSS we specify three corresponding parts of the triangles. Now, let us discuss other triples of corresponding parts.

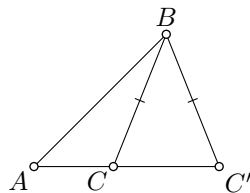
The first triple is called side-side-angle, or briefly SSA; it specifies two sides and a non-included angle. This condition is not sufficient for congruence. In other words, there exist two nondegenerate triangles ABC and $A'B'C'$ such that

$$AB = A'B', \quad BC = B'C', \quad \angle BAC \equiv \pm \angle B'A'C',$$

but $\triangle ABC \not\cong \triangle A'B'C'$ and $AC \neq A'C'$.

We will not use this negative statement, so there is no need to prove it formally. You can guess an example from the diagram.

The second triple is side-angle-angle, or briefly SAA; it specifies one side and two angles one of which is opposite to the side. This provides a congruence condition; that is, if one of the triangles ABC or $A'B'C'$ is nondegenerate and $AB = A'B'$, $\angle ABC \equiv \pm \angle A'B'C'$, $\angle BCA \equiv \pm \angle B'C'A'$, then $\triangle ABC \cong \triangle A'B'C'$.



The SAA condition will not be used directly in the sequel. One proof of this condition can be obtained from ASA and the theorem on the sum of angles of a triangle, which is proved below (see 7.12). For a more direct proof, see Exercise 11.6.

Another triple is called angle-angle-angle, or briefly AAA. By Axiom V, it is not a congruence condition in the Euclidean plane. However, in the hyperbolic plane it is; see 13.11.

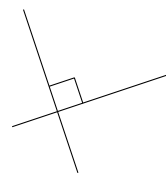
Chapter 5

Perpendicular lines

A Right, acute and obtuse angles

- ◇ If $|\angle AOB| = \frac{\pi}{2}$, we say that $\angle AOB$ is right;
- ◇ If $|\angle AOB| < \frac{\pi}{2}$, we say that $\angle AOB$ is acute;
- ◇ If $|\angle AOB| > \frac{\pi}{2}$, we say that $\angle AOB$ is obtuse.

Right angles will be marked with a small square, as shown.



If $\angle AOB$ is right, we also may say that (OA) is perpendicular to (OB) . This can be written as $(OA) \perp (OB)$.

Theorem 2.8 allows us to call two lines (OA) and (OB) perpendicular if $(OA) \perp (OB)$; so, we can write $(OA) \perp (OB)$.

5.1. Exercise. Assume that point O lies between A and B and $X \neq O$. Show that $\angle XO A$ is acute if and only if $\angle XO B$ is obtuse.

B Perpendicular bisector

Assume M is the midpoint of the segment $[AB]$; that is, $M \in (AB)$ and $AM = MB$.

The line ℓ thru M and perpendicular to (AB) , is called the perpendicular bisector to the segment $[AB]$.

5.2. Theorem. ✓ Given distinct points A and B , all points that are equidistant from A and B and no others lie on the perpendicular bisector of $[AB]$.

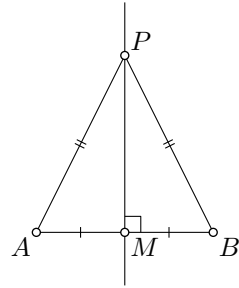
Proof. Let M be the midpoint of $[AB]$.

Assume $PA = PB$ and $P \neq M$. According to SSS (4.4), $\triangle AMP \cong \triangle BMP$. Hence

$$\angle AMP = \pm \angle BMP.$$

Since $A \neq B$, we have “ $-$ ” in the above formula. Furthermore,

$$\begin{aligned} \pi &= \angle AMB \equiv \\ &\equiv \angle AMP + \angle PMB \equiv \\ &\equiv 2 \cdot \angle AMP. \end{aligned}$$



That is, $\angle AMP = \pm \frac{\pi}{2}$. Therefore, P lies on the perpendicular bisector.

To prove the converse, suppose P is any point on the perpendicular bisector of $[AB]$ and $P \neq M$. Then $\angle AMP = \pm \frac{\pi}{2}$, $\angle BMP = \pm \frac{\pi}{2}$ and $AM = BM$. By SAS, $\triangle AMP \cong \triangle BMP$; in particular, $AP = BP$. \square

5.3. Exercise. Let ℓ be a perpendicular bisector of $[AB]$, and X be an arbitrary point on the plane.

Show that $AX < BX$ if and only if X and A lie on the same side from ℓ .

5.4. Exercise. Let ABC be a nondegenerate triangle. Show that

$$AC > BC \iff |\angle ABC| > |\angle CAB|.$$

C Uniqueness of a perpendicular

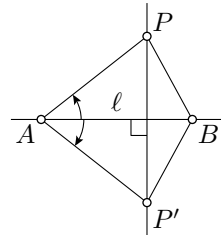
5.5. Theorem.[✓] There is one and only one line that passes thru a given point P and is perpendicular to a given line ℓ .

According to the theorem above, there is a unique point $Q \in \ell$ such that $(QP) \perp \ell$. This point Q is called the footpoint of P on ℓ .

Proof. If $P \in \ell$, then both existence and uniqueness follow from Axiom III.

Existence for $P \notin \ell$. Let A and B be two distinct points on ℓ . Choose P' so that $AP' = AP$ and $\angle BAP' \equiv -\angle BAP$. According to Axiom IV, $\triangle AP'B \cong \triangle APB$. In particular, $AP = AP'$ and $BP = BP'$.

According to Theorem 5.2, A and B lie on the perpendicular bisector of $[PP']$. In particular, $(PP') \perp (AB) = \ell$.



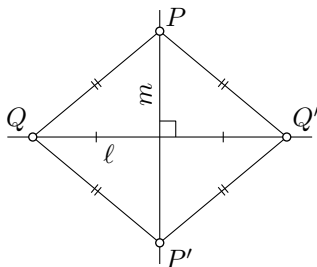
Uniqueness for $P \notin \ell$. From above we can choose a point P' in such a way that ℓ forms the perpendicular bisector of $[PP']$.

Assume $m \perp \ell$ and $m \ni P$. Then m is a perpendicular bisector of some segment $[QQ']$ of ℓ ; in particular, $PQ = PQ'$.

Since ℓ is the perpendicular bisector of $[PP']$, we get that $PQ = P'Q$ and $PQ' = P'Q'$. Therefore,

$$P'Q = PQ = PQ' = P'Q'.$$

By Theorem 5.2, P' lies on the perpendicular bisector of $[QQ']$, which is m . By Axiom II, $m = (PP')$. \square



D Reflection across a line

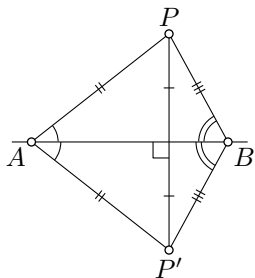
Assume the point P and the line (AB) are given. To find the reflection P' of P across (AB) , one drops a perpendicular from P onto (AB) , and continues it to the same distance on the other side.

According to Theorem 5.5, P' is uniquely determined by P .

Note that $P = P'$ if and only if $P \in (AB)$.

5.6. Proposition. *Assume P' is a reflection of P across (AB) . Then $AP' = AP$, and if $A \neq P$, then $\angle BAP' \equiv -\angle BAP$.*

Proof. Note that if $P \in (AB)$, then $P = P'$. By Corollary 2.9, $\angle BAP = 0$ or π . Hence the statement follows.



If $P \notin (AB)$, then $P' \neq P$. By the construction of P' , the line (AB) is a perpendicular bisector of $[PP']$. Therefore, according to Theorem 5.2, $AP' = AP$ and $BP' = BP$. In particular, $\triangle ABP' \cong \triangle ABP$. Therefore, $\angle BAP' = \pm \angle BAP$.

Since $P' \neq P$ and $AP' = AP$, we get that $\angle BAP' \neq \angle BAP$. That is, we are left with the case

$$\angle BAP' = -\angle BAP. \quad \square$$

5.7. Exercise. *Let X and Y be the reflections of P across the lines (AB) and (BC) respectively. Show that*

$$\angle XBY \equiv 2 \cdot \angle ABC.$$

5.8. Corollary. *A reflection across a line is a motion of the plane. Moreover,*

$$\angle Q'P'R' \equiv -\angle QPR$$

if $\triangle P'Q'R'$ is the reflection of $\triangle PQR$.

Proof. Note that the composition of two reflections across the same line is the identity map. In particular, any reflection is a bijection.

Fix a line (AB) and two points P and Q ; denote their reflections across (AB) by P' and Q' . Let us show that

1
$$P'Q' = PQ;$$

that is, the reflection is distance-preserving,

Without loss of generality, we may assume that the points P and Q are distinct from A and B . By Proposition 5.6, we get that

$$\begin{aligned} \angle BAP' &\equiv -\angle BAP, & \angle BAQ' &\equiv -\angle BAQ, \\ AP' &= AP, & AQ' &= AQ. \end{aligned}$$

It follows that

2
$$\angle P'AQ' \equiv -\angle PAQ.$$

By SAS, $\triangle P'AQ' \cong \triangle PAQ$ and **1** follows. Moreover, we also get that

$$\angle AP'Q' \equiv \pm \angle APQ.$$

From **2** and the theorem on the signs of angles of triangles (3.7) we get

3
$$\angle AP'Q' \equiv -\angle APQ.$$

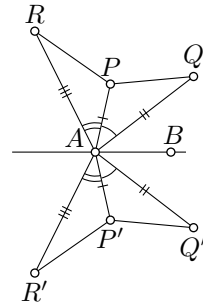
Repeating the same argument for a pair of points P and R , we get that

4
$$\angle AP'R' \equiv -\angle APR.$$

Subtracting **4** from **3**, we get that

$$\angle Q'P'R' \equiv -\angle QPR.$$

□



E Direct and indirect motions

A motion $X \mapsto X'$ is called direct if

$$\angle Q'P'R' = \angle QPR$$

for any triangle PQR ; if instead we always have

$$\angle Q'P'R' \equiv -\angle QPR,$$

then the motion f is called indirect.

By Corollary 5.8, any reflection across a line is an indirect motion. Note that the composition of two reflections is a direct motion. More generally, the composition of two indirect motions is direct, the composition of two direct motions is direct, and the composition of direct and indirect motions is indirect.

5.9. Exercise. *Show that any motion of the plane can be presented as a composition of at most three reflections across lines.*

Conclude that any motion of the plane is either direct or indirect.

F Perpendicular is shortest

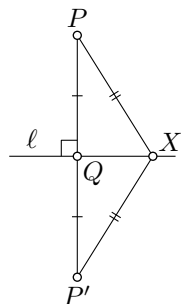
5.10. Lemma. *Assume Q is the footpoint of P on the line ℓ . Then*

$$PX > PQ$$

for any point X on ℓ distinct from Q .

If P , Q , and ℓ are as above, then PQ is called the distance from P to ℓ .

Proof. If $P \in \ell$, then the result follows since $PQ = 0$. So, we can assume that $P \notin \ell$.



Let P' be the reflection of P across the line ℓ . Note that Q is the midpoint of $[PP']$ and ℓ is the perpendicular bisector of $[PP']$. Therefore

$$PX = P'X \quad \text{and} \quad PQ = P'Q = \frac{1}{2} \cdot PP'.$$

Note that ℓ meets $[PP']$ only at the point Q . Therefore, $X \notin [PP']$. By the triangle inequality and Corollary 4.5, we have

$$PX + P'X > PP',$$

and hence the result: $PX > PQ$. □

5.11. Exercise. Assume $\angle ABC$ is right or obtuse. Show that

$$AC > AB.$$

5.12. Exercise. Suppose that $\triangle ABC$ has a right angle at C . Show that for any $X \in [AC]$ the distance from X to (AB) is smaller than AB .

G Circles

Recall that a circle with radius r and center O is the set of all points on distance r from O . We say that a point P lies inside of the circle if $OP < r$; if $OP > r$, we say that P lies outside of the circle.

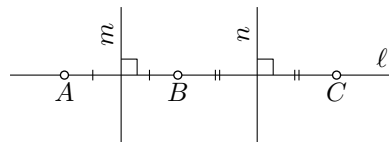
5.13. Exercise. Let Γ be a circle and $P \notin \Gamma$. Assume a line ℓ is passing thru the point P and intersects Γ at two distinct points, X and Y . Show that P is inside Γ if and only if P lies between X and Y .

A segment between two points on a circle is called a chord of the circle. A chord passing thru the center of the circle is called its diameter.

5.14. Exercise. Assume two distinct circles Γ and Γ' have a common chord $[AB]$. Show that the line between centers of Γ and Γ' forms a perpendicular bisector of $[AB]$.

5.15. Lemma. ✓ A line and a circle can have at most two points of intersection.

Proof. Assume A , B , and C are distinct points that lie on a line ℓ and a circle Γ with the center O . Then $OA = OB = OC$; in particular, O lies on the perpendicular bisectors m and n to $[AB]$ and $[BC]$ respectively. Note that the midpoints of $[AB]$ and $[BC]$ are distinct. Therefore, m and n are distinct. The latter contradicts the uniqueness of the perpendicular (Theorem 5.5). \square



5.16. Exercise. Show that two distinct circles can have at most two points of intersection.

As a consequence of the above lemma, a line ℓ and a circle Γ might have 2, 1, or 0 points of intersections. In the first two cases, the line is called secant or tangent respectively; if P is the only point of intersection of ℓ and Γ , we say that ℓ is tangent to Γ at P .

Similarly, according to Exercise 5.16, two distinct circles might have 2, 1, or 0 points of intersections. If P is the only point of intersection of circles Γ and Γ' , we say that Γ is tangent to Γ' at P ; we also assume that a circle is tangent to itself at any of its points.

5.17. Lemma. *Let ℓ be a line and Γ be a circle centered at O . Assume P is a common point of ℓ and Γ . Then ℓ is tangent to Γ at P if and only if $(PO) \perp \ell$.*

Proof. Let Q be the footpoint of O on ℓ .

Assume $P \neq Q$. Let P' be the reflection of P across (OQ) . Note that $P' \in \ell$ and (OQ) is the perpendicular bisector of $[PP']$. Therefore, $OP = OP'$. Hence $P, P' \in \Gamma \cap \ell$; that is, ℓ is secant to Γ .

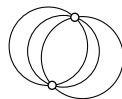
If $P = Q$, then according to Lemma 5.10, $OP < OX$ for any point $X \in \ell$ distinct from P . Hence P is the only point at the intersection $\Gamma \cap \ell$; that is, ℓ is tangent to Γ at P . \square

5.18. Exercise. *Let Γ and Γ' be two distinct circles with centers at O and O' respectively. Assume Γ meets Γ' at a point P . Show that Γ is tangent to Γ' if and only if O, O' , and P lie on one line.*

5.19. Exercise. *Let Γ and Γ' be two distinct circles with centers at O and O' and radiuses r and r' . Show that Γ is tangent to Γ' if and only if*

$$OO' = r + r' \quad \text{or} \quad OO' = |r - r'|.$$

5.20. Exercise. *Assume three circles have two points in common. Prove that their centers lie on one line.*



H Geometric constructions

A ruler-and-compass construction in the plane is a construction of points, lines, and circles using only an idealized ruler and compass. These construction problems provide a valuable source of exercises in geometry, which we will use further in the book. In addition, Chapter 19 is devoted completely to the subject.

The idealized ruler can be used only to draw a line thru the given two points. The idealized compass can be used only to draw a circle with a given center and radius. That is, given three points A, B , and O we can draw the set of all points on distance AB from O . We may also mark new points in the plane, as well as on the constructed lines, circles, and their intersections (assuming that such points exist).

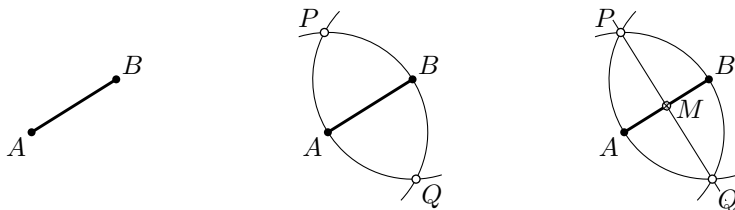
We can also look at the different sets of construction tools. For example, we may only use the ruler, or we may invent a new tool, say a tool that produces a midpoint for any given two points.

As an example, let us consider the following problem:

5.21. Construction of midpoint. *Construct a midpoint of a given segment $[AB]$.*

Construction.

1. Construct the circle with center A that is passing thru B . Construct the circle with center B that is passing thru A . Mark both points of intersection of these circles; label them with P and Q .
2. Draw the line (PQ) . Mark by M of the intersection point of (PQ) and $[AB]$; this is the midpoint.



Typically, you need to prove that the construction produces what was expected. Here is a proof for the example above.

Proof. According to Theorem 5.2, (PQ) is the perpendicular bisector of $[AB]$. Therefore, $M = (AB) \cap (PQ)$ is the midpoint of $[AB]$. \square

5.22. Exercise. *Describe a ruler-and-compass construction of a line thru a given point that is perpendicular to a given line.*

5.23. Exercise. *Describe a ruler-and-compass construction of a center of a given circle.*

5.24. Exercise. *Describe a ruler-and-compass construction of lines tangent to a given circle that pass thru a given point.*

5.25. Exercise. *Given two circles Γ_1 and Γ_2 and a segment $[AB]$ describe a ruler-and-compass construction of a circle with the radius AB that is tangent to each circle Γ_1 and Γ_2 .*

Chapter 6

Similar triangles

Two triangles $A'B'C'$ and ABC are called similar (briefly $\triangle A'B'C' \sim \triangle ABC$) if (1) their sides are proportional; that is,

$$\textcircled{1} \quad A'B' = k \cdot AB, \quad B'C' = k \cdot BC \quad \text{and} \quad C'A' = k \cdot CA$$

for some coefficient $k > 0$, and (2) the corresponding angles are equal up to sign:

$$\begin{aligned} \textcircled{2} \quad & \angle A'B'C' = \pm \angle ABC, \\ & \angle B'C'A' = \pm \angle BCA, \\ & \angle C'A'B' = \pm \angle CAB. \end{aligned}$$

Remarks.

- ◇ According to 3.7, in the above three equalities, the signs can be assumed to be the same.
- ◇ The equations in $\textcircled{1}$ can be rewritten as

$$\frac{A'B'}{AB} = \frac{B'C'}{BC} = \frac{C'A'}{CA}.$$

- ◇ If $\triangle A'B'C' \sim \triangle ABC$ with the coefficient $k = 1$, then $\triangle A'B'C' \cong \triangle ABC$.
- ◇ Note that “ \sim ” is an equivalence relation. That is,
 - (i) $\triangle ABC \sim \triangle ABC$ for any $\triangle ABC$.
 - (ii) If $\triangle A'B'C' \sim \triangle ABC$, then

$$\triangle ABC \sim \triangle A'B'C'.$$

- (iii) If $\triangle A''B''C'' \sim \triangle A'B'C'$ and $\triangle A'B'C' \sim \triangle ABC$, then

$$\triangle A''B''C'' \sim \triangle ABC.$$

A Similarity conditions

Using the new notation “ \sim ”, we can reformulate Axiom V:

6.1. Reformulation of Axiom V. *If for $\triangle ABC$, $\triangle AB'C'$, and $k > 0$ we have $B' \in [AB]$, $C' \in [AC]$, $AB' = k \cdot AB$ and $AC' = k \cdot AC$, then $\triangle ABC \sim \triangle AB'C'$.*

In other words, Axiom V provides a condition which guarantees that two triangles are similar. Let us formulate three more such similarity conditions.

6.2. Similarity conditions. *Two triangles $\triangle ABC$ and $\triangle A'B'C'$ are similar if one of the following conditions holds:*

(SAS) *For some constant $k > 0$ we have*

$$AB = k \cdot A'B', \quad AC = k \cdot A'C',$$

$$\text{and } \angle BAC = \pm \angle B'A'C'.$$

(AA) *The triangle $A'B'C'$ is nondegenerate and*

$$\angle ABC = \pm \angle A'B'C', \quad \angle BAC = \pm \angle B'A'C'.$$

(SSS) *For some constant $k > 0$ we have*

$$AB = k \cdot A'B', \quad AC = k \cdot A'C', \quad CB = k \cdot C'B'.$$

Each of these conditions is proved by applying Axiom V with the SAS, ASA, and SSS congruence conditions respectively (see Axiom IV and the conditions 4.1, 4.4).

Proof. Set $k = \frac{AB}{A'B'}$. Choose points $B'' \in [A'B']$ and $C'' \in [A'C']$, so that $A'B'' = k \cdot A'B'$ and $A'C'' = k \cdot A'C'$. By Axiom V, $\triangle A'B'C' \sim \triangle A'B''C''$.

Applying the SAS, ASA, or SSS congruence condition, depending on the case, we get that $\triangle A'B''C'' \cong \triangle ABC$. Hence the result. \square

A bijection $X \leftrightarrow X'$ from a plane to itself is called an angle-preserving transformation if

$$\angle ABC = \angle A'B'C'$$

for any $\triangle ABC$ and its image $\triangle A'B'C'$.

(The term transformation is used for a bijection of space to itself that preserves a specified geometric structure. For example, motions are *distance-preserving transformations*.)

6.3. Exercise. *Show that any angle-preserving transformation of the plane multiplies all distances by a fixed constant.*

B Pythagorean theorem

A triangle is called right if one of its angles is right. The side opposite the right angle is called the hypotenuse. The sides adjacent to the right angle are called legs.

6.4. Theorem. *Assume $\triangle ABC$ has a right angle at C . Then*

$$AC^2 + BC^2 = AB^2.$$

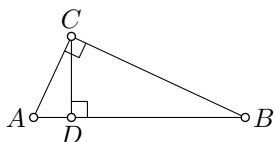
Proof. Let D be the footpoint of C on (AB) .

According to Lemma 5.10,

$$AD < AC < AB,$$

and

$$BD < BC < AB.$$



Therefore, D lies between A and B ; in particular,

$$\textcircled{3} \quad AD + BD = AB.$$

Note that by the AA similarity condition, we have

$$\triangle ADC \sim \triangle ACB \sim \triangle CDB.$$

In particular,

$$\textcircled{4} \quad \frac{AD}{AC} = \frac{AC}{AB} \quad \text{and} \quad \frac{BD}{BC} = \frac{BC}{BA}.$$

Let us rewrite the two identities in $\textcircled{4}$:

$$AC^2 = AB \cdot AD \quad \text{and} \quad BC^2 = AB \cdot BD.$$

Summing up these two identities and applying $\textcircled{3}$, we get that

$$AC^2 + BC^2 = AB \cdot (AD + BD) = AB^2. \quad \square$$

The idea in the proof above appears in the Elements [9, X.33], but the proof given there [9, I.47] is different; it uses the area method discussed in Chapter 20.

6.5. Exercise. *Assume A, B, C , and D are as in the proof above. Show that*

$$CD^2 = AD \cdot BD.$$

The following exercise is the converse to the Pythagorean theorem.

6.6. Exercise. *Assume that ABC is a triangle such that*

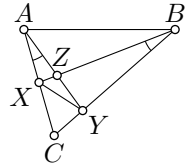
$$AC^2 + BC^2 = AB^2.$$

Prove that the angle at C is right.

C Method of similar triangles

The proof of the Pythagorean theorem given above uses the method of similar triangles. To apply this method, one has to search for pairs of similar triangles and then use the proportionality of corresponding sides and/or equalities of corresponding angles. Finding such pairs might be tricky at first.

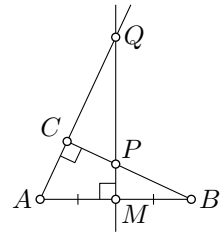
6.7. Exercise. Let ABC be a nondegenerate triangle and the points X , Y , and Z as shown in the diagram. Assume $\angle CAZ \equiv \angle XBC$. Find four pairs of similar triangles with these six points as the vertices and prove their similarity.



6.8. Exercise. Suppose $\triangle ABC$ is nondegenerate. Assume $D \in [AB]$ and $\angle CAB = \angle BCD$. Show that $CD = \frac{b \cdot a}{c}$, where $a = BC$, $b = CA$, and $c = AB$.

6.9. Exercise. Assume $\triangle ABC$ has a right angle at C . Denote by P , Q and M intersections of the perpendicular bisector of $[AB]$ with the lines (BC) , (CA) , and (AB) respectively. Show that

$$4 \cdot MP \cdot MQ = AB^2.$$



D Ptolemy's inequality

A quadrangle is defined as an ordered quadruple of distinct points in the plane. These four points are called vertices. The quadrangle $ABCD$ will also be denoted by $\square ABCD$.

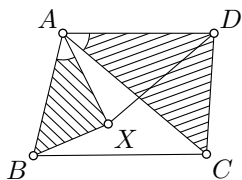
Given a quadrangle $ABCD$, the four segments $[AB]$, $[BC]$, $[CD]$, and $[DA]$ are called sides of $\square ABCD$; the remaining two segments $[AC]$ and $[BD]$ are called diagonals of $\square ABCD$.

6.10. Ptolemy's inequality. In any quadrangle, the product of diagonals cannot exceed the sum of the products of its opposite sides; that is,

$$AC \cdot BD \leq AB \cdot CD + BC \cdot DA$$

for any $\square ABCD$.

We will present a classical proof of this inequality using the method of similar triangles with additional construction. This proof is given as an illustration — it will not be used further in the sequel.



Proof. Consider the half-line $[AX)$ such that $\angle BAX = \angle CAD$. In this case, $\angle XAD = \angle BAC$ since adding $\angle BAX$ or $\angle CAD$ to the corresponding sides produces $\angle BAD$. We can assume that

$$AX = \frac{AB}{AC} \cdot AD.$$

In this case, we have

$$\frac{AX}{AD} = \frac{AB}{AC}, \quad \frac{AX}{AB} = \frac{AD}{AC}.$$

Hence

$$\triangle BAX \sim \triangle CAD, \quad \triangle XAD \sim \triangle BAC.$$

Therefore

$$\frac{BX}{CD} = \frac{AB}{AC}, \quad \frac{XD}{BC} = \frac{AD}{AC},$$

or

$$AC \cdot BX = AB \cdot CD, \quad AC \cdot XD = BC \cdot AD.$$

Adding these two equalities we get

$$AC \cdot (BX + XD) = AB \cdot CD + BC \cdot AD.$$

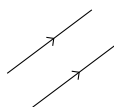
It remains to apply the triangle inequality, $BD \leq BX + XD$. □

Using the proof above together with 9.23, one can show that the equality holds only if the vertices A , B , C , and D appear on a line or a circle in the same cyclic order; see also 10.12 for another proof of the equality case. Exercise 18.2 below suggests another proof of Ptolemy's inequality using complex coordinates.

Chapter 7

Parallel lines

In consequence of Axiom II, any two distinct lines ℓ and m have either one point in common or none. In the first case they are intersecting (briefly $\ell \not\parallel m$); in the second case, ℓ and m are said to be parallel (briefly, $\ell \parallel m$); in addition, a line is always regarded as parallel to itself.



To emphasize that two lines on a diagram are parallel we will mark them with arrows of the same type.

7.1. Proposition. *Let ℓ , m , and n be three lines. Assume that $n \perp m$ and $m \perp \ell$. Then $\ell \parallel n$.*

Proof. Assume the contrary; that is, $\ell \not\parallel n$. Then there is a point, say Z , of intersection of ℓ and n . Then by Theorem 5.5, $\ell = n$. Since any line is parallel to itself, we have that $\ell \parallel n$ — a contradiction. \square

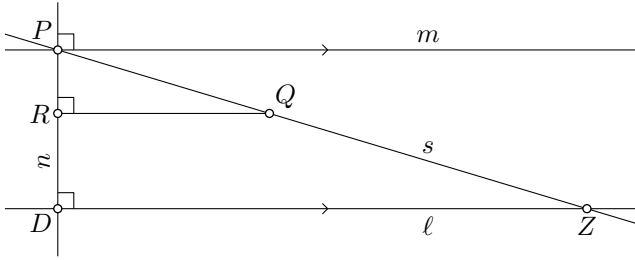
7.2. Theorem. *For any point P and any line ℓ , there is a unique line m that passes thru P and is parallel to ℓ .*

The above theorem has two parts, existence and uniqueness. In the proof of uniqueness, we will use the method of similar triangles.

Proof; existence. Apply Theorem 5.5 two times, first to construct the line n thru P that is perpendicular to ℓ , and second to construct the line n thru P that is perpendicular to m . Then apply Proposition 7.1.

Uniqueness. If $P \in \ell$, then $m = \ell$ by the definition of parallel lines. Now, assume $P \notin \ell$.

Let us construct the lines $n \ni P$ and $m \ni P$ as in the proof of existence, so $m \parallel \ell$.



Assume there is yet another line $s \ni P$ parallel to ℓ . Choose a point $Q \in s$ that lies with ℓ on the same side from m . Let R be the footpoint of Q on n .

Let D be the point of intersection of n and ℓ . According to Proposition 7.1 $(QR) \parallel m$. Therefore, Q , R , and ℓ lie on the same side of m . In particular, $R \in [PD)$.

Choose $Z \in [PQ)$ such that

$$\frac{PZ}{PQ} = \frac{PD}{PR}.$$

By SAS similarity condition (or equivalently by Axiom V) we have that $\triangle RPQ \sim \triangle DPZ$; therefore $(ZD) \perp (PD)$. It follows that Z lies on ℓ and s — a contradiction. \square

7.3. Corollary. *Assume ℓ , m , and n are lines such that $\ell \parallel m$ and $m \parallel n$. Then $\ell \parallel n$.*

Proof. Assume the contrary; that is, $\ell \not\parallel n$. Then there is a point $P \in \ell \cap n$. By Theorem 7.2, $n = \ell$ — a contradiction. \square

Note that from the definition, we have that $\ell \parallel m$ if and only if $m \parallel \ell$. Therefore, according to the above corollary, “ \parallel ” is an equivalence relation. That is, for any lines ℓ , m , and n the following conditions hold:

- (i) $\ell \parallel \ell$;
- (ii) if $\ell \parallel m$, then $m \parallel \ell$;
- (iii) if $\ell \parallel m$ and $m \parallel n$, then $\ell \parallel n$.

7.4. Exercise. *Let k , ℓ , m , and n be lines such that $k \perp \ell$, $\ell \perp m$, and $m \perp n$. Show that $k \not\parallel n$.*

7.5. Exercise. *Make a ruler-and-compass construction of a line thru a given point that is parallel to a given line.*

A Reflection across a point

Fix a point O . If O is the midpoint of a line segment $[XX']$, then we say that X' is a reflection of X across O .

Note that the map $X \mapsto X'$ is uniquely defined; it is called a reflection across O . In this case, O is called the center of reflection. We assume that $O' = O$; that is, O is a reflection of itself across itself. If the reflection across O moves a set S to itself, then we say that S is centrally symmetric with respect to O .

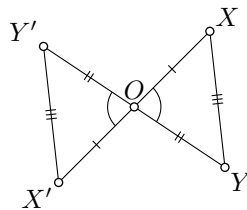
Recall that any motion is either direct or indirect; that is, it either preserves or reverses the signs of angles (Section 5E).

7.6. Proposition. *A reflection across a point is a direct motion.*

Proof. Observe that if X' is a reflection of X across O , then X is a reflection of X' . In other words, the composition of the reflection with itself is the identity map. In particular, any reflection across a point is a bijection.

Fix two points X and Y ; let X' and Y' be their reflections across O . To check that the reflection is distance preserving, we need to show that $X'Y' = XY$.

We may assume that X , Y , and O are distinct; otherwise, the statement is trivial. By the definition of the reflection across O , we have that $OX = OX'$, $OY = OY'$, and the angles XOY and $X'OY'$ are vertical; in particular, $\angle XOY = \angle X'OY'$. By SAS, $\triangle XOY \cong \triangle X'OY'$; therefore $X'Y' = XY$.

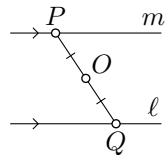


By 5.9, the reflection across O is either direct or indirect. It cannot be indirect since $\angle XOY = \angle X'OY'$; therefore it is a direct motion. \square

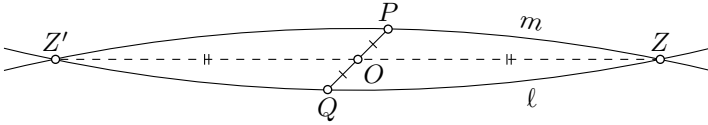
7.7. Exercise. *Suppose $\angle AOB$ is right. Show that the composition of reflections across the lines (OA) and (OB) is a reflection across O .*

Use this statement and Corollary 5.8 to build another proof of 7.6.

7.8. Theorem. *Let ℓ be a line, $Q \in \ell$, and P an arbitrary point. Suppose O is the midpoint of $[PQ]$. Then a line m passing thru P is parallel to ℓ if and only if m is a reflection of ℓ across O .*



Proof; "if" part. Assume m is a reflection of ℓ across O . Suppose $\ell \not\parallel m$; that is ℓ and m intersect at a single point Z . Denote by Z' be the reflection of Z across O .

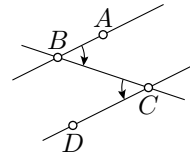


Note that Z' lies on both lines ℓ and m . It follows that $Z' = Z$ or equivalently $Z = O$. In this case, $O \in \ell$ and therefore the reflection of ℓ across O is ℓ itself; that is, $\ell = m$ and in particular $\ell \parallel m$ — a contradiction.

“Only-if” part. Let ℓ' be the reflection of ℓ across O . According to the “if” part of the theorem, $\ell' \parallel \ell$. Note that both lines ℓ' and m pass thru P . By uniqueness of parallel lines (7.2), if $m \parallel \ell$, then $\ell' = m$; whence the statement follows. \square

B Transversal property

If the line t intersects each line ℓ and m at one point, then we say that t is a transversal to ℓ and m . For example, on the diagram, line (CB) is a transversal to (AB) and (CD) .



7.9. Transversal property. $(AB) \parallel (CD)$ if and only if

❶
$$2 \cdot (\angle ABC + \angle BCD) \equiv 0.$$

Equivalently,

$$\angle ABC + \angle BCD \equiv 0 \quad \text{or} \quad \angle ABC + \angle BCD \equiv \pi.$$

Moreover, if $(AB) \neq (CD)$, then in the first case, A and D lie on opposite sides of (BC) ; in the second case, A and D lie on the same sides of (BC) .

Proof; “only-if” part. Denote by O the midpoint of $[BC]$.

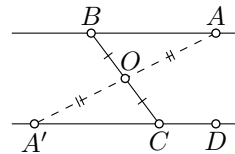
Assume $(AB) \parallel (CD)$. According to Theorem 7.8, (CD) is a reflection of (AB) across O .

Let A' be the reflection of A across O . Then $A' \in (CD)$ and by Proposition 7.6 we have that

❷
$$\angle ABO = \angle A'CO.$$

Note that

❸
$$\angle ABO \equiv \angle ABC, \quad \angle A'CO \equiv -\angle BCA'.$$



Since A' , C , and D lie on one line, Exercise 2.11 implies that

$$\textcircled{4} \quad 2 \cdot \angle BCD \equiv 2 \cdot \angle BCA'.$$

Finally note that $\textcircled{2}$, $\textcircled{3}$, and $\textcircled{4}$ imply $\textcircled{1}$. □

“If”-part. By Theorem 7.2 there is a unique line (CD) thru C that is parallel to (AB) . From the “only-if” part we know that $\textcircled{1}$ holds.

On the other hand, there is a *unique* line (CD) such that $\textcircled{1}$ holds. Indeed, suppose there are two such lines (CD) and (CD') , then

$$2 \cdot (\angle ABC + \angle BCD) \equiv 2 \cdot (\angle ABC + \angle BCD') \equiv 0.$$

Therefore $2 \cdot \angle BCD \equiv 2 \cdot \angle BCD'$ and by Exercise 2.11, $D' \in (CD)$, or equivalently the line (CD) coincides with (CD') .

Therefore if $\textcircled{1}$ holds, then $(CD) \parallel (AB)$.

Last statement. If $(AB) \neq (CD)$ and A and D lie on the opposite sides of (BC) , then $\angle ABC$ and $\angle BCD$ have opposite signs. Therefore

$$-\pi < \angle ABC + \angle BCD < \pi.$$

Applying $\textcircled{1}$, we get $\angle ABC + \angle BCD = 0$.

Similarly, if A and D lie on the same side of (BC) , then $\angle ABC$ and $\angle BCD$ have the same sign. Therefore

$$0 < |\angle ABC + \angle BCD| < 2 \cdot \pi,$$

and $\textcircled{1}$ implies that $\angle ABC + \angle BCD \equiv \pi$. □

7.10. Exercise. Let $\triangle ABC$ be a nondegenerate triangle, and P lies between A and B . Suppose that a line ℓ passes thru P and is parallel to (AC) . Show that ℓ crosses the side $[BC]$ at another point, say Q , and

$$\triangle ABC \sim \triangle PBQ.$$

In particular,

$$\frac{PB}{AB} = \frac{QB}{CB}.$$

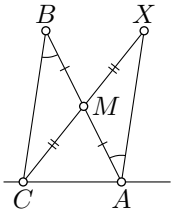
7.11. Exercise. Trisect a given segment with a ruler and a compass.

C Angles of triangles

7.12. Theorem. In any $\triangle ABC$, we have

$$\angle ABC + \angle BCA + \angle CAB \equiv \pi.$$

Proof. First note that if $\triangle ABC$ is degenerate, then the equality follows from Corollary 2.9. Now, assume that $\triangle ABC$ is nondegenerate.



Let X be the reflection of C across the midpoint M of $[AB]$. By Proposition 7.6 $\angle BAX = \angle ABC$. Note that (AX) is a reflection of (CB) across M ; therefore by Theorem 7.8, $(AX) \parallel (CB)$.

Since $[BM]$ and $[MX]$ do not intersect (CA) , the points B , M , and X lie on the same side of (CA) . Applying the transversal property for the transversal (CA) to (AX) and (CB) , we get that

$$\textcircled{5} \quad \angle BCA + \angle CAX \equiv \pi.$$

Since $\angle BAX = \angle ABC$, we have

$$\angle CAX \equiv \angle CAB + \angle ABC.$$

The latter identity and $\textcircled{5}$ imply the theorem. \square

7.13. Exercise. Show that

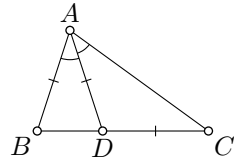
$$|\angle ABC| + |\angle BCA| + |\angle CAB| = \pi$$

for any $\triangle ABC$.

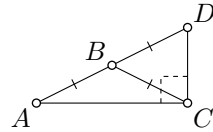
7.14. Exercise. Let $\triangle ABC$ be a nondegenerate triangle. Assume there is a point $D \in [BC]$ such that

$$\angle BAD \equiv \angle DAC, \quad BA = AD = DC.$$

Find the angles of $\triangle ABC$.



7.15. Exercise. Let $\triangle ABC$ be an isosceles nondegenerate triangle with the base $[AC]$. Suppose D is a reflection of A across B . Show that $\angle ACD$ is right.

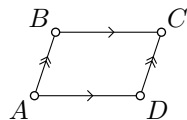


7.16. Exercise. Show that for any quadrangle $ABCD$, we have

$$\angle ABC + \angle BCD + \angle CDA + \angle DAB \equiv 0.$$

D Parallelograms

A quadrangle $ABCD$ in the Euclidean plane is called nondegenerate if no three points from A, B, C, D lie on one line.



A nondegenerate quadrangle is called a parallelogram if its opposite sides are parallel.

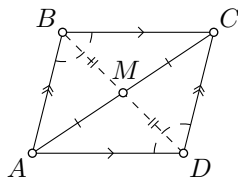
7.17. Lemma. *Any parallelogram is centrally symmetric with respect to a midpoint of one of its diagonals.*

In particular, if $\square ABCD$ is a parallelogram, then

- (a) *its diagonals $[AC]$ and $[BD]$ intersect each other at their midpoints;*
- (b) $\angle ABC = \angle CDA$;
- (c) $AB = CD$.

Proof. Let $\square ABCD$ be a parallelogram. Denote by M the midpoint of $[AC]$.

Since $(AB) \parallel (CD)$, Theorem 7.8 implies that (CD) is a reflection of (AB) across M . In the same way, (BC) is a reflection of (DA) across M . Since $\square ABCD$ is nondegenerate, it follows that D is a reflection of B across M ; in other words, M is the midpoint of $[BD]$.



The remaining statements follow since reflection across M is a direct motion of the plane (see 7.6). \square

7.18. Exercise. *Assume that point P is distinct from vertices of a parallelogram $ABCD$. Let a, b, c and d be lines thru points A, B, C and D such that $a \parallel (CP)$, $b \parallel (DP)$, $c \parallel (AP)$, and $d \parallel (BP)$. Show that the lines a, b, c and d intersect at one point.*

7.19. Exercise. *Assume $ABCD$ is a quadrangle such that*

$$AB = CD = BC = DA.$$

Show that $ABCD$ is a parallelogram.

A quadrangle as in the exercise above is called a rhombus.

A quadrangle $ABCD$ is called a rectangle if the angles ABC, BCD, CDA , and DAB are right. Note that according to the transversal property (7.9), any rectangle is a parallelogram.

A rectangle with equal sides is called a square.

7.20. Exercise. *Show that a parallelogram $ABCD$ is a rectangle if and only if $AC = BD$.*

7.21. Exercise. Show that a parallelogram $ABCD$ is a rhombus if and only if $(AC) \perp (BD)$.

Assume $\ell \parallel m$, and $X, Y \in m$. Let X' and Y' denote the footpoints of X and Y on ℓ . Note that $\square XY Y' X'$ is a rectangle. By Lemma 7.17, $XX' = YY'$. That is, any point on m lies at the same distance from ℓ . This distance is called the distance between ℓ and m .

E Method of coordinates

The following exercise is important; it shows that our axiomatic definition agrees with the model described in Section 1B.

7.22. Exercise. Let ℓ and m be perpendicular lines in the Euclidean plane. Given a point P , let P_ℓ and P_m denote the footpoints of P on ℓ and m respectively.

- Show that for any $X \in \ell$ and $Y \in m$ there is a unique point P such that $P_\ell = X$ and $P_m = Y$.
- Show that $PQ^2 = P_\ell Q_\ell^2 + P_m Q_m^2$ for any pair of points P and Q .
- Conclude that the plane is isometric to (\mathbb{R}^2, d_2) ; see 1.2.

Once this exercise is solved, we can apply the method of coordinates to solve any problem in Euclidean plane geometry. This method is powerful and universal; it will be developed further in Chapter 18.

7.23. Exercise. Use Exercise 7.22 to give an alternative proof of Theorem 3.17 in the Euclidean plane.

That is, prove that given the real numbers a , b , and c such that

$$0 < a \leq b \leq c \leq a + b,$$

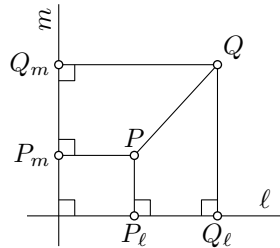
there is a triangle ABC such that $a = BC$, $b = CA$, and $c = AB$.

7.24. Exercise. Consider two distinct points $A = (x_A, y_A)$ and $B = (x_B, y_B)$ on the coordinate plane. Show that the perpendicular bisector of $[AB]$ is described by the equation

$$2 \cdot (x_B - x_A) \cdot x + 2 \cdot (y_B - y_A) \cdot y = x_B^2 + y_B^2 - x_A^2 - y_A^2.$$

Conclude that line can be defined as a subset of the coordinate plane of the following type:

- Solutions of an equation $a \cdot x + b \cdot y = c$ for constants a , b , and c such that $a \neq 0$ or $b \neq 0$.



- (b) The set of points $(a \cdot t + c, b \cdot t + d)$ for constants $a, b, c,$ and d such that $a \neq 0$ or $b \neq 0$ and all $t \in \mathbb{R}$.

F Apollonian circle

The exercises in this section illustrate the method of coordinates; they will not be used further in the sequel.

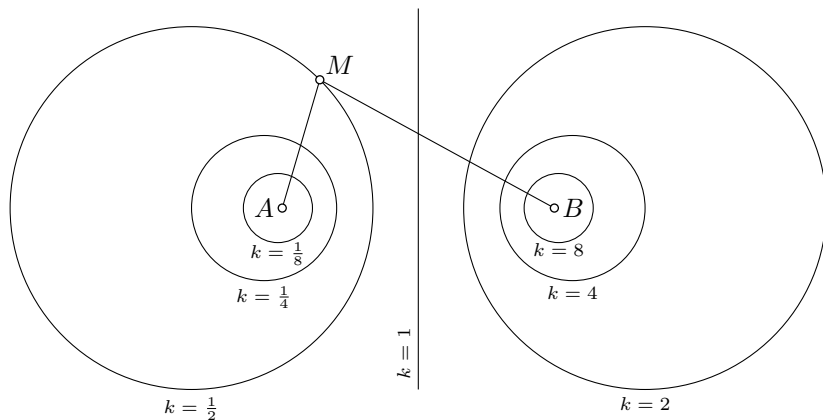
7.25. Exercise. Show that for fixed real values $a, b,$ and c the equation

$$x^2 + y^2 + a \cdot x + b \cdot y + c = 0$$

describes a circle, a point, or an empty set.

Show that if it is a circle, then $(-\frac{a}{2}, -\frac{b}{2})$ is its center, and $r = \frac{1}{2} \cdot \sqrt{a^2 + b^2 - 4 \cdot c}$ is its radius.

7.26. Exercise. Use the previous exercise to show that given a positive real number $k \neq 1,$ the locus of points M such that $AM = k \cdot BM$ for distinct points A and B is a circle.



The circle in the exercise above is an example of the so-called Apollonian circle with focuses A and B . A few of these circles for different values of k are shown on the diagram; for $k = 1,$ it becomes the perpendicular bisector of $[AB]$.

7.27. Exercise. Make a ruler-and-compass construction of an Apollonian circle with given focuses A and B thru a given point M .

Chapter 8

Triangle geometry

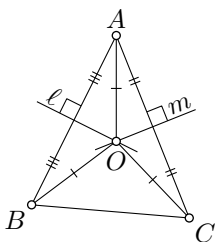
Triangle geometry is the study of the properties of triangles, including associated centers and circles.

We discuss the most basic results in triangle geometry, mostly to show that we have developed sufficient machinery to prove things.

A Circumcircle and circumcenter

8.1. Theorem. *Perpendicular bisectors to the sides of any nondegenerate triangle intersect at one point.*

The point of intersection of the perpendicular bisectors is called the circumcenter. It is the center of the circumcircle of the triangle; that is, a circle that passes thru all three vertices of the triangle. The circumcenter of the triangle is usually denoted by O .



Proof. Let $\triangle ABC$ be nondegenerate. Let ℓ and m be perpendicular bisectors to sides $[AB]$ and $[AC]$ respectively.

Assume ℓ and m intersect, let $O = \ell \cap m$.

Let us apply Theorem 5.2. Since $O \in \ell$, we have $OA = OB$ and since $O \in m$, we have $OA = OC$. It follows that $OB = OC$; that is, O lies on the perpendicular bisector of $[BC]$.

It remains to show that $\ell \nparallel m$; assume the contrary. Since $\ell \perp (AB)$ and $m \perp (AC)$, we get that $(AC) \parallel (AB)$ (see Exercise 7.4). Therefore, by Theorem 5.5, $(AC) = (AB)$; that is, $\triangle ABC$ is degenerate — a contradiction. \square

8.2. Exercise. *There is a unique circle that passes thru the vertices of a given nondegenerate triangle in the Euclidean plane.*

B Altitudes and orthocenter

An altitude of a triangle is a line thru a vertex and perpendicular to the line containing the opposite side. The term altitude may also be used for the distance from the vertex to its footpoint on the line containing the opposite side.

8.3. Theorem. *Three altitudes of any nondegenerate triangle intersect at a single point.*

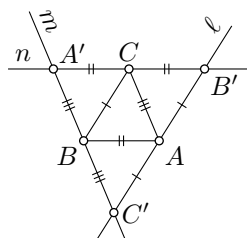
The point of intersection of altitudes is called the orthocenter; it is usually denoted by H .

Proof. Fix a nondegenerate triangle ABC . Consider three lines ℓ , m , and n such that

$$\begin{aligned} \ell \parallel (BC), & \quad m \parallel (CA), & \quad n \parallel (AB), \\ \ell \ni A, & \quad m \ni B, & \quad n \ni C. \end{aligned}$$

Since $\triangle ABC$ is nondegenerate, no pair of the lines ℓ , m , and n is parallel. Set

$$A' = m \cap n, \quad B' = n \cap \ell, \quad C' = \ell \cap m.$$



Note that $\square ABCB'$, $\square BCAC'$, and $\square CABA'$, are parallelograms. Applying Lemma 7.17 we get that $\triangle ABC$ is the median triangle of $\triangle A'B'C'$; that is, A , B , and C are the midpoints of $[B'C']$, $[C'A']$, and $[A'B']$ respectively.

By Exercise 7.4, $(B'C') \parallel (BC)$, the altitude from A is perpendicular to $[B'C']$, and from above it bisects $[B'C']$.

Hence the altitudes of $\triangle ABC$ are also perpendicular bisectors of $\triangle A'B'C'$. Applying Theorem 8.1, we get that altitudes of $\triangle ABC$ intersect at one point. \square

8.4. Exercise. *Assume H is the orthocenter of an acute triangle ABC . Show that A is the orthocenter of $\triangle HBC$.*

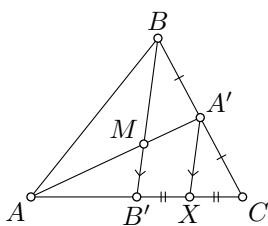
C Medians and centroid

A median of a triangle is the segment joining a vertex to the midpoint of the opposing side.

8.5. Theorem. *Three medians of any nondegenerate triangle intersect at a single point. Moreover, the point of intersection divides each median in the ratio 2:1.*

The point of intersection of medians is called the centroid of the triangle; it is usually denoted by M . In the proof, we will apply exercises 3.14 and 7.10; their complete solutions are given in the hints.

Proof. Consider a nondegenerate triangle ABC . Let $[AA']$ and $[BB']$ be its medians. According to Exercise 3.14, $[AA']$ and $[BB']$ have a point of intersection; denote it by M .



Draw a line ℓ thru A' parallel to (BB') . Applying Exercise 7.10 for $\triangle BB'C$ and ℓ , we get that ℓ crosses $[B'C]$ at a point, say X , and

$$\frac{CX}{CB'} = \frac{CA'}{CB} = \frac{1}{2};$$

that is, X is the midpoint of $[CB']$.

Since B' is the midpoint of $[AC]$ and X is the midpoint of $[B'C]$, we get that

$$\frac{AB'}{AX} = \frac{2}{3}.$$

Applying Exercise 7.10 for $\triangle XA'A$ and the line (BB') , we get that

①
$$\frac{AM}{AA'} = \frac{AB'}{AX} = \frac{2}{3};$$

that is, M divides $[AA']$ in the ratio 2:1.

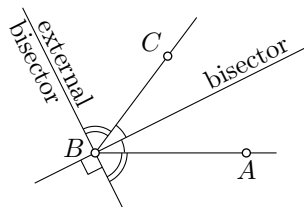
Note that ① uniquely defines M on $[AA']$. Repeating the same argument for medians $[AA']$ and $[CC']$, we get that they intersect at M as well, hence the result. \square

8.6. Exercise. *Let $\square ABCD$ be a nondegenerate quadrangle and X, Y, V , and W be midpoints of $[AB]$, $[BC]$, $[CD]$, and $[DA]$ respectively. Show that $\square XYVW$ is a parallelogram.*

D Angle bisectors

If $\angle ABX \equiv -\angle CBX$, then we say that the line (BX) bisects $\angle ABC$, or the line (BX) is a bisector of $\angle ABC$. If $\angle ABX \equiv \pi - \angle CBX$, then the line (BX) is called the external bisector of $\angle ABC$.

If $\angle ABA' = \pi$; that is, if B lies between A and A' , then the bisector of $\angle ABC$ is the external bisector of $\angle A'BC$ and the other way around.



Note that the bisector and the external bisector are uniquely defined by the angle.

8.7. Exercise. Show that for any angle, its bisector and external bisector are perpendicular.

The bisectors of $\angle ABC$, $\angle BCA$, and $\angle CAB$ of a nondegenerate triangle ABC are called bisectors of the triangle ABC at vertices A , B , and C respectively.

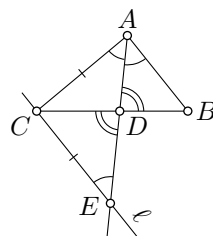
8.8. Exercise. Assume that, at one vertex of a nondegenerate triangle, its bisector coincides with its altitude. Show that the triangle is isosceles.

8.9. Lemma. Let $\triangle ABC$ be a nondegenerate triangle. Assume that the bisector at A intersects $[BC]$ at D . Then

②
$$\frac{AB}{AC} = \frac{DB}{DC}.$$

Proof. Let ℓ be a line passing thru C that is parallel to (AB) . Note that $\ell \nparallel (AD)$; set

$$E = \ell \cap (AD).$$



Note also that B and C lie on opposite sides of (AD) . By the transversal property (7.9),

③
$$\angle BAD = \angle CED.$$

Furthermore, the angles ADB and EDC are vertical; by 2.13 we have

$$\angle ADB = \angle EDC.$$

By the AA similarity condition, $\triangle ABD \sim \triangle ECD$. In particular,

④
$$\frac{AB}{EC} = \frac{DB}{DC}.$$

Since (AD) bisects $\angle BAC$, we get that $\angle BAD = \angle DAC$. Together with ③, it implies that $\angle CEA = \angle EAC$. By Theorem 4.2, $\triangle ACE$ is isosceles; that is,

$$EC = AC.$$

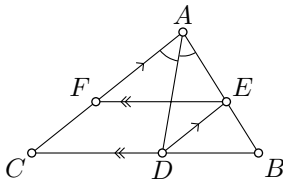
Together with ④, it implies ②. □

8.10. Exercise. Formulate and prove an analog of Lemma 8.9 for the external bisector.

8.11. Exercise. Assume that an angle bisector of a nondegenerate triangle bisects the opposite side. Show that the triangle is isosceles.

8.12. Exercise. Assume that a bisector at A of a nondegenerate triangle ABC intersects $[BC]$ at D ; a line thru D and parallel to (CA) intersects (AB) at E ; a line thru E and parallel to (BC) intersects (AC) at F .

Show that $AE = FC$.



E Equidistant property

Recall that the distance from a line ℓ to a point P is defined as the distance from P to its footpoint on ℓ ; see Section 5F.

8.13. Proposition. Assume $\triangle ABC$ is not degenerate. Then a point X lies on a bisector or external bisector of $\angle ABC$ if and only if X is equidistant from the lines (AB) and (BC) .

Proof. We can assume that X does not lie on the union of (AB) and (BC) . Otherwise, the distance to one of the lines vanishes; in this case, $X = B$ is the only point equidistant from the two lines.

Let Y and Z be the reflections of X across (AB) and (BC) respectively. Note that

$$Y \neq Z.$$

Otherwise, both lines (AB) and (BC) are perpendicular bisectors of $[XY]$. Hence $(AB) = (BC)$, but this is impossible since $\triangle ABC$ is not degenerate.

By Proposition 5.6,

$$XB = YB = ZB.$$

Note that X is equidistant from (AB) and (BC) if and only if $XY = XZ$. Applying SSS and then SAS, we get that

$$\begin{aligned} XY &= XZ \\ \Downarrow \\ \triangle XBY &\cong \triangle XBZ \\ \Downarrow \\ \angle XBY &\equiv \pm \angle XBZ. \end{aligned}$$

Since $Y \neq Z$, we get that $\angle XBY \neq \angle XBZ$. Therefore X is equidistant from (AB) and (BC) if and only if

$$\textcircled{5} \quad \angle XBY \equiv -\angle XBZ.$$

By Proposition 5.6, A lies on the bisector of $\angle XBY$, and B lies on the bisector of $\angle XBZ$; that is,

$$2 \cdot \angle XBA \equiv \angle XBY, \quad 2 \cdot \angle XBC \equiv \angle XBZ.$$

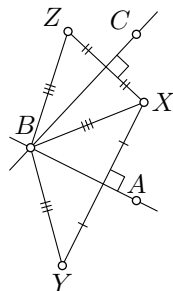
By $\textcircled{5}$,

$$2 \cdot \angle XBA \equiv -2 \cdot \angle XBC.$$

The last identity means either

$$\angle XBA + \angle XBC \equiv 0 \quad \text{or} \quad \angle XBA + \angle XBC \equiv \pi$$

— hence the result. □



F Incenter

8.14. Theorem. *Angle bisectors of any nondegenerate triangle intersect at one point.*

The point of intersection of bisectors is called the incenter of the triangle, usually denoted by I . The point I lies at the same distance from each side. In particular, it is the center of a circle tangent to each side of the triangle. This circle is called the incircle and its radius is called the inradius of the triangle.

Proof. Let $\triangle ABC$ be a nondegenerate triangle.

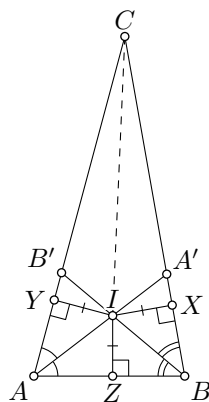
Note that points B and C lie on opposite sides of the bisector of $\angle BAC$. Hence this bisector intersects $[BC]$ at a point, say A' .

Analogously, there is $B' \in [AC]$ such that (BB') bisects $\angle ABC$.

Applying Pasch's theorem (3.12) twice for the triangles $AA'C$ and $BB'C$, we get that $[AA']$ and $[BB']$ intersect. Suppose that I denotes the point of intersection.

Let $X, Y,$ and Z be the footpoints of I on $(BC), (CA),$ and (AB) respectively. Applying Proposition 8.13, we get that

$$IY = IZ = IX.$$



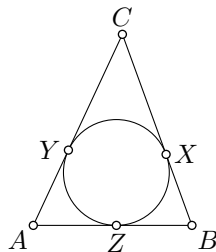
From the same lemma, we get that I lies on the bisector or on the exterior bisector of $\angle BCA$.

The line (CI) intersects $[BB']$; points B and B' lie on opposite sides of (CI) . Therefore, the angles ICB' and ICB have opposite signs. Note that $\angle ICA = \angle ICB'$. Therefore, (CI) cannot be the exterior bisector of $\angle BCA$. Hence the result. \square

8.15. Exercise. Assume sides $[BC]$, $[CA]$, and $[AB]$ of $\triangle ABC$ are tangent to the incircle at X , Y , and Z respectively. Show that

$$AY = AZ = \frac{1}{2} \cdot (AB + AC - BC).$$

Assume that base points A' , B' , and C' of the altitudes of a given triangle ABC are all mutually distinct. Then $\triangle A'B'C'$ is called an orthic triangle of $\triangle ABC$.



8.16. Exercise. Prove that an orthocenter of an acute triangle coincides with an incenter of its orthic triangle.

What should be an analog of this statement for an obtuse triangle?

8.17. Exercise. Let I be the intersection of angle bisectors at A and B of a nondegenerate triangle ABC . Denote by D the intersection of the angle bisector at A with the side $[BC]$. Show that

$$\frac{AI}{DI} = \frac{b+c}{a},$$

where $a = BC$, $b = CA$, and $c = AB$.

Use it to build another proof of 8.14.

Chapter 9

Inscribed angles

A Angle between a tangent line and a chord

9.1. Theorem. Let Γ be a circle with a center O . Assume that a line (XQ) is tangent to Γ at X and $[XY]$ is a chord of Γ . Then

$$\bullet \quad 2 \cdot \angle QXY \equiv \angle XOY.$$

Equivalently,

$$\angle QXY \equiv \frac{1}{2} \cdot \angle XOY \quad \text{or} \quad \angle QXY \equiv \frac{1}{2} \cdot \angle XOY + \pi.$$

Proof. Note that $\triangle XOY$ is isosceles. Therefore, $\angle YXO = \angle OYX$.

Applying Theorem 7.12 to $\triangle XOY$, we get

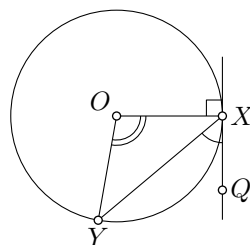
$$\begin{aligned} \pi &\equiv \angle YXO + \angle OYX + \angle XOY \equiv \\ &\equiv 2 \cdot \angle YXO + \angle XOY. \end{aligned}$$

By Lemma 5.17, $(OX) \perp (XQ)$. Therefore,

$$\angle QXY + \angle YXO \equiv \pm \frac{\pi}{2}.$$

Therefore,

$$2 \cdot \angle QXY \equiv \pi - 2 \cdot \angle YXO \equiv \angle XOY. \quad \square$$



B Inscribed angle

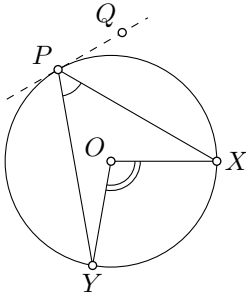
We say that a triangle is inscribed in the circle Γ if all its vertices lie on Γ .

9.2. Theorem. *Let X and Y be distinct points on a circle Γ centered at O . Then $\triangle XPY$ is inscribed in Γ if and only if*

$$\textcircled{2} \quad 2 \cdot \angle XPY \equiv \angle XOY.$$

Equivalently, if and only if

$$\angle XPY \equiv \frac{1}{2} \cdot \angle XOY \quad \text{or} \quad \angle XPY \equiv \pi + \frac{1}{2} \cdot \angle XOY.$$



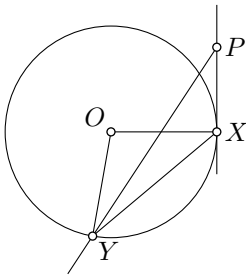
Proof; the “only if” part. Let (PQ) be the tangent line to Γ at P . By Theorem 9.1,

$$2 \cdot \angle QPX \equiv \angle POX, \quad 2 \cdot \angle QPY \equiv \angle POY.$$

Subtracting one identity from the other, we get $\textcircled{2}$.

“If” part. Assume that $\textcircled{2}$ holds for some $P \notin \Gamma$. Note that $\angle XOY \neq 0$. Therefore, $\angle XPY \neq 0$ nor π ; that is, $\triangle PXY$ is nondegenerate.

The line (PX) is tangent to Γ at the point X , or it intersects Γ at another point. In the latter case, suppose that P' denotes this point of intersection.

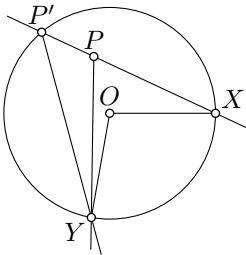


In the first case, by Theorem 9.1, we have

$$2 \cdot \angle PXY \equiv \angle XOY \equiv 2 \cdot \angle XPY.$$

Applying the transversal property (7.9), we get that $(XY) \parallel (PY)$, which is impossible since $\triangle PXY$ is nondegenerate.

In the second case, applying the “if” part and that $P, X,$ and P' lie on one line (see Exercise 2.11) we get that



$$\begin{aligned} 2 \cdot \angle P'PY &\equiv 2 \cdot \angle XPY \equiv \angle XOY \equiv \\ &\equiv 2 \cdot \angle XP'Y \equiv 2 \cdot \angle XP'P. \end{aligned}$$

Again, by the transversal property, $(PY) \parallel (P'Y)$, which is impossible since $\triangle PXY$ is nondegenerate. \square

9.3. Exercise. Let $X, X', Y,$ and Y' be distinct points on the circle Γ . Assume (XX') meets (YY') at a point P . Show that

- (a) $2 \cdot \angle XPY \equiv \angle XOY + \angle X'OY'$;
- (b) $\triangle PXY \sim \triangle PY'X'$;
- (c) $PX \cdot PX' = |OP^2 - r^2|$, where O is the center and r is the radius of Γ .

(The value $OP^2 - r^2$ is called the power of the point P with respect to the circle Γ . Part (c) of the exercise makes it a useful tool to study circles, but we are not going to consider it further in the book.)

9.4. Exercise. Three chords $[XX'], [YY'],$ and $[ZZ']$ of a circle Γ intersect at a point P . Show that

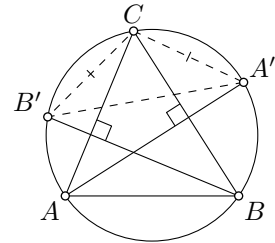
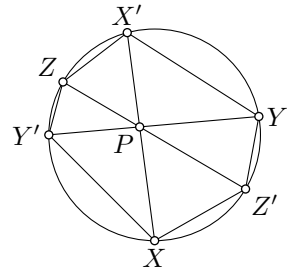
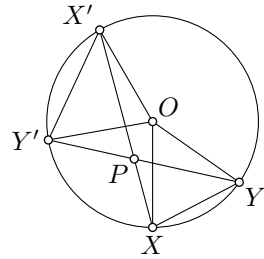
$$XY' \cdot ZX' \cdot YZ' = X'Y \cdot Z'X \cdot Y'Z.$$

9.5. Exercise. Let Γ be a circumcircle of an acute triangle ABC . Denote by A' and B' the second points of intersection of the altitudes from A and B with Γ . Show that $\triangle A'B'C$ is isosceles.

9.6. Exercise. Let $[XY]$ and $[X'Y']$ be two parallel chords of a circle. Show that $XX' = YY'$.

9.7. Exercise. Watch “Why is pi here? And why is it squared? A geometric answer to the Basel problem” by Grant Sanderson. (It is available on YouTube.)

Prepare one question.



C Points on a circle

Recall that the diameter of a circle is a chord that passes thru the center. If $[XY]$ is the diameter of a circle with center O , then $\angle XOY = \pi$. Hence Theorem 9.2 implies the following:

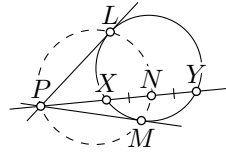
9.8. Corollary. Suppose Γ is a circle with the diameter $[AB]$. A triangle ABC has a right angle at C if and only if $C \in \Gamma$.

9.9. Exercise. Given four points $A, B, A',$ and B' , construct a point Z such that both angles AZB and $A'ZB'$ are right.

9.10. Exercise. Let $\triangle ABC$ be a nondegenerate triangle, A' and B' be footpoints of altitudes from A and B respectively. Show that the four points $A, B, A',$ and B' lie on one circle. What is the center of this circle?

9.11. Exercise. Assume a line ℓ , a circle with its center on ℓ , and a point $P \notin \ell$ are given. Make a ruler-only construction of the perpendicular to ℓ from P .

9.12. Exercise. Suppose that lines $\ell, m,$ and n pass thru a point P ; the lines ℓ and m are tangent to a circle Γ at L and M ; the line n intersects Γ at two points X and Y . Let N be the midpoint of $[XY]$. Show that the points $P, L, M,$ and N lie on one circle.



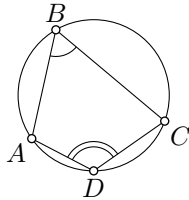
We say that a quadrangle $ABCD$ is inscribed in circle Γ if all the points $A, B, C,$ and D lie on Γ .

9.13. Corollary. A nondegenerate quadrangle $ABCD$ is inscribed in a circle if and only if

$$2 \cdot \angle ABC \equiv 2 \cdot \angle ADC.$$

Proof. Since $\square ABCD$ is nondegenerate, so is $\triangle ABC$. Let O and Γ denote the circumcenter and circumcircle of $\triangle ABC$ (they exist by Exercise 8.2).

According to Theorem 9.2,



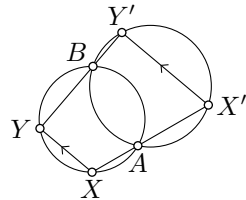
$$2 \cdot \angle ABC \equiv \angle AOC.$$

From the same theorem, $D \in \Gamma$ if and only if

$$2 \cdot \angle ADC \equiv \angle AOC,$$

hence the result. □

9.14. Exercise. Consider two circles Γ and Γ' that intersect at two distinct points A and B . Assume $[XY]$ and $[X'Y']$ are the chords of Γ and Γ' respectively, such that A lies between X and X' and B lies between Y and Y' . Show that $(XY) \parallel (X'Y')$.



9.15. Advanced exercise. Make a ruler-and-compass construction of $\triangle ABC$, given its perimeter $p, \beta = \angle ABC,$ and $b = AC$.

D Method of additional circle

Problem. Assume that two chords $[AA']$ and $[BB']$ intersect at the point P inside their circle. Let X be a point such that both angles XAA' and XBB' are right. Show that $(XP) \perp (A'B')$.

Solution. Set $Y = (A'B') \cap (XP)$.

Both angles XAA' and XBB' are right; therefore

$$2 \cdot \angle XAA' \equiv 2 \cdot \angle XBB'.$$

By Corollary 9.13, $\square XAPB$ is inscribed. Applying this theorem again we get that

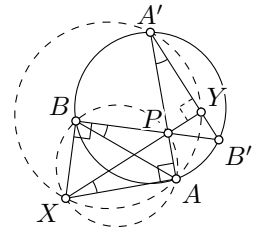
$$2 \cdot \angle AXP \equiv 2 \cdot \angle ABP.$$

Since $\square ABA'B'$ is inscribed,

$$2 \cdot \angle ABB' \equiv 2 \cdot \angle AA'B'.$$

It follows that

$$2 \cdot \angle AXY \equiv 2 \cdot \angle AA'Y.$$



By the same theorem, $\square XAYA'$ is inscribed, and therefore,

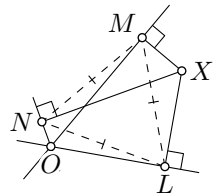
$$2 \cdot \angle XAA' \equiv 2 \cdot \angle XYA'.$$

Since $\angle XAA'$ is right, so is $\angle XYA'$. That is, $(XP) \perp (A'B')$. □

9.17. Exercise. Find an inaccuracy in the solution of the problem and try to fix it.

The method used in the solution is called the *method of additional circle* since the circumcircles of the quadrangles $XAPB$ and $XAYA'$ above can be considered as *additional constructions*.

9.18. Exercise. Assume three lines ℓ , m , and n intersect at point O and form six equal angles at O . Let X be a point distinct from O . Let L , M , and N denote the footpoints of perpendiculars from X on ℓ , m , and n respectively. Show that $\triangle LMN$ is equilateral.



9.19. Advanced exercise. Assume that a point P lies on a circumcircle of $\triangle ABC$. Show that three footpoints of P on the lines (AB) , (BC) , and (CA) lie on one line (this is the so-called *Simson line* of P).

E Arcs of circlines

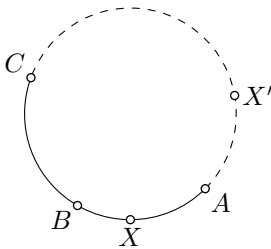
A subset of a circle bounded by two points is called a circular arc.

More precisely, suppose A , B , and C are distinct points on a circle Γ . The circular arc ABC is the subset that includes the points A , C , as well as all the points on Γ that lie with B on the same side of (AC) .

Points A and C are called endpoints of the circular arc ABC . There are precisely two circular arcs of Γ with the given endpoints; they are opposite to each other.

Suppose X is another point on Γ . By Corollary 9.13 we have that $2 \cdot \angle AXC \equiv 2 \cdot \angle ABC$; that is,

$$\angle AXC \equiv \angle ABC \quad \text{or} \quad \angle AXC \equiv \angle ABC + \pi.$$



Recall that X and B lie on the same side from (AC) if and only if $\angle AXC$ and $\angle ABC$ have the same sign (see Exercise 3.13). It follows that

◇ X lies on the arc ABC if and only if

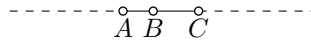
$$\angle AXC \equiv \angle ABC;$$

◇ X lies on the arc opposite to ABC if


$$\angle AXC \equiv \angle ABC + \pi.$$

Note that a circular arc ABC is defined if $\triangle ABC$ is not degenerate. If $\triangle ABC$ is degenerate, then arc ABC is defined as a subset of the line bounded by A and C that contains B .

More precisely, if B lies between A and C , then the arc ABC is defined as the line segment $[AC]$. If B' lies on the extension of $[AC]$, then the arc $AB'C$ is defined as a union of disjoint half-lines $[AX)$ and $[CY)$ in (AC) . In this case, the arcs ABC and $AB'C$ are called opposite to each other.



In addition, any half-line $[AB)$ will be regarded as an arc. If A lies between B and X , then $[AX)$ will be called opposite to $[AB)$. This degenerate arc has only one endpoint A .



It will be convenient to use the notion of circline, which means *circle or line*. For example, any arc is a subset of a circline; we also may use the term circline arc if we want to emphasize that the arc might be degenerate. Note that for any three distinct points A , B , and C there is a unique circline arc ABC .

The following statement summarizes the discussion above.

9.20. Proposition. *Let ABC be a circline arc and X be a point distinct from A and C . Then*

(a) *X lies on the arc ABC if and only if*

$$\angle AXC = \angle ABC;$$

(b) *X lies on the arc opposite to ABC if and only if*

$$\angle AXC \equiv \angle ABC + \pi;$$

9.21. Exercise. *Given an acute triangle ABC , make a ruler-and-compass construction of a point Z such that*

$$\angle AZB = \angle BZC = \angle CZA = \pm \frac{2}{3} \cdot \pi.$$

9.22. Exercise. *Suppose that a point P lies on the circumcircle of an equilateral triangle ABC and $PA \leq PB \leq PC$. Show that*

$$PA + PB = PC.$$

A quadrangle $ABCD$ is inscribed if all the points A, B, C , and D lie on a circline Γ . If the arcs ABC and ADC are opposite, then we say that the points A, B, C , and D appear on Γ in the same cyclic order.

This definition allows us to formulate the following refinement of Corollary 9.13 which includes degenerate quadrangles. It follows directly from 9.20.

9.23. Proposition. *A quadrangle $ABCD$ is inscribed in a circline if and only if*

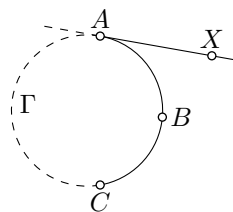
$$\angle ABC + \angle CDA \equiv 0 \quad \text{or} \quad \angle ABC + \angle CDA \equiv \pi.$$

Moreover, the second identity holds if and only if the points A, B, C, D appear on the circline in the same cyclic order.

F Tangent half-lines

Suppose ABC is an arc of a circle Γ . A half-line $[AX)$ is called tangent to the arc ABC at A if the line (AX) is tangent to Γ , and the points X and B lie on the same side of the line (AC) .

If the arc is formed by the line segment $[AC]$, then the half-line $[AC)$ is considered to be tangent



at A . If the arc is formed by a union of two half-lines $[AX)$ and $[BY)$ in (AC) , then the half-line $[AX)$ is considered to be tangent to the arc at A .

9.24. Proposition. *A half-line $[AX)$ is tangent to an arc ABC if and only if*

$$\angle ABC + \angle CAX \equiv \pi.$$

Proof. For a degenerate arc ABC , the statement is evident. Assume it is nondegenerate.

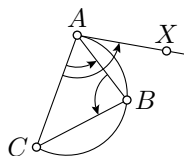
Note that the tangent half-line to the arc ABC at A is uniquely defined. Furthermore, there is a unique half-line $[AX)$ such that the equation in the proposition holds. Therefore it is sufficient to prove the “only-if” part.

If $[AX)$ is tangent to the arc ABC , then by 9.1 and 9.2, we get that

$$2 \cdot \angle ABC + 2 \cdot \angle CAX \equiv 0.$$

Therefore, either

$$\angle ABC + \angle CAX \equiv \pi, \quad \text{or} \quad \angle ABC + \angle CAX \equiv 0.$$



By the definition of a tangent half-line, X and B lie on the same side of (AC) . By 3.10 and 3.7, the angles CAX , CAB , and ABC have the same sign. In particular, $\angle ABC + \angle CAX \neq 0$; that is, we are left with the case

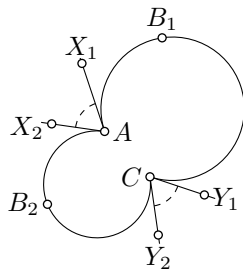
$$\angle ABC + \angle CAX \equiv \pi. \quad \square$$

9.25. Exercise. *Show that there is a unique arc with given endpoints A and C , that is tangent to a given half-line $[AX)$.*

9.26. Exercise. *Let $[AX)$ be a tangent half-line to an arc ABC . Assume Y is a point on the arc ABC that is distinct from A . Show that $\angle XAY$ approaches 0 as AY approaches 0.*

9.27. Exercise. *Given two circular arcs AB_1C and AB_2C , let $[AX_1)$ and $[AX_2)$ be half-lines tangent to the arcs AB_1C and AB_2C at A , and $[CY_1)$ and $[CY_2)$ be half-lines tangent to the arcs AB_1C and AB_2C at C . Show that*

$$\angle X_1AX_2 \equiv -\angle Y_1CY_2.$$



Chapter 10

Inversion

Let Ω be the circle with center O and radius r . The inversion of a point P across Ω is the point $P' \in [OP)$ such that

$$OP \cdot OP' = r^2.$$

In this case, the circle Ω will be called the circle of inversion, and its center O is called the center of inversion.

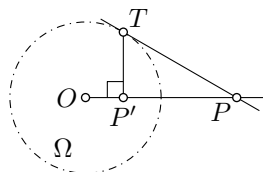
The inverse of O is undefined.

Note that if P is inside Ω , then P' is outside and the other way around. Furthermore, $P = P'$ if and only if $P \in \Omega$.

Note that the inversion maps P' back to P .

10.1. Exercise. Let Ω be a circle centered at O . Suppose that a line (PT) is tangent to Ω at T . Let P' be a footpoint of T on (OP) .

Show that P' is the inverse of P across Ω .



10.2. Lemma. Let Γ be a circle centered at O . Assume A' and B' are the inverses of A and B across Γ . Then

$$\triangle OAB \sim \triangle OB'A'.$$

Moreover,

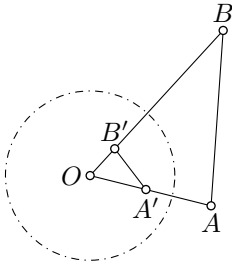
$$\angle AOB \equiv -\angle B'OA',$$

❶

$$\angle OBA \equiv -\angle OA'B',$$

$$\angle BAO \equiv -\angle A'B'O.$$

Proof. Let r be the radius of the circle of the inversion.



By the definition of an inversion,

$$OA \cdot OA' = OB \cdot OB' = r^2.$$

Therefore,

$$\frac{OA}{OB'} = \frac{OB}{OA'}.$$

Clearly,

$$\textcircled{2} \quad \angle AOB = \angle A'OB' \equiv -\angle B'OA'.$$

From SAS, we get that

$$\triangle OAB \sim \triangle OB'A'.$$

Applying Theorem 3.7 and $\textcircled{2}$, we get $\textcircled{1}$. \square

10.3. Exercise. Let P' be an inverse of P across a circle Γ . Assume that $P \neq P'$. Show that the value $\frac{PX}{P'X}$ is the same for all $X \in \Gamma$.

The converse to the exercise above also holds. Namely, given a positive real number $k \neq 1$ and two distinct points P and P' the locus of points X such that $\frac{PX}{P'X} = k$ forms a circle which is called the Apollonian circle (see also Section 7F). In this case, P' is the inverse of P across the Apollonian circle.

10.4. Exercise. Let A' , B' , and C' be images of A , B , and C under the inversion across the incircle of $\triangle ABC$. Show that the incenter of $\triangle ABC$ is the orthocenter of $\triangle A'B'C'$.

10.5. Exercise. Make a ruler-and-compass construction of an inverse of a given point across a given circle.

A Cross-ratio

The following theorem lists quantities that do not change after inversion.

10.6. Theorem. Let $ABCD$ and $A'B'C'D'$ be two quadrangles such that the points A' , B' , C' , and D' are the inverses of A , B , C , and D respectively. Then

(a)

$$\frac{AB \cdot CD}{BC \cdot DA} = \frac{A'B' \cdot C'D'}{B'C' \cdot D'A'}.$$

(b)

$$\angle ABC + \angle CDA \equiv -(\angle A'B'C' + \angle C'D'A').$$

(c) If the quadrangle $ABCD$ is inscribed, then so is $\square A'B'C'D'$.

Proof; (a). Let O be the center of the inversion. According to Lemma 10.2, $\triangle AOB \sim \triangle B'OA'$. Therefore,

$$\frac{AB}{A'B'} = \frac{OA}{OB'}.$$

Analogously,

$$\frac{BC}{B'C'} = \frac{OC}{OB'}, \quad \frac{CD}{C'D'} = \frac{OC}{OD'}, \quad \frac{DA}{D'A'} = \frac{OA}{OD'}.$$

Therefore,

$$\frac{AB}{A'B'} \cdot \frac{CD}{C'D'} = \frac{OA}{OB'} \cdot \frac{OC}{OD'} = \frac{OC}{OB'} \cdot \frac{OA}{OD'} = \frac{BC}{B'C'} \cdot \frac{DA}{D'A'}.$$

Hence (a) follows.

(b). According to Lemma 10.2,

$$\textcircled{3} \quad \begin{aligned} \angle ABO &\equiv -\angle B'A'O, & \angle OBC &\equiv -\angle OC'B', \\ \angle CDO &\equiv -\angle D'C'O, & \angle ODA &\equiv -\angle OA'D'. \end{aligned}$$

By Axiom IIIb,

$$\begin{aligned} \angle ABC &\equiv \angle ABO + \angle OBC, & \angle D'C'B' &\equiv \angle D'C'O + \angle OC'B', \\ \angle CDA &\equiv \angle CDO + \angle ODA, & \angle B'A'D' &\equiv \angle B'A'O + \angle OA'D'. \end{aligned}$$

Therefore, summing the four identities in $\textcircled{3}$, we get that

$$\angle ABC + \angle CDA \equiv -(\angle D'C'B' + \angle B'A'D').$$

Applying Axiom IIIb and Exercise 7.16, we get that

$$\begin{aligned} \angle A'B'C' + \angle C'D'A' &\equiv -(\angle B'C'D' + \angle D'A'B') \equiv \\ &\equiv \angle D'C'B' + \angle B'A'D'. \end{aligned}$$

Hence (b) follows.

(c). Follows by (b) and Corollary 9.13. □

B Inversive plane and circlines

Let Ω be a circle with the center O and the radius r . Consider the inversion across Ω .

Recall that the inverse of O is undefined. To deal with this problem it is useful to add an extra point to the plane, which will be called the point at infinity, denoted as ∞ . We can assume that ∞ is the inverse of O and the other way around.

The Euclidean plane with the added point at infinity is called the *inversive plane*.

We will always assume that any line and half-line contains ∞ .

Recall that *circline* means *circle or line*. Therefore we may say “if a circline contains ∞ , then it is a line” or “a circline that does not contain ∞ is a circle”.

Note that according to Theorem 8.1, for any $\triangle ABC$ there is a unique circline that passes thru A , B , and C (if $\triangle ABC$ is degenerate, then this is a line, and if not it is a circle).

10.7. Theorem. *In the inversive plane, the inverse of a circline is a circline.*

Exercise 14.16 gives a partial converse to the theorem.

Proof. Suppose O denotes the center of the inversion and r its radius.

Let Γ be a circline. Choose three distinct points A , B , and C on Γ . (If $\triangle ABC$ is nondegenerate, then Γ is the circumcircle of $\triangle ABC$; if $\triangle ABC$ is degenerate, then Γ is the line passing thru A , B , and C .)

Let A' , B' , and C' denote the inverses of A , B , and C respectively. Let Γ' be the circline that passes thru A' , B' , and C' .

Assume D is a point of the inversive plane that is distinct from A , C , O , and ∞ . Suppose that D' denotes the inverse of D .

By Theorem 10.6c, $D' \in \Gamma'$ if and only if $D \in \Gamma$.

It remains to prove that $O \in \Gamma \Leftrightarrow \infty \in \Gamma'$ and $\infty \in \Gamma \Leftrightarrow O \in \Gamma'$. We will prove that

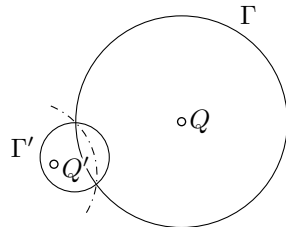
$$\infty \in \Gamma \implies O \in \Gamma';$$

the remaining implications can be proved along the same lines.

If $\infty \in \Gamma$, then Γ is a line; or, equivalently, for any $\varepsilon > 0$, the circline Γ contains a point P such that $OP > r/\varepsilon$. For the inversion $P' \in \Gamma'$ of P , we have that $OP' = r^2/OP < r \cdot \varepsilon$. That is, the circline Γ' contains points arbitrarily close to O . It follows that $O \in \Gamma'$. \square

10.8. Exercise. *Assume that a circle Γ' is an inverse of a circle Γ centered at Q . Suppose Q' denotes the inverse of Q . Show that Q' is not the center of Γ' .*

Assume that a *circumtool* is a geometric construction tool that produces a circline passing thru any three given points.



10.9. Exercise. Show that with only a circumtool, it is impossible to construct the center of a given circle.

10.10. Exercise. Show that for any pair of tangent circles in the inversive plane, there is an inversion that sends them to a pair of parallel lines.

10.11. Theorem. Consider an inversion of the inversive plane across a circle Ω centered at O . Then

- (a) A line passing thru O is inverted into itself.
- (b) A line not passing thru O is inverted into a circle that passes thru O , and the other way around.
- (c) A circle not passing thru O is inverted into a circle not passing thru O .

Proof. In the proof, we use Theorem 10.7 without mentioning it.

(a). Note that if a line passes thru O , it contains both ∞ and O . Therefore, its inverse also contains ∞ and O . In particular, the image is a line passing thru O .

(b). Since any line ℓ passes thru ∞ , its image ℓ' has to contain O . If the line does not contain O , then $\ell' \not\cong \infty$; that is, ℓ' is not a line. Therefore, ℓ' is a circle that passes thru O .

(c). If the circle Γ does not contain O , then its image Γ' does not contain ∞ . Therefore, Γ' is a circle. Since $\Gamma \not\cong \infty$ we get that $\Gamma' \not\cong O$. Hence the result. \square

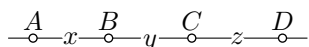
C Method of inversion

Here is an application of inversion, which we include as an illustration; we will not use it further in the book.

10.12. Ptolemy's identity. Let $ABCD$ be an inscribed quadrangle. Assume that points A , B , C , and D appear on the circline in the same order. Then

$$AB \cdot CD + BC \cdot DA = AC \cdot BD.$$

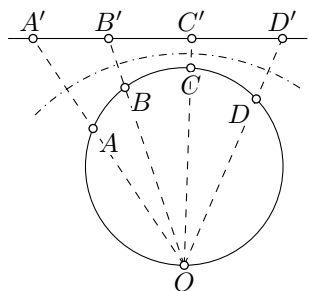
Proof. Assume the points A , B , C , and D lie on one line in this order.



Set $x = AB$, $y = BC$, $z = CD$. Note that

$$x \cdot z + y \cdot (x + y + z) = (x + y) \cdot (y + z).$$

Since $AC = x + y$, $BD = y + z$, and $DA = x + y + z$, it proves the identity.



It remains to consider the case when the quadrangle $ABCD$ is inscribed in a circle, say Γ .

The identity can be rewritten as

$$\frac{AB \cdot DC}{BD \cdot CA} + \frac{BC \cdot AD}{CA \cdot DB} = 1.$$

On the left-hand side we have two cross-ratios. According to Theorem 10.6a, the left-hand side does not change if we apply an inversion to each point.

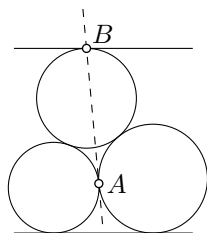
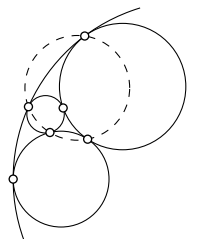
Consider an inversion across a circle centered at point O that lies on Γ between A and D . By Theorem 10.11, this inversion maps Γ to a line. This reduces the problem to the case when A , B , C , and D lie on one line, which was already considered. \square

In the proof above, we rewrite Ptolemy's identity in a form that is invariant with respect to inversion and then apply an inversion which makes the statement evident. The solution of the following exercise is based on the same idea; one has to make a right choice of inversion.

10.13. Exercise. Assume that four circles are mutually tangent to each other. Show that four (among six) of their points of tangency lie on one circline.

10.14. Advanced exercise. Assume that three circles are tangent to each other and to two parallel lines as shown in the picture.

Show that (AB) is tangent to two circles at A .



D Perpendicular circles

Assume two circles Γ and Ω intersect at two points X and Y . Let ℓ and m be the tangent lines at X to Γ and Ω respectively. Analogously, let ℓ' and m' be the tangent lines at Y to Γ and Ω .

From Exercise 9.27, we can deduce that $\ell \perp m$ if and only if $\ell' \perp m'$.

We say that the circle Γ is perpendicular to the circle Ω (briefly $\Gamma \perp \Omega$) if they intersect and the lines tangent to the circles at one point (and therefore, both points) of intersection are perpendicular.

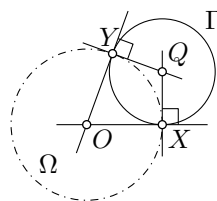
Similarly, we say that the circle Γ is perpendicular to the line ℓ (briefly $\Gamma \perp \ell$) if $\Gamma \cap \ell \neq \emptyset$ and ℓ is perpendicular to the tangent lines to Γ at one point (and therefore, both points) of intersection. According to Lemma 5.17, this happens only if the line ℓ passes thru the center of Γ .

Now we can talk about perpendicular circlines.

10.15. Theorem. *Assume Γ and Ω are distinct circles. Then $\Omega \perp \Gamma$ if and only if the circle Γ coincides with its inversion across Ω .*

Proof. Suppose that Γ' denotes the inverse of Γ .

“Only if” part. Let O be the center of Ω and Q be the center of Γ . Let X and Y denote the points of intersections of Γ and Ω . By Lemma 5.17, $\Gamma \perp \Omega$ if and only if (OX) and (OY) are tangent to Γ .



Since $O \neq X$, Lemma 5.10 implies that O lies outside of Γ . By Theorem 10.11c, Γ' is a circle.

Note that Γ' is also tangent to (OX) and (OY) at X and Y respectively. It follows that X and Y are the footpoints of the center of Γ' on (OX) and (OY) . Therefore, both Γ' and Γ have the center Q . Finally, $\Gamma' = \Gamma$, since both circles pass thru X .

“If” part. Assume $\Gamma = \Gamma'$.

Since $\Gamma \neq \Omega$, there is a point P that lies on Γ , but not on Ω . Let P' be the inverse of P across Ω . Since $\Gamma = \Gamma'$, we have that $P' \in \Gamma$. In particular, the half-line $[OP)$ intersects Γ at two points. By Exercise 5.13, O lies outside of Γ .

As Γ has points inside and outside of Ω , the circles Γ and Ω intersect. The latter follows from Exercise 3.20.

Let X be a point of their intersection. We need to show that (OX) is tangent to Γ , which means X is the only intersection point of (OX) and Γ .

Assume Z is another point of intersection of (OX) and Γ . Since O is outside of Γ , the point Z lies on the half-line $[OX)$.

Suppose that Z' denotes the inverse of Z across Ω . Clearly, the three points Z, Z', X lie on Γ and (OX) , which contradicts Lemma 5.15. \square

It is convenient to define the inversion across the line ℓ as the reflection across ℓ . This way we can talk about inversion across an arbitrary circline.

10.16. Corollary. *Let Ω and Γ be distinct circlines in the inversive plane. Then the inversion across Ω sends Γ to itself if and only if $\Omega \perp \Gamma$.*

Proof. By Theorem 10.15, it is sufficient to consider the case when Ω or Γ is a line.

Assume Ω is a line, so the inversion across Ω is a reflection. In this case, the statement follows from Corollary 5.8.

If Γ is a line, then the statement follows from Theorem 10.11. \square

10.17. Corollary. *Let P and P' be two distinct points such that P' is the inverse of P across the circle Ω . If a circline Γ passes thru P and P' , then $\Gamma \perp \Omega$.*

Proof. Without loss of generality, we may assume that P is inside and P' is outside Ω . By Theorem 3.17, Γ intersects Ω . Suppose that A denotes a point of intersection.

Suppose that Γ' denotes the inverse of Γ . Since A is a self-inverse, the points A , P , and P' lie on Γ' . By Exercise 8.2, $\Gamma' = \Gamma$ and by Theorem 10.15, $\Gamma \perp \Omega$. \square

10.18. Corollary. *Let P and Q be two distinct points inside a circle Ω . Then there is a unique circline Γ perpendicular to Ω that passes thru P and Q .*

Proof. Let P' be the inverse of the point P across the circle Ω . According to Corollary 10.17, if a circline that passes thru P and Q is perpendicular to Ω , then it passes thru P' , and the converse holds as well.

Note that P' lies outside of Ω . Therefore, the points P , P' , and Q are distinct.

According to Exercise 8.2, there is a unique circline passing thru P , Q , and P' . Hence the result. \square

10.19. Exercise. *Let P , Q , P' , and Q' be points in the Euclidean plane. Assume P' and Q' are inverses of P and Q respectively. Show that the quadrangle $PQP'Q'$ is inscribed.*

10.20. Exercise. *Let Ω_1 and Ω_2 be two perpendicular circles with centers at O_1 and O_2 respectively. Show that the inverse of O_1 across Ω_2 coincides with the inverse of O_2 across Ω_1 .*

10.21. Exercise. *Three distinct circles — Ω_1 , Ω_2 , and Ω_3 , intersect at two points — A and B . Assume that a circle Γ is perpendicular to Ω_1 and Ω_2 . Show that $\Gamma \perp \Omega_3$.*

Let us consider two new construction tools: the circumtool that constructs a circline thru three given points, and the inverter — a tool that constructs an inverse of a given point across a given circline.

10.22. Exercise. Given two circles Ω_1, Ω_2 and a point P that does not lie on the circles, use only circumtool and invensor to construct a circline Γ thru P , and perpendicular to both Ω_1 and Ω_2 .

10.23. Advanced exercise. Given three disjoint circles $\Omega_1, \Omega_2,$ and Ω_3 , use only circumtool and invensor to construct a circline Γ that is perpendicular to each circle $\Omega_1, \Omega_2,$ and Ω_3 .

Think what to do if two of the circles intersect.

E Angles after inversion

10.24. Proposition. In the inversive plane, an inverse of an arc is an arc.

Proof. Consider four distinct points $A, B, C,$ and D ; let $A', B', C',$ and D' be their inverses. We need to show that D lies on the arc ABC if and only if D' lies on the arc $A'B'C'$. According to Proposition 9.20, the latter is equivalent to the following:

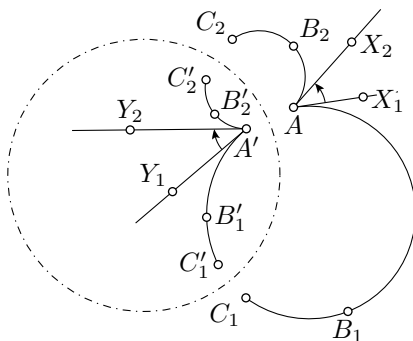
$$\angle ADC = \angle ABC \iff \angle A'D'C' = \angle A'B'C'.$$

The latter follows from Theorem 10.6*b*. □

The following theorem states that the angle between arcs changes only its sign after the inversion.

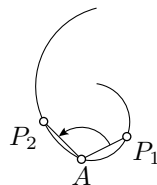
10.25. Theorem. Let AB_1C_1, AB_2C_2 be two arcs in the inversive plane, and arcs $A'B_1C'_1, A'B_2C'_2$ be their inverses. Let $[AX_1)$ and $[AX_2)$ be the half-lines tangent to AB_1C_1 and AB_2C_2 at A , and $[A'Y_1)$ and $[A'Y_2)$ be the half-lines tangent to $A'B_1C'_1$ and $A'B_2C'_2$ at A' . Then

$$\angle X_1AX_2 \equiv -\angle Y_1A'Y_2.$$



The angle between arcs can be defined as the angle between their tangent half-lines at the common endpoint. Therefore under inversion, the angles between arcs are preserved up to sign.

From Exercise 9.26, it follows that the angle between arcs with the common endpoint A is the limit of $\angle P_1AP_2$



where P_1 and P_2 are points approaching A along the corresponding arcs. This observation can be used to define the angle between a pair of curves emerging from one point. It turns out that under inversion, angles between curves are also preserved up to sign.

Proof. By Proposition 9.24,

$$\begin{aligned} \angle X_1AX_2 &\equiv \angle X_1AC_1 + \angle C_1AC_2 + \angle C_2AX_2 \equiv \\ &\equiv (\pi - \angle C_1B_1A) + \angle C_1AC_2 + (\pi - \angle AB_2C_2) \equiv \\ &\equiv -(\angle C_1B_1A + \angle AB_2C_2 + \angle C_2AC_1) \equiv \\ &\equiv -(\angle C_1B_1A + \angle AB_2C_1) - (\angle C_1B_2C_2 + \angle C_2AC_1). \end{aligned}$$

The same way, we get

$$\angle Y_1A'Y_2 \equiv -(\angle C'_1B'_1A' + \angle A'B'_2C'_1) - (\angle C'_1B'_2C'_2 + \angle C'_2A'C'_1).$$

By Theorem 10.6*b*,

$$\begin{aligned} \angle C_1B_1A + \angle AB_2C_1 &\equiv -(\angle C'_1B'_1A' + \angle A'B'_2C'_1), \\ \angle C_1B_2C_2 + \angle C_2AC_1 &\equiv -(\angle C'_1B'_2C'_2 + \angle C'_2A'C'_1), \end{aligned}$$

and hence the result. \square

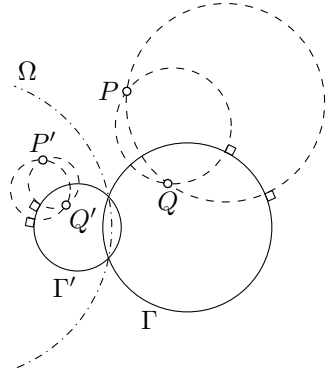
10.26. Corollary. *Let P be an inverse of a point Q across a circle Γ . Assume that P' , Q' , and Γ' are the inverses of P , Q , and Γ across another circle Ω . Then P' is the inverse of Q' across Γ' .*

Proof. If $P = Q$, then $P' = Q' \in \Gamma'$. Therefore, P' is the inverse of Q' across Γ' .

It remains to consider the case $P \neq Q$. Let Δ_1 and Δ_2 be two distinct circles that intersect at P and Q . According to Corollary 10.17, $\Delta_1 \perp \Gamma$ and $\Delta_2 \perp \Gamma$.

Let Δ'_1 and Δ'_2 denote the inverses of Δ_1 and Δ_2 across Ω . Clearly, Δ'_1 meets Δ'_2 at P' and Q' .

By Theorem 10.25, $\Delta'_1 \perp \Gamma'$ and $\Delta'_2 \perp \Gamma'$. By Corollary 10.16, P' is the inverse of Q' across Γ' . \square



Chapter 11

Neutral plane

Let us remove Axiom V from our axiomatic system (Section 2A). This way we define a new object called the neutral plane or absolute plane. (In a neutral plane, Axiom V may or may not hold.)

Clearly, any theorem in neutral geometry holds in Euclidean geometry. In other words, the Euclidean plane is an example of a neutral plane. In the next chapter, we will construct an example of a neutral plane that is not Euclidean.

In this book, Axiom V was used starting from Chapter 6. Therefore all the statements before hold in neutral geometry.

This makes all the discussed results about half-planes, signs of angles, congruence conditions, perpendicular lines, and reflections true in neutral geometry. Recall that a statement is marked with “ \checkmark ” (for example, “**Theorem.**”) if it holds in any neutral plane, and the same proof works.

Let us give an example of a theorem in neutral geometry that admits a simpler proof in Euclidean geometry.

11.1. Hypotenuse-leg congruence condition. *Assume that triangles ABC and $A'B'C'$ have right angles at C and C' respectively, $AB = A'B'$ and $AC = A'C'$. Then $\triangle ABC \cong \triangle A'B'C'$.*

Euclidean proof. By the Pythagorean theorem $BC = B'C'$. Then the statement follows from the SSS congruence condition. \square

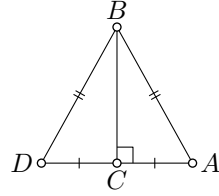
The proof of the Pythagorean theorem used properties of similar triangles, which in turn used Axiom V. Therefore this proof does not work in a neutral plane.

Neutral proof. Suppose that D denotes the reflection of A across (BC) and D' denotes the reflection of A' across $(B'C')$. Note that

$$AD = 2 \cdot AC = 2 \cdot A'C' = A'D', \quad BD = BA = B'A' = B'D'.$$

By the SSS congruence condition (4.4), we get that $\triangle ABD \cong \triangle A'B'D'$.

The statement follows since C is the midpoint of $[AD]$ and C' is the midpoint of $[A'D']$. \square



11.2. Exercise. Give a proof of Exercise 8.11 that works in the neutral plane.

11.3. Exercise. Let $ABCD$ be an inscribed quadrangle in the neutral plane. Show that

$$\angle ABC + \angle CDA \equiv \angle BCD + \angle DAB.$$

Note that one cannot use Corollary 9.13 to solve the exercise above since it uses Theorems 9.1 and 9.2, which in turn uses Theorem 7.12.

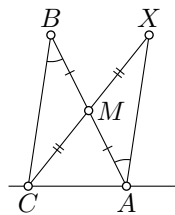
A Two angles of a triangle

In this section, we will prove a weaker form of Theorem 7.12 which holds in any neutral plane.

11.4. Proposition. Let $\triangle ABC$ be a nondegenerate triangle in the neutral plane. Then

$$|\angle CAB| + |\angle ABC| < \pi.$$

Note that according to 3.7, the angles ABC , BCA , and CAB have the same sign. Therefore, in the Euclidean plane, the theorem follows immediately from Theorem 7.12.



Proof. Let X be the reflection of C across the midpoint M of $[AB]$. By Proposition 7.6 $\angle BAX = \angle ABC$ and therefore

$$\textcircled{1} \quad \angle CAX \equiv \angle CAB + \angle ABC.$$

Since $[BM]$ and $[MX]$ do not intersect (CA) , the points B , M , and X lie on the same side of (CA) . Therefore the angles CAB and CAX have the same sign. By 3.7, $\angle CAB$ and $\angle ABC$ have the same sign; that is, all angles in $\textcircled{1}$ have the same sign.

Note that $\angle CAX \not\equiv \pi$; otherwise, X would lie on (AC) . Therefore the identity $\textcircled{1}$ implies that

$$|\angle CAB| + |\angle ABC| = |\angle CAX| < \pi. \quad \square$$

11.5. Exercise. Assume $A, B, C,$ and D are points in a neutral plane such that

$$2 \cdot \angle ABC + 2 \cdot \angle BCD \equiv 0.$$

Show that $(AB) \parallel (CD)$.

Note that one cannot apply the transversal property (7.9).

11.6. Exercise. Prove the side-angle-angle congruence condition in neutral geometry.

In other words, let ABC and $A'B'C'$ be two triangles in a neutral plane; suppose that $\triangle A'B'C'$ is nondegenerate. Show that $\triangle ABC \cong \triangle A'B'C'$ if

$$AB = A'B', \quad \angle ABC = \pm \angle A'B'C', \quad \text{and} \quad \angle BCA = \pm \angle B'C'A'.$$

Note that in the Euclidean plane, the above exercise follows from ASA and the theorem on the sum of angles of a triangle (7.12). However, Theorem 7.12 cannot be used here, since its proof uses Axiom V. Later (Theorem 13.10) we will show that Theorem 7.12 does not hold in a neutral plane.

11.7. Exercise. Assume that point D lies between vertices A and B of $\triangle ABC$ in the neutral plane. Show that

$$CD < CA \quad \text{or} \quad CD < CB.$$

B Three angles of triangle

11.8. Proposition. Let $\triangle ABC$ and $\triangle A'B'C'$ be two triangles in the neutral plane such that $AC = A'C'$ and $BC = B'C'$. Then

$$AB < A'B' \quad \text{if and only if} \quad |\angle ACB| < |\angle A'C'B'|.$$

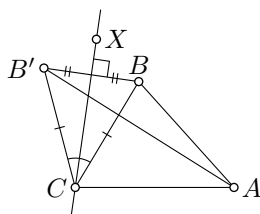
Proof. Without loss of generality, we may assume that $A = A', C = C'$, and $\angle ACB, \angle ACB' \geq 0$. In this case, we need to show that

$$AB < AB' \iff \angle ACB < \angle ACB'.$$

Choose a point X so that

$$\angle ACX = \frac{1}{2} \cdot (\angle ACB + \angle ACB').$$

Note that



- ◇ (CX) bisects $\angle BCB'$.
- ◇ (CX) is the perpendicular bisector of $[BB']$.
- ◇ A and B lie on the same side of (CX) if and only if

$$\angle ACB < \angle ACB'.$$

From Exercise 5.3, A and B lie on the same side of (CX) if and only if $AB < AB'$. Hence the result. \square

11.9. Theorem. *Let $\triangle ABC$ be a triangle in the neutral plane. Then*

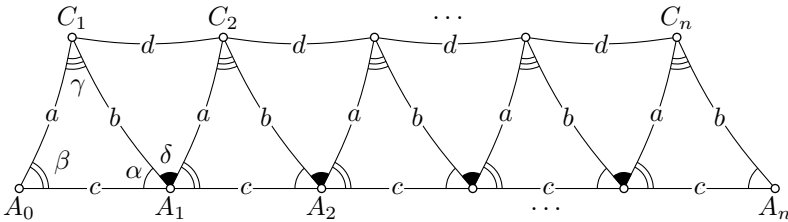
$$|\angle ABC| + |\angle BCA| + |\angle CAB| \leq \pi.$$

The following proof is due to Adrien-Marie Legendre [14], earlier proofs were given by Giovanni Saccheri [18] and Johann Lambert [13].

Proof. Set

$$\begin{aligned} a &= BC, & b &= CA, & c &= AB, \\ \alpha &= \angle CAB, & \beta &= \angle ABC, & \gamma &= \angle BCA. \end{aligned}$$

Without loss of generality, we may assume that $\alpha, \beta, \gamma \geq 0$.



Fix a positive integer n . Consider points A_0, A_1, \dots, A_n on the half-line $[BA)$, such that $BA_i = i \cdot c$ for each i . (In particular, $A_0 = B$ and $A_1 = A$.) Construct points C_1, C_2, \dots, C_n , so that $\angle A_i A_{i-1} C_i = \beta$ and $A_{i-1} C_i = a$ for each i .

By SAS, we have constructed n congruent triangles

$$\triangle ABC = \triangle A_1 A_0 C_1 \cong \triangle A_2 A_1 C_2 \cong \dots \cong \triangle A_n A_{n-1} C_n.$$

Set $d = C_1 C_2$ and $\delta = \angle C_2 A_1 C_1$. Note that

$$\textcircled{2} \quad \alpha + \beta + \delta = \pi.$$

By Proposition 11.4, we get that $\delta \geq 0$.

By construction

$$\triangle A_1 C_1 C_2 \cong \triangle A_2 C_2 C_3 \cong \dots \cong \triangle A_{n-1} C_{n-1} C_n.$$

In particular, $C_i C_{i+1} = d$ for each i .

By repeated application of the triangle inequality, we get that

$$\begin{aligned} n \cdot c &= A_0 A_n \leq \\ &\leq A_0 C_1 + C_1 C_2 + \cdots + C_{n-1} C_n + C_n A_n = \\ &= a + (n - 1) \cdot d + b. \end{aligned}$$

In particular,

$$c \leq d + \frac{1}{n} \cdot (a + b - d).$$

Since n is an arbitrary positive integer, the latter implies $c \leq d$. By Proposition 11.8, it is equivalent to

$$\gamma \leq \delta.$$

From $\textcircled{2}$, the theorem follows. □

11.10. Exercise. Let $ABCD$ be a quadrangle in the neutral plane. Suppose that $\angle DAB$ and $\angle ABC$ are right. Show that $AB \leq CD$.

C Defect

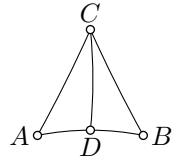
The defect of triangle $\triangle ABC$ is defined as

$$\text{defect}(\triangle ABC) := \pi - |\angle ABC| - |\angle BCA| - |\angle CAB|.$$

Note that Theorem 11.9 states that the defect of any triangle in a neutral plane has to be nonnegative. According to Theorem 7.12, any triangle in the Euclidean plane has zero defect.

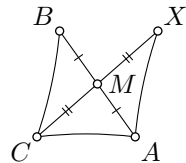
11.11. Exercise. Let $\triangle ABC$ be a nondegenerate triangle in the neutral plane. Assume D lies between A and B . Show that

$$\text{defect}(\triangle ABC) = \text{defect}(\triangle ADC) + \text{defect}(\triangle DBC).$$



11.12. Exercise. Let ABC be a nondegenerate triangle in the neutral plane. Suppose X is a reflection of C across a midpoint M of $[AB]$. Show that

$$\text{defect}(\triangle ABC) = \text{defect}(\triangle AXC).$$



11.13. Exercise. Suppose that $ABCD$ is a rectangle in the neutral plane; that is, $ABCD$ is a quadrangle with all right angles. Show that $AB = CD$.

11.14. Advanced exercise. Show that if the neutral plane has a rectangle, then all its triangles have zero defect.

D Proving that something cannot be proved

Many attempts were made to prove that any theorem in Euclidean geometry holds in neutral geometry. The latter is equivalent to the statement that Axiom V is a *theorem* in neutral geometry.

Some of these attempts were accepted as proof for long periods until a mistake was found.

Many statements in neutral geometry are equivalent to Axiom V. It means that if we exchange Axiom V for any of these statements, then we will obtain an equivalent axiomatic system.

The following theorem provides a short list of such statements. We are not going to prove it in the book.

11.15. Theorem. *The neutral plane is Euclidean if and only if one of the following equivalent conditions holds:*

- (a) *There is a line ℓ and a point $P \notin \ell$ such that there is only one line passing thru P and parallel to ℓ .*
- (b) *Every nondegenerate triangle can be circumscribed.*
- (c) *There exists a pair of distinct lines that lie at a bounded distance from each other.*
- (d) *There is a triangle with an arbitrarily large inradius.*
- (e) *There is a nondegenerate triangle with zero defect.*
- (f) *There exists a rectangle; that is, a quadrangle with all right angles.*

It is hard to imagine a neutral plane that does not satisfy some of the properties above. That is partly the reason for a large number of false proofs; each used one of such statements by accident.

Let us formulate the negation of (a) above as a new axiom; we label it h-V as a *hyperbolic version* of Axiom V.

h-V. For any line ℓ and any point $P \notin \ell$ there are at least two lines that pass thru P and parallel to ℓ .

By Theorem 7.2, a neutral plane that satisfies Axiom h-V is not Euclidean. Moreover, according to Theorem 11.15 (which we do not prove) in any non-Euclidean neutral plane, Axiom h-V holds.

It opens a way to look for a proof by contradiction. Simply exchange Axiom V to Axiom h-V and start to prove theorems in the obtained axiomatic system. In the case if we arrive at a contradiction, we prove Axiom V in a neutral plane. This idea was growing since the 5th century; the most notable results were obtained by Giovanni Saccheri [18].

The system of axioms I–IV and h-V defines a new geometry which is now called hyperbolic or Lobachevsky geometry. The more this

geometry was developed, it became more and more believable that there is no contradiction; that is, the system of axioms I–IV, and h-V is consistent. In fact, the following theorem holds true:

11.16. Theorem. *Hyperbolic geometry is consistent if and only if so is Euclidean geometry.*

The claims that hyperbolic geometry has no contradiction can be found in the private letters of Carl Friedrich Gauss, Ferdinand Schweikart, and Franz Taurinus.¹ They all seem to be afraid to state it in public. For instance, in 1818 Gauss writes to Gerling:

... I am happy that you have the courage to express yourself as if you recognized the possibility that our parallels theory along with our entire geometry could be false. But the wasps whose nest you disturb will fly around your head.

Nikolai Lobachevsky came to the same conclusion independently. Unlike the others, he dared to state it in public and in print [15]. That cost him serious trouble. A couple of years later, also independently, János Bolyai published his work [6].

It seems that Lobachevsky was the first who had a proof of Theorem 11.16 altho its formulation required rigorous axiomatics which was not developed at his time. Later, Beltrami gave a cleaner proof of the “if” part of the theorem. It was done by modeling points, lines, distances, and angle measures of one geometry using some other objects in another geometry. The same idea was used earlier by Lobachevsky [16, §34]; he modeled the Euclidean plane in the hyperbolic space.

The proof of Beltrami is the subject of the next chapter.

E Curvature

In a letter from 1824 Gauss writes:

The assumption that the sum of the three angles is less than π leads to a curious geometry, quite different from ours but completely consistent, which I have developed to my entire satisfaction, so that I can solve every problem in it with the exception of a determination of a constant, which cannot be designated a priori. The greater one takes this constant, the nearer one comes to Euclidean geometry, and when it is chosen indefinitely large the two coincide. The theorems of this geometry appear to be paradoxical and, to the uninitiated, absurd; but calm, steady reflection reveals that they contain

¹The oldest surviving letters were the Gauss letter to Christian Gerling in 1816 and the yet more convincing letter dated 1818 of Schweikart sent to Gauss via Gerling.

nothing at all impossible. For example, the three angles of a triangle become as small as one wishes, if only the sides are taken sufficiently large; yet the area of the triangle can never exceed a definite limit, regardless how great the sides are taken, nor indeed can it ever reach it.

In modern terminology, the constant that Gauss mentions can be expressed as $1/\sqrt{-k}$, where $k \leq 0$, is the so-called curvature of the neutral plane, which we are about to introduce.

The identity in Exercise 11.11 suggests that the defect of a triangle should be proportional to its area.²

In fact, for any neutral plane, there is a nonpositive real number k such that

$$k \cdot \text{area}(\triangle ABC) + \text{defect}(\triangle ABC) = 0$$

for any $\triangle ABC$. This number k is called the curvature of the plane.

For example, by Theorem 7.12, the Euclidean plane has zero curvature. By Theorem 11.9, the curvature of any neutral plane is nonpositive.

It turns out that up to isometry, the neutral plane is characterized by its curvature; that is, two neutral planes are isometric if and only if they have the same curvature.

In the next chapter, we will construct a hyperbolic plane; this is, an example of a neutral plane with curvature $k = -1$.

Any neutral plane, distinct from Euclidean, can be obtained by rescaling the metric on the hyperbolic plane. Indeed, if we rescale the metric by a positive factor c , the area changes by factor c^2 , while the defect stays the same. Therefore, taking $c = \sqrt{-k}$, we can get the neutral plane of the given curvature $k < 0$. In other words, all the non-Euclidean neutral planes become identical if we use $r = 1/\sqrt{-k}$ as the unit of length.

In Chapter 16, we discuss spherical geometry. Altho spheres are not neutral planes, the spherical geometry is a close relative of Euclidean and hyperbolic geometries.

Nondegenerate spherical triangles have negative defects. Moreover, if r is the radius of the sphere, then


$$\frac{1}{r^2} \cdot \text{area}(\triangle ABC) + \text{defect}(\triangle ABC) = 0$$

for any spherical triangle ABC . In other words, the sphere of radius r has the curvature $k = \frac{1}{r^2}$.

²The area in the neutral plane is discussed briefly at the end of Chapter 20, but the reader could also refer to an intuitive understanding of area measurement.

Chapter 12

Hyperbolic plane



In this chapter, we use inversive geometry to construct a model of a hyperbolic plane — a neutral plane that is not Euclidean.

Namely, we construct the so-called conformal disc model of the hyperbolic plane. This model was discovered by Eugenio Beltrami [4], and it is commonly referred to as the Poincaré disc model.

The figure above shows the conformal disc model of the hyperbolic plane which is divided into congruent triangles with angles $\frac{\pi}{3}$, $\frac{\pi}{3}$, and $\frac{\pi}{4}$.

A Conformal disc model

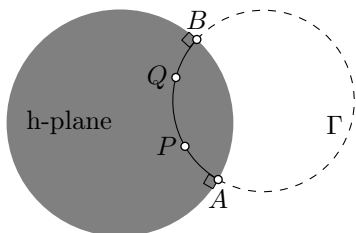
In this section, we give new names for certain objects in the Euclidean plane which will represent lines, angle measures, and distances in the hyperbolic plane.

Hyperbolic plane. Let us fix a circle on the Euclidean plane and call it absolute. The set of points inside the absolute will be referred to as the hyperbolic plane (or h-plane).

Note that the points on the absolute do *not* belong to the h-plane. The points in the h-plane will be also called h-points.

We will often assume that the absolute is a unit circle.

Hyperbolic lines. The intersections of the h-plane with circlines that are perpendicular to the absolute are called hyperbolic lines or h-lines.



By Corollary 10.18, there exists a unique h-line that passes thru any two distinct h-points P and Q . This h-line will be denoted by $(PQ)_h$.

The arcs of hyperbolic lines will be called hyperbolic segments or h-segments. An h-segment with endpoints P and Q will be denoted as $[PQ]_h$.

The portion of an h-line on one side from a point will be called a hyperbolic half-line (or h-half-line). More precisely, an h-half-line is the intersection of the h-plane with an arc that is perpendicular to the absolute and has exactly one of its endpoints in the h-plane. An h-half-line starting at P and passing thru Q will be denoted as $[PQ)_h$.

If Γ is the circline containing the h-line $(PQ)_h$, then the points (A and B on the diagram) where Γ intersects the absolute are called ideal points of $(PQ)_h$. (Note that the ideal points of an h-line do not belong to the h-line.)

An ordered triple of h-points, say (P, Q, R) , will be called an h-triangle PQR and denoted by $\Delta_h PQR$.

It is important to clarify that at this point, that *so far an h-line $(PQ)_h$ is just a subset of the h-plane*, but soon we will introduce h-distance and show that $(PQ)_h$ is a line for the h-distance in the sense of the Definition 1.9.

12.1. Exercise. Show that an h-line is uniquely determined by its ideal points.

12.2. Exercise. Show that an h-line is uniquely determined by one of its ideal points and one h-point on it.

12.3. Exercise. Show that an h -segment $[PQ]_h$ coincides with the Euclidean segment $[PQ]$ if and only if the line (PQ) passes thru the center of the absolute.

Hyperbolic distance. Consider two distinct h -points P and Q , and let A and B denote the ideal points of $(PQ)_h$. Without loss of generality, we may assume that on the Euclidean circline containing the h -line $(PQ)_h$, the points A, P, Q, B appear in the same order.

Consider the function

$$\delta(P, Q) := \frac{AQ \cdot PB}{AP \cdot QB}.$$

Note that the right-hand side is a cross-ratio; by Theorem 10.6 it is invariant under inversion. We set $\delta(P, P) = 1$ for any h -point P . Let us define h -distance as the logarithm of δ ; that is,

$$PQ_h := \ln[\delta(P, Q)].$$

The proof that PQ_h is a metric on the h -plane will be given later. For now, it is just a function that returns a real value PQ_h for any pair of h -points P and Q .

12.4. Exercise. Let O be the center of the absolute. Assume that h -points O, X , and Y lie on an h -line in the same order, and $OX = XY$. Prove that $OX_h < XY_h$.

Hyperbolic angles. Consider three h -points P, Q , and R such that $P \neq Q$ and $R \neq Q$. The hyperbolic angle PQR (briefly $\angle_h PQR$) consists of the ordered pair of h -half-lines $[QP]_h$ and $[QR]_h$.

Let $[QX)$ and $[QY)$ be (Euclidean) half-lines that are tangent to $[QP]_h$ and $[QR]_h$ at Q . Then the hyperbolic angle measure (or h -angle measure) of $\angle_h PQR$ is denoted by $\angle_h PQR$ and is defined as $\angle XQY$.

12.5. Exercise. Let P be an h -point that does not lie on an h -line ℓ . Show that there is a unique h -line thru P that is perpendicular to ℓ .

B Plan of the proof

We have introduced all the h -notions needed in the formulation of the axioms I–IV and h -V. It remains to show that all these axioms hold; this will be done by the end of this chapter.

Once our proofs are complete, we will have a model that serves as an example of a neutral plane. After that we can use axiomatic approach in

the h-plane; for example, Exercise 12.5 can be proved the same way as Theorem 5.5.

Most importantly we will prove the “if”-part of Theorem 11.16.

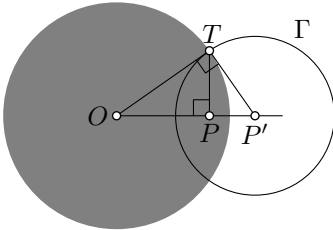
Indeed, any statement in hyperbolic geometry can be restated in the Euclidean plane using the introduced h-notions. Consequently, if the system of axioms I–IV, and h-V leads to a contradiction, then so does the system axioms I–V.

C Auxiliary statements

One may compare the conformal model with a telescope — it makes it possible to see the h-plane from the Euclidean plane. Continuing this analogy further, we may say that the following lemma will be used to *aim* the telescope at any particular point in the h-plane.

12.6. Lemma. *Consider an h-plane with a unit circle Ω as the absolute. Let O be the center of Ω and P be another h-point. Then there is a circle Γ perpendicular to the absolute such that O is the inverse of P across Γ .*

Moreover, Γ has radius $\frac{\sqrt{1-OP^2}}{OP}$, and its center P' is the inverse of P across the absolute.



Proof. Let P' be the inversion of P across the absolute. Note that there is a point T on the absolute such that $\angle OPT$ is right. Let Γ be the circle thru T with center P' .

By 10.2, $\triangle OPT \sim \triangle OTP'$. It follows that $\angle OTP'$ is right and $\Gamma \perp \Omega$.

By AA, $\triangle TPP' \sim \triangle OTP'$ (the angle at P' is shared, and $\angle TPP'$ and $\angle OTP'$ are right). Therefore $\frac{OP'}{P'T} = \frac{P'T}{P'P}$; so, O is the inversion of P across Γ .

Note that $OP' \cdot OP = OT^2$. By the Pythagorean theorem $P'T^2 = P'P^2 + PT^2$ and $PT^2 = OT^2 - PO^2$. Since $P'P = OP' - OP$ and $OT = 1$, we get $P'T = \frac{\sqrt{1-OP^2}}{OP}$, and the second statement follows. \square

Assume Γ is a circline that is perpendicular to the absolute. Consider the inversion $X \mapsto X'$ across Γ ; if Γ is a line, set $X \mapsto X'$ to be the reflection across Γ .

The following observation says that the map $X \mapsto X'$ respects all the notions introduced in the previous section. Together with the lemma above, it implies that in any problem that is formulated entirely *in h-terms* we can assume that a given h-point lies in the center of the absolute.

12.7. Main observation. *The map $X \mapsto X'$ described above is a bijection from the h-plane to itself. Moreover, for any h-points P, Q, R such that $P \neq Q$ and $Q \neq R$, the following conditions hold:*

- (a) The h -line $(PQ)_h$, h -half-line $[PQ)_h$, and h -segment $[PQ]_h$ are transformed into $(P'Q')_h$, $[P'Q')_h$, and $[P'Q']_h$ respectively.
- (b) $\delta(P', Q') = \delta(P, Q)$ and $P'Q'_h = PQ_h$.
- (c) $\angle_h P'Q'R' \equiv -\angle_h PQR$.

It is instructive to compare this observation with Proposition 5.6.

Proof. According to Theorem 10.15, the map sends the absolute to itself. Note that the points on Γ do not move, it follows that points inside of the absolute remain inside after the mapping. Whence the $X \mapsto X'$ is a bijection from the h -plane to itself.

Part (a) follows from 10.7 and 10.25.

Part (b) follows from Theorem 10.6.

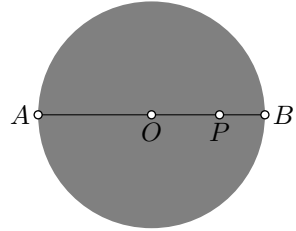
Part (c) follows from Theorem 10.25. □

12.8. Lemma. *Assume that the absolute is a unit circle centered at O . Given an h -point P , set $x = OP$ and $y = OP_h$. Then*

$$y = \ln \frac{1+x}{1-x} \quad \text{and} \quad x = \frac{e^y - 1}{e^y + 1}.$$

Observe that according to the lemma, $OP_h \rightarrow \infty$ as $OP \rightarrow 1$. That is, if P approaches absolute in the Euclidean sense, it escapes to infinity in the h -sense.

Proof. Note that the h -line $(OP)_h$ forms a diameter of the absolute. If A and B are the ideal points as in the definition of the h -distance, then



$$OA = OB = 1,$$

$$PA = 1 + x,$$

$$PB = 1 - x.$$

In particular,

$$y = \ln \frac{AP \cdot BO}{PB \cdot OA} = \ln \frac{1+x}{1-x}.$$

Taking the exponential function of the left and the right-hand side and applying obvious algebra manipulations, we get that

$$x = \frac{e^y - 1}{e^y + 1}.$$

□

12.9. Lemma. *Assume that points P , Q , and R appear on an h -line in the same order. Then*

$$PQ_h + QR_h = PR_h.$$

Proof. Note that

$$PQ_h + QR_h = PR_h$$

is equivalent to

$$\bullet \quad \delta(P, Q) \cdot \delta(Q, R) = \delta(P, R).$$

Let A and B be the ideal points of $(PQ)_h$. Without loss of generality, we can assume that the points A , P , Q , R , and B appear in the same order on the circline containing $(PQ)_h$. Then

$$\begin{aligned} \delta(P, Q) \cdot \delta(Q, R) &= \frac{AQ \cdot BP}{QB \cdot PA} \cdot \frac{AR \cdot BQ}{RB \cdot QA} = \\ &= \frac{AR \cdot BP}{RB \cdot PA} = \\ &= \delta(P, R). \end{aligned}$$

Hence \bullet follows. □

Let P be an h -point and $\rho > 0$. The set of all h -points Q such that $PQ_h = \rho$ is called an h -circle with the center P and the h -radius ρ .

12.10. Lemma. *Any h -circle is a Euclidean circle that lies completely in the h -plane.*

More precisely for any h -point P and $\rho \geq 0$ there is a $\hat{\rho} \geq 0$ and a point \hat{P} such that

$$PQ_h = \rho \quad \iff \quad \hat{P}Q = \hat{\rho}$$

for any h -point Q .

Moreover, if O is the center of the absolute, then

1. $\hat{O} = O$ for any ρ and
2. $\hat{P} \in (OP)$ for any $P \neq O$.

Proof. According to Lemma 12.8, $OQ_h = \rho$ if and only if

$$OQ = \hat{\rho} = \frac{e^\rho - 1}{e^\rho + 1}.$$

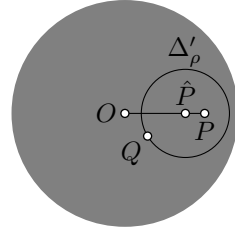
Therefore, the locus of h -points Q such that $OQ_h = \rho$ is a Euclidean circle, denote it by Δ_ρ .

If $P \neq O$, then by Lemma 12.6 and the main observation (12.7) there is an inversion that respects all h-notions and sends $O \mapsto P$.

Let Δ'_ρ be the inverse of Δ_ρ . Since the inversion preserves the h-distance, $PQ_h = \rho$ if and only if $Q \in \Delta'_\rho$.

According to Theorem 10.7, Δ'_ρ is a Euclidean circle. Let \hat{P} and $\hat{\rho}$ denote the Euclidean center and radius of Δ'_ρ .

Finally, note that Δ'_ρ reflects to itself across (OP) ; that is, the center \hat{P} lies on (OP) . □



12.11. Exercise. Describe a nondegenerate h-triangle $\Delta_h PQR$ that does not have an h-circumcircle; that is, its vertices P , Q , and R do not lie on an h-circle or h-line.

D Axioms

Axiom I

Evidently, the h-plane contains at least two points. Therefore, to show that Axiom I holds in the h-plane, we need to show that the h-distance defined in Section 12A is a metric; that is, the conditions (a)–(d) in Definition 1.1 hold for the h-distance.

The following claim says that the h-distance satisfies conditions (a) and (b).

12.12. Claim. For any pair of h-points P and Q , we have $PQ_h \geq 0$ and $PQ_h = 0$ if and only if $P = Q$.

Proof. According to Lemma 12.6 and the main observation (12.7), we can assume that Q is the center of the absolute. In this case

$$\delta(Q, P) = \frac{1 + QP}{1 - QP} \geq 1$$

and therefore

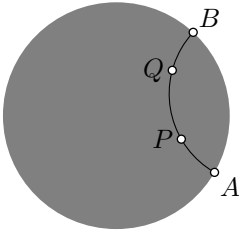
$$QP_h = \ln[\delta(Q, P)] \geq 0.$$

Moreover, the equalities hold if and only if $P = Q$. □

The following claim says that the h-distance meets 1.1c.

12.13. Claim. For any h-points P and Q , we have $PQ_h = QP_h$.

Proof. Let A and B be ideal points of $(PQ)_h$ and A, P, Q, B appear on the circline containing $(PQ)_h$ in the same order.



Then

$$\begin{aligned} PQ_h &= \ln \frac{AQ \cdot BP}{QB \cdot PA} = \\ &= \ln \frac{BP \cdot AQ}{PA \cdot QB} = \\ &= QP_h. \end{aligned} \quad \square$$

The following claim shows, in particular, that the triangle inequality (which is condition 1.1d) holds for h -distance.

12.14. Claim. *Given a triple of h -points P , Q , and R , we have*

$$PQ_h + QR_h \geq PR_h.$$

Moreover, the equality holds if and only if P , Q , and R lie on one h -line in the same order.

Proof. Without loss of generality, we may assume that P is the center of the absolute and $0 < QR_h \leq PQ_h$.

Let Δ be the h -circle with the center Q and h -radius QR_h . Choose points S and T on the intersection of (PQ) with Δ so that P, S, Q , and T appear on the h -line in the same order. The latter is possible by Lemma 12.9, since $QS_h = QT_h = QR_h \leq PQ_h$.

According to Lemma 12.10, Δ is a Euclidean circle; let \hat{Q} be its Euclidean center.

Note that $\hat{Q}S = \hat{Q}T = \hat{Q}R$. By the Euclidean triangle inequality,

$$\textcircled{2} \quad PT = P\hat{Q} + \hat{Q}R \geq PR,$$

and the equality holds if and only if $T = R$.

By Lemma 12.8,

$$\begin{aligned} PT_h &= \ln \frac{1 + PT}{1 - PT}, \\ PR_h &= \ln \frac{1 + PR}{1 - PR}. \end{aligned}$$

Note that the function $x \mapsto \ln \frac{1+x}{1-x}$ is increasing for $0 \leq x < 1$. Therefore, $\textcircled{2}$ implies

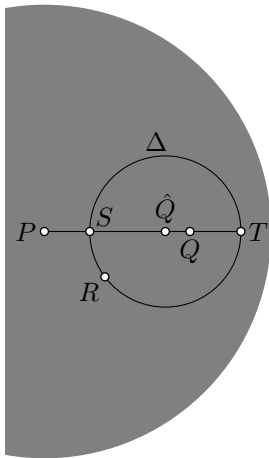
$$PT_h \geq PR_h;$$

moreover, the equality holds if and only if $T = R$.

Finally, applying Lemma 12.9 again, we get that

$$PT_h = PQ_h + QR_h.$$

Hence the claim follows. □



Axiom II

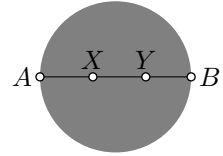
Note that once the following claim is proved, Axiom II follows from Corollary 10.18.

12.15. Claim. *A subset of the h-plane is an h-line if and only if it forms a line for the h-distance in the sense of Definition 1.9.*

Proof. Let ℓ be an h-line. Applying the main observation (12.7) we can assume that ℓ contains the center of the absolute. In this case, ℓ is an intersection of a diameter of the absolute and the h-plane. Let A and B be the endpoints of the diameter.

Consider the map $\iota: \ell \rightarrow \mathbb{R}$ defined as

$$\iota(X) = \ln \frac{AX}{XB}.$$



Note that $\iota: \ell \rightarrow \mathbb{R}$ is a bijection.

Furthermore, if $X, Y \in \ell$ and the points $A, X, Y,$ and B appear on $[AB]$ in the same order, then

$$\iota(Y) - \iota(X) = \ln \frac{AY}{YB} - \ln \frac{AX}{XB} = \ln \frac{AY \cdot BX}{YB \cdot XB} = XY_h.$$

We have shown that any h-line is a line for h-distance. The converse follows from Claim 12.14. \square

Axiom III

Note that the first part of Axiom III follows directly from the definition of the h-angle measure (defined in Section 12A). It remains to show that \angle_h satisfies the conditions IIIa, IIIb, and IIIc (see Section 2A).

The following two claims say that \angle_h satisfies IIIa and IIIb.

12.16. Claim. *Given an h-half-line $[OP)_h$ and $\alpha \in (-\pi, \pi]$, there is a unique h-half-line $[OQ)_h$ such that $\angle_h POQ = \alpha$.*

12.17. Claim. *For any h-points $P, Q,$ and R distinct from an h-point $O,$ we have*

$$\angle_h POQ + \angle_h QOR \equiv \angle_h POR.$$

Proof of 12.16 and 12.17. Applying the main observation, we may assume that O is the center of the absolute. In this case, for any h-point $P \neq O,$ the h-half-line $[OP)_h$ is the intersection of the Euclidean half-line $[OP)$ with the h-plane. Hence 12.16 and 12.17 follow from the axioms IIIa and IIIb of the Euclidean plane. \square

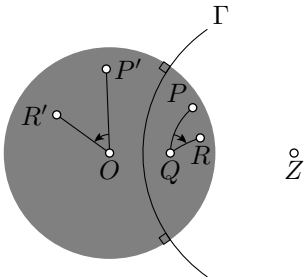
The following claim says that \angle_h satisfies IIIc.

12.18. Claim. *The function*

$$\angle_h : (P, Q, R) \mapsto \angle_h PQR$$

is continuous at any triple of points (P, Q, R) such that $Q \neq P$, $Q \neq R$, and $\angle_h PQR \neq \pi$.

Proof. Suppose that O denotes the center of the absolute. We can assume that Q is distinct from O ; the latter follows from the main observation.



Let Z be the inverse of Q across the absolute; denote by Γ the circle with the center at Z that is perpendicular to the absolute. According to Lemma 12.6, point O is the inverse of Q across Γ .

Let P' and R' be the inversions across Γ of the points P and R respectively. Note that the point P' is completely determined by Q and P . Moreover, the map $(Q, P) \mapsto P'$ is continuous at any pair

of h-points (Q, P) such that $Q \neq O$. The same is true for the map $(Q, R) \mapsto R'$.

According to the main observation

$$\angle_h PQR \equiv -\angle_h P'OR'.$$

Since $\angle_h P'OR' = \angle P'OR'$ and the maps $(Q, P) \mapsto P'$, $(Q, R) \mapsto R'$ are continuous, the claim follows from the corresponding axiom of the Euclidean plane. □

Axiom IV

The following claim says that Axiom IV holds in the h-plane.

12.19. Claim. *In the h-plane, we have $\triangle_h PQR \cong \triangle_h P'Q'R'$ if and only if*

$$Q'P'_h = QP_h, \quad Q'R'_h = QR_h \quad \text{and} \quad \angle_h P'Q'R' = \pm \angle PQR.$$

Proof. Applying the main observation, we can assume that Q and Q' coincide with the center of the absolute; in particular, $Q = Q'$. In this case,

$$\angle P'QR' = \angle_h P'QR' = \pm \angle_h PQR = \pm \angle PQR.$$

Since

$$QP_h = QP'_h \quad \text{and} \quad QR_h = QR'_h,$$

Lemma 12.8 implies that the same holds for the Euclidean distances; that is,

$$QP = QP' \quad \text{and} \quad QR = QR'.$$

By SAS, there is a motion of the Euclidean plane that sends Q to itself, P to P' , and R to R' .

Note that the center of the absolute is fixed by the corresponding motion. It follows that this motion gives also a motion of the h-plane; in particular, the h-triangles $\triangle_h PQR$ and $\triangle_h P'QR'$ are h-congruent. \square

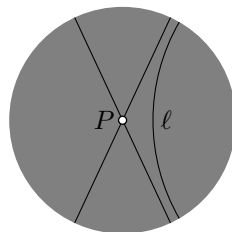
Axiom h-V

Finally, we need to check that Axiom h-V in Section 11D holds; that is, we need to prove the following claim.

12.20. Claim. *For any h-line ℓ and any h-point $P \notin \ell$ there are at least two h-lines that pass thru P and have no points of intersection with ℓ .*

Instead of proof. Applying the main observation we can assume that P is the center of the absolute.

The remaining part of the proof can be guessed from the picture. \square



12.21. Exercise.

- Show that in the h-plane there are three mutually parallel h-lines such that any pair of these three lines lies on one side of the remaining h-line.
- Draw three h-lines ℓ , m , and n such that $\ell \parallel m$, $m \parallel n$, but $\ell \not\parallel n$. Conclude that the parallelness is not an equivalence relation for h-lines.

E Hyperbolic trigonometry

This section provides formulas for h-distance using hyperbolic functions. One of these formulas will be used in the proof of the hyperbolic Pythagorean theorem (13.16).

Recall that ch , sh , and th denote hyperbolic cosine, hyperbolic sine, and hyperbolic tangent; that is, the functions defined by

$$\text{ch } x := \frac{e^x + e^{-x}}{2}, \quad \text{sh } x := \frac{e^x - e^{-x}}{2},$$

$$\operatorname{th} x := \frac{\operatorname{sh} x}{\operatorname{ch} x}.$$

These hyperbolic functions are analogous to sine, cosine, and tangent.

12.22. Exercise. Prove the following identities:

$$\operatorname{ch}' x = \operatorname{sh} x; \quad \operatorname{sh}' x = \operatorname{ch} x; \quad (\operatorname{ch} x)^2 - (\operatorname{sh} x)^2 = 1.$$

12.23. Exercise. Assume that the absolute is a unit circle centered at O . Show that

$$OP = \operatorname{th}\left(\frac{1}{2} \cdot OP_h\right).$$

for any h -point P .

12.24. Double-argument identities. The identities

$$\operatorname{ch}(2 \cdot x) = (\operatorname{ch} x)^2 + (\operatorname{sh} x)^2 \quad \text{and} \quad \operatorname{sh}(2 \cdot x) = 2 \cdot \operatorname{sh} x \cdot \operatorname{ch} x$$

hold for any real value x .

Proof.

$$\begin{aligned} (\operatorname{sh} x)^2 + (\operatorname{ch} x)^2 &= \left(\frac{e^x - e^{-x}}{2}\right)^2 + \left(\frac{e^x + e^{-x}}{2}\right)^2 = \\ &= \frac{e^{2 \cdot x} + e^{-2 \cdot x}}{2} = \\ &= \operatorname{ch}(2 \cdot x); \\ 2 \cdot \operatorname{sh} x \cdot \operatorname{ch} x &= 2 \cdot \left(\frac{e^x - e^{-x}}{2}\right) \cdot \left(\frac{e^x + e^{-x}}{2}\right) = \\ &= \frac{e^{2 \cdot x} - e^{-2 \cdot x}}{2} = \\ &= \operatorname{sh}(2 \cdot x). \end{aligned}$$

□

12.25. Advanced exercise. Let P and Q be two h -points distinct from the center of the absolute. Denote by P' and Q' the inverses of P and Q across the absolute.

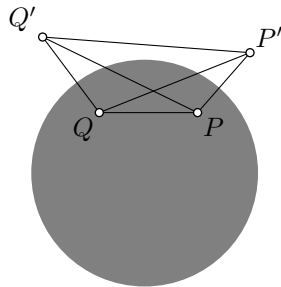
Show that

$$(a) \operatorname{ch}\left[\frac{1}{2} \cdot PQ_h\right] = \sqrt{\frac{PQ' \cdot P'Q}{PP' \cdot QQ'}};$$

$$(b) \operatorname{sh}\left[\frac{1}{2} \cdot PQ_h\right] = \sqrt{\frac{PQ \cdot P'Q'}{PP' \cdot QQ'}};$$

$$(c) \operatorname{th}\left[\frac{1}{2} \cdot PQ_h\right] = \sqrt{\frac{PQ \cdot P'Q'}{PQ' \cdot P'Q}};$$

$$(d) \operatorname{ch} PQ_h = \frac{PQ \cdot P'Q' + PQ' \cdot P'Q}{PP' \cdot QQ'}.$$



Chapter 13

Geometry of the h-plane

In this chapter, we study the geometry of the plane described by the conformal disc model, briefly the h-plane.

We can work with this model inside the Euclidean plane. Additionally, we have the option to apply the axioms of neutral geometry since they all hold in the h-plane; the latter is proved in the previous chapter.

A Angle of parallelism

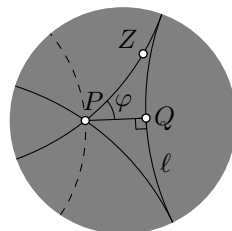
Let P be a point off an h-line ℓ . Drop a perpendicular $(PQ)_h$ from P to ℓ ; let Q be its footpoint. Let φ be the smallest value such that the h-line $(PZ)_h$ with $|\angle_h QPZ| = \varphi$ does not intersect ℓ .

The value φ is called the angle of parallelism at P to ℓ . Clearly, φ depends only on the h-distance $s = PQ_h$. Furthermore, $\varphi(s) \rightarrow \pi/2$ as $s \rightarrow 0$, and $\varphi(s) \rightarrow 0$ as $s \rightarrow \infty$. (In Euclidean geometry, the angle of parallelism is identically equal to $\pi/2$.)

13.1. Exercise. Suppose that $\square_h ABCD$ has right h-angles at A , B , and C . Show that $|\angle_h CDA| > \varphi$, where φ is the angle of parallelism at D with respect to $(AB)_h$.

If ℓ , P , and Z are as above, then the h-line $m = (PZ)_h$ is called asymptotically parallel to ℓ . In other words, two h-lines are asymptotically parallel if they share one ideal point. (In hyperbolic geometry, the term parallel lines is often used for asymptotically parallel lines; we do not follow this convention.)

Given $P \notin \ell$, there are exactly two asymptotically parallel lines thru P to ℓ ; the remaining



parallel lines are called ultra parallel.

On the diagram, the two solid h-lines passing thru P are asymptotically parallel to ℓ ; the dashed h-line is ultra parallel to ℓ .

13.2. Exercise. Show that two distinct h-lines ℓ and m are ultraparallel if and only if they have a common perpendicular; that is, there is an h-line n such that $n \perp \ell$ and $n \perp m$.

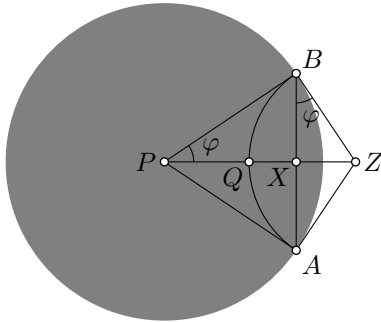
13.3. Proposition. Let Q be a footpoint of P on an h-line ℓ . Then

$$h = \frac{1}{2} \cdot \ln \frac{1 + \cos \varphi}{1 - \cos \varphi} \quad \text{and} \quad \cos \varphi = \frac{e^{2 \cdot h} - 1}{e^{2 \cdot h} + 1},$$

where $h = PQ_h$, and φ is the angle of parallelism at P with respect to ℓ .

In particular, if $P \notin \ell$ and $\beta = |\angle_h XPY|$ for some points $X, Y \in \ell$, then

$$h < \frac{1}{2} \cdot \ln \frac{1 + \cos \frac{\beta}{2}}{1 - \cos \frac{\beta}{2}} \quad \text{and} \quad \cos \frac{\beta}{2} > \frac{e^{2 \cdot h} - 1}{e^{2 \cdot h} + 1}.$$



Proof. Applying a motion of the h-plane if necessary, we may assume P is the center of the absolute. Then the h-lines thru P are the intersections of Euclidean lines with the h-plane.

Let A and B denote the ideal points of ℓ . Without loss of generality, we may assume that $\angle APB$ is positive. In this case,

$$\varphi = \angle QPB = \angle APQ = \frac{1}{2} \cdot \angle APB.$$

Let Z be the center of the circle Γ containing the h-line ℓ . Set X to be the point of intersection of the Euclidean segment $[AB]$ and the line (PQ) .

Note that, $PX = \cos \varphi$. Therefore, by Lemma 12.8,

$$PX_h = \ln \frac{1 + \cos \varphi}{1 - \cos \varphi}.$$

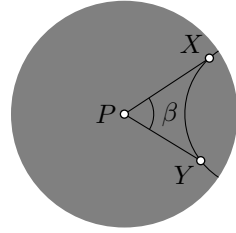
Note that both angles PBZ and BXZ are right. Since the angle PZB is shared, $\triangle ZBX \sim \triangle ZPB$. In particular,

$$ZX \cdot ZP = ZB^2;$$

that is, X is the inverse of P across Γ .

The inversion across Γ is the reflection of the h-plane across ℓ . Therefore

$$\begin{aligned} h &= PQ_h = QX_h = \\ &= \frac{1}{2} \cdot PX_h = \\ &= \frac{1}{2} \cdot \ln \frac{1+\cos \varphi}{1-\cos \varphi}. \end{aligned}$$



Taking exponent of the left and right hand side and simplifying, we get the second identity.

The last statement follows since $\varphi > \frac{\beta}{2}$ and the function

$$\varphi \mapsto \frac{1}{2} \cdot \ln \frac{1+\cos \varphi}{1-\cos \varphi}$$

is decreasing in the interval $(0, \frac{\pi}{2}]$. □

13.4. Exercise. Assume $\Delta_h ABC$ has a right h-angle at C . Show that the h-distance from C to $[AB]_h$ cannot exceed 1.

13.5. Exercise. Let ABC be an equilateral h-triangle with side 100. Show that

$$|\angle_h ABC| < \frac{1}{10\,000\,000\,000}.$$

Sketch $\Delta_h ABC$ in the conformal model.

B Inradius of h-triangle

13.6. Theorem. The inradius of any h-triangle is less than $\frac{1}{2} \cdot \ln 3$.

Proof. Let I and r be the h-incenter and h-inradius of $\Delta_h XYZ$.

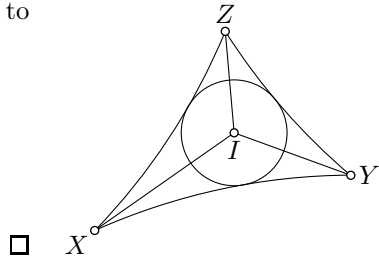
Note that the h-angles XIY , YIZ , and ZIX have the same sign. Without loss of generality, we can assume that all of them are positive. Therefore,

$$\angle_h XIY + \angle_h YIZ + \angle_h ZIX = 2 \cdot \pi,$$

and we can assume that $\angle_h XIY \geq \frac{2}{3} \cdot \pi$; if not relabel X , Y , and Z .

Since r is the h-distance from I to $(XY)_h$, Proposition 13.3 implies that

$$\begin{aligned} r &< \frac{1}{2} \cdot \ln \frac{1+\cos \frac{\pi}{3}}{1-\cos \frac{\pi}{3}} = \\ &= \frac{1}{2} \cdot \ln \frac{1+\frac{1}{2}}{1-\frac{1}{2}} = \\ &= \frac{1}{2} \cdot \ln 3. \end{aligned}$$



13.7. Exercise. Let $\square_h ABCD$ be a quadrangle in the h -plane such that the h -angles at A , B , and C are right and $AB_h = BC_h$. Find the optimal upper bound for AB_h .

C Circles, horocycles, and equidistants

According to Lemma 12.10, any h -circle is a Euclidean circle that lies entirely within the h -plane. Furthermore, any h -line is an intersection of the h -plane with the circle perpendicular to the absolute.

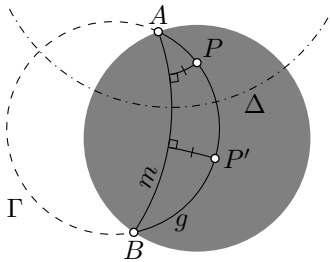
In this section, we will describe the h -geometric meaning of the intersections of other circles with the h -plane.

You will see that all these intersections have a perfectly round shape in the h -plane.

One may think of these curves as the trajectories of a car with a fixed position of the steering wheel. In the Euclidean plane, this way you either travel along a circle or a line.

In the hyperbolic plane, the picture is different. If you turn the steering wheel to the far right, you will travel along a circle. If you turn it less, at a certain position of the wheel, you will never return to the same point, but the path will be different from a line. If you turn the wheel a bit further, then you start to travel along a path that stays at a fixed distance from an h -line.

Equidistants of h -lines. Consider the h -plane with the absolute Ω . Assume a circle Γ intersects Ω at two distinct points, A and B . Suppose that g denotes the intersection of Γ with the h -plane.



Let us draw an h -line m with the ideal points A and B . According to Exercise 12.1, m is uniquely defined.

Consider any h -line ℓ perpendicular to m ; let Δ be the circle containing ℓ .

Note that $\Delta \perp \Gamma$. Indeed, according to Corollary 10.16, m and Ω invert to themselves in Δ . It follows that A is the inverse of B across Δ . Finally, by Corollary 10.17, we get that $\Delta \perp \Gamma$.

Therefore, inversion across Δ sends both m and g to themselves. For any two points $P', P \in g$ there is a choice of ℓ and Δ as above such that P' is the inverse of P across Δ . By the main observation (12.7) the inversion across Δ is a motion of the h -plane. Therefore, all points of g lie at the same distance from m .

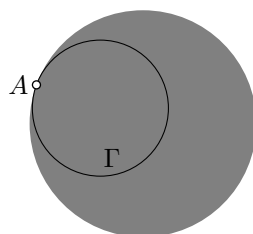
In other words, g is the set of points that lie at a fixed h -distance and on the same side of m .

Such a curve g is called equidistant to h-line m .¹ In Euclidean geometry, the equidistant from a line is a line; apparently, in hyperbolic geometry, the picture is different.

13.8. Exercise. *Let g be the set of all h-reflections of a given h-point P across the points on a given h-line m . Show that g is equidistant to m .*

Horocycles. If the circle Γ touches the absolute from inside at one point A , then the complement $h = \Gamma \setminus \{A\}$ lies in the h-plane. This set is called a horocycle. It also has a perfectly round shape in the sense described above.

The shape of a horocycle is between the shapes of circles and equidistants to h-lines. A horocycle might be considered as a limit of circles thru a fixed point, say P , with the centers O_n running to infinity along an h-line ℓ . The same horocycle is a limit of equidistants thru P to the sequence of h-lines m_n passing thru O_n and perpendicular to ℓ .



Since any three points lie on a circline, we have that any nondegenerate h-triangle is inscribed in an h-circle, horocycle, or equidistant.

13.9. Exercise. *Find the leg of an isosceles right h-triangle inscribed in a horocycle.*

D Hyperbolic triangles

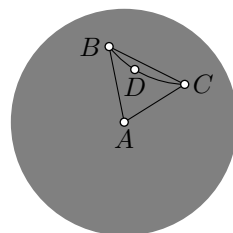
13.10. Theorem. *Any nondegenerate hyperbolic triangle has a positive defect.*

Proof. Choose an h-triangle ABC . According to Theorem 11.9,

$$\text{①} \quad \text{defect}(\triangle_h ABC) \geq 0.$$

It remains to show that in the case of equality, $\triangle_h ABC$ degenerates.

Without loss of generality, we may assume that A is the center of the absolute; in this case, $\angle_h CAB = \angle CAB$. Yet we may assume that



$$\angle_h CAB, \quad \angle_h ABC, \quad \angle_h BCA, \quad \angle ABC, \quad \angle BCA \geq 0.$$

¹It can also be called hypercycle with central line m .

Let D be an arbitrary point in $[CB]_h$ distinct from B and C . From Proposition 9.24, we have

$$\angle ABC - \angle_h ABC \equiv \pi - \angle CDB \equiv \angle BCA - \angle_h BCA.$$

From Exercise 7.13, we get that

$$\text{defect}(\triangle_h ABC) = 2 \cdot (\pi - \angle CDB).$$

Therefore, if we have equality in **1**, then $\angle CDB = \pi$. In particular, the h-segment $[BC]_h$ coincides with the Euclidean segment $[BC]$. By Exercise 12.3, the latter can happen only if the h-line $(BC)_h$ passes thru the center of the absolute (A); that is, if $\triangle_h ABC$ degenerates. \square

The following theorem states, in particular, that nondegenerate hyperbolic triangles are congruent if their corresponding angles are equal. In particular, in hyperbolic geometry, similar triangles have to be congruent.

13.11. AAA congruence condition. *Two nondegenerate h-triangles ABC and $A'B'C'$ are congruent if $\angle_h ABC = \pm \angle_h A'B'C'$, $\angle_h BCA = \pm \angle_h B'C'A'$ and $\angle_h CAB = \pm \angle_h C'A'B'$.*

Proof. Note that if $AB_h = A'B'_h$, then the theorem follows from ASA. Assume $AB_h \neq A'B'_h$. Without loss of generality, we may assume that $AB_h < A'B'_h$.

Let us choose $B'' \in [A'B']_h$ and $C'' \in [A'C']_h$ such that $A'B''_h = AB_h$ and $A'C''_h = AC_h$. By SAS, $\triangle_h A'B''C'' \cong \triangle_h ABC$; it follows that $\angle_h A'B''C'' = \pm \angle_h A'B'C'$. Since angles of a triangle have the same signs (3.7), we have

2
$$\angle_h A'B''C'' = \angle_h A'B'C'.$$

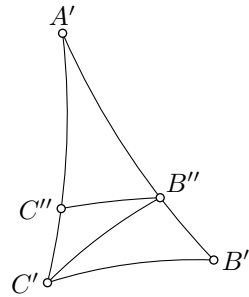
Let us show that points B'' and C'' lie on the sides $[A'B']_h$ and $[A'C']_h$ respectively. Indeed, according to Exercise 11.5, **2** implies that $(B''C'')_h \parallel (B'C')_h$. In particular, B'' and C'' lie on one side from $(B'C')_h$. Since $AB_h < A'B'_h$ and $B'' \in [A'B']_h$, we have B'' and A' lie on one side from $(B'C')_h$. It follows that C'' and A' lie on one side from $(B'C')_h$; therefore, $C'' \in [A'C']_h$.

Since $\triangle_h ABC \cong \triangle_h A'B''C''$, we have

3
$$\text{defect}(\triangle_h ABC) = \text{defect}(\triangle_h A'B''C'').$$

Applying Exercise 11.11 twice, we get that

4
$$\begin{aligned} \text{defect}(\triangle_h A'B'C') &= \text{defect}(\triangle_h A'B''C'') + \\ &+ \text{defect}(\triangle_h B''C''C') + \text{defect}(\triangle_h B''C'B'). \end{aligned}$$



By Theorem 13.10, all the defects have to be positive. Therefore

$$\text{defect}(\Delta_h A' B' C') > \text{defect}(\Delta_h ABC).$$

On the other hand, by assumption we have

$$\begin{aligned} \text{defect}(\Delta_h A' B' C') &= \pi - |\angle_h A' B' C'| - |\angle_h B' C' A'| - |\angle_h C' A' B'| = \\ &= \pi - |\angle_h ABC| - |\angle_h BCA| - |\angle_h CAB| = \\ &= \text{defect}(\Delta_h ABC) \end{aligned}$$

— a contradiction. □

Recall that angle-preserving transformation is a bijection from an h-plane to itself such that

$$\angle_h ABC = \angle_h A' B' C'$$

for any $\Delta_h ABC$ and its image $\Delta_h A' B' C'$.

13.12. Exercise. *Show that any angle-preserving transformation of the h-plane is a motion.*

E Conformal interpretation

Let us give another interpretation of the h-distance.

13.13. Lemma. *Consider the h-plane with the unit circle centered at O as the absolute. Fix a point P and let Q be another point in the h-plane. Then*

$$\frac{PQ_h}{PQ} \rightarrow \frac{2}{1 - OP^2}.$$

as $Q \rightarrow P$.

The above formula tells us that the h-distance from P to a nearby point Q is almost proportional to the Euclidean distance with the coefficient $\frac{2}{1 - OP^2}$. The value $\lambda(P) = \frac{2}{1 - OP^2}$ is called the conformal factor of the h-metric.

The value $\frac{1}{\lambda(P)} = \frac{1}{2} \cdot (1 - OP^2)$ can be interpreted as the speed limit at the given point P . In this case, the h-distance is the minimal time needed to travel from one point of the h-plane to another point.

Proof. Set $x = PQ$ and $y = PQ_h$.

If $P = O$, then by Lemma 12.8 we have

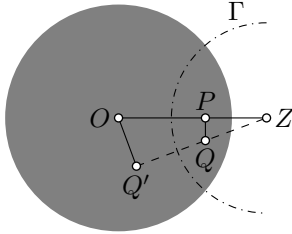
$$\textcircled{5} \quad \frac{y}{x} = \frac{\ln \frac{1+x}{1-x}}{x} \rightarrow 2$$

as $x \rightarrow 0$.²

Suppose $P \neq O$; let Z denotes the inverse of P across the absolute. Let Γ be the circle with the center Z perpendicular to the absolute.

According to the main observation (12.7) and Lemma 12.6, the inversion across Γ is a motion of the h-plane, and it sends P to O . In particular, $OQ'_h = PQ_h$, where Q' denotes the inverse of Q across Γ .

Set $x' = OQ'$. According to Lemma 10.2,



$$\frac{x'}{x} = \frac{OZ}{ZQ}.$$

Since Z is the inverse of P across the absolute, we have that $PO \cdot OZ = 1$. Therefore,

$$\frac{x'}{x} \rightarrow \frac{OZ}{ZP} = \frac{1}{1 - OP^2}$$

as $x \rightarrow 0$.

According to 6, $\frac{y}{x'} \rightarrow 2$ as $x' \rightarrow 0$. Therefore

$$\frac{y}{x} = \frac{y}{x'} \cdot \frac{x'}{x} \rightarrow \frac{2}{1 - OP^2}$$

as $x \rightarrow 0$. □

Here is an application of the lemma above.

13.14. Proposition. *The circumference of an h-circle of the h-radius r is*

$$2 \cdot \pi \cdot \text{sh } r,$$

where $\text{sh } r$ denotes the hyperbolic sine of r ; that is,

$$\text{sh } r := \frac{e^r - e^{-r}}{2}.$$

Before we proceed with the proof, let us discuss the same problem in the Euclidean plane.

The circumference of a circle in the Euclidean plane can be defined as the limit of perimeters of regular n -gons inscribed in the circle as $n \rightarrow \infty$.

Namely, let us fix $r > 0$. Given a positive integer n , consider $\triangle AOB$ such that $\angle AOB = \frac{2 \cdot \pi}{n}$ and $OA = OB = r$. Set $x_n = AB$. Note that x_n is the side of a regular n -gon inscribed in the circle with radius r . Therefore, the perimeter of the n -gon is $n \cdot x_n$.

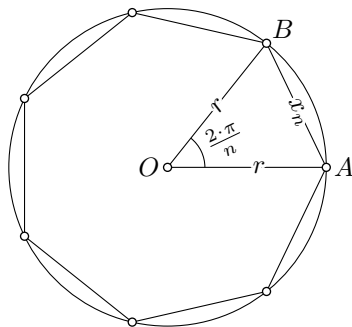
²In other words, the function $x \mapsto \ln \frac{1+x}{1-x}$ has derivative 2 at $x = 0$.

The circumference of the circle with radius r can then be defined as the limit

$$\textcircled{6} \quad \lim_{n \rightarrow \infty} n \cdot x_n = 2 \cdot \pi \cdot r.$$

(This limit can be taken as the definition of π .)

In the following proof, we will replicate the same construction in the h-plane.



Proof. Without loss of generality, we can assume that the center O of the circle is also the center of the absolute.

By Lemma 12.8, the h-circle with the h-radius r is the Euclidean circle with center O and radius

$$a = \frac{e^r - 1}{e^r + 1}.$$

Let x_n and y_n denote the side lengths of the regular n -gons inscribed in the circle in the Euclidean and hyperbolic plane respectively.

Note that $x_n \rightarrow 0$ as $n \rightarrow \infty$. By Lemma 13.13,

$$\lim_{n \rightarrow \infty} \frac{y_n}{x_n} = \frac{2}{1 - a^2}.$$

Applying $\textcircled{6}$, we get that the circumference of the h-circle can be found the following way:

$$\begin{aligned} \lim_{n \rightarrow \infty} n \cdot y_n &= \frac{2}{1 - a^2} \cdot \lim_{n \rightarrow \infty} n \cdot x_n = \\ &= \frac{4 \cdot \pi \cdot a}{1 - a^2} = \\ &= \frac{4 \cdot \pi \cdot \left(\frac{e^r - 1}{e^r + 1}\right)}{1 - \left(\frac{e^r - 1}{e^r + 1}\right)^2} = \\ &= 2 \cdot \pi \cdot \frac{e^r - e^{-r}}{2} = \\ &= 2 \cdot \pi \cdot \text{sh } r. \end{aligned}$$

□

13.15. Exercise. Let $\text{circum}_h(r)$ denote the circumference of the h-circle with the h-radius r . Show that

$$\text{circum}_h(r + 1) > 2 \cdot \text{circum}_h(r)$$

for all $r > 0$.

F Pythagorean theorem

Recall that ch denotes hyperbolic cosine; that is, the function defined by

$$\text{ch } x := \frac{e^x + e^{-x}}{2}.$$

13.16. Hyperbolic Pythagorean theorem. *Assume that h -triangle ACB has right angle at C . Then*

$$\textcircled{7} \quad \text{ch } c = \text{ch } a \cdot \text{ch } b,$$

where $a = BC_h$, $b = CA_h$, and $c = AB_h$.

The formula $\textcircled{7}$ will be proved by means of direct calculations. Before giving the proof, let us discuss the limit cases of this formula.

Note that $\text{ch } x$ can be written using the Taylor expansion

$$\text{ch } x = 1 + \frac{1}{2} \cdot x^2 + \frac{1}{24} \cdot x^4 + \dots$$

It follows that if a , b , and c are small, then

$$\begin{aligned} 1 + \frac{1}{2} \cdot c^2 &\approx \text{ch } c = \text{ch } a \cdot \text{ch } b \approx \\ &\approx (1 + \frac{1}{2} \cdot a^2) \cdot (1 + \frac{1}{2} \cdot b^2) \approx \\ &\approx 1 + \frac{1}{2} \cdot (a^2 + b^2). \end{aligned}$$

In other words, the original Pythagorean theorem (6.4) is a limit case of the hyperbolic Pythagorean theorem for small triangles.

For large a and b the terms e^{-a} , e^{-b} , and $e^{-a-b+\ln 2}$ are neglectable. In this case, we have the following approximations:

$$\begin{aligned} \text{ch } a \cdot \text{ch } b &\approx \frac{e^a}{2} \cdot \frac{e^b}{2} = \\ &= \frac{e^{a+b-\ln 2}}{2} \approx \\ &\approx \text{ch}(a + b - \ln 2). \end{aligned}$$

Therefore $c \approx a + b - \ln 2$.

13.17. Exercise. *Assume $\triangle_h ACB$ has a right angle at C . Set $a = BC_h$, $b = CA_h$, and $c = AB_h$. Show that*

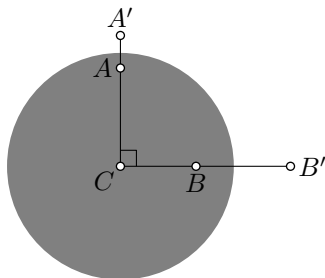
$$c + \ln 2 > a + b.$$

In the proof of the hyperbolic Pythagorean theorem, we use the following formula from Exercise 12.25*d*:

$$\text{ch } AB_h = \frac{AB \cdot A'B' + AB' \cdot A'B}{AA' \cdot BB'},$$

here A, B are h-points distinct from the center of the absolute and A', B' are their inversions across the absolute. This formula is derived in the hints.

Proof of 13.16. We assume that the absolute is a unit circle. By the main observation (12.7) we can assume that C is the center of the absolute. Let A' and B' denote the inverses of A and B across the absolute.



Set $x = BC, y = AC$. By Lemma 12.8

$$a = \ln \frac{1+x}{1-x}, \quad b = \ln \frac{1+y}{1-y}.$$

Therefore

$$\begin{aligned} \text{ch } a &= \frac{1}{2} \cdot \left(\frac{1+x}{1-x} + \frac{1-x}{1+x} \right) = & \text{ch } b &= \frac{1}{2} \cdot \left(\frac{1+y}{1-y} + \frac{1-y}{1+y} \right) = \\ \textcircled{8} \quad &= \frac{1+x^2}{1-x^2}, & &= \frac{1+y^2}{1-y^2}. \end{aligned}$$

Note that

$$B'C = \frac{1}{x}, \quad A'C = \frac{1}{y}.$$

Therefore

$$BB' = \frac{1}{x} - x, \quad AA' = \frac{1}{y} - y.$$

Since the triangles $ABC, A'BC, AB'C, A'B'C$ are right, the original Pythagorean theorem (6.4) implies

$$\begin{aligned} AB &= \sqrt{x^2 + y^2}, & AB' &= \sqrt{\frac{1}{x^2} + y^2}, \\ A'B &= \sqrt{x^2 + \frac{1}{y^2}}, & A'B' &= \sqrt{\frac{1}{x^2} + \frac{1}{y^2}}. \end{aligned}$$

According to Exercise 12.25d,

$$\begin{aligned} \text{ch } c &= \frac{AB \cdot A'B' + AB' \cdot A'B}{AA' \cdot BB'} = \\ &= \frac{\sqrt{x^2 + y^2} \cdot \sqrt{\frac{1}{x^2} + \frac{1}{y^2}} + \sqrt{\frac{1}{x^2} + y^2} \cdot \sqrt{x^2 + \frac{1}{y^2}}}{\left(\frac{1}{y} - y\right) \cdot \left(\frac{1}{x} - x\right)} = \\ \textcircled{9} \quad &= \frac{x^2 + y^2 + 1 + x^2 \cdot y^2}{(1 - y^2) \cdot (1 - x^2)} = \\ &= \frac{1 + x^2}{1 - x^2} \cdot \frac{1 + y^2}{1 - y^2}. \end{aligned}$$

Finally note that $\textcircled{8}$ and $\textcircled{9}$ imply $\textcircled{7}$. □

Chapter 14

Affine geometry

A Affine transformations

Affine geometry studies the so-called incidence structure of the Euclidean plane. The incidence structure sees only which points lie on which lines and nothing else; it does not directly see distances, angle measures, and many other things.

A bijection from the Euclidean plane to itself is called an affine transformation if it maps lines to lines; that is, the image of any line is a line. So, one can say that affine geometry studies the properties of the Euclidean plane that are preserved under affine transformations.

14.1. Exercise. *Show that an affine transformation of the Euclidean plane sends any pair of parallel lines to a pair of parallel lines.*

The observation below follows since the lines are defined using the metric only.

14.2. Observation. *Any motion of the Euclidean plane is an affine transformation.*

The following exercise provides more general examples of affine transformations.

14.3. Exercise. *Show that the following maps of a coordinate plane to itself define affine transformations:*

- (a) *Shear map defined by $(x, y) \mapsto (x + k \cdot y, y)$ for a constant k .*
- (b) *Rescaling defined by $(x, y) \mapsto (a \cdot x, a \cdot y)$ for a constant $a \neq 0$.*
- (c) *x -scaling and y -scaling defined respectively by*

$$(x, y) \mapsto (a \cdot x, y), \quad \text{and} \quad (x, y) \mapsto (x, a \cdot y)$$

for a constant $a \neq 0$.

(d) A transformation defined by

$$(x, y) \mapsto (a \cdot x + b \cdot y + r, c \cdot x + d \cdot y + s)$$

for constants a, b, c, d, r, s such that the matrix $\begin{pmatrix} a & b \\ c & d \end{pmatrix}$ is invertible.

From the fundamental theorem of affine geometry (14.12), it will follow that any affine transformation can be written in the form (d).

Recall that points are collinear if they lie on a single line.

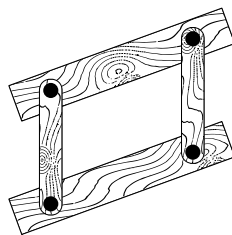
14.4. Exercise. Suppose $P \mapsto P'$ is a bijection of the Euclidean plane that maps collinear triples of points to collinear triples. Show that $P \mapsto P'$ maps noncollinear triples to noncollinear ones.

Conclude that $P \mapsto P'$ is an affine transformation.

14.5. Exercise. Let α be a bijection of the Euclidean plane that maps any circle to a circle. Show that α is an affine transformation.

B Constructions

Let us consider geometric constructions with a ruler and a parallel tool; the latter allows us to draw a line thru a given point parallel to a given line. (One may think of the tool on the figure. It consists of two straight edges joined by two arms that can move while remaining parallel to each other.)



By Exercisers 14.1, any construction with these two tools is invariant with respect to affine transformations. For example, to solve the following exercise, it is sufficient to prove that the midpoint of a given segment can be constructed with a ruler and a parallel tool.

14.6. Exercise. Let M be the midpoint of a segment $[AB]$ in the Euclidean plane. Assume that an affine transformation sends the points A , B , and M to A' , B' , and M' respectively. Show that M' is the midpoint of $[A'B']$.

The following exercise will be used in the proof of Proposition 14.11.

14.7. Exercise. Assume that points with coordinates $(0, 0)$, $(1, 0)$, $(a, 0)$, and $(b, 0)$ are given. Using a ruler and a parallel tool, construct points with coordinates $(a + b, 0)$, $(a - b, 0)$, $(a \cdot b, 0)$, and $(\frac{a}{b}, 0)$.

14.8. Exercise. Construct the center of a given circle using the ruler and the parallel tool.

Note that the shear map (described in 14.3a) can change angles between lines almost arbitrarily. This observation can be used to prove the impossibility of some constructions; here is one example:

14.9. Exercise. *Show that one cannot construct a line perpendicular to a given line with the ruler and the parallel tool.*

C Fundamental theorem of affine geometry

In this section, we assume knowledge of vector algebra; namely, multiplication by a real number, addition, and the parallelogram rule.

14.10. Exercise. *Show that affine transformations map parallelograms to parallelograms. Conclude that if $P \mapsto P'$ is an affine transformation, then*

$$\overrightarrow{XY} = \overrightarrow{AB}, \quad \text{if and only if} \quad \overrightarrow{X'Y'} = \overrightarrow{A'B'}.$$

14.11. Proposition. *Let $P \mapsto P'$ be an affine transformation of the Euclidean plane. Then, for any triple of points O, X, P , we have*

$$\textcircled{1} \quad \overrightarrow{OP} = t \cdot \overrightarrow{OX} \quad \text{if and only if} \quad \overrightarrow{O'P'} = t \cdot \overrightarrow{O'X'}.$$

Proof. Observe that the affine transformations described in Exercise 14.3, as well as all motions, satisfy the condition $\textcircled{1}$. Therefore a given affine transformation $P \mapsto P'$ satisfies $\textcircled{1}$ if and only if its composition with motions and rescalings satisfies $\textcircled{1}$.

Applying this observation, we can reduce the problem to its partial case. Namely, we may assume that $O' = O$, $X' = X$, the point O is the origin of a coordinate system, and X has coordinates $(1, 0)$.

In this case, $\overrightarrow{OP} = t \cdot \overrightarrow{OX}$ if and only if $P = (t, 0)$. Since O and X are fixed, the transformation maps the x -axis to itself. That is, $P' = (f(t), 0)$ for a function $t \mapsto f(t)$, or, equivalently, $\overrightarrow{O'P'} = f(t) \cdot \overrightarrow{O'X'}$. It remains to show that

$$\textcircled{2} \quad f(t) = t$$

for any t .

Since $O' = O$ and $X' = X$, we get that $f(0) = 0$ and $f(1) = 1$. Furthermore, according to Exercise 14.7, we have that $f(x \cdot y) = f(x) \cdot f(y)$ and $f(x + y) = f(x) + f(y)$ for any $x, y \in \mathbb{R}$. By the algebraic lemma (proved below, see 14.17), these conditions imply $\textcircled{2}$. \square

14.12. Fundamental theorem of affine geometry. *Suppose that an affine transformation $P \mapsto P'$ maps a nondegenerate triangle OXY to a triangle $O'X'Y'$. Then $\triangle O'X'Y'$ is nondegenerate, and*

$$\overrightarrow{OP} = x \cdot \overrightarrow{OX} + y \cdot \overrightarrow{OY} \quad \text{if and only if} \quad \overrightarrow{O'P'} = x \cdot \overrightarrow{O'X'} + y \cdot \overrightarrow{O'Y'}.$$

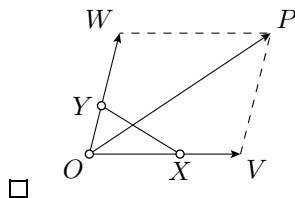
Proof. Since an affine transformation maps lines to lines, the triangle $O'X'Y'$ is nondegenerate.

Consider points V and W defined by

$$\overrightarrow{OV} = x \cdot \overrightarrow{OX}, \quad \overrightarrow{OW} = y \cdot \overrightarrow{OY}.$$

Note that $\overrightarrow{WP} = \overrightarrow{OV}$. Applying Exercise 14.10 and the proposition, we get

$$\begin{aligned} \overrightarrow{O'P'} &= \overrightarrow{O'W'} + \overrightarrow{W'P'} = \\ &= \overrightarrow{O'W'} + \overrightarrow{O'V'} = \\ &= x \cdot \overrightarrow{O'X'} + y \cdot \overrightarrow{O'Y'}. \end{aligned}$$



14.13. Exercise. *Show that any affine transformation is continuous.*

The following exercise provides the converse to Exercise 14.3d.

14.14. Exercise. *Show that any affine transformation can be written in coordinates as $(x, y) \mapsto (a \cdot x + b \cdot y + r, c \cdot x + d \cdot y + s)$ for constants a, b, c, d, r, s such that the matrix $\begin{pmatrix} a & b \\ c & d \end{pmatrix}$ is invertible.*

14.15. Exercise. *Let Γ be a circle with center O . Suppose $\alpha: P \mapsto P'$ is an affine transformation that maps Γ to itself. Show that α is a motion that fixes O ; that is, $O' = O$.*

A bijection from the inversive plane to itself is called an inversive transformation if it maps circlines to circlines. By 10.7, inversions are inversive transformations.

14.16. Advanced exercise. *Show that any inversive transformation is a composition of inversions and reflections.*

D Algebraic lemma

The following lemma was used in the proof of Proposition 14.11.

14.17. Lemma. *Assume $f: \mathbb{R} \rightarrow \mathbb{R}$ is a function such that for any $x, y \in \mathbb{R}$ we have*

- (a) $f(1) = 1$,
 (b) $f(x + y) = f(x) + f(y)$,
 (c) $f(x \cdot y) = f(x) \cdot f(y)$.

Then f is the identity function; that is, $f(x) = x$ for any $x \in \mathbb{R}$.

Note that we do not assume that f is continuous.

A function f satisfying these three conditions is called a field automorphism. Therefore, the lemma states that the identity function is the only automorphism of the field of real numbers. For the field of complex numbers, the conjugation $z \mapsto \bar{z}$ (see Section 18C) gives an example of a nontrivial automorphism.

14.18. Exercise. Suppose that $f: \mathbb{R} \rightarrow \mathbb{R}$ satisfies the condition (c) in the lemma. Show that

- (a) if $f(1) \neq 1$, then $f(x) = 0$ for any x ;
 (b) if $f(0) \neq 0$, then $f(x) = 1$ for any x .

Proof. By (b) we have $f(0) + f(0) = f(0 + 0) = f(0)$. Therefore,

$$\textcircled{3} \quad f(0) = 0.$$

Applying (b) again, we get that $0 = f(0) = f(x) + f(-x)$. Therefore,

$$\textcircled{4} \quad f(-x) = -f(x) \quad \text{for any } x \in \mathbb{R}.$$

Applying (a) and (b) recursively, we get that

$$\begin{aligned} f(2) &= f(1) + f(1) = 1 + 1 = 2; \\ f(3) &= f(2) + f(1) = 2 + 1 = 3; \\ &\dots \end{aligned}$$

Together with $\textcircled{4}$, the latter implies that $f(n) = n$ for any integer n . By (c), $f(m) = f(\frac{m}{n}) \cdot f(n)$. Therefore

$$\textcircled{5} \quad f\left(\frac{m}{n}\right) = \frac{m}{n}$$

for any rational number $\frac{m}{n}$.

Assume $a \geq 0$. Then the equation $x^2 = a$ has a real solution $x = \sqrt{a}$. Suppose $y = f(x)$. By (c), $f(a) = y^2$, and hence $f(a) \geq 0$.

That is,

$$\textcircled{6} \quad a \geq 0 \implies f(a) \geq 0. \quad \Bigg| \quad \text{By } \textcircled{4}, \text{ we also get} \quad \Bigg| \quad \textcircled{7} \quad a \leq 0 \implies f(a) \leq 0.$$

Now assume $f(a) \neq a$ for some $a \in \mathbb{R}$. Then there is a rational number $\frac{m}{n}$ that lies between a and $f(a)$; that is, the numbers

$$x = a - \frac{m}{n} \quad \text{and} \quad y = f(a) - \frac{m}{n}$$

have opposite signs.

By ⑥,

$$\begin{aligned} y + \frac{m}{n} &= f(a) = \\ &= f\left(x + \frac{m}{n}\right) = \\ &= f(x) + f\left(\frac{m}{n}\right) = \\ &= f(x) + \frac{m}{n}; \end{aligned}$$

that is, $f(x) = y$. By ⑥ and ⑦ the values x and y cannot have opposite signs — a contradiction. \square

E Three theorems

We discussed several statements in Euclidean geometry that have an affine nature; that is, their assumptions and conclusions survive under affine transformations. The examples include 7.8, 7.17a, 7.18, 8.5, and 8.6. In this section, we present two more examples of that type.

Suppose that A , B , and X are distinct points on one line. Note that

$$\overrightarrow{AX} = t \cdot \overrightarrow{BX},$$

where $t = \pm \frac{AX}{BX}$.

Choose an affine transformation $P \mapsto P'$. By 14.11, we have

$$\overrightarrow{A'X'} = t \cdot \overrightarrow{B'X'}.$$

It follows that $\frac{A'X'}{B'X'} = \frac{AX}{BX}$; that is, if A , B , and X are distinct points on one line, then the ratio $\frac{AX}{BX}$ is preserved under affine transformations.

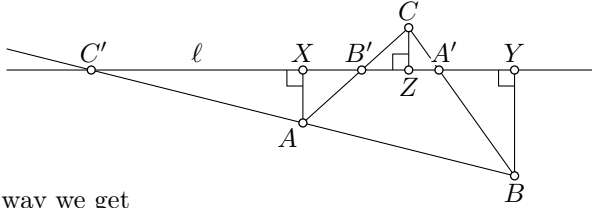
14.19. Menelaus's theorem. *Let ABC be a nondegenerate triangle. Suppose a line ℓ crosses the lines (BC) , (CA) , and (AB) at three distinct points A' , B' , and C' . Then*

$$\frac{AC'}{BC'} \cdot \frac{BA'}{CA'} \cdot \frac{CB'}{AB'} = 1.$$

As we saw, the ratios $\frac{AC'}{BC'}$, $\frac{BA'}{CA'}$, $\frac{CB'}{AB'}$ are preserved under affine transformations. Therefore Menelaus's theorem belongs to affine geometry. However, in the proof we can (and will) use Euclidean-type arguments.

Proof. Let X , Y and Z be the footpoints of A , B and C on ℓ . By the AA similarity condition, $\triangle AXC' \sim \triangle BYC'$. Therefore,

$$\frac{AC'}{BC'} = \frac{AX}{BY}.$$



The same way we get

$$\frac{BA'}{CA'} = \frac{BY}{CZ} \quad \text{and} \quad \frac{CB'}{AB'} = \frac{CZ}{AX}.$$

Therefore,

$$\frac{AC'}{BC'} \cdot \frac{BA'}{CA'} \cdot \frac{CB'}{AB'} = \frac{AX}{BY} \cdot \frac{BY}{CZ} \cdot \frac{CZ}{AX} = 1. \quad \square$$

14.20. Exercise. Let ABC be a nondegenerate triangle. Suppose three distinct points A' , B' , and C' lie on the lines (BC) , (CA) , and (AB) respectively. Assume that the lines (AA') , (BB') and (CC') meet at a point X .

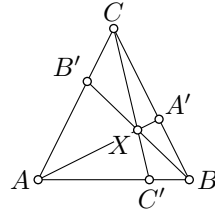
Use Menelaus's theorem to prove the following.

(a) **Ceva's theorem:**

$$\frac{AC'}{BC'} \cdot \frac{BA'}{CA'} \cdot \frac{CB'}{AB'} = 1.$$

(b) **Van Aubel's theorem:** If A' lies between B and C , then

$$\frac{AC'}{BC'} + \frac{AB'}{CB'} = \frac{AX}{A'X}.$$



These three theorems can be formulated in a more exact way by taking the ratios $\frac{AC'}{BC'}$, $\frac{BA'}{CA'}$, and $\frac{CB'}{AB'}$ with sign. Namely, given distinct points A , B , and X on one line, let us define the signed ratio $\left(\frac{AX}{BX}\right) := \pm \frac{AX}{BX}$, where the sign is chosen to meet the equation

$$\overrightarrow{AX} = \left(\frac{AX}{BX}\right) \cdot \overrightarrow{BX}.$$

(Note that $\left(\frac{AX}{BX}\right) < 0$ if and only if X lies between A and B .)

The identities $\left(\frac{AC'}{BC'}\right) \cdot \left(\frac{BA'}{CA'}\right) \cdot \left(\frac{CB'}{AB'}\right) = \pm 1$, with $+1$ and -1 give more exact versions of Menelaus's and Ceva's theorem respectively. In Van Aubel's theorem we have $\left(\frac{AC'}{BC'}\right) + \left(\frac{AB'}{CB'}\right) = \left(\frac{AX}{A'X}\right)$ and this identity is valid without the assumption that A' lies between B and C .

We also have the converses of all three signed versions.

Chapter 15

Projective geometry

A Projective completion

In the Euclidean plane, two distinct lines might have one or zero points of intersection (in the latter case the lines are parallel). We aim to extend the Euclidean plane by ideal points so that any two distinct lines will have exactly one point of intersection.


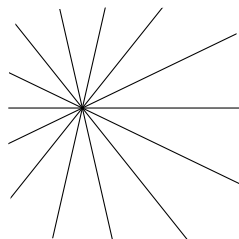
A collection of lines in the Euclidean plane is called concurrent if they all intersect at a single point or if they are all pairwise parallel. A maximal set of concurrent lines in the plane is called a pencil. There are two types of pencils: central pencils contain all lines passing thru a fixed point called the center of the pencil and parallel pencils contain pairwise parallel lines.

Note that any two lines completely determine the pencil containing both.

A point P in the Euclidean plane uniquely defines a central pencil with the center at P . Let us add one ideal point for each parallel pencil, assuming that all these ideal points lie on one ideal line. We also assume that the ideal line belongs to each parallel pencil.

We obtain the so-called projective plane (or the projective completion of the original plane). It comes with an incidence structure — we say that three points lie on one line if the corresponding pencils contain a common line. Projective geometry studies this incidence structure.

A parallel pencil contains the ideal line and the lines represented by



equations of the form $y = m \cdot x + b$ with a fixed slope m . If $m = \infty$, we assume that the lines are given by equations of the form $x = a$. Therefore the projective completion contains all the points in the (x, y) -plane along with the ideal line containing one ideal point P_m for every slope $m \in \mathbb{R} \cup \{\infty\}$.

B Euclidean space

Let us revisit the construction of the metric d_2 (Exercise 1.2), but this time in three-dimensional space.

Consider \mathbb{R}^3 , which represents the set of all triples (x, y, z) of real numbers. Let $A = (x_A, y_A, z_A)$ and $B = (x_B, y_B, z_B)$ be arbitrary points in \mathbb{R}^3 . Define the metric on \mathbb{R}^3 as follows:

$$AB := \sqrt{(x_A - x_B)^2 + (y_A - y_B)^2 + (z_A - z_B)^2}.$$

The obtained metric space is called Euclidean space.

A subset of points in \mathbb{R}^3 is called a plane if it can be described by an equation of the form

$$a \cdot x + b \cdot y + c \cdot z + d = 0,$$

where a, b, c , and d are constants, and at least one of the values a, b or c is distinct from zero.

It is straightforward to show the following:

- ◊ Any plane in the Euclidean space is isometric to the Euclidean plane.
- ◊ Any three points in the Euclidean space lie on a plane.
- ◊ The intersection of two distinct planes (if it is nonempty) forms a line in each of these planes.

These statements enable us to generalize many results from Euclidean plane geometry to Euclidean space.

C Model of space

Let us identify the Euclidean plane with a plane Π in the Euclidean space \mathbb{R}^3 that does not pass thru the origin O . Denote by $\hat{\Pi}$ the projective completion of Π .

Denote by Φ the set of all lines in \mathbb{R}^3 thru O . Let us define a bijection $P \leftrightarrow \dot{P}$ between $\hat{\Pi}$ and Φ . If $P \in \Pi$, we take the line $\dot{P} = (OP)$; if P is an ideal point of $\hat{\Pi}$ defined by a parallel pencil of lines, we take the line \dot{P} thru O and parallel to the lines in this pencil.

Furthermore, let Ψ be the set of all planes in \mathbb{R}^3 thru O . In a similar fashion, we can define a bijection $\ell \leftrightarrow \hat{\ell}$ between lines in $\hat{\Pi}$ and Ψ . If a

line ℓ is not ideal, we take the plane $\dot{\ell}$ that contains ℓ and O ; if the line ℓ is ideal, we take $\dot{\ell}$ to be the plane passing thru O and parallel to Π (that is, $\dot{\ell} \cap \Pi = \emptyset$).

15.1. Observation. *Let P and ℓ be a point and a line in the projective plane. Then*

$$P \in \ell \iff \dot{P} \subset \dot{\ell},$$

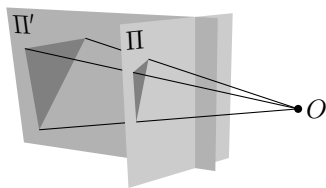
where \dot{P} and $\dot{\ell}$ are defined by the constructed bijections.

D Perspective projection

Let O be a point that does not lie on planes Π and Π' in \mathbb{R}^3 .

A perspective projection from Π to Π' with center O maps a point $P \in \Pi$ to the intersection point $P' = \Pi' \cap (OP)$.

In general, perspective projection is not a bijection between the planes. Indeed, if the line (OP) is parallel to Π' (that is, if $(OP) \cap \Pi' = \emptyset$) then the perspective projection of $P \in \Pi$ is undefined. Also, if $(OP') \parallel \Pi$ for $P' \in \Pi'$, then the point P' is not an image of the perspective projection.



Denote by $\hat{\Pi}$ and $\hat{\Pi}'$ the projective completions of Π and Π' respectively. Note that the perspective projection is a restriction of the composition of two bijections $\hat{\Pi} \leftrightarrow \Phi \leftrightarrow \hat{\Pi}'$ constructed in the previous section. By Observation 15.1, the perspective projection can be extended to a bijection $\hat{\Pi} \leftrightarrow \hat{\Pi}'$ that sends lines to lines.¹

For example, suppose O is the origin of the (x, y, z) -coordinate space, and the planes Π and Π' are defined by the equations $z = 1$ and $x = 1$ respectively. Then the perspective projection from Π to Π' can be written in coordinates as

$$(x, y, 1) \mapsto (1, \frac{y}{x}, \frac{1}{x}).$$

Indeed the coordinates have to be proportional; points on Π have a unit z -coordinate, and points on Π' have a unit x -coordinate.

The perspective projection maps one plane to another. However, we can identify the two planes by fixing a coordinate system in each. In this case, we get a partially defined map from the plane to itself. We will keep the name perspective transformation for such maps.

¹A similar story happened with inversion. Inversion is not defined at its center; moreover, the center is not an the inverse of any point. To deal with this problem, we introduced the inversive plane, which is the Euclidean plane extended by one ideal point. The same strategy works for the perspective projection $\Pi \rightarrow \Pi'$, but this time we need to add an ideal line.

For the described perspective projection, we may get the map

$$\textcircled{1} \quad \beta: (x, y) \mapsto \left(\frac{1}{x}, \frac{y}{x}\right).$$

This map is undefined on the line $x = 0$. Also, points on this line are not images of points under the perspective projection.

For example, to define an extension of the perspective projection β in $\textcircled{1}$, we have to observe that

- \diamond The pencil of vertical lines $x = a$ is mapped to itself.
- \diamond The ideal points defined by pencils of lines $y = m \cdot x + b$ are mapped to the point $(0, m)$, and the other way around — point $(0, m)$ is mapped to the ideal point defined by the pencil of lines $y = m \cdot x + b$.

E Projective transformations

A bijection from the projective plane to itself that sends lines to lines is called projective transformation.

Note that any affine transformation defines a projective transformation on the corresponding projective plane. We will call such projective transformations affine; these are projective transformations that send the ideal line to itself.

The extended perspective projection, as discussed in the previous section, provides another source of examples of projective transformations.

15.2. Theorem. *Given a line ℓ in the projective plane, there is a perspective projection that sends ℓ to the ideal line.*

Moreover, a perspective transformation is either affine or, in a suitable coordinate system, it can be written as a composition of the extension of perspective projection

$$\beta: (x, y) \mapsto \left(\frac{x}{y}, \frac{1}{y}\right)$$

and an affine transformation.

Proof. Choose an (x, y) -coordinate system so that the line ℓ is defined by the equation $y = 0$. Then the extension of β gives the needed transformation.

Fix a projective transformation γ . If γ sends the ideal line to itself, then it must to be affine. In this case, the theorem is proved.

Suppose γ sends the ideal line to a line ℓ . Choose a perspective projection β as above. The composition $\beta \circ \gamma$ sends the ideal line to itself. That is, $\alpha = \beta \circ \gamma$ is affine. Note that β is self-inverse; therefore

$$\gamma = \beta \circ \beta \circ \gamma = \beta \circ \alpha$$

— hence the result. □

15.3. Exercise. Let $P \mapsto P'$ be (a) an affine transformation, (b) the perspective projection defined by $(x, y) \mapsto (\frac{x}{y}, \frac{1}{y})$, or (c) an arbitrary projective transformation. Suppose P_1, P_2, P_3, P_4 are distinct points on one line. Show that

$$\frac{P_1P_2 \cdot P_3P_4}{P_2P_3 \cdot P_4P_1} = \frac{P'_1P'_2 \cdot P'_3P'_4}{P'_2P'_3 \cdot P'_4P'_1}$$

if none of these points lies on the ideal line. In other words, each of these maps preserves the cross-ratio for quadruples of points on one line.

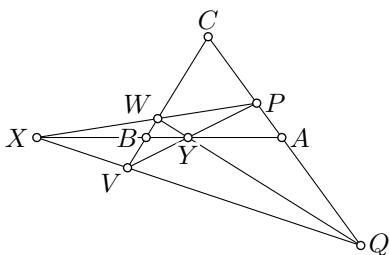
15.4. Advanced exercise. Let $A, B, C, P, Q, V, W, X, Y$ be as on the diagram.

(a) Show that

$$\frac{AX \cdot BY}{AY \cdot BX} = \frac{AP \cdot CQ}{AQ \cdot CP}.$$

(b) Use part (a) to show that

$$AX \cdot BY = AY \cdot BX.$$



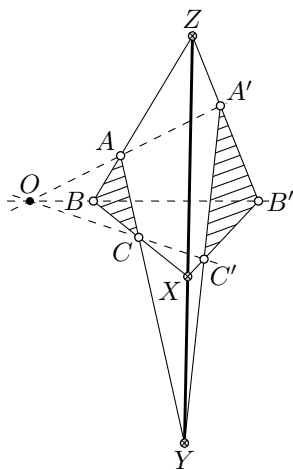
F Moving points to infinity

Theorem 15.2 allows us declare that a given line is ideal. In other words, we can choose a preferred affine plane by removing one line from the projective plane. This construction provides a method for solving problems in projective geometry which will be illustrated by the following classical example:

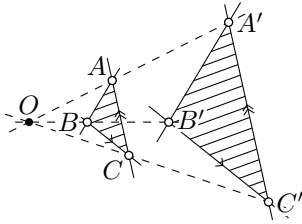
15.5. Desargues' theorem. Consider three concurrent lines (AA') , (BB') , and (CC') in the projective plane. Define

$$\begin{aligned} X &= (BC) \cap (B'C'), \\ Y &= (CA) \cap (C'A'), \\ Z &= (AB) \cap (A'B'). \end{aligned}$$

Then the points X, Y , and Z are collinear.



Proof. We may assume that the line (XY) is ideal. If not, apply a perspective projection that sends the line (XY) to the ideal line.



That is, we can assume that

$$(BC) \parallel (B'C') \quad \text{and} \quad (CA) \parallel (C'A'),$$

and we need to show that

$$(AB) \parallel (A'B').$$

Assume that the lines (AA') , (BB') , and (CC') intersect at point O . Since $(BC) \parallel (B'C')$, the transversal property (7.9) implies that $\angle OBC = \angle OB'C'$ and $\angle OCB = \angle OC'B'$. By the AA similarity condition, $\triangle OBC \sim \triangle OB'C'$. In particular,

$$\frac{OB}{OB'} = \frac{OC}{OC'}.$$

In the same way, we get that $\triangle OAC \sim \triangle OA'C'$ and

$$\frac{OA}{OA'} = \frac{OC}{OC'}.$$

Therefore,

$$\frac{OA}{OA'} = \frac{OB}{OB'}.$$

By the SAS similarity condition, we get that $\triangle OAB \sim \triangle OA'B'$; in particular, $\angle OAB = \pm \angle OA'B'$.

Note that $\angle AOB = \angle A'OB'$. Therefore,

$$\angle OAB = \angle OA'B'.$$

By the transversal property (7.9), we have $(AB) \parallel (A'B')$.

The case $(AA') \parallel (BB') \parallel (CC')$ is done similarly. In this case, the quadrangles $B'BCC'$ and $A'ACC'$ are parallelograms. Therefore,

$$BB' = CC' = AA'.$$

Hence $\square B'BAA'$ is a parallelogram and $(AB) \parallel (A'B')$. □

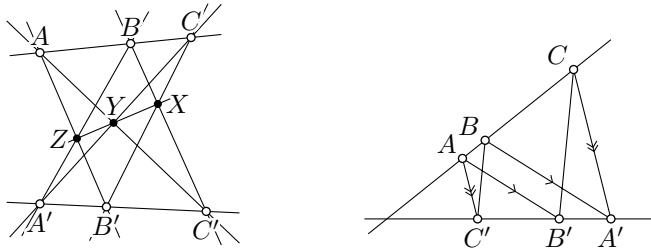
Here is another classical theorem of projective geometry.

15.6. Pappus' theorem. *Assume that two triples of points A, B, C , and A', B', C' are collinear. Suppose points X, Y, Z are defined by*

$$X = (BC') \cap (B'C), \quad Y = (CA') \cap (C'A), \quad Z = (AB') \cap (A'B).$$

Then the points X, Y, Z are collinear.

Pappus' theorem can be proved the same way as Desargues' theorem.



Idea of the proof. Applying a perspective projection, we can assume that Y and Z lie on the ideal line. It remains to show that X lies on the ideal line.

In other words, assuming that $(AB') \parallel (A'B)$ and $(AC') \parallel (A'C)$, we need to show that $(BC') \parallel (B'C)$.

15.7. Exercise. *Finish the proof of Pappus' theorem using the idea described above.*

The following exercise gives a partial converse to Pappus' theorem.

15.8. Exercise. *Given two triples of points A, B, C , and A', B', C' , suppose distinct points X, Y, Z are uniquely defined by*

$$X = (BC') \cap (B'C), \quad Y = (CA') \cap (C'A), \quad Z = (AB') \cap (A'B).$$

Assume that the triples A, B, C , and X, Y, Z are collinear. Show that the triple A', B', C' is collinear.

15.9. Exercise. *Solve the following construction problem*

- (a) *using Desargues' theorem;*
- (b) *using Pappus' theorem.*

Problem. *Suppose a parallelogram and a line ℓ are given. Assume that ℓ crosses all sides (or their extensions) of the parallelogram at different points. Construct another line parallel to ℓ with a ruler only.*

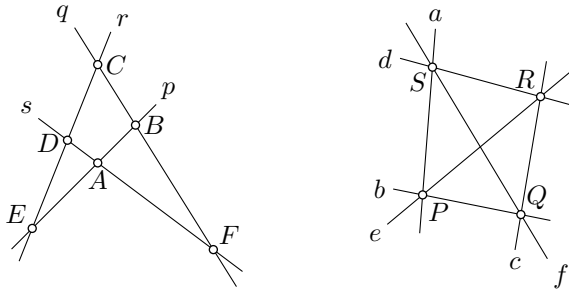
G Duality

Assume $P \leftrightarrow p$ is a bijection between the set of lines and the set of points of a plane is given. That is, given a point P , we denote by p the corresponding line; and the other way around, given a line ℓ we denote by L the corresponding point.

The bijection between points and lines is called duality² if

$$P \in \ell \iff p \ni L.$$

²The standard definition of duality is more general; we consider a special case which is also called polarity.

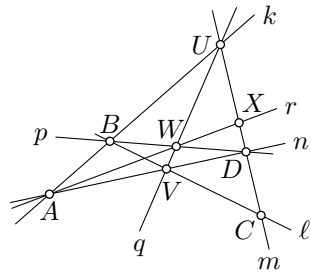


Dual configurations.

for any point P and line ℓ .

15.10. Exercise. Consider the configuration of lines and points on the diagram.

- (a) Redraw the diagram after moving the line q to infinity; mark the points and lines respectively.
- (b) Start with a generic quadrangle $KLMN$ and extend it to a dual diagram; label the lines and points using the convention described above.



15.11. Exercise. Show that the Euclidean plane does not admit a duality.

15.12. Theorem. The projective plane admits a duality.

Proof. Consider a plane Π and a point $O \notin \Pi$ in the space; suppose that $\hat{\Pi}$ denotes the corresponding projective plane.

Recall that Φ and Ψ denote the set of all lines and planes passing thru O . By 15.1, there are bijections $P \leftrightarrow \dot{P}$ between points of $\hat{\Pi}$ and Φ and $\ell \leftrightarrow \dot{\ell}$ between lines in $\hat{\Pi}$ and Ψ such that $P \in \ell$ if and only if $\dot{P} \subset \dot{\ell}$.

It remains to construct a bijection $\dot{\ell} \leftrightarrow \dot{L}$ between Φ and Ψ such that

②
$$\dot{P} \subset \dot{\ell} \iff \dot{p} \supset \dot{L}$$

for any two lines \dot{P} and \dot{L} passing thru O .

Set $\dot{\ell}$ to be the plane thru O that is perpendicular to \dot{L} . Note that both conditions ② are equivalent to $\dot{P} \perp \dot{L}$; hence the result follows. \square

15.13. Exercise. Consider the Euclidean plane with (x, y) -coordinates; suppose that O denotes the origin. Given a point $P \neq O$ with coordinates (a, b) consider the line p given by the equation $a \cdot x + b \cdot y = 1$.

Show that the correspondence P to p can be extended to a duality of the projective plane.

Which line corresponds to O ?

Which point corresponds to the line $a \cdot x + b \cdot y = 0$?

Duality says that lines and points have the same rights in terms of incidence. In particular, we can formulate an equivalent dual statement for any statement in projective geometry. For example, the dual statement of “the points X , Y , and Z lie on one line ℓ ” would be the “lines x , y , and z intersect at one point L ”. Let us formulate the dual statement for Desargues’ theorem 15.5.

15.14. Dual Desargues’ theorem. *Assume that*

$$X = (BC) \cap (B'C'), \quad Y = (CA) \cap (C'A'), \quad Z = (AB) \cap (A'B'),$$

and the points X , Y , and Z are collinear. Then the lines (AA') , (BB') , and (CC') are concurrent.

In this theorem, the points X , Y , and Z are dual to the lines (AA') , (BB') , and (CC') in the original formulation, and the other way around.

Once Desargues’ theorem is proved, applying duality (15.12) we get the dual Desargues’ theorem. Note that the dual Desargues’ theorem is the converse to the original Desargues’ theorem 15.5. So, we get a stronger version of the theorem for free: *the points X , Y , and Z are collinear if and only if the lines (AA') , (BB') , and (CC') are concurrent.*

15.15. Exercise. *Formulate the dual Pappus’ theorem (see 15.6).*

15.16. Exercise. *Solve the following construction problem*

- (a) *using dual Desargues’ theorem;*
- (b) *using Pappus’ theorem or its dual.*

Problem. *Given two parallel lines, construct a third parallel line thru a given point with a ruler only.*

H Polar and pole

In this section, we describe a powerful trick that can be used in the constructions with a ruler.

Assume Γ is a circle in the plane and $P \notin \Gamma$. Draw two lines x and y thru P that intersect Γ at two pairs of points X , X' and Y , Y' . Let $Z = (XY) \cap (X'Y')$ and $Z' = (XY') \cap (X'Y)$. Consider the line $p = (ZZ')$.

15.17. Claim. *The constructed line $p = (ZZ')$ does not depend on the choice of lines x and y .*

Moreover,

Chapter 16

Spherical geometry

Spherical geometry studies the surface of a unit sphere. This geometry has applications in cartography, navigation, and astronomy.

Spherical geometry is a close relative of Euclidean and hyperbolic geometries. Most of the theorems in hyperbolic geometry have spherical analogs, but spherical geometry is easier to visualize.

A Sphere

Recall that Euclidean space is the set \mathbb{R}^3 of all triples (x, y, z) of real numbers such that the distance between a pair of points $A = (x_A, y_A, z_A)$ and $B = (x_B, y_B, z_B)$ is defined by the following formula:

$$AB := \sqrt{(x_A - x_B)^2 + (y_A - y_B)^2 + (z_A - z_B)^2}.$$

The planes in this space are defined as the set of solutions of

$$a \cdot x + b \cdot y + c \cdot z + d = 0$$

for constants a , b , c , and d , where at least one of the numbers a , b , or c is not zero. Any such plane is isometric to the Euclidean plane.

A sphere with center O and radius r is the set of points in the space that lie at the distance r from O .

Let A and B be two points on the unit sphere centered at O . The spherical distance from A to B (briefly AB_s) is defined as $|\angle AOB|$.

A great circle is the intersection of the sphere with a plane passing thru O . In spherical geometry, great circles play the role of lines despite not meeting Definition 1.9. Note that great circles are circles of radius $\frac{\pi}{2}$; it has two antipodal centers.

Let A and B be two distinct and not antipodal points on the unit sphere. Then there is a unique great circle thru A , and B ; it will be denoted by $(AB)_s$. The shorter of the two arcs of $(AB)_s$ with endpoints A and B will be denoted by $[AB]_s$. We can talk about spherical triangles and their sides; their angle measures are defined as the angle between the tangent half-lines to the arcs.

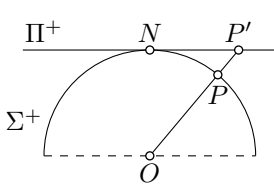
B Central projection

Any map from a sphere (or its part) to a plane distorts the surface in some way. In this section we describe the so-called central projection; it maps great circles to straight lines on the plane. This property makes it convenient in navigation; while the spherical shapes are distorted, the shortest path on the plane corresponds to a shortest path on the sphere.

The central projection is analogous to the projective model of the hyperbolic plane discussed in Chapter 17.

Let Σ be the unit sphere centered at the origin O . Suppose that Π^+ denotes the plane defined by the equation $z = 1$. This plane is parallel to the (x, y) -plane and passes thru the north pole $N = (0, 0, 1)$ of Σ .

The northern hemisphere of Σ is the subset of points $(x, y, z) \in \Sigma$ such that $z > 0$; it will be denoted by Σ^+ .



Given a point $P \in \Sigma^+$, consider the half-line $[OP)$. Suppose that P' denotes the intersection of $[OP)$ and Π^+ . Note that if $P = (x, y, z)$, then $P' = (\frac{x}{z}, \frac{y}{z}, 1)$. It follows that $P \leftrightarrow P'$ is a bijection between Σ^+ and Π^+ .

The described bijection $\Sigma^+ \leftrightarrow \Pi^+$ is called the central projection of the hemisphere Σ^+ .

Note that the central projection sends the intersections of the great circles with Σ^+ to the lines in Π^+ . This follows since the great circles are intersections of Σ with planes passing thru the origin, and the lines in Π^+ are the intersection of Π^+ with these planes.

The following exercise is analogous to Exercise 17.6.

16.1. Exercise. Let $\Delta_s ABC$ be a nondegenerate spherical triangle. Assume that the plane Π^+ is parallel to the plane passing thru A , B , and C . Let A' , B' , and C' denote the central projections of A , B , and C .

- Show that the midpoints of $[A'B']$, $[B'C']$, and $[C'A']$ are central projections of the midpoints of $[AB]_s$, $[BC]_s$, and $[CA]_s$ respectively.
- Use part (a) to show that the medians of a spherical triangle intersect at one point.

16.2. Exercise. Let $P \leftrightarrow P'$ be the central projection described above and N be the north pole; so, $N' = N$. Show that $|\angle_s NPQ| = \frac{\pi}{2}$ if and only if $|\angle N'P'Q'| = \frac{\pi}{2}$.

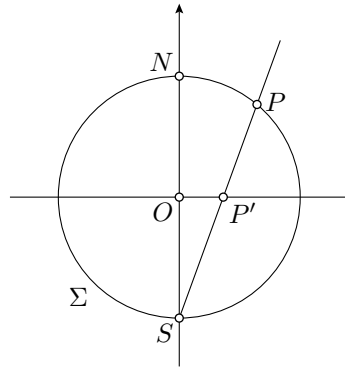
C Stereographic projection

In this section, we define stereographic projection; it is closely related to the conformal model of the hyperbolic plane, which is discussed in Chapter 12.

Consider the unit sphere Σ centered at the origin $(0, 0, 0)$. This sphere can be described by the equation $x^2 + y^2 + z^2 = 1$.

Suppose that Π denotes the (x, y) -plane; it is defined by the equation $z = 0$. Clearly, Π runs thru the center of Σ .

Let $N = (0, 0, 1)$ and $S = (0, 0, -1)$ denote the “north” and “south” poles of Σ ; these are the points on the sphere that have extremal distances to Π . Suppose that Ω denotes the “equator” of Σ ; it is the intersection $\Sigma \cap \Pi$.



The plane thru P , O , and S .

For any point $P \neq S$ on Σ , consider the line (SP) in the space. This line intersects Π at exactly one point, denoted by P' . Set $S' = \infty$.

The map $\xi_s : P \mapsto P'$ is called the stereographic projection from Σ to Π with respect to the south pole. The inverse of this map $\xi_s^{-1} : P' \mapsto P$ is called the stereographic projection from Π to Σ with respect to the south pole.

In the same way, one can define the stereographic projections ξ_n and ξ_n^{-1} with respect to the north pole N .

Note that $P = P'$ if and only if $P \in \Omega$.

Exercise 16.4 below states that the stereographic projection preserves the angles between arcs; more precisely, *the absolute value of the angle measure* between arcs on the sphere. This is a useful property in cartography; the curves on the sphere meet at the same angles as their stereographic projections.

D Inversion across a sphere

The inversion across a sphere is defined the same way as the inversion across a circle.

Formally, let Σ be the sphere with center O and radius r . The inversion across Σ of a point P is the point $P' \in [OP)$ such that

$$OP \cdot OP' = r^2.$$

In this case, the sphere Σ will be called the sphere of inversion, and its center is called the center of inversion.

We also add ∞ to the space and assume that the center of inversion is mapped to ∞ and the other way around. The space \mathbb{R}^3 with the point ∞ will be called inversive space.

The inversion of space shares many properties with the inversion of the plane. Most importantly, analogs of theorems 10.6, 10.7, 10.25 can be summarized as follows:

16.3. Theorem. *The inversion across the sphere has the following properties:*

- (a) *Inversion maps a sphere or a plane into a sphere or a plane.*
- (b) *Inversion maps a circline into a circline.*
- (c) *Inversion preserves the cross-ratio; that is, if $A', B', C',$ and D' are the inverses of the points $A, B, C,$ and D respectively, then*

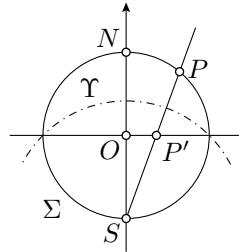
$$\frac{AB \cdot CD}{BC \cdot DA} = \frac{A'B' \cdot C'D'}{B'C' \cdot D'A'}.$$

- (d) *Inversion maps arcs into arcs.*
- (e) *Inversion preserves the absolute value of the angle measure between tangent half-lines to the arcs.*

In the following exercises, we apply the theorem above to tie the stereographic projection with the inversion. We assume that $\Sigma, \Pi, \Omega, O, S, N$ and ξ_s are as in the previous section.

16.4. Exercise. *Show that the stereographic projections $\xi_s: \Sigma \rightarrow \Pi$ and $\xi_s^{-1}: \Pi \rightarrow \Sigma$ are the restrictions to Σ and Π respectively, of the inversion across the sphere Υ with the center S and radius $\sqrt{2}$.*

Conclude that the stereographic projection preserves the angles between arcs; more precisely, the absolute value of the angle measure between arcs on the sphere.



16.5. Exercise. *Show that the stereographic projection $\xi_s: \Sigma \rightarrow \Pi$ sends the great circles to plane circlines that intersect Ω at opposite points.*

16.6. Exercise. Fix a point $P \in \Pi$ and let Q be another point in Π . Let P' and Q' denote their stereographic projections to Σ . Set $x = PQ$ and $y = P'Q'_s$. Show that

$$\lim_{x \rightarrow 0} \frac{y}{x} = \frac{2}{1 + OP^2}.$$

The last exercise is analogous to Lemma 13.13.

The proof of 16.3 resembles the corresponding proofs in plane geometry. Let us give couple of a hints to the reader who wants to reconstruct its proof. To prove 16.3a, one needs the following lemma; its proof is left to the reader.


16.7. Lemma. Let Σ be a subset of the Euclidean space that contains at least two points. Fix a point O in the space.

Then Σ is a sphere if and only if for any plane Π passing thru O , the intersection $\Pi \cap \Sigma$ is either an empty set, a one-point set, or a circle.

The following observation reduces part (b) to part (a).

16.8. Observation. Any circle in the space is an intersection of two spheres.

Let us define a circular cone as a set formed by line segments from a fixed point, called the tip of the cone, to all the points on a fixed circle, called the base of the cone; we always assume that the base does not lie in the same plane as the tip. We say that the cone is right if the center of the base circle is the footpoint of the tip on the base plane; otherwise, we call it oblique.



16.9. Exercise. Let K be an oblique circular cone. Show that there is a plane Π that is not parallel to the base plane of K such that the intersection $\Pi \cap K$ is a circle.

E Pythagorean theorem

Here is an analog of the Pythagorean theorems (6.4 and 13.16) in spherical geometry.

16.10. Spherical Pythagorean theorem. Let $\triangle_s ABC$ be a spherical triangle with a right angle at C . Set $a = BC_s$, $b = CA_s$, and $c = AB_s$. Then

$$\cos c = \cos a \cdot \cos b.$$

In the proof, we will use the notion of the scalar product which we are about to discuss.

Let $v_A = (x_A, y_A, z_A)$ and $v_B = (x_B, y_B, z_B)$ denote the position vectors of points A and B . The scalar product of the two vectors v_A and v_B in \mathbb{R}^3 is defined as

$$\textcircled{1} \quad \langle v_A, v_B \rangle := x_A \cdot x_B + y_A \cdot y_B + z_A \cdot z_B.$$

Assume both vectors v_A and v_B are nonzero; suppose that φ denotes the angle measure between them. Then the scalar product can be expressed the following way:

$$\textcircled{2} \quad \langle v_A, v_B \rangle = |v_A| \cdot |v_B| \cdot \cos \varphi,$$

where

$$|v_A| = \sqrt{x_A^2 + y_A^2 + z_A^2}, \quad |v_B| = \sqrt{x_B^2 + y_B^2 + z_B^2}.$$

Now, assume that the points A and B lie on the unit sphere Σ in \mathbb{R}^3 centered at the origin. In this case, $|v_A| = |v_B| = 1$. By $\textcircled{2}$ we get that

$$\textcircled{3} \quad \cos AB_s = \langle v_A, v_B \rangle.$$

Proof of the spherical Pythagorean theorem. Since the angle at C is right, we can choose the coordinates in \mathbb{R}^3 so that $v_C = (0, 0, 1)$, v_A lies in the (x, y) -plane, so $v_A = (x_A, 0, z_A)$, and v_B lies in the (y, z) -plane, so $v_B = (0, y_B, z_B)$.

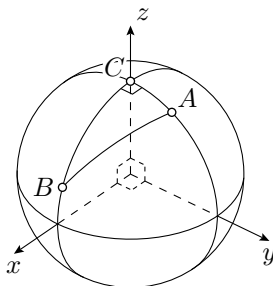
Applying, $\textcircled{3}$, we get that

$$z_A = \langle v_C, v_A \rangle = \cos b,$$

$$z_B = \langle v_C, v_B \rangle = \cos a.$$

Applying, $\textcircled{1}$ and $\textcircled{3}$, we get that

$$\begin{aligned} \cos c &= \langle v_A, v_B \rangle = \\ &= x_A \cdot 0 + 0 \cdot y_B + z_A \cdot z_B = \\ &= \cos b \cdot \cos a. \end{aligned}$$



□

16.11. Exercise. Show that if $\triangle_s ABC$ is a spherical triangle with a right angle at C , and $AC_s = BC_s = \frac{\pi}{4}$, then $AB_s = \frac{\pi}{3}$.

F Imaginary distance

Recall that

$$\operatorname{ch} x = \frac{e^x + e^{-x}}{2} \quad \text{and} \quad \operatorname{cos} x = \frac{e^{i \cdot x} + e^{-i \cdot x}}{2}.$$

The first formula is the definition of the hyperbolic cosine (see 12E); the second one is called Euler's formula (see 18D). It follows that

$$\operatorname{ch} x = \cos(i \cdot x) \quad \text{and} \quad \cos x = \operatorname{ch}(i \cdot x).$$

Let us compare the formulas in hyperbolic and spherical Pythagorean theorems (see 16.10 and 13.16):

$$\operatorname{ch} c = \operatorname{ch} a \cdot \operatorname{ch} b, \quad \cos c = \cos a \cdot \cos b.$$

Note that if we change a , b , and c to $i \cdot a$, $i \cdot b$, and $i \cdot c$, then the first formula transforms into the second one, and the other way around.

This is not a coincidence; the same holds for all analytic formulas — changing every distance d to $i \cdot d$ transforms a valid spherical formula into a valid hyperbolic formula; the angle measures need no change. This magic substitution was found by Franz Taurinus [21]; we are not going to prove it.

16.12. Advanced exercise. Consider a spherical triangle ABC ; set $a = BC_s$, $b = CA_s$, $c = AB_s$, $\alpha = \angle_s CAB$, $\beta = \angle_s ABC$, $\gamma = \angle_s BCA$. Use the Taurinus substitution to write the hyperbolic analogs to the following formulas in spherical geometry:

(a) The spherical cosine rule:

$$\cos c = \cos a \cdot \cos b + \sin a \cdot \sin b \cdot \cos \gamma.$$

(b) The dual spherical cosine rule:

$$\cos \gamma = -\cos \alpha \cdot \cos \beta + \sin \alpha \cdot \sin \beta \cdot \cos c.$$

(c) The spherical sine rule:

$$\frac{\sin \alpha}{\sin a} = \frac{\sin \beta}{\sin b} = \frac{\sin \gamma}{\sin c}.$$

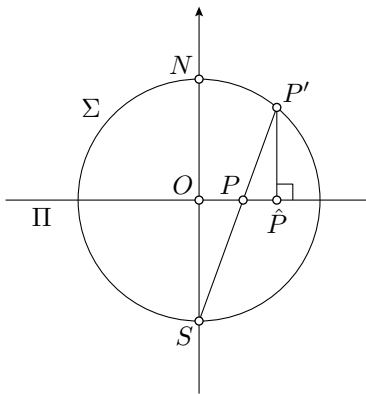
Chapter 17

Projective model

The *projective model* is another model of the hyperbolic plane discovered by Eugenio Beltrami; it is often called the Klein model. The projective and conformal models are saying exactly the same thing but in two different languages. Some problems are easier in projective model, and others in the conformal model. Therefore, it is worth knowing both.

A Special bijection on the h-plane

Consider the conformal disc model. Assume its absolute is a unit circle Ω centered at O . Choose a coordinate system (x, y) on the plane with the origin at O , so the circle Ω is described by the equation $x^2 + y^2 = 1$.



Plane thru P , O , and S .

For a point $P' \in \Sigma$ consider its foot-point \hat{P} on Π ; this is the closest point to P' .

Let us think that our plane is the coordinate (x, y) -plane in the Euclidean space; denote it by Π . Let Σ be the unit sphere centered at O ; it is described by the equation $x^2 + y^2 + z^2 = 1$. Set $S = (0, 0, -1)$ and $N = (0, 0, 1)$; these are the south and north poles of Σ .

Consider the stereographic projection $\Pi \rightarrow \Sigma$ from S ; given a point $P \in \Pi$ denote by P' its image in Σ . Note that the h-plane is mapped to the northern hemisphere, that is, to the set of points (x, y, z) in Σ described by the inequality $z > 0$.

For a point $P' \in \Sigma$ consider its foot-

Note that the composition of these two maps $P \leftrightarrow P' \leftrightarrow \hat{P}$ gives a bijection from the h-plane to itself. Furthermore, note that $P = \hat{P}$ if and only if $P \in \Omega$ or $P = O$.

17.1. Lemma. *Let $P \leftrightarrow \hat{P}$ be the bijection of the h-plane described above. Suppose $(PQ)_h$ is an h-line with the ideal points A and B . Then $\hat{P}, \hat{Q} \in [AB]$.*

Moreover,

$$\textcircled{1} \quad \frac{A\hat{Q} \cdot B\hat{P}}{\hat{Q}B \cdot \hat{P}A} = \left(\frac{AQ \cdot BP}{QB \cdot PA} \right)^2.$$

In particular, if A, P, Q, B appear in the same order, then

$$PQ_h = \frac{1}{2} \cdot \ln \frac{A\hat{Q} \cdot B\hat{P}}{\hat{Q}B \cdot \hat{P}A}.$$

Proof. Consider the stereographic projection $\Pi \rightarrow \Sigma$ from the south pole S . Note that it fixes A and B ; denote by P' and Q' the images of P and Q ;

According to Theorem 16.3c,

$$\textcircled{2} \quad \frac{AQ \cdot BP}{QB \cdot PA} = \frac{AQ' \cdot BP'}{Q'B \cdot P'A}.$$

By Theorem 16.3e, each circline in Π that is perpendicular to Ω is mapped to a circle in Σ that is still perpendicular to Ω . It follows that the stereographic projection sends $(PQ)_h$ to the intersection of the northern hemisphere of Σ with a plane perpendicular to Π .

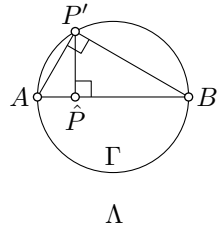
Denote this plane by Λ ; it contains the points A, B, P', \hat{P} and the circle $\Gamma = \Sigma \cap \Lambda$. (It also contains Q' and \hat{Q} but we will not use these points for a while.)

Note that

- ◇ $A, B, P' \in \Gamma$,
- ◇ $[AB]$ is a diameter of Γ ,
- ◇ $(AB) = \Pi \cap \Lambda$,
- ◇ $\hat{P} \in [AB]$
- ◇ $(P'\hat{P}) \perp (AB)$.

Since $[AB]$ is the diameter of Γ , by Corollary 9.8, the angle $AP'B$ is right. Hence $\triangle AP'\hat{P} \sim \triangle AP'B \sim \triangle P'\hat{P}B$. In particular

$$\frac{AP'}{BP'} = \frac{A\hat{P}}{P'\hat{P}} = \frac{P'\hat{P}}{B\hat{P}}.$$



Therefore

$$\textcircled{3} \quad \frac{A\hat{P}}{B\hat{P}} = \left(\frac{AP'}{BP'}\right)^2 \quad \text{and similarly} \quad \frac{A\hat{Q}}{B\hat{Q}} = \left(\frac{AQ'}{BQ'}\right)^2.$$

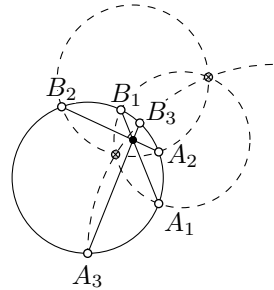
Finally, note that $\textcircled{2} + \textcircled{3}$ imply $\textcircled{1}$.

The last statement follows from $\textcircled{1}$ and the definition of the h-distance. Indeed,

$$\begin{aligned} PQ_h &:= \ln \frac{AQ \cdot BP}{QB \cdot PA} = \\ &= \ln \left(\frac{A\hat{Q} \cdot B\hat{P}}{\hat{Q}B \cdot \hat{P}A} \right)^{\frac{1}{2}} = \\ &= \frac{1}{2} \cdot \ln \frac{A\hat{Q} \cdot B\hat{P}}{\hat{Q}B \cdot \hat{P}A}. \end{aligned}$$

□

17.2. Exercise. Let $\Gamma_1, \Gamma_2,$ and Γ_3 be three circles perpendicular to a circle Ω . Let $[A_1B_1], [A_2B_2],$ and $[A_3B_3]$ denote the common chords of Ω and $\Gamma_1, \Gamma_2, \Gamma_3$ respectively. Show that the chords $[A_1B_1], [A_2B_2],$ and $[A_3B_3]$ intersect at one point inside Ω if and only if $\Gamma_1, \Gamma_2,$ and Γ_3 intersect at two points.



17.3. Exercise. Show that $2 \cdot OP_h = O\hat{P}_h,$ where O is the center of absolute, and $P \leftrightarrow \hat{P}$ is the bijection of the h-plane described above.


B Projective model

The following picture illustrates the bijection $P \mapsto \hat{P}$ of the h-plane described in the previous section — if you take the picture on the left and apply the map $P \mapsto \hat{P},$ you get the picture on the right. The pictures are conformal and projective models of the hyperbolic plane respectively. The map $P \mapsto \hat{P}$ serves as a *translation* between the models.


In the projective model, things look different; some become simpler, and others become more complex.

Lines. In the projective model, the h-lines are represented as chords of the absolute, more precisely, chords without their endpoints.

This observation can be used to transfer statements about lines and points from the Euclidean plane to the h-plane. As an example let us state a version of Pappus' theorem for h-plane.



Conformal model



Projective model

17.4. Hyperbolic Pappus' theorem. *Assume that two triples of h-points A, B, C , and A', B', C' in the h-plane are h-collinear. Suppose that the h-points X, Y , and Z are defined by*

$$X = (BC')_h \cap (B'C)_h, \quad Y = (CA')_h \cap (C'A)_h, \quad Z = (AB')_h \cap (A'B)_h.$$

Then the points X, Y, Z are h-collinear.

In the projective model, this statement follows immediately from the original Pappus' theorem 15.6. The same can be done for Desargues' theorem 15.5. The same argument shows that the construction of a tangent line with a ruler only described in Exercise 15.19 works in the h-plane as well. These statements are not at all evident in the conformal model.

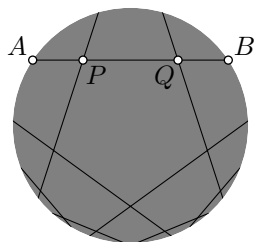
Circles and equidistants. In the projective model, the h-circles and equidistants are ellipses and their open arcs. This follows since the stereographic projection sends circles on the plane to circles on the unit sphere and the footpoint projection of the circle back to the plane is an ellipse. (One may define an ellipse as a footpoint projection of a circle.)

Distance. Consider a pair of h-points P and Q . Let A and B be the ideal points of the h-line in the projective model; that is, A and B are the intersections of the Euclidean line (PQ) with the absolute.

Then by Lemma 17.1,

$$\textcircled{4} \quad PQ_h = \frac{1}{2} \cdot \ln \frac{AQ \cdot BP}{QB \cdot PA},$$

assuming the points A, P, Q, B appear on the line in the same order.



Angles. The hyperbolic angle measure in the projective model is very different from Euclidean, making it hard to determine from the picture. For example, all the intersecting h-lines on the picture are perpendicular.

To find the angle measure, one may apply a motion of the h-plane that moves the vertex of the angle to the center of the absolute; once done, the hyperbolic and Euclidean angles have the same measure. In particular, if O is the center of the absolute, then

$$\angle_h AOB = \angle AOB.$$

17.5. Observation. *If O is the center of the absolute, then*

$$(OA) \perp (AB) \iff (OA_h) \perp (AB)_h.$$

Proof. Note that the Euclidean reflection across (OA) induces the h-reflection across $(OA)_h$. Let B' be the reflection of B . Observe that $(OA) \perp (AB) \iff A \in (BB') \iff A \in (BB')_h \iff (OA_h) \perp (AB)_h$. \square

Motions. The motions of the h-plane in the conformal and projective models are relevant to inversive transformations and projective transformations in the same way. Namely:

- ◊ Inversive transformations that preserve the h-plane describe motions of the h-plane in the conformal model.
- ◊ Projective transformations that preserve the h-plane describe motions of the h-plane in the projective model.¹

The following exercise is a hyperbolic analog of Exercise 16.1.

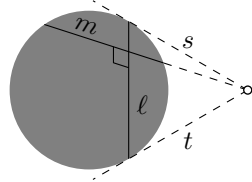
17.6. Exercise. *Let P and Q be points in the h-plane that lie at the same distance from the center of the absolute. Observe that in the projective model, the h-midpoint of $[PQ]_h$ coincides with the Euclidean midpoint of $[PQ]_h$.*

Conclude that if an h-triangle is inscribed in an h-circle, then its medians meet at one point.

Recall that an h-triangle might also be inscribed in a horocycle or an equidistant. Think about how to prove the statement in this case.

17.7. Exercise. *Show that the altitudes of a hyperbolic triangle either intersect at one point or are pairwise disjoint.*

17.8. Exercise. *Let ℓ and m be h-lines in the projective model. Let s and t denote the Euclidean lines tangent to the absolute at the ideal points of ℓ . Show that if the lines s , t , and the extension of m meet at one point, then $\ell \perp m$.*



¹The idea described in the solution of Exercise 16.9. The sketch of proof of 19.18 can be used to construct many projective transformations of this type.

17.9. Exercise. Use the projective model to derive the formula for the angle of parallelism (Proposition 13.3).

17.10. Exercise. Use the projective model to find an inradius of an ideal triangle.

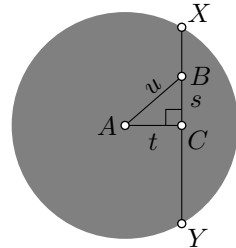
17.11. Advanced exercise. Prove the hyperbolic Pythagorean theorem (13.16) using the following idea.

Recall that the hyperbolic Pythagorean theorem (13.16) states that

$$\textcircled{5} \quad \text{ch } c = \text{ch } a \cdot \text{ch } b,$$

where $a = BC_h$, $b = CA_h$, and $c = AB_h$ and $\triangle_h ACB$ is an h-triangle with a right angle at C .

Idea. Note that we can assume that A is the center of the absolute. By 17.5 the Euclidean triangle ABC is right. Set $s = BC$, $t = CA$, $u = AB$. According to the Euclidean Pythagorean theorem (6.4), we have



$$\textcircled{6} \quad u^2 = s^2 + t^2.$$

It remains to express a , b , and c using s , u , and t and show that $\textcircled{6}$ implies $\textcircled{5}$.

C Bolyai's construction

Assume we need to construct a line thru P that is asymptotically parallel to the given line ℓ in the h-plane.

If A and B are ideal points of ℓ in the projective model, then we could simply draw the Euclidean line (PA) . However, the ideal points do not lie in the h-plane; therefore there is no way to use them in the construction.

In the following construction we assume that you know a ruler-and-compass construction of the perpendicular line; see Exercise 5.22.

17.12. Bolyai's construction.

1. Drop a perpendicular from P to ℓ ; denote it by m . Let Q be the footpoint of P on ℓ .
2. Erect a perpendicular from P to m ; denote it by n .
3. Mark a point R on ℓ distinct from Q .
4. Drop a perpendicular from R to n ; denote it by k .
5. Draw the circle Γ with center P and the radius QR . Mark a point of intersection of Γ with k ; denote it by T .

6. The line $(PT)_h$ is asymptotically parallel to ℓ .

17.13. Exercise. Explain what happens if one performs the Bolyai construction in the Euclidean plane.

The following proposition implies that Bolyai's construction works.

17.14. Proposition. Assume P, Q, R, S, T are points in the h -plane such that $S \in (RT)_h$, $(PQ)_h \perp (QR)_h$, $(PS)_h \perp (PQ)_h$, $(RT)_h \perp (PS)_h$ and $(PT)_h$ and $(QR)_h$ are asymptotically parallel. Then $QR_h = PT_h$.

Proof. We will use the projective model. Without loss of generality, we may assume that P is the center of the absolute. By 17.5, the corresponding Euclidean lines are also perpendicular; that is, $(PQ) \perp (QR)$, $(PS) \perp (PQ)$, and $(RT) \perp (PS)$.

Let A be the common ideal point of $(QR)_h$ and $(PT)_h$. Let B and C denote the remaining ideal points of $(QR)_h$ and $(PT)_h$ respectively.

Note that the Euclidean lines (PQ) , (TR) , and (CB) are parallel. Therefore,

$$\triangle AQP \sim \triangle ART \sim \triangle ABC.$$

In particular,

$$\frac{AC}{AB} = \frac{AT}{AR} = \frac{AP}{AQ}.$$

It follows that

$$\frac{AT}{AR} = \frac{AP}{AQ} = \frac{BR}{CT} = \frac{BQ}{CP}.$$

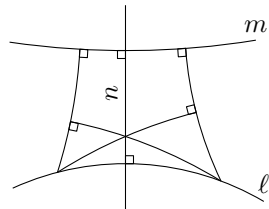
In particular,

$$\frac{AT \cdot CP}{TC \cdot PA} = \frac{AR \cdot BQ}{RB \cdot QA}.$$

Applying the formula for h -distance 4, we get that $QR_h = PT_h$. □

17.15. Advanced exercise. Look at the diagram and recover the construction of a common perpendicular n to the h -lines ℓ and m .

Prove that it works.



Chapter 18

Complex coordinates

In this chapter, we give an interpretation of inversive geometry using complex coordinates. The results of this chapter lead to a deeper understanding of both concepts.

A Complex numbers

Informally, a complex number has form

$$\mathbf{1} \quad z = x + i \cdot y,$$

where x and y are real numbers and $i^2 = -1$.

The set of complex numbers will be denoted by \mathbb{C} . If x , y , and z are as in $\mathbf{1}$, then x is called the real part and y is the imaginary part of the complex number z . Briefly, it is written as

$$x = \operatorname{Re} z \quad \text{and} \quad y = \operatorname{Im} z.$$

On a more formal level, the expression $x + i \cdot y$ is just a convenient way to write the pair (x, y) . Furthermore, addition and multiplication of the pairs are defined as follows:

$$\mathbf{2} \quad \begin{aligned} (x_1 + i \cdot y_1) + (x_2 + i \cdot y_2) &:= (x_1 + x_2) + i \cdot (y_1 + y_2); \\ (x_1 + i \cdot y_1) \cdot (x_2 + i \cdot y_2) &:= (x_1 \cdot x_2 - y_1 \cdot y_2) + i \cdot (x_1 \cdot y_2 + y_1 \cdot x_2). \end{aligned}$$

B Complex coordinates

Remember that we can view the Euclidean plane as the set of all pairs of real numbers (x, y) equipped with the metric

$$AB = \sqrt{(x_A - x_B)^2 + (y_A - y_B)^2},$$

where $A = (x_A, y_A)$ and $B = (x_B, y_B)$.

We can pack the coordinates (x, y) of a point in a single complex number $z = x + i \cdot y$. This creates a direct link between points in the Euclidean plane and \mathbb{C} (the set of complex numbers). Given a point $Z = (x, y)$, the complex number $z = x + i \cdot y$ is referred to as the complex coordinate of Z .

Note that if O , E , and I are points in the plane with complex coordinates 0 , 1 , and i respectively, then $\angle EOI = \pm \frac{\pi}{2}$. We will assume that $\angle EOI = \frac{\pi}{2}$; if not, one needs to adjust the direction of the y -coordinate.

C Conjugation and absolute value

Let $z = x + i \cdot y$; that is, z is a complex number with real part x and imaginary part y . If $y = 0$, we say that the complex number z is real; if $x = 0$, we say that z is imaginary. The set of points with real (imaginary) complex coordinates forms a line in the plane, known as the real (or imaginary) line. The real line will be denoted as \mathbb{R} .

The complex number

$$\bar{z} := x - i \cdot y$$

is called the complex conjugate of $z = x + i \cdot y$. Let Z and \bar{Z} be the points in the plane with the complex coordinates z and \bar{z} respectively. Note that the point \bar{Z} is the reflection of Z across the real line.

It is straightforward to check that

$$\textcircled{3} \quad x = \operatorname{Re} z = \frac{z + \bar{z}}{2}, \quad y = \operatorname{Im} z = \frac{z - \bar{z}}{i \cdot 2}, \quad \text{and} \quad x^2 + y^2 = z \cdot \bar{z}.$$

The last formula in $\textcircled{3}$ allows us to express the quotient $\frac{w}{z}$ of two complex numbers w and $z = x + i \cdot y$:

$$\frac{w}{z} = \frac{1}{z \cdot \bar{z}} \cdot w \cdot \bar{z} = \frac{1}{x^2 + y^2} \cdot w \cdot \bar{z}.$$

Note that

$$\overline{z + w} = \bar{z} + \bar{w}, \quad \overline{z - w} = \bar{z} - \bar{w}, \quad \overline{z \cdot w} = \bar{z} \cdot \bar{w}, \quad \overline{z/w} = \bar{z}/\bar{w}.$$

That is, complex conjugation *respects* all the arithmetic operations.

The value

$$|z| := \sqrt{x^2 + y^2} = \sqrt{(x + i \cdot y) \cdot (x - i \cdot y)} = \sqrt{z \cdot \bar{z}}$$

is called the absolute value of z . If $|z| = 1$, then z is called a unit complex number.

18.1. Exercise. Show that $|v \cdot w| = |v| \cdot |w|$ for any $v, w \in \mathbb{C}$.

Suppose that Z and W are points with complex coordinates z and w . Note that

$$\bullet \quad ZW = |z - w|.$$

The triangle inequality for points with complex coordinates 0 , v , and $v + w$ implies that

$$|v + w| \leq |v| + |w|$$

for any $v, w \in \mathbb{C}$; this inequality is also called the triangle inequality.

18.2. Exercise. Use the identity

$$u \cdot (v - w) + v \cdot (w - u) + w \cdot (u - v) = 0$$

for $u, v, w \in \mathbb{C}$ and the triangle inequality to prove Ptolemy's inequality (6.10).

D Euler's formula

Let α be a real number. The following identity

$$\bullet \quad e^{i \cdot \alpha} = \cos \alpha + i \cdot \sin \alpha$$

is called Euler's formula. In particular, $e^{i \cdot \pi} = -1$ and $e^{i \cdot \frac{\pi}{2}} = i$.

Geometrically, Euler's formula can be understood as follows: Imagine O and E as points with complex coordinates 0 and 1 respectively. Assume

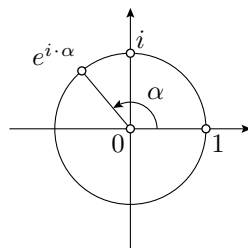
$$OZ = 1 \quad \text{and} \quad \angle EOZ \equiv \alpha,$$

then $e^{i \cdot \alpha}$ is the complex coordinate of Z . In particular, the complex coordinate of any point on the unit circle centered at O can be uniquely expressed as $e^{i \cdot \alpha}$ for some $\alpha \in (-\pi, \pi]$.

Why is this true? The proof of Euler's identity depends on how you define the exponential function.

If you have never applied the exponential function to an imaginary number, you may take the right-hand side in \bullet as the definition of $e^{i \cdot \alpha}$. In this case, nothing has to be proved, but it is better to check that $e^{i \cdot \alpha}$ satisfies familiar identities. Primarily,

$$e^{i \cdot \alpha} \cdot e^{i \cdot \beta} = e^{i \cdot (\alpha + \beta)}.$$



The latter can be proved using **2** and the following well-known trigonometric formulas:

$$\begin{aligned}\cos(\alpha + \beta) &= \cos \alpha \cdot \cos \beta - \sin \alpha \cdot \sin \beta, \\ \sin(\alpha + \beta) &= \sin \alpha \cdot \cos \beta + \cos \alpha \cdot \sin \beta.\end{aligned}$$

If you are familiar with the power series for sine, cosine, and the exponential function, then the following might convince you that identity **5** holds:

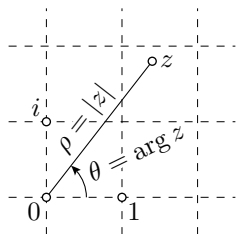
$$\begin{aligned}e^{i \cdot \alpha} &= 1 + i \cdot \alpha + \frac{(i \cdot \alpha)^2}{2!} + \frac{(i \cdot \alpha)^3}{3!} + \frac{(i \cdot \alpha)^4}{4!} + \frac{(i \cdot \alpha)^5}{5!} + \dots = \\ &= 1 + i \cdot \alpha - \frac{\alpha^2}{2!} - i \cdot \frac{\alpha^3}{3!} + \frac{\alpha^4}{4!} + i \cdot \frac{\alpha^5}{5!} - \dots = \\ &= \left(1 - \frac{\alpha^2}{2!} + \frac{\alpha^4}{4!} - \dots\right) + i \cdot \left(\alpha - \frac{\alpha^3}{3!} + \frac{\alpha^5}{5!} - \dots\right) = \\ &= \cos \alpha + i \cdot \sin \alpha.\end{aligned}$$

E Argument and polar coordinates

As before, we assume that O and E are the points with complex coordinates 0 and 1 respectively.

Let Z be a point distinct from O . Set $\rho = OZ$ and $\theta = \angle EOZ$. The pair (ρ, θ) is called the polar coordinates of Z .

If z is the complex coordinate of Z , then $\rho = |z|$. The value θ is called the argument of z (briefly, $\theta = \arg z$). In this case,



$$z = \rho \cdot e^{i \cdot \theta} = \rho \cdot (\cos \theta + i \cdot \sin \theta).$$

Note that

$$\arg(z \cdot w) \equiv \arg z + \arg w,$$

and

$$\arg \frac{z}{w} \equiv \arg z - \arg w$$

if $z \neq 0$ and $w \neq 0$. In particular, if Z , V , and W are points with complex coordinates z , v , and w respectively, then

$$\begin{aligned}\textcircled{6} \quad \angle VZW &= \arg \left(\frac{w - z}{v - z} \right) \equiv \\ &\equiv \arg(w - z) - \arg(v - z)\end{aligned}$$

if $\angle VZW$ is defined.

18.3. Exercise. Use the formula ⑥ to show that

$$\angle ZVW + \angle VWZ + \angle WZV \equiv \pi$$

for any triangle ZVW in the Euclidean plane.

18.4. Exercise. Suppose that points O , E , V , W , and Z have complex coordinates 0 , 1 , v , w , and $z = v \cdot w$ respectively. Show that

$$\triangle OEV \sim \triangle OWZ.$$

The following theorem is a translation of Corollary 9.13 into complex-number language.

18.5. Theorem. Let $\square UVWZ$ be a quadrangle and u , v , w , and z be the complex coordinates of its vertices. Then $\square UVWZ$ is inscribed if and only if the number

$$\frac{(v-u) \cdot (z-w)}{(v-w) \cdot (z-u)}$$

is real.

The value $\frac{(v-u) \cdot (z-w)}{(v-w) \cdot (z-u)}$ is called the complex cross-ratio of u , w , v , and z ; it will be denoted by $(u, w; v, z)$.

18.6. Exercise. Observe that the complex number $z \neq 0$ is real if and only if $\arg z = 0$ or π ; in other words, $2 \cdot \arg z \equiv 0$.

Use this observation to show that Theorem 18.5 is indeed a reformulation of Corollary 9.13.

F Method of complex coordinates

The following problem illustrates the method of complex coordinates.

18.7. Problem. Let $\triangle OPV$ and $\triangle OQW$ be isosceles right triangles such that

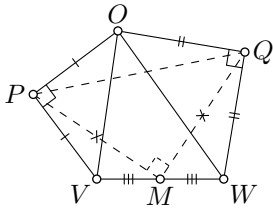
$$\angle VPO = \angle OQW = \frac{\pi}{2}$$

and M be the midpoint of $[VW]$. Assume P , Q , and M are distinct points. Show that $\triangle PMQ$ is an isosceles right triangle.

Solution. Choose complex coordinates so that O is the origin. Denote by v, w, p, q, m the complex coordinates of the remaining points respectively.

Since $\triangle OPV$ and $\triangle OQW$ are isosceles and $\angle VPO = \angle OQW = \frac{\pi}{2}$, ④ and ⑥ imply that

$$v - p = i \cdot p, \qquad q - w = i \cdot q.$$



Therefore

$$m = \frac{1}{2} \cdot (v + w) = \frac{1+i}{2} \cdot p + \frac{1-i}{2} \cdot q.$$

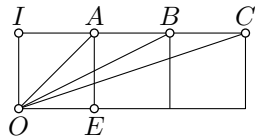
By straightforward computations, we get that

$$p - m = i \cdot (q - m).$$

In particular, $|p - m| = |q - m|$ and $\arg \frac{p-m}{q-m} = \frac{\pi}{2}$; that is, $PM = QM$ and $\angle QMP = \frac{\pi}{2}$. □

18.8. Exercise. Consider three squares with common sides as shown in the diagram. Use the method of complex coordinates to show that

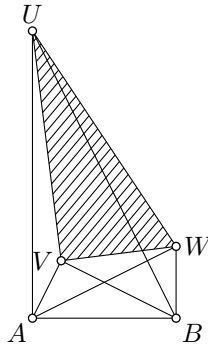
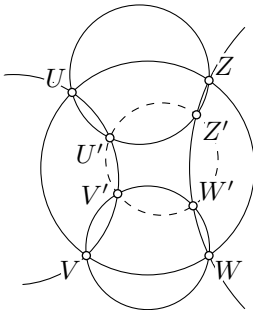
$$\angle EOA + \angle EOB + \angle EOC = \pm \frac{\pi}{2}.$$



18.9. Exercise. Check the following identity with six complex cross-ratios:

$$(u, w; v, z) \cdot (u', w'; v', z') = \frac{(v, w'; v', w) \cdot (z, u'; z', u)}{(u, v'; u', v) \cdot (w, z'; w', z)}.$$

Use it together with Theorem 18.5 to prove that if $\square UVWZ$, $\square UVV'U'$, $\square VWW'V'$, $\square WZZ'W'$, and $\square ZUU'Z'$ are inscribed, then $\square U'V'W'Z'$ is inscribed as well.



18.10. Exercise. Suppose that points $U, V,$ and W lie on one side of line (AB) and $\triangle UAB \sim \triangle BVA \sim \triangle ABW$. Denote by $a, b, u, v,$ and w the complex coordinates of $A, B, U, V,$ and W respectively.

(a) Show that $\frac{u-a}{b-a} = \frac{b-v}{a-v} = \frac{a-b}{w-b} = \frac{u-v}{w-v}$.

(b) Conclude that $\triangle UAB \sim \triangle BVA \sim \triangle ABW \sim \triangle UVW$.

G Fractional linear transformations

18.11. Exercise. Watch the video “Möbius transformations revealed” by Douglas Arnold and Jonathan Rogness. (It is available on YouTube.)

The complex plane \mathbb{C} extended by one ideal number ∞ is called the extended complex plane. It is denoted by $\hat{\mathbb{C}}$, so $\hat{\mathbb{C}} = \mathbb{C} \cup \{\infty\}$

A fractional linear transformation or Möbius transformation of $\hat{\mathbb{C}}$ is a function of one complex variable z that can be written as

$$f(z) = \frac{a \cdot z + b}{c \cdot z + d},$$

where the coefficients a, b, c, d are complex numbers satisfying $a \cdot d - b \cdot c \neq 0$. (If $a \cdot d - b \cdot c = 0$ the function defined above is a constant; it is not a fractional linear transformation.)

In case $c \neq 0$, we assume that

$$f(-d/c) = \infty \quad \text{and} \quad f(\infty) = a/c;$$

and if $c = 0$ we assume $f(\infty) = \infty$.

H Elementary transformations

The following three types of fractional linear transformations are called elementary:

1. $z \mapsto z + w$,
2. $z \mapsto w \cdot z$ for $w \neq 0$,
3. $z \mapsto \frac{1}{z}$.

The geometric interpretations. Suppose that O denotes the point with the complex coordinate 0.

The first map $z \mapsto z + w$, corresponds to the so-called parallel translation of the Euclidean plane; its geometric meaning should be evident.

The second map is called the rotational homothety with the center at O . That is, the point O maps to itself, and any other point Z maps to a point Z' such that $OZ' = |w| \cdot OZ$ and $\angle ZOZ' = \arg w$.

The third map can be described as a composition of the inversion across the unit circle centered at O and the reflection across \mathbb{R} (the composition can be taken in any order).

Indeed, $\arg z \equiv -\arg \frac{1}{z}$. Therefore,

$$\arg z = \arg(1/\bar{z});$$

that is, if the points Z and Z' have complex coordinates z and $1/\bar{z}$, then $Z' \in [OZ]$. Clearly, $OZ = |z|$ and $OZ' = |1/\bar{z}| = \frac{1}{|z|}$. Therefore, Z' is

the inverse of Z across the unit circle centered at O . Finally, $\frac{1}{z} = \overline{(1/\bar{z})}$ is the complex coordinate of the reflection of Z' across \mathbb{R} .

18.12. Proposition. *A map $f: \hat{\mathbb{C}} \rightarrow \hat{\mathbb{C}}$ is a fractional linear transformation if and only if f can be expressed as a composition of elementary transformations.*

Proof; the “only if” part. Fix a fractional linear transformation

$$f(z) = \frac{a \cdot z + b}{c \cdot z + d}.$$

Assume $c \neq 0$. Then

$$\begin{aligned} f(z) &= \frac{a}{c} - \frac{a \cdot d - b \cdot c}{c \cdot (c \cdot z + d)} = \\ &= \frac{a}{c} - \frac{a \cdot d - b \cdot c}{c^2} \cdot \frac{1}{z + \frac{d}{c}}. \end{aligned}$$

That is,

$$\textcircled{7} \quad f(z) = f_4 \circ f_3 \circ f_2 \circ f_1(z),$$

where f_1, f_2, f_3 , and f_4 are the following elementary transformations:

$$\begin{aligned} f_1(z) &= z + \frac{d}{c}, & f_2(z) &= \frac{1}{z}, \\ f_3(z) &= -\frac{a \cdot d - b \cdot c}{c^2} \cdot z, & f_4(z) &= z + \frac{a}{c}. \end{aligned}$$

If $c = 0$, then

$$f(z) = \frac{a \cdot z + b}{d}.$$

In this case, $f(z) = f_2 \circ f_1(z)$, where

$$f_1(z) = \frac{a}{d} \cdot z, \quad f_2(z) = z + \frac{b}{d}.$$

“If” part. We need to show that by composing elementary transformations, we can only get fractional linear transformations. Note that it is sufficient to check that the composition of a fractional linear transformation

$$f(z) = \frac{a \cdot z + b}{c \cdot z + d}.$$

with any elementary transformation $z \mapsto z + w$, $z \mapsto w \cdot z$, and $z \mapsto \frac{1}{z}$ is a fractional linear transformation.

The latter is done by means of direct calculations.

$$\begin{aligned}\frac{a \cdot (z+w) + b}{c \cdot (z+w) + d} &= \frac{a \cdot z + (b + a \cdot w)}{c \cdot z + (d + c \cdot w)}, \\ \frac{a \cdot (w \cdot z) + b}{c \cdot (w \cdot z) + d} &= \frac{(a \cdot w) \cdot z + b}{(c \cdot w) \cdot z + d}, \\ \frac{a \cdot \frac{1}{z} + b}{c \cdot \frac{1}{z} + d} &= \frac{b \cdot z + a}{d \cdot z + c}.\end{aligned}$$

□

18.13. Corollary. *The fractional linear transformations map circlines to circlines.*

Proof. By Proposition 18.12, it is sufficient to check that each elementary transformation sends a circline to a circline.

For the first and second elementary transformations, the latter is evident.

As noted above, the map $z \mapsto \frac{1}{z}$ is a composition of inversion and reflection. By Theorem 10.11, the inversion sends a circline to a circline. Hence the result. □

18.14. Exercise. *Show that if f is a fractional linear transformation, then so is its inverse f^{-1} .*

18.15. Exercise. *Given distinct values $z_0, z_1, z_\infty \in \hat{\mathbb{C}}$, construct a fractional linear transformation f such that $f(z_0) = 0$, $f(z_1) = 1$, and $f(z_\infty) = \infty$. Show that such a transformation is unique.*

18.16. Exercise. *Show that any inversion is a composition of complex conjugation and a fractional linear transformation.*

Use 14.16 to conclude that any inversive transformation is either a fractional linear transformation or a complex conjugate of a fractional linear transformation.

I Complex cross-ratio

Let u, v, w , and z be four distinct complex numbers. Recall that the complex number

$$\frac{(u-w) \cdot (v-z)}{(v-w) \cdot (u-z)}$$

is called the complex cross-ratio of u, v, w , and z ; it is denoted by $(u, v; w, z)$.

If one of the numbers u, v, w, z is ∞ , then the complex cross-ratio has to be defined by taking the appropriate limit; in other words, we assume that $\frac{\infty}{\infty} = 1$. For example,

$$(u, v; w, \infty) = \frac{(u - w)}{(v - w)}.$$

Assume that U, V, W , and Z are the points with complex coordinates u, v, w , and z respectively. Note that

$$\frac{UW \cdot VZ}{VW \cdot UZ} = |(u, v; w, z)|,$$

$$\angle WUZ + \angle ZVW = \arg \frac{u - w}{u - z} + \arg \frac{v - z}{v - w} \equiv \arg(u, v; w, z).$$

These equations give the following reformulation of Theorem 10.6.

18.17. Theorem. *Let $UWVZ$ and $U'W'V'Z'$ be two quadrangles such that the points U', W', V' , and Z' are inverses of U, W, V , and Z respectively. Assume u, w, v, z, u', w', v' , and z' are the complex coordinates of U, W, V, Z, U', W', V' , and Z' respectively.*

Then

$$(u', v'; w', z') = \overline{(u, v; w, z)}.$$

The following exercise is a generalization of the theorem above. It has a short solution using Proposition 18.12.

18.18. Exercise. *Show that the complex cross-ratio is invariant under fractional linear transformations.*

That is, if a fractional linear transformation maps four distinct complex numbers u, v, w, z to complex numbers u', v', w', z' respectively, then

$$(u', v'; w', z') = (u, v; w, z).$$

J Schwarz–Pick theorem

The following theorem shows that the metric in the conformal disc model naturally appears in other branches of mathematics. We do not give its proof, but it can be found in any textbook on geometric complex analysis.

Let \mathbb{D} be the unit disc in the complex plane centered at 0; that is, a complex number z belongs to \mathbb{D} if and only if $|z| < 1$.

Let us use the disc \mathbb{D} as an h-plane in the conformal disc model; the h-distance between $z, w \in \mathbb{D}$ will be denoted by $d_h(z, w)$; that is,

$$d_h(z, w) := ZW_h,$$

where Z and W are h -points with complex coordinates z and w respectively.

A function $f: \mathbb{D} \rightarrow \mathbb{C}$ is called holomorphic if for every $z \in \mathbb{D}$ there is a complex number s such that

$$f(z + w) = f(z) + s \cdot w + o(|w|).$$

In other words, f is complex-differentiable at any $z \in \mathbb{D}$. The complex number s is called the derivative of f at z (briefly $s = f'(z)$).

18.19. Schwarz–Pick theorem. *Assume $f: \mathbb{D} \rightarrow \mathbb{D}$ is a holomorphic function. Then*

$$d_h(f(z), f(w)) \leq d_h(z, w)$$

for any $z, w \in \mathbb{D}$.

If the equality holds for one pair of distinct numbers $z, w \in \mathbb{D}$, then it holds for any pair. In this case, f is a fractional linear transformation as well as a motion of the h -plane.

18.20. Exercise. *Show that if a fractional linear transformation f appears in the equality case of the Schwarz–Pick theorem, then it can be written as*

$$f(z) = \frac{v \cdot z + \bar{w}}{w \cdot z + \bar{v}}.$$

where v and w are complex constants such that $|v| > |w|$.

Recall that hyperbolic tangent th is defined in Section 12E.

18.21. Exercise. *Show that*

$$\text{th}\left[\frac{1}{2} \cdot d_h(z, w)\right] = \left| \frac{z - w}{1 - z \cdot \bar{w}} \right|.$$

Conclude that the inequality in Schwarz–Pick theorem can be rewritten as

$$\left| \frac{z' - w'}{1 - z' \cdot \bar{w}'} \right| \leq \left| \frac{z - w}{1 - z \cdot \bar{w}} \right|,$$

where $z' = f(z)$ and $w' = f(w)$.

18.22. Exercise. *Show that the Schwarz lemma stated below follows from the Schwarz–Pick theorem.*

18.23. Schwarz lemma. *Let $f: \mathbb{D} \rightarrow \mathbb{D}$ be a holomorphic function and $f(0) = 0$. Then $|f(z)| \leq |z|$ for any $z \in \mathbb{D}$.*

Moreover, if equality holds for some $z \neq 0$, then there is a unit complex number u such that $f(z) = u \cdot z$ for any $z \in \mathbb{D}$.

Chapter 19

Geometric constructions

Geometric constructions were introduced at the end of Chapter 5 and have been used thruout the text. They possess significant pedagogical value as an introduction to mathematical proofs.

In this chapter, we briefly explore the theory behind geometric constructions. Let us also mention the computer game “Euclidea” [10]; it is an addictive way to become an expert in the field.

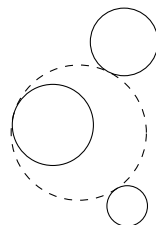
A Classical problems

The solutions to the following two problems are quite nontrivial.

19.1. Problem of Brahmagupta. *Construct an inscribed quadrangle with given sides.*

Several solutions to the following problem are presented in [11].

19.2. Problem of Apollonius. *Construct a circle that is tangent to three given circles.*



B Impossible constructions

Impossible construction problems cannot be solved in principle; that is, the required ruler-and-compass construction does not exist. The following problems have been known for about two thousand years; their impossibility was proved only in the 19th century. The method used in the proofs is indicated in the next section.

Doubling the cube. *Given a cube, construct a side of a cube with twice the volume.*

Given a segment of length a , construct a segment of length $\sqrt[3]{2}\cdot a$.

Squaring the circle. *Construct a square with the same area as a given disc.*

If r is the radius of the given circle, we need to construct a segment of length $\sqrt{\pi}\cdot r$.

Angle trisection. *Divide a given angle into three equal angles.*

Moreover, ruler-and-compass constructions cannot trisect an angle of size $\frac{\pi}{3}$. The existence of such a construction would imply the constructibility of a regular 9-gon which is prohibited by the following famous result:

A regular n -gon inscribed in a circle with center O is a sequence of points $A_1 \dots A_n$ on the circle such that

$$\angle A_n O A_1 = \angle A_1 O A_2 = \dots = \angle A_{n-1} O A_n = \pm \frac{2}{n} \cdot \pi.$$

The points A_1, \dots, A_n are vertices, the segments $[A_1 A_2], \dots, [A_n A_1]$ are sides and the remaining segments $[A_i A_j]$ are diagonals of the n -gon.

The construction of a regular n -gon, therefore, is reduced to the construction of an angle with size $\frac{2}{n} \cdot \pi$.

19.6. Gauss–Wantzel theorem. *A regular n -gon can be constructed with a ruler and a compass if and only if n is the product of a power of 2 and any number of distinct Fermat primes.*

A Fermat prime is a prime number of the form $2^k + 1$ for an integer k . Only five Fermat primes are known today: 3, 5, 17, 257, and 65537. For example,

- ◇ one can construct a regular 340-gon since $340 = 2^2 \cdot 5 \cdot 17$ and 5, as well as 17, are Fermat primes;
- ◇ one cannot construct a regular 7-gon since 7 is not a Fermat prime;
- ◇ one cannot construct a regular 9-gon; altho $9 = 3 \cdot 3$ is a product of two Fermat primes, these primes are not distinct.

C Constructible numbers

Let us give an intuitive definition of ruler-and-compass constructions; a formal definition is subtler than one might think [8].

In classical ruler-and-compass constructions, the initial configuration can be completely described by a finite number of points; each line is defined by two points on it and each circle is described by its center and a point on it.

Similarly, the result of a construction can be described by a finite collection of points.

We may always assume that the initial configuration has at least two points; if not, we could add one or two points to the configuration. Moreover, by scaling the whole plane, we can assume that the first two points in the initial configuration lie at a unit distance from each other.

In this case, we can choose a coordinate system, so that the points $(0, 0)$ and $(1, 0)$ are among the initial points; so the initial configuration of n points is described by $2 \cdot n - 4$ numbers — their coordinates $x_3, y_3, \dots, \dots, x_n, y_n$.

It turns out that the coordinates of any point constructed with a ruler and compass can be written using the numbers $x_3, y_3, \dots, x_n, y_n$ and the four arithmetic operations “+”, “-”, “·”, “/” along with the square root “ $\sqrt{\quad}$ ”.

For example, assume we want to find the points $X_1 = (x_1, y_1)$ and $X_2 = (x_2, y_2)$ of the intersections of a line passing thru $A = (x_A, y_A)$ and $B = (x_B, y_B)$ and the circle with center $O = (x_O, y_O)$ that passes thru the point $W = (x_W, y_W)$. Let us write the equations of the circle and the line in the coordinates (x, y) :

$$\begin{cases} (x - x_O)^2 + (y - y_O)^2 = (x_W - x_O)^2 + (y_W - y_O)^2, \\ (x - x_A) \cdot (y_B - y_A) = (y - y_A) \cdot (x_B - x_A). \end{cases}$$

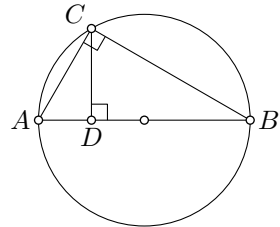
Note that coordinates (x_1, y_1) and (x_2, y_2) of the points X_1 and X_2 are solutions of this system. Expressing y from the second equation and substituting the result in the first one, gives us a quadratic equation in x , which can be solved using “+”, “-”, “·”, “/” and “ $\sqrt{\quad}$ ” only.

The same can be performed for the intersection of two circles. The intersection of two lines is even simpler; it is described as a solution of two linear equations and can be expressed using only four arithmetic operations; the square root “ $\sqrt{\quad}$ ” is not needed.

On the other hand, it is easy to construct segments of lengths $a + b$ and $a - b$ from two given segments of lengths $a > b$.

To perform “·”, “/” and “ $\sqrt{\quad}$ ” consider the following diagram: let $[AB]$ be a diameter of a circle; fix a point C on the circle and let D be the footpoint of C on $[AB]$. By Corollary 9.8, the angle ACB is right. Therefore

$$\triangle ABC \sim \triangle ACD \sim \triangle CBD.$$



It follows that $AD \cdot BD = CD^2$.

Using this diagram, one should guess a solution to the following exercise.

19.7. Exercise. Given two line segments with lengths a and b , provide a ruler-and-compass give construction of segments with lengths $\frac{a^2}{b}$ and $\sqrt{a \cdot b}$.

Taking 1 for a or b above, we can produce \sqrt{a} , a^2 , $\frac{1}{b}$. Combining these constructions we can produce $a \cdot b = (\sqrt{a \cdot b})^2$, $\frac{a}{b} = a \cdot \frac{1}{b}$. In other words, we produced a ruler-and-compass calculator that can do “+”, “−”, “.”, “/”, and the square root “ $\sqrt{\quad}$ ”.

The discussion above sketches a proof of the following theorem:

19.8. Theorem. Suppose $A_1 = (0, 0)$, $A_2 = (1, 0)$, $A_3 = (x_3, y_3), \dots, A_n = (x_n, y_n)$ is an initial configuration of points. A point $X = (x, y)$ can be obtained by a ruler-and-compass construction if and only if both coordinates x and y can be expressed from the integer numbers and $x_3, y_3, x_4, y_4, \dots, x_n, y_n$ using the arithmetic operations “+”, “−”, “.”, “/”, and “ $\sqrt{\quad}$ ”.

The numbers that can be expressed from the given numbers using the arithmetic operations and the square root “ $\sqrt{\quad}$ ” are called constructible; if the list of given numbers is not given, then we can only use the integers.

The theorem above translates any ruler-and-compass construction problem into a purely algebraic language. Let us give some examples.

- ◇ The impossibility of the doubling-cube problem states that $\sqrt[3]{2}$ is not a constructible number. That is, $\sqrt[3]{2}$ cannot be expressed thru integers using “+”, “−”, “.”, “/”, and “ $\sqrt{\quad}$ ”.
- ◇ The impossibility of squaring the circle states that $\sqrt{\pi}$, or equivalently π , is not a constructible number.
- ◇ The impossibility of angle trisection states that $\cos \frac{\alpha}{3}$ is not a constructible number from $\cos \alpha$.
- ◇ The Gauss–Wantzel theorem says for which integers n the number $\cos \frac{2 \cdot \pi}{n}$ is constructible.

Some of these statements might look evident, but rigorous proofs require some knowledge of abstract algebra (namely, the *field theory*) which is out of the scope of this book.


In the next section, we discuss similar but simpler examples of impossible constructions with an unusual tool.

19.9. Exercise.

- (a) Show that a diagonal of a regular pentagon is $\frac{1+\sqrt{5}}{2}$ times larger than its side.
- (b) Based on (a), describe a ruler-and-compass construction of a regular pentagon.

D Set-square constructions

A set-square (or 45° -set-square) is a construction tool shown in the picture — it can produce a line thru a given point that makes the angles $\frac{\pi}{2}$ or $\pm\frac{\pi}{4}$ to a given line, and it can also be used as a ruler.



19.10. Exercise. *Trisect a given segment with the set-square.*

The following theorem is an analog of Theorem 19.8 for set-square constructions.

19.11. Theorem. *Suppose $A_1 = (0, 0)$, $A_2 = (1, 0)$, $A_3 = (x_3, y_3), \dots, A_n = (x_n, y_n)$ is an initial configuration of points. Then a point $X = (x, y)$ can be obtained by a set-square construction if and only if both coordinates x and y can be expressed using only the integer numbers and $x_3, y_3, x_4, y_4, \dots, x_n, y_n$ along with the arithmetic operations “+”, “−”, “.”, and “/” only.*

The proof of this theorem is close to Theorem 19.8. (The “if” part nearly follows from Exercise 14.7. The “only-if” part is proved by induction on the number of elementary constructions; one needs to write an equation for each line in a set-square construction and verify that an intersection point of such lines satisfies the theorem.)

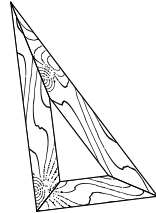
Unlike Theorem 19.8 it can be applied directly to show the impossibility of some constructions with a set-square — no need to use field theory.

Note that if all the coordinates $x_3, y_3, \dots, x_n, y_n$ are rational numbers, then the theorem above implies that with a set-square, one can only construct points with rational coordinates. A point with both rational coordinates is called rational, and if at least one of the coordinates is irrational, then the point is called irrational.

19.12. Exercise. *Show that it is impossible to construct an equilateral triangle with a given base using the set-square.*

19.13. Exercise. *Show that it is impossible to bisect a given angle with the set-square only.*

19.14. Advanced exercise. *Consider another tool — a 30° -set-square that can produce a line thru a given point that makes the angles $\frac{\pi}{2}$, $\pm\frac{\pi}{3}$, $\pm\frac{\pi}{6}$ to a given line and can be used as a ruler.*



Show that it is impossible to construct a square with the 30° -set-square.

E Verifications

Suppose we need to verify that a given configuration is defined by a certain property. Is it possible to do this task by geometric construction with the given tools? We assume that we can *verify* that two constructed points coincide.

Evidently, if a configuration is constructible, then it is verifiable¹ — simply repeat the construction and check if the result is the same. Some nonconstructible configurations are verifiable. For example, it does not pose a problem to verify that the given angle is trisected while it is impossible to trisect a given angle with a ruler and compass. A regular 7-gon provides another example of that type — it is easy to verify, while Gauss–Wantzel theorem states that it is impossible to construct with a ruler and compass.

Since we did not prove the impossibility of angle trisection and the Gauss–Wantzel theorem, the following example might be more satisfactory. It is based on Exercise 19.12 which states that it is impossible to construct an equilateral with a set-square only.

19.15. Exercise. *Describe a set-square construction verifying that*

(a) *a triangle is equilateral.*

(b) *a line bisects an angle.*

This observation leads to a source of impossible constructions in a stronger sense — those that are even not verifiable.

The following example is closely related to Exercise 10.9. Recall that a circumtool produces a circle passing thru any given three points or a line if all three points lie on one line; the invensor — a tool that constructs an inverse of a given point in a given circline.

19.16. Problem. *Show that with a circumtool and invensor, it is impossible to verify that a given point is the center of a given circle Γ . In particular, it is impossible to construct the center with a circumtool only.*

Remark. In geometric constructions, we allow choosing free points, such as any point on the plane, or a point on a constructed line, or a point that does not lie on a constructed line, or a point on a given line that does not lie on a given circle, and so on.

In principle, when you make such a free choice it is possible to make the right construction by accident. Nevertheless, we do not accept such a coincidence as a true construction. The result should not depend on chance.

¹Adopting the terminology of computability theory, we may also say that such a construction is decidable.

Solution. Arguing by contradiction, assume we have a verifying construction.

Apply an inversion across a circle perpendicular to Γ to the whole construction. According to Corollary 10.16, the circle Γ maps to itself. Recall that the inversion sends a circline to a circline (10.7) and respects inversion (10.26). Therefore we get that the whole construction is mapped to an equivalent construction; that is, a construction with a different choice of free points.

According to Exercise 10.8, the inversion sends the center of Γ to another point. However, this construction claims that this new point is the center as well — a contradiction. \square

A similar example of impossible constructions for a ruler and a parallel tool is given in Exercise 14.9.

Let us discuss another example of a ruler-only construction. Note that ruler-only constructions are invariant with respect to the projective transformations. In particular, to solve the following exercise, it is sufficient to construct a projective transformation that fixes two points and moves their midpoint.

19.17. Exercise. *Show that there is no ruler-only construction verifying that a given point is a midpoint of a given segment. In particular, it is impossible to construct the midpoint only with a ruler.*

The following theorem is a stronger version of the exercise above.

19.18. Theorem. *There is no ruler-only construction verifying that a given point is the center of a given circle. In particular, it is impossible to construct the center only with a ruler.*

The proof uses the construction in Exercise 16.9.

Sketch of the proof. The same argument as in the problem above shows that it is sufficient to construct a projective transformation that sends the given circle Γ to a circle Γ' such that the center of Γ' is not the image of the center of Γ .

Choose a circle Γ that lies in the plane Π in the Euclidean space. By Theorem 16.3, the inverse of a circle across a sphere is a circle or a line. Fix a sphere Σ with the center O so that the inversion Γ' of Γ is a circle and the plane Π' containing Γ' is not parallel to Π ; any sphere Σ in a general position will do.

Let Z and Z' denote the centers of Γ and Γ' . Note that $Z' \notin (OZ)$. It follows that the perspective projection $\Pi \rightarrow \Pi'$ with center O sends Γ to Γ' , but Z' is not the image of Z . \square

F Comparison of construction tools

We say that one set of tools is stronger than another if any configuration of points that can be constructed with the second set can also be constructed with the first set. If in addition, there is a configuration constructible with the first set, but not constructible with the second, then we say that the first set is strictly stronger than the second. Otherwise (that is, if any configuration that can be constructed with the first set can be constructed with the second), we say that the sets of tools are equivalent. Two sets of tools might also be incomparable; that is, there are constructions possible with the first set of tools and impossible with the second, and the other way around.

As an example, consider the following classical result:

19.19. Mohr–Mascheroni theorem. *Compass alone is equivalent to ruler and compass.*

Note that the theorem does *not* state that one can construct a whole line with a compass alone! — since we consider only configurations of points we do not have to. One may think that a *line is constructed* if we construct two points on it.

For sure ruler and compass form a stronger set than a compass alone. Therefore the Mohr–Mascheroni theorem will follow once we solve the following two construction problems:

- (i) Given four points X , Y , P , and Q , construct the intersection of the lines (XY) and (PQ) with a compass only.
- (ii) Given two points X , Y , and a circle Γ , construct the intersection of the lines (XY) and Γ with a compass only.

Indeed, once we have these two constructions, we can do every step of a ruler-and-compass construction using a compass alone.

If you wonder how such a theorem can be proved, read about the *Peaucellier–Lipkin invensor*; it is a planar linkage capable of transforming rotary motion into perfect straight-line motion. Another classical theorem that can be proved using this linkage is the so-called Poncelet–Steiner theorem; it states that *the set of ruler and compass is equivalent to the ruler alone, provided that a single circle and its center are given.*

19.20. Exercise. *Compare the following sets of tools: (a) a ruler and compass, (b) a set-square, (c) a ruler and a parallel tool, and (d) a circumtool and an invensor.*

Chapter 20

Area

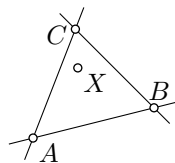
We will define area as a function that satisfies certain conditions (Section 20C). The so-called Lebesgue measure provides an example of such a function. In particular, the existence of the Lebesgue measure implies the existence of an area function. This construction is included in any textbook on real analysis.

Based solely on the existence, we develop the concept of area with no cheating. We choose this approach because any rigorous introduction to area is either tedious or comes with cheating. We do not want to cheat while also respecting your time. Sooner or later, you will need to learn about the Lebesgue measure if you haven't already.

A Solid triangles

We say that a point X lies inside a nondegenerate triangle ABC if the following three conditions hold:

- ◇ A and X lie on the same side of the line (BC) ;
- ◇ B and X lie on the same side of the line (CA) ;
- ◇ C and X lie on the same side of the line (AB) .



The set of all points inside $\triangle ABC$ and on its sides $[AB]$, $[BC]$, $[CA]$ will be called solid triangle ABC and denoted by $\blacktriangle ABC$.

20.1. Exercise. Show that any solid triangle is convex; that is, for any pair of points $X, Y \in \blacktriangle ABC$, the line segment $[XY]$ lies in $\blacktriangle ABC$.

The notations $\triangle ABC$ and $\blacktriangle ABC$ look similar, and they also have closely related but different meanings, which it is better not to confuse. Recall that $\triangle ABC$ is an ordered triple of distinct points (see Section 1J), while $\blacktriangle ABC$ is an infinite set of points.

In particular, $\blacktriangle ABC = \blacktriangle BAC$ for any triangle ABC . Indeed, any point that belongs to the set $\blacktriangle ABC$ also belongs to the set $\blacktriangle BAC$ and the other way around. On the other hand, $\triangle ABC \neq \triangle BAC$ simply because the ordered triple of points (A, B, C) is distinct from the ordered triple (B, A, C) .

Note that $\blacktriangle ABC \cong \blacktriangle BAC$ even if $\triangle ABC \not\cong \triangle BAC$, where congruence of the sets $\blacktriangle ABC$ and $\blacktriangle BAC$ is understood the following way:

20.2. Definition. *Two sets \mathcal{S} and \mathcal{T} in the plane are called congruent (briefly $\mathcal{S} \cong \mathcal{T}$) if $\mathcal{T} = f(\mathcal{S})$ for some motion f of the plane.*

If $\triangle ABC$ is not degenerate and

$$\blacktriangle ABC \cong \blacktriangle A'B'C',$$

then after relabeling the vertices of $\triangle ABC$ we will have

$$\triangle ABC \cong \triangle A'B'C'.$$

Indeed it is sufficient to show that if f is a motion that maps $\blacktriangle ABC$ to $\blacktriangle A'B'C'$, then f maps each vertex of $\triangle ABC$ to a vertex $\triangle A'B'C'$. The latter follows from the characterization of vertices of solid triangles given in the following exercise:


20.3. Exercise. *Let $\triangle ABC$ be nondegenerate and $X \in \blacktriangle ABC$. Show that X is a vertex of $\triangle ABC$ if and only if there is a line ℓ that intersects $\blacktriangle ABC$ at the single point X .*

B Polygonal sets

An elementary set on the plane is a set of one of the following three types:

- ◊ one-point set;
- ◊ segment;
- ◊ solid triangle.

A set in the plane is called polygonal if it can be presented as a union of a finite collection of elementary sets.



Note that according to this definition, the empty set \emptyset is a polygonal set. Indeed, \emptyset is a union of an empty collection of elementary sets.

A polygonal set is called degenerate if it can be presented as a union of a finite collection of one-point sets and segments.

If X and Y lie on opposite sides of the line (AB) , then the polygonal set $\blacktriangle AXB \cup \blacktriangle BYA$ is called solid quadrangle $AXBY$ and denoted by $\blacksquare AXBY$. In particular, we can talk about solid parallelograms, rectangles, and squares.



Typically a polygonal set admits many presentations as a union of a finite collection of elementary sets. For example, if $\square AXBY$ is a parallelogram, then

$$\blacksquare AXBY = \blacktriangle AXB \cup \blacktriangle AYB = \blacktriangle XAY \cup \blacktriangle XBY.$$

20.4. Exercise. Show that a solid square is not degenerate.

20.5. Exercise. Show that a circle is not a polygonal set.


20.6. Claim. For any two polygonal sets \mathcal{P} and \mathcal{Q} , the union $\mathcal{P} \cup \mathcal{Q}$, as well as the intersection $\mathcal{P} \cap \mathcal{Q}$, are also polygonal sets.

A class of sets that is closed with respect to union and intersection is called a ring of sets. The claim above, therefore, states that polygonal sets in the plane form a ring of sets.

Informal proof. Let us present \mathcal{P} and \mathcal{Q} as a union of a finite collection of elementary sets $\mathcal{P}_1, \dots, \mathcal{P}_k$ and $\mathcal{Q}_1, \dots, \mathcal{Q}_n$ respectively.

Note that

$$\mathcal{P} \cup \mathcal{Q} = \mathcal{P}_1 \cup \dots \cup \mathcal{P}_k \cup \mathcal{Q}_1 \cup \dots \cup \mathcal{Q}_n.$$



Therefore, $\mathcal{P} \cup \mathcal{Q}$ is polygonal.

Note that $\mathcal{P} \cap \mathcal{Q}$ is the union of $\mathcal{P}_i \cap \mathcal{Q}_j$ for all i and j . Therefore, to show that $\mathcal{P} \cap \mathcal{Q}$ is polygonal, it is sufficient to show that $\mathcal{P}_i \cap \mathcal{Q}_j$ is polygonal for any i and j .

The diagram suggests a proof of the latter statement for solid triangles \mathcal{P}_i and \mathcal{Q}_j . The other cases are simpler; a formal proof can be built on Exercise 20.1. \square

C Definition of area

Area is defined as a function $\mathcal{P} \mapsto \text{area } \mathcal{P}$ that returns a nonnegative real number $\text{area } \mathcal{P}$ for any polygonal set \mathcal{P} and satisfies the following conditions:

- (a) $\text{area } \mathcal{K}_1 = 1$ where \mathcal{K}_1 is a solid unit square;
- (b) the conditions

$$\begin{aligned} \mathcal{P} \cong \mathcal{Q} &\Rightarrow \text{area } \mathcal{P} = \text{area } \mathcal{Q}; \\ \mathcal{P} \subset \mathcal{Q} &\Rightarrow \text{area } \mathcal{P} \leq \text{area } \mathcal{Q}; \\ \text{area } \mathcal{P} + \text{area } \mathcal{Q} &= \text{area}(\mathcal{P} \cup \mathcal{Q}) + \text{area}(\mathcal{P} \cap \mathcal{Q}) \end{aligned}$$

hold for any two polygonal sets \mathcal{P} and \mathcal{Q} .

The first condition is called normalization; essentially it says that a solid unit square is used as a unit to measure area. The three conditions in (b) are called invariance, monotonicity, and additivity.

The Lebesgue measure is an example of an area function. Namely, if one takes the area of \mathcal{P} to be its Lebesgue measure, then the function $\mathcal{P} \mapsto \text{area } \mathcal{P}$ satisfies the above conditions.

The construction of the Lebesgue measure can be found in any textbook on real analysis. We do not discuss it here.

If the reader is not familiar with the Lebesgue measure, then the existence of area function can be taken as granted; it might be added to axioms altho it follows from the axioms I–V.

D Vanishing area and subdivisions

20.7. Proposition. *For any two points A and B , we have*

$$\text{area}[AB] = 0 \quad \text{and} \quad \text{area}\{A\} = 0.$$

Proof. Fix a line segment $[AB]$. Consider a solid square $\blacksquare ABCD$.

Note that for any positive integer n , there are n disjoint segments $[A_1B_1], \dots, [A_nB_n]$ in $\blacksquare ABCD$, such that each $[A_iB_i]$ is congruent to $[AB]$ in the sense of the Definition 20.2.

Applying the invariance, additivity, and monotonicity of the area function, we get

$$\begin{aligned} n \cdot \text{area}[AB] &= \text{area}([A_1B_1] \cup \dots \cup [A_nB_n]) \leq \\ &\leq \text{area}(\blacksquare ABCD) \end{aligned}$$

In other words,

$$\text{area}[AB] \leq \frac{1}{n} \cdot \text{area}(\blacksquare ABCD)$$

for any positive integer n . It follows that $\text{area}[AB] \leq 0$. Since area cannot be negative, we get

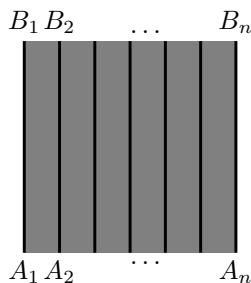
$$\text{area}[AB] = 0.$$

For any one-point set $\{A\}$ we have that $\{A\} \subset [AB]$. Therefore,

$$0 \leq \text{area}\{A\} \leq \text{area}[AB] = 0.$$

Hence $\text{area}\{A\} = 0$. □

20.8. Corollary. *Any degenerate polygonal set has vanishing area.*



Proof. Let \mathcal{P} be a degenerate set, say

$$\mathcal{P} = [A_1B_1] \cup \cdots \cup [A_nB_n] \cup \{C_1, \dots, C_k\}.$$

Since area is nonnegative by definition, applying additivity several times, we get that

$$\begin{aligned} \text{area } \mathcal{P} &\leq \text{area}[A_1B_1] + \cdots + \text{area}[A_nB_n] + \\ &\quad + \text{area}\{C_1\} + \cdots + \text{area}\{C_k\}. \end{aligned}$$

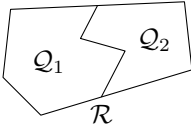
By Proposition 20.7, the right-hand side vanishes.

On the other hand, $\text{area } \mathcal{P} \geq 0$, hence the result. \square

We say that a polygonal set \mathcal{P} is subdivided into two polygonal sets $\mathcal{Q}_1, \dots, \mathcal{Q}_n$ if $\mathcal{P} = \mathcal{Q}_1 \cup \cdots \cup \mathcal{Q}_n$ and the intersection $\mathcal{Q}_i \cap \mathcal{Q}_j$ is degenerate for any pair i and j . (Recall that according to Claim 20.6, the intersections $\mathcal{Q}_i \cap \mathcal{Q}_j$ are polygonal.)

20.9. Proposition. *Assume that a polygonal set \mathcal{P} is subdivided into polygonal sets $\mathcal{Q}_1, \dots, \mathcal{Q}_n$. Then*

$$\text{area } \mathcal{P} = \text{area } \mathcal{Q}_1 + \cdots + \text{area } \mathcal{Q}_n.$$



Proof. Assume $n = 2$; by the additivity of area,

$$\text{area } \mathcal{P} = \text{area } \mathcal{Q}_1 + \text{area } \mathcal{Q}_2 - \text{area}(\mathcal{Q}_1 \cap \mathcal{Q}_2).$$

Since $\mathcal{Q}_1 \cap \mathcal{Q}_2$ is degenerate, by Corollary 20.8,

$$\text{area}(\mathcal{Q}_1 \cap \mathcal{Q}_2) = 0.$$

Applying this formula a few times we get the general case. Indeed, if \mathcal{P} is subdivided into $\mathcal{Q}_1, \dots, \mathcal{Q}_n$, then

$$\begin{aligned} \text{area } \mathcal{P} &= \text{area } \mathcal{Q}_1 + \text{area}(\mathcal{Q}_2 \cup \cdots \cup \mathcal{Q}_n) = \\ &= \text{area } \mathcal{Q}_1 + \text{area } \mathcal{Q}_2 + \text{area}(\mathcal{Q}_3 \cup \cdots \cup \mathcal{Q}_n) = \\ &\quad \vdots \\ &= \text{area } \mathcal{Q}_1 + \text{area } \mathcal{Q}_2 + \cdots + \text{area } \mathcal{Q}_n. \end{aligned} \quad \square$$

Remark. Two polygonal sets \mathcal{P} and \mathcal{P}' are called equidecomposable if they admit subdivisions into polygonal sets $\mathcal{Q}_1, \dots, \mathcal{Q}_n$ and $\mathcal{Q}'_1, \dots, \mathcal{Q}'_n$ such that $\mathcal{Q}_i \cong \mathcal{Q}'_i$ for each i .

According to the proposition, if \mathcal{P} and \mathcal{P}' are equidecomposable, then $\text{area } \mathcal{P} = \text{area } \mathcal{P}'$. A converse to this statement also holds; namely, *if two nondegenerate polygonal sets have equal area, then they are equidecomposable.*

The last statement was proved by William Wallace, Farkas Bolyai, and Paul Gerwien. The analogous statement in three dimensions, known as Hilbert's third problem, is false; it was proved by Max Dehn.

E Rectangles

20.10. Theorem. *The area of a rectangle is the product of its adjacent sides.*

20.11. Algebraic lemma. *Assume that a function s returns a nonnegative real number $s(a, b)$ for any pair of positive real numbers (a, b) and it satisfies the following identities:*

$$\begin{aligned} & s(1, 1) = 1, \\ \textcircled{1} \quad & s(a, b + c) = s(a, b) + s(a, c), \\ & s(a + b, c) = s(a, c) + s(b, c) \end{aligned}$$

for any $a, b, c > 0$. Then

$$s(a, b) = a \cdot b$$

for any $a, b > 0$.

The proof is similar to the proof of Lemma 14.17.

Proof. Note that if $a > a'$ and $b > b'$ then

$$\textcircled{2} \quad s(a, b) \geq s(a', b').$$

Indeed, since s returns nonnegative numbers, we get that

$$\begin{aligned} s(a, b) &= s(a', b) + s(a - a', b) \geq s(a', b) = \\ &= s(a', b') + s(a', b - b') \geq s(a', b'). \end{aligned}$$

Applying the second and third identity in $\textcircled{1}$ a few times we get that

$$\begin{aligned} m \cdot s(a, b) &= s(a, m \cdot b) = \\ &= s(m \cdot a, b) \end{aligned}$$

for any positive integer m . Therefore

$$\begin{aligned} s\left(\frac{k}{l}, \frac{m}{n}\right) &= k \cdot s\left(\frac{1}{l}, \frac{m}{n}\right) = \\ &= k \cdot m \cdot s\left(\frac{1}{l}, \frac{1}{n}\right) = \\ &= k \cdot m \cdot \frac{1}{l} \cdot s\left(1, \frac{1}{n}\right) = \\ &= k \cdot m \cdot \frac{1}{l} \cdot \frac{1}{n} \cdot s(1, 1) = \\ &= \frac{k}{l} \cdot \frac{m}{n} \end{aligned}$$

for any positive integers k, l, m , and n . That is, the needed identity holds for any pair of rational numbers $a = \frac{k}{l}$ and $b = \frac{m}{n}$.

Arguing by contradiction, assume $s(a, b) \neq a \cdot b$ for a pair of positive real numbers (a, b) ; so, $s(a, b) > a \cdot b$ or $s(a, b) < a \cdot b$.

Recall that $\lfloor x \rfloor$ and $\lceil x \rceil$ denote floor and ceiling of x ; that is, $\lfloor x \rfloor$ is the greatest integer such that $\lfloor x \rfloor \leq x$, and $\lceil x \rceil$ is the least integer such that $\lceil x \rceil \geq x$.

If $s(a, b) > a \cdot b$, we can choose a positive integer n such that

$$\textcircled{3} \quad s(a, b) > (a + \frac{1}{n}) \cdot (b + \frac{1}{n}).$$

Set $k = \lfloor a \cdot n \rfloor + 1$ and $m = \lfloor b \cdot n \rfloor + 1$; equivalently, k and m are positive integers such that

$$\begin{aligned} a &< \frac{k}{n} \leq a + \frac{1}{n}, \\ b &< \frac{m}{n} \leq b + \frac{1}{n}. \end{aligned}$$

By $\textcircled{2}$, we get that

$$\begin{aligned} s(a, b) &\leq s(\frac{k}{n}, \frac{m}{n}) = \\ &= \frac{k}{n} \cdot \frac{m}{n} \leq \\ &\leq (a + \frac{1}{n}) \cdot (b + \frac{1}{n}), \end{aligned}$$

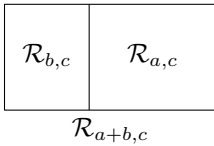
which contradicts $\textcircled{3}$.

Proof of Theorem 20.10. Suppose that $\mathcal{R}_{a,b}$ denotes the solid rectangle with sides a and b . Let

$$s(a, b) = \text{area } \mathcal{R}_{a,b}.$$

By the definition of area, $s(1, 1) = \text{area}(\mathcal{K}) = 1$. That is, the first identity in the algebraic lemma holds.

Note that the rectangle $\mathcal{R}_{a+b,c}$ can be subdivided into two rectangles $\mathcal{R}_{a,c}$ and $\mathcal{R}_{b,c}$. By Proposition 20.9,



$$\text{area } \mathcal{R}_{a+b,c} = \text{area } \mathcal{R}_{a,c} + \text{area } \mathcal{R}_{b,c}.$$

That is, the second identity in the algebraic lemma holds. The proof of the third identity is similar.

It remains to apply the algebraic lemma. □

If $s(a, b) < a \cdot b$, choose a positive integer n such that $a > \frac{1}{n}$, $b > \frac{1}{n}$, and

$$\textcircled{4} \quad s(a, b) < (a - \frac{1}{n}) \cdot (b - \frac{1}{n}).$$

Set $k = \lceil a \cdot n \rceil - 1$ and $m = \lceil b \cdot n \rceil - 1$; that is,

$$\begin{aligned} a &> \frac{k}{n} \geq a - \frac{1}{n}, \\ b &> \frac{m}{n} \geq b - \frac{1}{n}. \end{aligned}$$

By $\textcircled{2}$, we get that

$$\begin{aligned} s(a, b) &\geq s(\frac{k}{n}, \frac{m}{n}) = \\ &= \frac{k}{n} \cdot \frac{m}{n} \geq \\ &\geq (a - \frac{1}{n}) \cdot (b - \frac{1}{n}), \end{aligned}$$

which contradicts $\textcircled{4}$. □

F Parallelograms

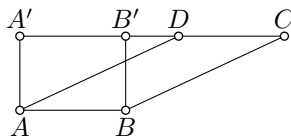
20.12. Proposition. *Let $\square ABCD$ be a parallelogram in the Euclidean plane. Then*

$$\text{area}(\blacksquare ABCD) = a \cdot h,$$

where $a = AB$, and h is the distance between the lines (AB) and (CD) .

Proof. Let A' and B' denote the footpoints of A and B on the line (CD) .

Note that $ABB'A'$ is a rectangle with sides a and h . By Proposition 20.10,



$$\textcircled{5} \quad \text{area}(\blacksquare ABB'A') = h \cdot a.$$

Without loss of generality, we may assume that $\blacksquare ABCA'$ contains $\blacksquare ABCD$ and $\blacksquare ABB'A'$. In this case, $\blacksquare ABCA'$ admits two subdivisions:

$$\blacksquare ABCA' = \blacksquare ABCD \cup \triangle AA'D = \blacksquare ABB'A' \cup \triangle BB'C.$$

By Proposition 20.9,

$$\textcircled{6} \quad \begin{aligned} \text{area}(\blacksquare ABCD) + \text{area}(\triangle AA'D) &= \\ &= \text{area}(\blacksquare ABB'A') + \text{area}(\triangle BB'C). \end{aligned}$$

Note that

$$\textcircled{7} \quad \triangle AA'D \cong \triangle BB'C.$$

Indeed, since the quadrangles $ABB'A'$ and $ABCD$ are parallelograms, by Lemma 7.17, we have that $AA' = BB'$, $AD = BC$, and $DC = AB = A'B'$. It follows that $A'D = B'C$. Applying the SSS congruence condition, we get $\textcircled{7}$.

In particular,

$$\textcircled{8} \quad \text{area}(\triangle BB'C) = \text{area}(\triangle AA'D).$$

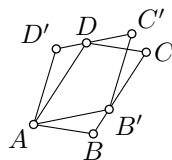
Subtracting $\textcircled{8}$ from $\textcircled{6}$, we get that

$$\text{area}(\blacksquare ABCD) = \text{area}(\blacksquare ABB'A').$$

It remains to apply $\textcircled{5}$. □

20.13. Exercise. Assume $\square ABCD$ and $\square AB'C'D'$ are two parallelograms such that $B' \in [BC]$ and $D \in [C'D']$. Show that

$$\text{area}(\blacksquare ABCD) = \text{area}(\blacksquare AB'C'D').$$



G Triangles

20.14. Theorem. Let h_A be the altitude from A in $\triangle ABC$ and $a = BC$. Then

$$\text{area}(\triangle ABC) = \frac{1}{2} \cdot a \cdot h_A.$$

Proof. Draw the line m thru A that is parallel to (BC) and line n thru C parallel to (AB) . Note that the lines m and n are not parallel; denote by D their point of intersection. By construction, $\square ABCD$ is a parallelogram.

Note that $\square ABCD$ admits a subdivision into $\triangle ABC$ and $\triangle CDA$. Therefore,

$$\text{area}(\square ABCD) = \text{area}(\triangle ABC) + \text{area}(\triangle CDA).$$

Since $\square ABCD$ is a parallelogram, Lemma 7.17 implies that

$$AB = CD \quad \text{and} \quad BC = DA.$$

Therefore, by the SSS congruence condition, we have $\triangle ABC \cong \triangle CDA$. In particular

$$\text{area}(\triangle ABC) = \text{area}(\triangle CDA).$$

From above and Proposition 20.12, we get that

$$\begin{aligned} \text{area}(\triangle ABC) &= \frac{1}{2} \cdot \text{area}(\square ABCD) = \\ &= \frac{1}{2} \cdot h_A \cdot a. \end{aligned} \quad \square$$

20.15. Exercise. Let h_A , h_B , and h_C denote the altitudes of $\triangle ABC$ from vertices A , B , and C respectively. Note that from Theorem 20.14, it follows that

$$h_A \cdot BC = h_B \cdot CA = h_C \cdot AB.$$

Give a proof of this statement without using Theorem 20.14.

20.16. Exercise. Assume M lies inside the parallelogram $ABCD$; that is, M belongs to the solid parallelogram $\square ABCD$ but does not lie on its sides. Show that

$$\text{area}(\triangle ABM) + \text{area}(\triangle CDM) = \frac{1}{2} \cdot \text{area}(\square ABCD).$$

20.17. Exercise. Assume that diagonals of a nondegenerate quadrangle $ABCD$ intersect at point M . Show that

$$\text{area}(\triangle ABM) \cdot \text{area}(\triangle CDM) = \text{area}(\triangle BCM) \cdot \text{area}(\triangle DAM).$$

20.18. Exercise. Let r be the inradius of $\triangle ABC$ and p be its semiperimeter; that is, $p = \frac{1}{2} \cdot (AB + BC + CA)$. Show that

$$\text{area}(\blacktriangle ABC) = p \cdot r.$$

20.19. Exercise. Show that any polygonal set admits a subdivision into a finite collection of solid triangles and a degenerate set. Conclude that for any polygonal set, its area is uniquely defined.

H Area method

In this section, we give examples of proofs using the properties of the area function. These proofs are not truly elementary — the price for the existence of the area function is high.

We start with the proof of the Pythagorean theorem. In the Elements of Euclid, the Pythagorean theorem was formulated as equality ⑨ below, and the proof used a similar technique.

Proof. We need to show that

$$a^2 + b^2 = c^2,$$

where a and b are legs and c is the hypotenuse of a right triangle.

Let \mathcal{K}_x be the solid square with side x . Denote by \mathcal{T} the right solid triangle with legs a and b .

Let us construct two subdivisions of \mathcal{K}_{a+b} :

1. Subdivide \mathcal{K}_{a+b} into two solid squares congruent to \mathcal{K}_a and \mathcal{K}_b and four solid triangles congruent to \mathcal{T} ; see the first diagram.
2. Subdivide \mathcal{K}_{a+b} into one solid square congruent to \mathcal{K}_c and four solid right triangles congruent to \mathcal{T} ; see the second diagram.

Applying Proposition 20.9 a few times, we get that

$$\begin{aligned} \text{area } \mathcal{K}_{a+b} &= \text{area } \mathcal{K}_a + \text{area } \mathcal{K}_b + 4 \cdot \text{area } \mathcal{T} = \\ &= \text{area } \mathcal{K}_c + 4 \cdot \text{area } \mathcal{T}. \end{aligned}$$

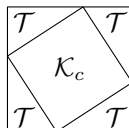
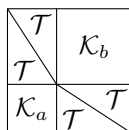
Therefore,

$$\textcircled{9} \quad \text{area } \mathcal{K}_a + \text{area } \mathcal{K}_b = \text{area } \mathcal{K}_c.$$

By Theorem 20.10, we know that

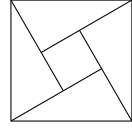
$$\text{area } \mathcal{K}_x = x^2,$$

for any $x > 0$. Hence the statement follows. □



20.20. Exercise. Build another proof of the Pythagorean theorem based on the diagram.

(In the notations above it shows a subdivision of \mathcal{K}_c into \mathcal{K}_{a-b} and four copies of \mathcal{T} if $a > b$.)



20.21. Exercise. Show that the sum of distances from a point to the sides of an equilateral triangle is the same for all points inside the triangle.

20.22. Claim. Assume that two triangles ABC and $A'B'C'$ in the Euclidean plane have equal altitudes dropped from A and A' respectively. Then

$$\frac{\text{area}(\triangle A'B'C')}{\text{area}(\triangle ABC)} = \frac{B'C'}{BC}.$$

In particular, the same identity holds if $A = A'$ and the bases $[BC]$ and $[B'C']$ lie on one line.

Proof. Let h be the altitude. By Theorem 20.14,

$$\frac{\text{area}(\triangle A'B'C')}{\text{area}(\triangle ABC)} = \frac{\frac{1}{2} \cdot h \cdot B'C'}{\frac{1}{2} \cdot h \cdot BC} = \frac{B'C'}{BC}. \quad \square$$

Now let us show how to use this claim to prove Lemma 8.9. First, let us recall its statement:

Lemma. If $\triangle ABC$ is nondegenerate and its angle bisector at A intersects $[BC]$ at point D , then

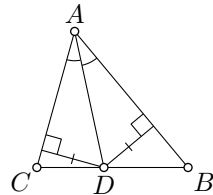
$$\frac{AB}{AC} = \frac{DB}{DC}.$$

Proof. Applying Claim 20.22, we get that

$$\frac{\text{area}(\triangle ABD)}{\text{area}(\triangle ACD)} = \frac{BD}{CD}.$$

By Proposition 8.13 the triangles ABD and ACD have equal altitudes from D . Applying Claim 20.22 again, we get that

$$\frac{\text{area}(\triangle ABD)}{\text{area}(\triangle ACD)} = \frac{AB}{AC}.$$

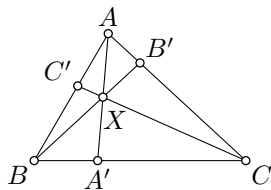


Hence the result follows. □

The second statement in the following exercise is a partial case of Ceva's theorem; see 14.20.

20.24. Exercise. *Let ABC be a nondegenerate triangle. Assume A' lies between B and C , point B' lies between C and A , point C' lies between A and B . Suppose that line segments $[AA']$, $[BB']$, and $[CC']$ meet at a point X . Show that*

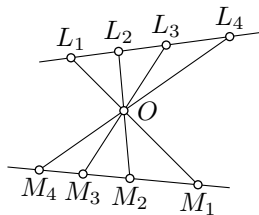
$$\begin{aligned} \frac{\text{area}(\blacktriangle ABX)}{\text{area}(\blacktriangle BCX)} &= \frac{AB'}{B'C}, \\ \frac{\text{area}(\blacktriangle BCX)}{\text{area}(\blacktriangle CAX)} &= \frac{BC'}{C'A}, \\ \frac{\text{area}(\blacktriangle CAX)}{\text{area}(\blacktriangle ABX)} &= \frac{CA'}{A'B}. \end{aligned}$$



Conclude that

$$\frac{AB' \cdot CA' \cdot BC'}{B'C \cdot A'B \cdot C'A} = 1.$$

20.25. Exercise. *Suppose that points L_1, L_2, L_3, L_4 lie on a line ℓ and points M_1, M_2, M_3, M_4 lie on a line m . Assume that the lines $(L_1M_1), (L_2M_2), (L_3M_3),$ and (L_4M_4) pass thru point O that does not lie on ℓ nor m .*



(a) *Apply Claim 20.22 to show that*

$$\frac{\text{area} \blacktriangle OL_iL_j}{\text{area} \blacktriangle OM_iM_j} = \frac{OL_i \cdot OL_j}{OM_i \cdot OM_j}$$

for any $i \neq j$.

(b) *Use (a) to prove that*

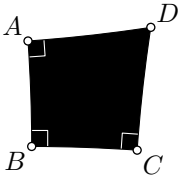
$$\frac{L_1L_2 \cdot L_3L_4}{L_2L_3 \cdot L_4L_1} = \frac{M_1M_2 \cdot M_3M_4}{M_2M_3 \cdot M_4M_1},$$

that is, the quadruples (L_1, L_2, L_3, L_4) and (M_1, M_2, M_3, M_4) have the same cross-ratio.

I Neutral planes and spheres

Area can be defined in the neutral planes and spheres. In this definition, the solid unit square \mathcal{K}_1 has to be exchanged for a fixed nondegenerate polygonal set \mathcal{U} . Such a change is necessary for a good reason — hyperbolic plane and sphere have no squares.

In this case, the set \mathcal{U} serves as the unit measure for area; changing \mathcal{U} would require a conversion of area units.



According to the standard convention, the set \mathcal{U} is chosen so that on small scales the area behaves like in the Euclidean plane. For example, if \mathcal{K}_a denotes the solid quadrangle $\blacksquare ABCD$ with right angles at A , B , and C such that $AB = BC = a$, then we may assume that

$$\frac{1}{a^2} \cdot \text{area } \mathcal{K}_a \rightarrow 1 \quad \text{as } a \rightarrow 0.$$

This convention works equally well for spheres and neutral planes, including the Euclidean plane. In spherical geometry equivalently we may assume that if r is the radius of the sphere, then the area of the whole sphere is $4 \cdot \pi \cdot r^2$.

Recall that the defect of triangle $\triangle ABC$ is defined as

$$\text{defect}(\triangle ABC) := \pi - |\angle ABC| - |\angle BCA| - |\angle CAB|.$$

It turns out that for any neutral plane or sphere, there is a real number k such that

$$\textcircled{10} \quad k \cdot \text{area}(\blacktriangle ABC) + \text{defect}(\triangle ABC) = 0$$

for any $\triangle ABC$.

This number k is called curvature; $k = 0$ for the Euclidean plane, $k = -1$ for the h-plane, $k = 1$ for the unit sphere, and $k = \frac{1}{r^2}$ for the sphere of radius r .

Since the angles of an ideal triangle vanish, any ideal triangle in the h-plane has area π . Similarly, in the unit sphere, the area of an equilateral triangle with right angles has an area of $\frac{\pi}{2}$; since the whole sphere can be subdivided into eight such triangles, we get that the area of the unit sphere is $4 \cdot \pi$.

The identity $\textcircled{10}$ can be used as an alternative way to introduce the area function; it works on spheres and all neutral planes, except for the Euclidean plane.

J Quadrable sets

A set \mathcal{S} in the plane is called quadrable if, for any $\varepsilon > 0$, there are two polygonal sets \mathcal{P} and \mathcal{Q} such that

$$\mathcal{P} \subset \mathcal{S} \subset \mathcal{Q} \quad \text{and} \quad \text{area } \mathcal{Q} - \text{area } \mathcal{P} < \varepsilon.$$

If \mathcal{S} is quadrable, its area can be defined as the necessarily unique real number $s = \text{area } \mathcal{S}$ such that the inequality

$$\text{area } \mathcal{Q} \leq s \leq \text{area } \mathcal{P}$$

holds for any polygonal sets \mathcal{P} and \mathcal{Q} such that $\mathcal{P} \subset \mathcal{S} \subset \mathcal{Q}$.

20.26. Exercise. *Let \mathcal{D} be a unit disc; that is, \mathcal{D} is a set that contains the unit circle Γ and all the points inside Γ .*

Show that \mathcal{D} is a quadrable set.

Since \mathcal{D} is quadrable, the expression $\text{area } \mathcal{D}$ makes sense and the constant π can be defined as $\pi := \text{area } \mathcal{D}$.

It turns out that the class of quadrable sets is the largest class for which the area function satisfying the conditions in Section 20C is *uniquely* defined.

If you do not require uniqueness, then there are ways to extend the area function to all bounded sets. (A set in the plane is called bounded if it lies inside a circle.) On the sphere and hyperbolic plane, there is no similar construction. If you wonder why, read about the doubling the ball — a paradox of Felix Hausdorff, Stefan Banach, and Alfred Tarski.

Hints

1.2. Check the triangle inequality for $A = 0$, $B = 1$, and $C = 2$.

1.3. Check all the conditions in 1.1. Let us discuss the triangle inequality – the remaining conditions are self-evident.

Let $A = (x_A, y_A)$, $B = (x_B, y_B)$, and $C = (x_C, y_C)$. Set

$$\begin{aligned}x_1 &= x_B - x_A, & y_1 &= y_B - y_A, \\x_2 &= x_C - x_B, & y_2 &= y_C - y_B.\end{aligned}$$

(a). The inequality

$$d_1(A, C) \leq d_1(A, B) + d_1(B, C)$$

can be written as

$$|x_1 + x_2| + |y_1 + y_2| \leq |x_1| + |y_1| + |x_2| + |y_2|.$$

The latter follows since $|x_1 + x_2| \leq |x_1| + |x_2|$ and $|y_1 + y_2| \leq |y_1| + |y_2|$.

(b). The inequality

$$\bullet \quad d_2(A, C) \leq d_2(A, B) + d_2(B, C)$$

can be written as

$$\begin{aligned}\sqrt{(x_1 + x_2)^2 + (y_1 + y_2)^2} &\leq \\ &\leq \sqrt{x_1^2 + y_1^2} + \sqrt{x_2^2 + y_2^2}.\end{aligned}$$

Take the square of the left and the right-hand sides, simplify, take the square again, and simplify again. You should get the following inequality:

$$0 \leq (x_1 \cdot y_2 - x_2 \cdot y_1)^2,$$

which is equivalent to \bullet and evidently true.

(c). The inequality

$$d_\infty(A, C) \leq d_\infty(A, B) + d_\infty(B, C)$$

can be written as

$$\begin{aligned}\bullet \quad \max\{|x_1 + x_2|, |y_1 + y_2|\} &\leq \\ &\leq \max\{|x_1|, |y_1|\} + \max\{|x_2|, |y_2|\}.\end{aligned}$$

Without loss of generality, we may assume that

$$\max\{|x_1 + x_2|, |y_1 + y_2|\} = |x_1 + x_2|.$$

Furthermore,

$$\begin{aligned}|x_1 + x_2| &\leq |x_1| + |x_2| \leq \\ &\leq \max\{|x_1|, |y_1|\} + \max\{|x_2|, |y_2|\}.\end{aligned}$$

Hence \bullet follows.

1.4. Sum up four triangle inequalities.

1.5. If $A \neq B$, then $d_{\mathcal{X}}(A, B) > 0$. Since f is distance-preserving,

$$d_{\mathcal{Y}}(f(A), f(B)) = d_{\mathcal{X}}(A, B).$$

Therefore, $d_{\mathcal{Y}}(f(A), f(B)) > 0$; hence $f(A) \neq f(B)$.

1.6. Set $f(0) = a$ and $f(1) = b$. Show that $b = a + 1$ or $a - 1$. Moreover, $f(x) = a \pm x$, and at the same time, $f(x) = b \pm (x - 1)$ for any x .

Suppose $b = a + 1$. Show that $f(x) = a + x$ for any x .

In the same way, if $b = a - 1$, show that $f(x) = a - x$ for any x .

1.7. Show that the map $(x, y) \mapsto (x + y, x - y)$ is an isometry $(\mathbb{R}^2, d_1) \rightarrow (\mathbb{R}^2, d_\infty)$. You need to check if this map is bijective and distance-preserving.

1.8. First prove that *two points* $A = (x_A, y_A)$ and $B = (x_B, y_B)$ on the Manhattan plane have a *unique midpoint* if and only if $x_A = x_B$ or $y_A = y_B$; compare with the example in 1J.

Use the above statement to prove that any motion of the Manhattan plane can be written in one of the following eight ways:

$$(x, y) \mapsto (\pm x + a, \pm y + b)$$

or

$$(x, y) \mapsto (\pm y + b, \pm x + a),$$

for fixed real numbers a and b . In each case, we have 4 choices of signs, so for a fixed pair (a, b) we have 8 distinct motions.

1.10. Assume three points A , B , and C lie on one line. Note that in this case one of three triangle inequalities involving the points A , B , and C becomes an equality.

Set $A = (-1, 1)$, $B = (0, 0)$, and $C = (1, 1)$. Show that for d_1 and d_2 all the triangle inequalities with the points A , B , and C are strict. It follows that the graph is not a line.

For d_∞ show that $(x, |x|) \mapsto x$ is an isometry from the graph to \mathbb{R} . Conclude that the graph is a line in (\mathbb{R}^2, d_∞) .

1.11. Spell the definitions of line and motion.

1.12. Fix an isometry $f: (PQ) \rightarrow \mathbb{R}$ such that $f(P) = 0$ and $f(Q) = q > 0$.

Assume that $f(X) = x$. By the definition of a half-line $X \in [PQ]$ if and only if $x \geq 0$. Show that the latter holds if and only if $|x - q| = ||x| - |q||$. Hence (a) follows.

To prove (b), observe that $X \in [PQ]$ if and only if $0 \leq x \leq q$. Show that the latter holds if and only if $|x - q| + |x| = |q|$.

1.13. The equation $2 \cdot \alpha \equiv 0$ means that $2 \cdot \alpha = 2 \cdot k \cdot \pi$ for an integer k . Therefore, $\alpha = k \cdot \pi$.

Equivalently, $\alpha = 2 \cdot n \cdot \pi$ or $\alpha = (2 \cdot n + 1) \cdot \pi$ for an integer n . In these cases, we have $\alpha \equiv 0$ or $\alpha \equiv \pi$ respectively.

1.14. (a). By the triangle inequality, $|f(A') - f(A)| \leq d(A', A)$. Therefore, we can take $\delta = \varepsilon$.

(b). By the triangle inequality,

$$\begin{aligned} |g(A', B') - g(A, B)| &\leq \\ &\leq |g(A', B') - g(A, B')| + \\ &\quad + |g(A, B') - g(A, B)| \leq \\ &\leq d(A', A) + d(B', B). \end{aligned}$$

Therefore, we can take $\delta = \frac{\varepsilon}{2}$.

1.15. Fix $A \in \mathcal{X}$ and $B \in \mathcal{Y}$ such that $f(A) = B$.

Fix $\varepsilon > 0$. Since g is continuous at B , there is a positive value δ_1 such that

$$d_{\mathcal{Z}}(g(B'), g(B)) < \varepsilon \quad \text{if} \quad d_{\mathcal{Y}}(B', B) < \delta_1.$$

Since f is continuous at A , there is $\delta_2 > 0$ such that

$$d_{\mathcal{Y}}(f(A'), f(A)) < \delta_1 \quad \text{if} \quad d_{\mathcal{X}}(A', A) < \delta_2.$$

Since $f(A) = B$, we get that

$$d_{\mathcal{Z}}(h(A'), h(A)) < \varepsilon \quad \text{if} \quad d_{\mathcal{X}}(A', A) < \delta_2.$$

Hence the result.

1.17. (a). Show that $A \mapsto B$, $B \mapsto A$, $C \mapsto C$, $D \mapsto D$ defines a motion of the space; conclude that $\triangle ABC \cong \triangle BAC$.

(b). Suppose $\triangle ABC \cong \triangle BCA$; so, there is a motion m that maps $A \mapsto B$, $B \mapsto C$, and $C \mapsto A$. Show that $m: D \mapsto D$; arrive at a contradiction.

2.1. By Axiom I, there are at least two points in the plane. Therefore, by Axiom II, the plane contains a line. To prove (a), it remains to note that a line is an infinite set of points. To prove (b) apply Axiom III in addition.

2.3. By Axiom II, $(OA) = (OA')$. Therefore, the statement boils down to the following:

Assume $f: \mathbb{R} \rightarrow \mathbb{R}$ is a motion of the line that sends $0 \mapsto 0$ and one positive number to a positive number, then f is an identity map.

The latter follows from 1.6.

2.6. By 2.5, $\angle AOA = 0$. It remains to apply Axiom IIIa.

2.10. Apply 2.5, 2.8, and 1.13.

2.11. By Axiom IIIb, $2 \cdot \angle BOC \equiv 2 \cdot \angle AOC - 2 \cdot \angle AOB \equiv 0$. By 1.13, this implies that $\angle BOC$ is either 0 or π . It remains to apply 2.6 and 2.8 respectively in these two cases.

2.12. Fix two points A and B as provided by Axiom I.

Choose a real number $0 < \alpha < \pi$. By Axiom IIIa there is a point C such that $\angle ABC = \alpha$.

Use 2.2 to show that $\triangle ABC$ is nondegenerate.

2.14. Applying 2.13, we get that $\angle AOC = \angle BOD$. It remains to apply Axiom IV.

3.1. Set $\alpha = \angle AOB$ and $\beta = \angle BOA$. Note that $\alpha = \pi$ if and only if $\beta = \pi$. Otherwise, $\alpha = -\beta$. Hence the result.

3.3. Set $\alpha = \angle ABC$, $\beta = \angle A'B'C'$. Since $2 \cdot \alpha \equiv 2 \cdot \beta$, 1.13 implies that $\alpha \equiv \beta$ or $\alpha \equiv \beta + \pi$. In the latter case, the angles have opposite signs which is impossible.

Since $\alpha, \beta \in (-\pi, \pi]$, the equality $\alpha \equiv \beta$ implies $\alpha = \beta$.

3.11. Note that O and A' lie on the same side of (AB) . Similarly, O and B' lie on the same side of (AB) . Hence the result.

3.13. Apply 3.7 for $\triangle PQX$ and $\triangle PQY$ and then apply 3.10a.

3.14. We can assume that $A' \neq B, C$ and $B' \neq A, C$; otherwise, the statement trivially holds.

Note that (BB') does not intersect $[A'C]$. Applying Pasch's theorem (3.12) for $\triangle AA'C$ and (BB') , we get that (BB') intersects $[AA']$; denote the point of intersection by M .

The same way, we get that (AA') intersects $[BB']$; that is, M lies on $[AA']$ and $[BB']$.

3.15. Assume that Z is the point of intersection.

Note that $Z \neq P$ and $Z \neq Q$. Therefore, $Z \notin (PQ)$.

Show that Z and X lie on one side of (PQ) . Repeat the argument to show that Z and Y lie on one side of (PQ) . It follows that X and Y lie on the same side of (PQ) — a contradiction.

3.20. The “only-if” part follows from the triangle inequality. To prove the “if” part, observe that 3.17 implies the existence of a triangle with sides r_1 , r_2 , and d . Use this triangle to show that there is a point X such that $O_1X = r_1$ and $O_2X = r_2$, where O_1 and O_2 are the centers of the corresponding circles.

4.3. Apply 4.2 twice.

4.6. Consider the points D and D' such that M is the midpoint of $[CD]$ and M' is the midpoint of $[C'D']$. Show that $\triangle BCD \cong \triangle B'C'D'$ and use it to prove that $\triangle A'B'C' \cong \triangle ABC$.

4.7. (a) Apply SAS.

(b) Use (a) and apply SSS.

4.8. Without loss of generality, we may assume that X is distinct from A, B , and C . Set $f(X) = X'$; assume $X' \neq X$.

Note that $AX = AX'$, $BX = BX'$, and $CX = CX'$. By SSS we get that $\angle ABX = \pm \angle ABX'$. Since $X \neq X'$, we get that

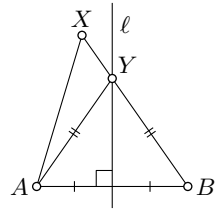
$\angle ABX \equiv -\angle ABX'$. In the same way, we get that $\angle CBX \equiv -\angle CBX'$. Subtracting these two identities from each other, we get that $\angle ABC \equiv -\angle ABC$. Conclude that $\angle ABC = 0$ or π . That is, $\triangle ABC$ is degenerate — a contradiction.

5.1. By Axiom IIIb and 2.8, we have $\angle XO A - \angle XO B \equiv \pi$. Since $|\angle XO A|, |\angle XO B| \leq \pi$, we get that $|\angle XO A| + |\angle XO B| = \pi$. Hence the statement follows.

5.3. Assume X and A lie on the same side of ℓ .

Note that A and B lie on opposite sides of ℓ . Therefore, by 3.10, $[AX]$ does not intersect ℓ and $[BX]$ intersects ℓ ; suppose that Y denotes the intersection point.

By the triangle inequality, $BX = AY + YX \geq AX$. Since $X \notin \ell$, by 5.2 we have $AX \neq BX$. Therefore $BX > AX$.



This way we have proved the “if” part. To prove the “only if” part, you need to switch A and B and repeat the above argument.

5.4. Apply 5.3 and 4.2.

5.7. Note that $\angle XBA = \angle ABP$, $\angle PBC = \angle CBY$. Therefore,

$$\begin{aligned} \angle XBY &\equiv \angle XBP + \angle PBY \equiv \\ &\equiv 2 \cdot (\angle ABP + \angle PBC) \equiv \\ &\equiv 2 \cdot \angle ABC. \end{aligned}$$

5.9. Choose an arbitrary nondegenerate triangle ABC . Suppose that $\triangle \hat{A}\hat{B}\hat{C}$ denotes its image after the motion.

If $A \neq \hat{A}$, apply the reflection across the perpendicular bisector of $[A\hat{A}]$. This reflection sends A to \hat{A} . Let B' and C' denote the reflections of B and C respectively.

If $B' \neq \hat{B}$, apply the reflection across the perpendicular bisector of $[B'\hat{B}]$. This reflection sends B' to \hat{B} . Note that $\hat{A}\hat{B} = \hat{A}B'$; that is, \hat{A} lies on the perpendicular bisector. Therefore, \hat{A} reflects to itself. Suppose that C'' denotes the reflection of C' .

Finally, if $C'' \neq \hat{C}$, apply the reflection across $(\hat{A}\hat{B})$. Note that $\hat{A}\hat{C} = \hat{A}C''$ and $\hat{B}\hat{C} = \hat{B}C''$; that is, (AB) is the perpendicular bisector of $[C''\hat{C}]$. Therefore, this reflection sends C'' to \hat{C} .

Apply 4.8 to show that the composition of the constructed reflections coincides with the given motion.

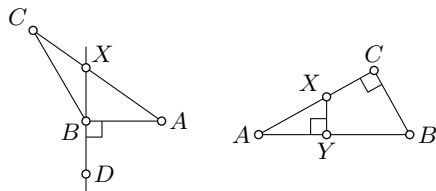
By 5.8, any reflection is an indirect motion. Show that a composition of an even (odd) number of reflections is direct (respectively, indirect). The last statement follows since any motion is a composition of reflections.

5.11. If $\angle ABC$ is right, the statement follows from 5.10. Therefore, we can assume that $\angle ABC$ is obtuse.

Draw a line (BD) perpendicular to (BA) . Since $\angle ABC$ is obtuse, the angles DBA and DBC have opposite signs.

By 3.10, A and C lie on opposite sides of (BD) . In particular, $[AC]$ intersects (BD) at a point; denote it by X .

Note that $AX < AC$ and by 5.10, $AB \leq AX$.



5.12. Let Y be the footpoint of X on (AB) . Apply 5.10 to show that $XY < AX \leq AC < AB$.

5.13. Let O be the center of the circle. Note that we can assume that $O \neq P$.

Assume P lies between X and Y . By 5.1, we can assume that $\angle OPX$ is right or obtuse. By 5.11, $OP < OX$; that is, P lies inside Γ .

If P does not lie between X and Y , we can assume that X lies between P and Y . Since $OX = OY$, 5.11 implies that $\angle OXY$ is acute. Therefore, $\angle OXP$ is obtuse. Applying 5.11 again we get that $OP > OX$; that is, P lies outside Γ .

5.14. Apply 5.2.

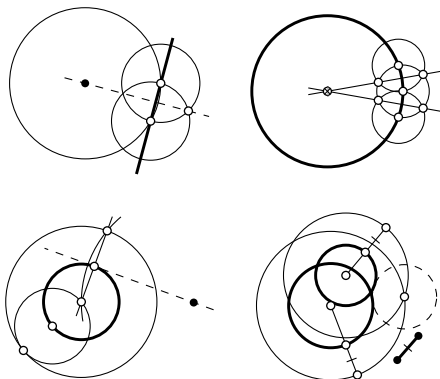
5.16. Use 5.14 and 5.5.

5.18. Assume that Q is another point on both circles. Show and use that Q is the reflection of P across (OO') .

5.19. Apply 5.18.

5.20. Let A and B be the points of intersection. Note that the centers lie on the perpendicular bisector of the segment $[AB]$.

5.22–5.25. The given data is marked in bold.



6.3. By the AA similarity condition, the transformation multiplies the sides of any nondegenerate triangle by the same number; we need to show that this number does not depend on the triangle.

Note that for any two nondegenerate triangles that share one side, this number is the same. Apply this observation to a chain of triangles.

6.5. Apply that $\triangle ADC \sim \triangle CDB$.

6.6. Apply the Pythagorean theorem (6.4) and the SSS congruence condition.

6.7. By the AA similarity condition (6.2), $\triangle AYC \sim \triangle BXC$. Conclude that $\frac{YC}{AC} = \frac{XC}{BC}$. Apply the SAS similarity condition to show that $\triangle ABC \sim \triangle YXC$.

Similarly, apply AA and the equality of vertical angles to prove that $\triangle AZX \sim \triangle BZY$ and use SAS to show that $\triangle ABZ \sim \triangle YXZ$.

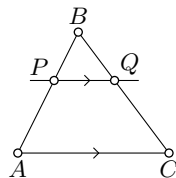
6.8. Show and use that $\triangle ABC \sim \triangle CBD$.

6.9. Show and use that $\triangle AQM \sim \triangle ABC \sim \triangle PBM$.

7.4. Apply 7.1 to show that $k \parallel m$. By 7.3, $k \parallel n \Rightarrow m \parallel n$. The latter contradicts that $m \perp n$.

7.5. Repeat the construction in 5.22 twice.

7.10. Since $\ell \parallel (AC)$, it cannot cross $[AC]$. By Pasch's theorem (3.12), ℓ has to cross another side of $\triangle ABC$. Therefore ℓ



crosses $[BC]$; denote the point of intersection by Q .

Use the transversal property (7.9) to show that $\angle BAC = \angle BPQ$. The same argument shows that $\angle ACB = \angle PQB$; it remains to apply the AA similarity condition.

7.11. Assume we need to trisect segment $[AB]$. Construct a line $\ell \neq (AB)$ with four points A, C_1, C_2, C_3 such that C_1 and C_2 trisect $[AC_3]$. Draw the line (BC_3) and draw parallel lines thru C_1 and C_2 . The points of intersections of these two lines with (AB) trisect the segment $[AB]$.

7.13. If $\triangle ABC$ is degenerate, then one of the angle measures is π , and the other two are 0. Hence the result.

Assume $\triangle ABC$ is nondegenerate. Set $\alpha = \angle CAB$, $\beta = \angle ABC$, and $\gamma = \angle BCA$.

By 3.7, we may assume that $0 < \alpha, \beta, \gamma < \pi$. Therefore,

① $0 < \alpha + \beta + \gamma < 3 \cdot \pi$.

By 7.12,

② $\alpha + \beta + \gamma \equiv \pi$.

From ① and ② the result follows.

7.14. Apply 4.2 twice and 7.13 twice.

7.15. Apply 4.2 twice and 7.12 once.

7.16. Apply 7.12 to $\triangle ABC$ and $\triangle BDA$.

7.18. Denote by M the center of symmetry of $\square ABCD$; it exists by 7.17. Let P' be the reflection of P across M . Show and use that $a = (AP')$, $b = (BP')$, $c = (CP')$, and $d = (DP')$.

7.19. Since $\triangle ABC$ is isosceles, $\angle CAB = \angle BCA$.

By SSS, $\triangle ABC \cong \triangle CDA$. Therefore, $\pm \angle DCA = \angle BCA = \angle CAB$.

Since $D \neq C$, we get “-” in the last formula. Use the transversal property (7.9) to show that $(AB) \parallel (CD)$. Repeat the argument to show that $(AD) \parallel (BC)$.

7.20. By 7.17 and SSS, $AC = BD$ if and only if $\angle ABC = \pm \angle BCD$. By the transversal property (7.9), $\angle ABC + \angle BCD \equiv \pi$.

Therefore, $AC = BD$ if and only if $\angle ABC = \angle BCD = \pm \frac{\pi}{2}$.

7.21. Fix a parallelogram $ABCD$. By 7.17, its diagonals $[AC]$ and $[BD]$ have a common midpoint; denote it by M .

Use SSS and 7.17 to show the following:
 $AB = CD \iff \triangle AMB \cong \triangle AMD \iff \iff \angle AMB = \pm \frac{\pi}{2}$.

7.22. (a). Use the uniqueness of the parallel line (7.2).

(b) Use 7.17 and the Pythagorean theorem (6.4).

7.23. Set $A = (0, 0)$, $B = (c, 0)$, and $C = (x, y)$. Clearly, $AB = c$, $AC^2 = x^2 + y^2$ and $BC^2 = (c - x)^2 + y^2$.

It remains to show that there is a pair of real numbers (x, y) that satisfy the following system of equations:

$$\begin{cases} b^2 = x^2 + y^2 \\ a^2 = (c - x)^2 + y^2 \end{cases}$$

if $0 < a \leq b \leq c \leq a + c$.

7.24. Note that $MA = MB$ if and only if

$$(x - x_A)^2 + (y - y_A)^2 = (x - x_B)^2 + (y - y_B)^2,$$

where $M = (x, y)$. To prove the first part, simplify this equation. For the remaining parts use that any line is a perpendicular bisector of some line segment.

7.25. Rewrite it the following way and think

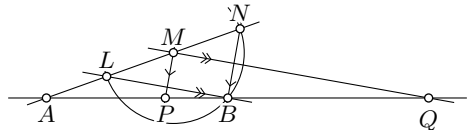
$$\left(x + \frac{a}{2}\right)^2 + \left(y + \frac{b}{2}\right)^2 = \left(\frac{a}{2}\right)^2 + \left(\frac{b}{2}\right)^2 - c.$$

7.26. We can choose the coordinates so that $B = (0, 0)$ and $A = (a, 0)$ for some $a > 0$. If $M = (x, y)$, then the equation $AM = k \cdot BM$ can be written in coordinates as

$$k^2 \cdot (x^2 + y^2) = (x - a)^2 + y^2.$$

It remains to rewrite this equation as in 7.25.

7.27. Assume $M \notin (AB)$. Show and use that the points P and Q constructed on the following diagram lie on the Apollonian circle.



8.2. Apply 8.1 and 5.2.

8.4. Note that $(AC) \perp (BH)$ and $(BC) \perp (AH)$ and apply 8.3.

(Note that each of A, B, C, H is the orthocenter of the remaining three; such a quadruple of points A, B, C, H is called an orthocentric system.)

8.6. Use the idea from the proof of 8.5 to show that $(XY) \parallel (AC) \parallel (VW)$ and $(XW) \parallel (BD) \parallel (YV)$.

8.7. Let (BX) and (BY) be the internal and external bisectors of $\angle ABC$. Then

$$\begin{aligned} 2 \cdot \angle XBY &\equiv 2 \cdot \angle XBA + 2 \cdot \angle ABY \equiv \\ &\equiv \angle CBA + \pi + 2 \cdot \angle ABC \equiv \\ &\equiv \pi + \angle CBC = \pi \end{aligned}$$

and hence the result.

8.8. Apply ASA to the two triangles that the bisector cuts from the original triangle.

8.10. If E is the point of intersection of (BC) with the external bisector of $\angle BAC$, then $\frac{AB}{AC} = \frac{EB}{EC}$. It can be proved along the same lines as 8.9.

8.11. Apply 8.9. See also the solution of 11.2.

8.12. Apply 4.2, 7.9, and 7.17.

8.15. Let I be the incenter. By SAS, we get that $\triangle AIZ \cong \triangle AIY$. Therefore, $AY = AZ$. In the same way, we get that $BX = BZ$ and $CX = CY$. Hence the result.

8.16. Let $\triangle ABC$ be the given acute triangle and $\triangle A'B'C'$ be its orthic triangle. Note that $\triangle AA'C' \sim \triangle BB'C'$. Use it to show that $\triangle A'B'C' \sim \triangle ABC$.

In the same way, we get that $\triangle AB'C' \sim \triangle ABC$. It follows that $\angle A'B'C' = \angle AB'C'$. Conclude that (BB') bisects $\angle A'B'C'$.

If $\triangle ABC$ is obtuse, then its orthocenter coincides with one of the excenters of $\triangle ABC$; that is, the point of intersection of two external and one internal bisectors of $\triangle ABC$.

8.17. Apply 8.9 twice. Use the obtained identity to show that the angle bisector at C passes thru I .

9.3. (a). Apply 9.2 for $\angle XX'Y$ and $\angle X'YY'$ and 7.12 for $\triangle PYX'$.

(b) If P is inside of Γ , then P lies between X and X' and between Y and Y' . In this case, $\angle XPY$ is vertical to $\angle X'PY'$.

If P is outside of Γ then $[PX] = [PX']$ and $[PY] = [PY']$. In both cases we have that $\angle XPY = \angle X'PY'$.

Applying 9.2 and 2.11, we get

$$\begin{aligned} 2 \cdot \angle Y'X'P &\equiv 2 \cdot \angle Y'X'Y \equiv \\ &\equiv 2 \cdot \angle Y'YX \equiv 2 \cdot \angle PYX. \end{aligned}$$

According to 3.7, $\angle Y'X'P$ and $\angle PYX$ have the same sign; therefore $\angle Y'X'P = \angle PYX$. It remains to apply the AA similarity condition.

(c) Apply (b) assuming $[YY']$ is the diameter of Γ .

9.4. Apply 9.3b thrice.

9.5. Let X and Y be the footpoints of the altitudes from A and B . Suppose that O denotes the circumcenter.

By AA, $\triangle AXC \sim \triangle BYC$. Thus

$$\begin{aligned} \angle A'OC &\equiv 2 \cdot \angle A'AC \equiv \\ &\equiv -2 \cdot \angle B'BC \equiv \\ &\equiv -\angle B'OC. \end{aligned}$$

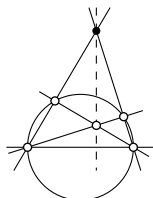
By SAS, $\triangle A'OC \cong \triangle B'OC$. Therefore, $A'C = B'C$.

9.6. Apply the transversal property (7.9) and the theorem on inscribed angles (9.2).

9.9. Construct the circles Γ and Γ' on the diameters $[AB]$ and $[A'B']$ respectively. By 9.8, any point Z at the intersection $\Gamma \cap \Gamma'$ will do.

9.10. Note that $\angle AA'B = \pm \frac{\pi}{2}$ and $\angle AB'B = \pm \frac{\pi}{2}$. Then apply 9.13 to $\square AA'B'B'$.

If O is the center of the circle, then $\angle AOB \equiv 2 \cdot \angle AA'B \equiv \pi$. That is, O is the midpoint of $[AB]$.



9.11. Guess the construction from the diagram. To prove it, apply 8.3 and 9.8.

9.12. Let O be the center of Γ . Use 9.8 to show that the points lie on the circle with diameter $[PO]$.

9.14. Apply 9.13 twice for $\square ABYX$ and $\square ABY'X'$ and use the transversal property (7.9).

9.15. Construct $\triangle AXC$ such that $AC = b$, $AX = p - b$, and $\angle AXC = \frac{1}{2} \cdot \beta$. Note that point B at the intersection of AX and the perpendicular bisector of $[CX]$ solves the problem.

9.17. One needs to show that the lines $(A'B')$ and (XP) are not parallel; otherwise, the first line in the proof does not make sense.

In addition, we implicitly used the following identities:

$$\begin{aligned} 2 \cdot \angle AXP &\equiv 2 \cdot \angle AXY, \\ 2 \cdot \angle ABP &\equiv 2 \cdot \angle ABB', \\ 2 \cdot \angle AA'B' &\equiv 2 \cdot \angle AA'Y. \end{aligned}$$

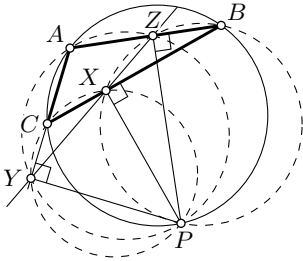
9.18. By 9.8, the points $L, M,$ and N lie on the circle Γ with diameter $[OX]$. It remains to apply 9.2 for the circle Γ and two inscribed angles with a common vertex at O .

9.19. Let $X, Y,$ and Z denote the footpoints of P on $(BC), (CA),$ and (AB) respectively.

Show that $\square AZPY, \square BXPZ, \square CYPX,$ and $\square ABCP$ are inscribed. Use this to show that

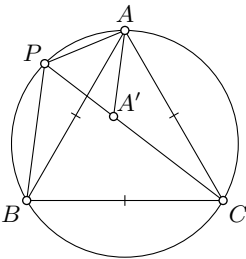
$$2 \cdot \angle CXY \equiv 2 \cdot \angle CPY, \quad 2 \cdot \angle BXZ \equiv 2 \cdot \angle BPZ, \\ 2 \cdot \angle YAZ \equiv 2 \cdot \angle YPZ, \quad 2 \cdot \angle CAB \equiv 2 \cdot \angle CPB.$$

Conclude that $2 \cdot \angle CXY \equiv 2 \cdot \angle BXZ$ and hence $X, Y,$ and Z lie on one line.



9.22. Show that P lies on the arc opposite from ACB ; conclude that $\angle APC = \angle CPB = \pm \frac{\pi}{3}$.

Choose a point $A' \in [PC]$ such that $PA' = PA$. Note that $\triangle APA'$ is equilateral. Prove and use that $\triangle AA'C \cong \triangle APB$.



9.25. If $C \in (AX)$, then the arc is the line segment $[AC]$ or the union of two half-lines in (AX) with vertices at A and C .

Assume $C \notin (AX)$. Let ℓ be the perpendicular line dropped from A to (AX) and m be the perpendicular bisector of $[AC]$.

Note that $\ell \parallel m$; set $O = \ell \cap m$. Note that the circle with center O passing thru A is also passing thru C and tangent to (AX) .

Note that one of the two arcs with endpoints A and C is tangent to $[AX]$.

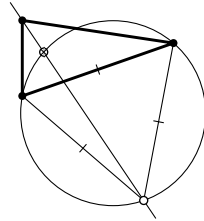
The uniqueness follows from 9.24.

9.26. Use 9.24 and 7.12 to show that $\angle XAY = \angle ACY$. By Axiom IIIc, $\angle ACY \rightarrow 0$ as $AY \rightarrow 0$; hence the result.

9.27. Apply 9.24 twice.

(Alternatively, apply 5.8 for the reflection across the perpendicular bisector of $[AC]$.)

9.21. Guess a construction from the diagram. To show that it produces the needed point, apply 9.2.



10.1. By 5.17, $\angle OTP'$ is right. Therefore, $\triangle OPT \sim \triangle OTP'$ and in particular $OP \cdot OP' = OT^2$, and hence the result.

10.3. Suppose that O denotes the center of Γ . Assume that $X, Y \in \Gamma$; in particular, $OX = OY$.

Note that the inversion sends X and Y to themselves. By 10.2,

$$\triangle OPX \sim \triangle OXP' \quad \text{and} \quad \triangle OPY \sim \triangle OYP'.$$

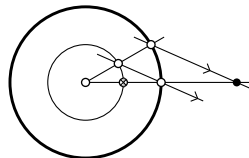
Therefore, $\frac{PX}{P'X} = \frac{OP}{OX} = \frac{OP}{OY} = \frac{PY}{P'Y}$ and hence the result.

10.4. By 10.2,

$$\begin{aligned} \angle IA'B' &\equiv -\angle IBA, & \angle IB'A' &\equiv -\angle IAB, \\ \angle IB'C' &\equiv -\angle ICB, & \angle IC'B' &\equiv -\angle IBC, \\ \angle IC'A' &\equiv -\angle IAC, & \angle IA'C' &\equiv -\angle ICA. \end{aligned}$$

It remains to apply the theorem on the sum of angles of triangle (7.12) to show that $(A'I) \perp (B'C')$, $(B'I) \perp (C'A')$ and $(C'I) \perp (B'A')$.

10.5. Guess the construction from the diagram.



10.8. Assume $r > 0$, $x \neq 0$, and $y \neq 0$. Show that

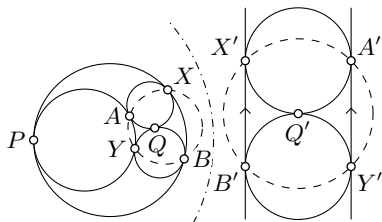
$$\frac{r^2}{(x+y)/2} = \left(\frac{r^2}{x} + \frac{r^2}{y}\right)/2 \iff x = y.$$

Suppose ℓ denotes the line passing thru Q , Q' , and the center of the inversion O . Choose an isometry $\ell \rightarrow \mathbb{R}$ that sends O to 0; assume $x, y \in \mathbb{R}$ are the values of ℓ for the two points of intersection $\ell \cap \Gamma$; note that $x \neq y$. Assume r is the radius of the circle of inversion. Then the left-hand side above is the coordinate of Q' and the right-hand side is the coordinate of the center of Γ' .

10.9. A solution is given in 19E.

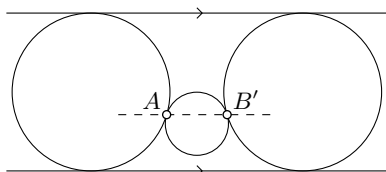
10.10. Apply an inversion across a circle with the center at the only point of intersection of the circles; then use 10.11.

10.13. Label the points of tangency as on the diagram. Apply an inversion with the center at P . Observe that the two circles that tangent are at P become parallel lines and the remaining two circles are tangent to each other and these two parallel lines.



Note that the points of tangency A' , B' , X' , and Y' with the parallel lines are vertices of a square; in particular, they lie on one circle. These points are images of A , B , X , and Y under the inversion. By 10.7, the points A , B , X , and Y also lie on one circline.

10.14. Apply the inversion across a circle with center A . Point A will go to infinity; the two circles tangent at A will become parallel lines while the two parallel lines will become circles tangent at A .



It remains to show that the dashed line (AB') on the diagram is parallel to the other two lines.

10.19. Apply 10.6b, 7.16, and 9.2.

10.20. Suppose that $T \in \Omega_1 \cap \Omega_2$. Let P be the footpoint of T on (O_1O_2) . Show that $\triangle O_1PT \sim \triangle O_1TO_2 \sim \triangle TPO_2$. Conclude that P coincides with the inverses of O_1 across Ω_2 and of O_2 across Ω_1 .

10.21. Since $\Gamma \perp \Omega_1$ and $\Gamma \perp \Omega_2$, Corollary 10.16 implies that the circles Ω_1 and Ω_2 are inverted in Γ to themselves. Conclude that A and B are inverses of each other.

Since $\Omega_3 \ni A, B$, Corollary 10.17 implies that $\Omega_3 \perp \Gamma$.

10.22. Let P_1 and P_2 be the inverses of P across Ω_1 and Ω_2 . Apply 10.17 and 10.15 to show that a circline Γ passing thru P , P_1 , and P_2 is a solution.

10.23. All circles perpendicular to Ω_1 and Ω_2 pass thru a fixed point P . Try to construct P .

If two of the circles intersect, try to apply 10.26.

11.2. Suppose D is the midpoint of $[BC]$. Assume that (AD) is the angle bisector at A .

Let $A' \in [AD]$ be the point distinct from A such that $AD = A'D$. Note that $\triangle CAD \cong \triangle BA'D$. In particular, $\angle BAA' = \angle AA'B$. Apply 4.2 to $\triangle ABA'$.

11.3. The statement is evident if A , B , C , and D lie on one line.

In the remaining case, suppose that O denotes the circumcenter. Apply 4.2 to $\triangle AOB$, $\triangle BOC$, $\triangle COD$, and $\triangle DOA$.

(Note that in the Euclidean plane the statement follows from 9.13 and 7.16, but these statements cannot be used in the neutral plane.)

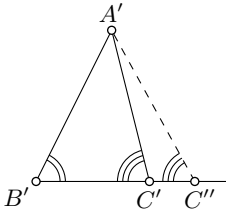
11.5. Arguing by contradiction, assume $2 \cdot (\angle ABC + \angle BCD) \equiv 0$, but $(AB) \nparallel (CD)$. Let $Z = (AB) \cap (CD)$.

Note that $2 \cdot \angle ABC \equiv 2 \cdot \angle ZBC$, and $2 \cdot \angle BCD \equiv 2 \cdot \angle BCZ$.

Apply 11.4 to $\triangle ZBC$ and try to reach a contradiction.

11.6. Choose $C'' \in [B'C']$ such that $B'C'' = BC$.

Use SAS to show that $\triangle ABC \cong \triangle A'B'C''$. Conclude that $\angle B'C'A' = \angle B'C''A'$.

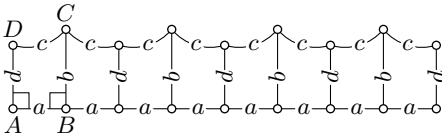


Therefore, it is sufficient to show that $C'' = C'$. If $C' \neq C''$ apply 11.4 to $\triangle A'C'C''$ and try to reach a contradiction.

11.7. Use 5.4 and 11.4.
(Alternatively, follow the solution of 5.13.)

11.10. Set $a = AB$, $b = BC$, $c = CD$, and $d = DA$; we need to show that $c \geq a$.

Mimic the proof of 11.9 for the shown fence made from copies of quadrangle $ABCD$. You should get that $a \leq c + \frac{d}{n}$ for any integer $n \geq 1$, and this implies the needed inequality.



Alternative way. By 5.10, we can assume that $\angle BCD$ is right. Use 11.9 to show that $|\angle CBD| \geq |\angle ADB|$. Use 11.8 and the construction in the neutral proof of 11.1 to show that $2 \cdot c \geq 2 \cdot a$.

11.11. Note that $|\angle ADC| + |\angle CDB| = \pi$. Then apply the definition of the defect.

11.12. Show that $\triangle AMX \cong \triangle BMC$. Apply 11.11 to $\triangle ABC$ and $\triangle AXC$.

11.13. Show that B and D lie on opposite sides of (AC) . Conclude that

$$\text{defect}(\triangle ABC) + \text{defect}(\triangle CDA) = 0.$$

Apply 11.9 to show that

$$\text{defect}(\triangle ABC) = \text{defect}(\triangle CDA) = 0.$$

Use it to show that $\angle CAB = \angle ACD$ and $\angle ACB = \angle CAD$. By ASA, $\triangle ABC \cong \triangle CDA$, and, in particular, $AB = CD$.

(Alternatively, you can apply 11.10.)

12.1. Consider the ideal points A and B be the ideal points of the h-line ℓ . Note that the center of the Euclidean circle containing ℓ lies at the

intersection of the lines tangent to the absolute at the ideal points of ℓ .

12.2. Assume A is an ideal point of the h-line ℓ and $P \in \ell$. Suppose that P' denotes the inverse of P across the absolute. By 10.16, ℓ lies in the intersection of the h-plane and the (necessarily unique) circline passing thru P , A , and P' .

12.3. Let Ω and O denote the absolute and its center.

Let Γ be the circline containing $[PQ]_h$. Note that $[PQ]_h = [PQ]$ if and only if Γ is a line.

Suppose that P' denotes the inverse of P across Ω . Note that O , P , and P' lie on one line.

By the definition of an h-line, $\Omega \perp \Gamma$. By 10.16, Γ passes thru P and P' . Therefore, Γ is a line if and only if it passes thru O .

12.4. Assume that the absolute is a unit circle. Set $a = OX = OY$. Note that $0 < a < \frac{1}{2}$,

$OX_h = \ln \frac{1+a}{1-a}$, and $XY_h = \ln \frac{(1+2 \cdot a) \cdot (1-a)}{(1-2 \cdot a) \cdot (1+a)}$. Verify that the inequalities

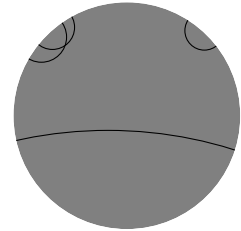
$$1 < \frac{1+a}{1-a} < \frac{(1+2 \cdot a) \cdot (1-a)}{(1-2 \cdot a) \cdot (1+a)}$$

hold when $0 < a < \frac{1}{2}$.

12.5. Spell the meaning of the terms “perpendicular” and “h-line” and then apply 10.22.

12.11. Choose the vertices P , Q , and R on a Euclidean circle that intersects the absolute and is not orthogonal to it. Apply 12.10.

12.21. Look at the diagram and think.



12.23. Use 12.8.

12.25. By 10.26 and 10.6, the right-hand sides of the identities remain unchanged under an inversion across a circle perpendicular to the absolute.

As usual, we assume that the absolute is a unit circle. Let O be the h-midpoint of $[PQ]_h$. By the main observation (12.7) we can assume that O is the center of the absolute. In this case, O is also the Euclidean midpoint of $[PQ]$.

Set $a = OP = OQ$; in this case, we have

$$\begin{aligned} PQ &= 2 \cdot a, & PP' &= QQ' = \frac{1}{a} - a, \\ P'Q' &= 2 \cdot \frac{1}{a}, & PQ' &= QP' = \frac{1}{a} + a. \end{aligned}$$

and

$$PQ_h = \ln \frac{(1+a)^2}{(1-a)^2} = 2 \cdot \ln \frac{1+a}{1-a}.$$

Therefore

$$\begin{aligned} \operatorname{ch}[\tfrac{1}{2} \cdot PQ_h] &= \tfrac{1}{2} \cdot \left(\frac{1+a}{1-a} + \frac{1-a}{1+a} \right) = \\ &= \frac{1+a^2}{1-a^2}; \end{aligned}$$

$$\begin{aligned} \sqrt{\frac{PQ' \cdot P'Q}{PP' \cdot QQ'}} &= \frac{\frac{1}{a} + a}{\frac{1}{a} - a} = \\ &= \frac{1+a^2}{1-a^2}. \end{aligned}$$

Hence part (a) follows. Similarly,

$$\begin{aligned} \operatorname{sh}[\tfrac{1}{2} \cdot PQ_h] &= \tfrac{1}{2} \cdot \left(\frac{1+a}{1-a} - \frac{1-a}{1+a} \right) = \\ &= \frac{2 \cdot a}{1-a^2}; \\ \sqrt{\frac{PQ \cdot P'Q'}{PP' \cdot QQ'}} &= \frac{2}{\frac{1}{a} - a} = \\ &= \frac{2 \cdot a}{1-a^2}. \end{aligned}$$

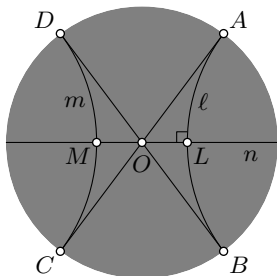
Hence part (b) follows.

Parts (c) and (d) follow from (a), (b), the definition of a hyperbolic tangent, and the double-argument identity for hyperbolic cosine, see 12.24.

(We could also move Q to the center of absolute. In this case, the derivations are simpler. But since $Q'Q = Q'P = Q'P' = \infty$, one has to justify that $\frac{\infty}{\infty} = 1$ every time.)

13.1. Use 7.1 to show that $(AB)_h \parallel (CD)_h$. Apply the definition of the angle of parallelism.

13.2; “only-if” part. Suppose ℓ and m are ultra-parallel; that is, they do not intersect and have distinct ideal points.



Denote the ideal points by $A, B, C,$ and D ; we may assume that they appear on the absolute in the same order. In this case, the h-line with ideal points A and C intersects the h-line

with ideal points B and D . Let O be their point of intersection. By 12.7, we can assume that O is the center of absolute. Note that ℓ is the reflection of m across O in the Euclidean sense.

Drop an h-perpendicular n from O to ℓ and show that $n \perp m$.

“If” part. Suppose n is a common perpendicular. Let L and M be its points of intersection with ℓ and m respectively.

Let O be the center of the absolute. By 12.7, we can assume that O is the h-midpoint of L and M . Notice that in this case ℓ is the reflection of m across O in the Euclidean sense. It follows that the ideal points of the h-lines ℓ and m are symmetric to each other. Therefore, if one pair of them coincides, then the other pair does too. By 12.1, $\ell = m$, which contradicts the assumption $\ell \neq m$.

13.4. Show that the angle of parallelism at C with respect to $(AB)_h$ is less than $\frac{\pi}{4}$, and apply 13.3. You can use approximations such as $\sqrt{2} \approx 1.414$ and $e \approx 2.718$.

13.5. By the triangle inequality, the h-distance from B to $(AC)_h$ is at least 50. By 13.3, $|\angle_h ABC| < 2 \cdot \varphi$, where φ is the angle of parallelism at the distance 50. Show that $\cos \varphi = \frac{e^{100}-1}{e^{100}+1}$ and use it to estimate φ . You may use that $\cos \varphi \leq 1 - \frac{1}{10} \cdot \varphi^2$ for $|\varphi| < \frac{\pi}{2}$ and $e^3 > 10$.

13.7. Note that the angle of parallelism at B with respect to $(CD)_h$ is greater than $\frac{\pi}{4}$, and it approaches to $\frac{\pi}{4}$ as $CD_h \rightarrow \infty$.

Applying 13.3, we get that

$$BC_h < \frac{1}{2} \cdot \ln \frac{1 + \frac{1}{\sqrt{2}}}{1 - \frac{1}{\sqrt{2}}} = \ln \left(1 + \sqrt{2} \right).$$

The right-hand side is the limit of BC_h as $CD_h \rightarrow \infty$. Therefore, $\ln \left(1 + \sqrt{2} \right)$ is the optimal upper bound.

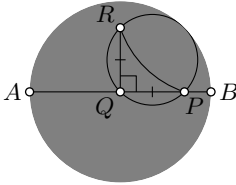
13.8. Let P' be another h-point. Denote by R and R' the h-footpoint of P and P' on m .

Show and use that P' is an h-reflection of P across $Q \in m$ if and only if P and P' lie on the opposite sides of m , $PR_h = P'R'_h$, and Q is the h-midpoint of $[RR']_h$. You may need 2.13, SAS, and SAA (see 11.6).

13.9. As usual, we assume that the absolute is a unit circle.

Consider a hyperbolic triangle PQR with a right angle at Q , where $PQ_h = QR_h$ and the vertices $P, Q,$ and R lie on a horocycle.

We may assume that Q is the center of the absolute. In this case, $\angle_h PQR = \angle PQR = \pm \frac{\pi}{2}$ and $PQ = QR$.



Note that the Euclidean circle passing thru P , Q , and R is tangent to the absolute. Conclude that $PQ = \frac{1}{\sqrt{2}}$. Apply 12.8 to find PQ_h .

13.12. Apply the AAA-congruence condition (13.11).

13.15. Apply 13.14. Use that the function $r \mapsto e^{-r}$ is decreasing and $e > 2$.

13.17. Apply the hyperbolic Pythagorean theorem and the definition of a hyperbolic cosine. The following observations should help:

- ◊ The function $x \mapsto e^x$ is an increasing positive function.
- ◊ By the triangle inequality, we have $-c \leq a - b$ and $-c \leq b - a$.

14.1. Assume the distinct lines ℓ and m are mapped to intersecting lines ℓ' and m' . Suppose P' denotes their point of intersection.

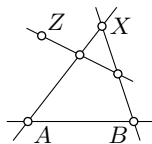
Let P be the inverse image of P' . By the definition of an affine map, P must lie on both ℓ and m . Make a conclusion.

14.3. In each case, check that the map is a bijection and apply 7.24.

14.4. Choose a line (AB) .

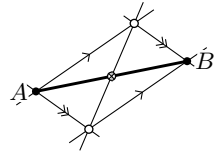
Assume $X' \in (A'B')$ for some $X \notin (AB)$. Since $P \mapsto P'$ maps collinear points to collinear, the three lines (AB) , (AX) , and (BX) are mapped to $(A'B')$. Furthermore, any line connecting a pair of points on these three lines is also mapped to $(A'B')$. Use it to show that the entire plane is mapped to $(A'B')$. The latter contradicts that the map is a bijection.

By the assumption, if $X \in (AB)$, then $X' \in (A'B')$. From above, if $X \notin (AB)$, then $X' \notin (A'B')$. Use it to prove the second statement.



14.5. Observe that α maps noncollinear triples of points to noncollinear ones. Therefore, α^{-1} maps collinear triples to collinear ones. It remains to apply 14.4.

14.6. It is sufficient to construct the midpoint of $[AB]$ with a ruler and a parallel tool. Guess the construction from the diagram.



14.7. Let O, E, A , and B be the points with coordinates $(0, 0)$, $(1, 0)$, $(a, 0)$, and $(b, 0)$ respectively.

To construct a point W with coordinates $(a + b, 0)$ (or $(a - b, 0)$) try to construct two parallelograms $OAPQ$ and $BWPQ$ (or $WBPQ$).

To construct Z with coordinates $(a \cdot b, 0)$ choose a line $(OE') \neq (OE)$ and try to construct points $A' \in (OE')$ and $Z \in (OE)$ so that $\triangle OEE' \sim \triangle OAA'$ and $\triangle OE'B \sim \triangle OA'Z$. Likewise, construct the point $(\frac{a}{b}, 0)$.

14.8. Draw two parallel chords $[XX']$ and $[YY']$. Set $Z = (XY) \cap (X'Y')$ and $Z' = (XY') \cap (X'Y)$. Note that (ZZ') passes thru the center.

Repeat the same construction for another pair of parallel chords. The center lies at the intersection of the obtained lines.

14.9. Assume a construction produces two perpendicular lines. Apply a shear map that changes the angle between the lines (see 14.3a).

Note that it transforms the construction into the same construction for other free choices of points. Therefore, our construction does not generally produce perpendicular lines. (It might produce a perpendicular line only by coincidence.)

14.10. The first part follows from 14.1.

Suppose A, B, X , and Y are not collinear; in this case, $\square ABYX$ is a parallelogram. By the parallelogram rule, the only-if part follows.

Now suppose A, B, X , and Y lie on line ℓ . Choose two additional points $P, Q \notin \ell$ such that

$$\overrightarrow{XY} = \overrightarrow{PQ} \quad \text{and therefore} \quad \overrightarrow{PQ} = \overrightarrow{AB}.$$

From above we get

$$\overrightarrow{X'Y'} = \overrightarrow{P'Q'} \quad \text{and} \quad \overrightarrow{P'Q'} = \overrightarrow{A'B'}.$$

Hence the only-if part follows in the general case.

The if part follows since the inverse of an affine transformation is also affine.

14.13 and 14.14. Choose a coordinate system and apply the fundamental theorem of affine geometry (14.12) for the points $O = (0, 0)$, $X = (1, 0)$, and $Y = (0, 1)$.

14.15. Use 14.8, to show that $O' = O$. Choose a coordinate system with origin at O . By 14.14,

$$\alpha: (x, y) \mapsto (a \cdot x + b \cdot y, c \cdot x + d \cdot y).$$

Use that $\alpha(\Gamma) = \Gamma$ to show at $\begin{pmatrix} a & b \\ c & d \end{pmatrix} \cdot \begin{pmatrix} a & c \\ b & d \end{pmatrix} = \begin{pmatrix} 1 & 0 \\ 0 & 1 \end{pmatrix}$. Conclude that α is a motion.

14.16. Observe that any reflection meets the condition. By Theorem 10.7, any inversion meets the condition as well. Therefore, the same holds for any composition of inversions and reflections.

To prove the converse, choose a bijection α that maps circlines to circlines. Show that we can compose α with several inverses and reflections to obtain a bijection α' such that $\alpha'(\infty) = \infty$ and $\alpha(\Gamma) = \Gamma$ for some circle Γ .

By 14.15, α' is a motion. By 5.9, α' is a composition of reflections. Therefore so is α .

14.18. Set $a = f(1)$ and $b = f(0)$. Show and use that $a = a^2$ and $b = b^2$.

14.20. Apply Menelaus's theorem for $\triangle AA'B$ with (CC') and for $\triangle AA'C$ with (BB') .

15.3. To prove (a), apply 14.11.

To prove (b), suppose $P_i = (x_i, y_i)$; show and use that

$$\frac{P_1 P_2 \cdot P_3 P_4}{P_2 P_3 \cdot P_4 P_1} = \left| \frac{(x_1 - x_2) \cdot (x_3 - x_4)}{(x_2 - x_3) \cdot (x_4 - x_1)} \right|$$

if all P_i lie on a horizontal line $y = b$, and

$$\frac{P_1 P_2 \cdot P_3 P_4}{P_2 P_3 \cdot P_4 P_1} = \left| \frac{(y_1 - y_2) \cdot (y_3 - y_4)}{(y_2 - y_3) \cdot (y_4 - y_1)} \right|$$

otherwise. (See 20.25 for another proof.)

To prove (c), apply (a), (b), and 15.2.

15.4. Observe that for the perspective projection from (AB) to (AC) with center at W we have $A \mapsto A$, $B \mapsto C$, $X \mapsto P$, and $Y \mapsto Q$. Therefore 15.3 implies (a).

Applying the same argument with center V , we get $\frac{AY \cdot BX}{AX \cdot BY} = \frac{AP \cdot CQ}{AQ \cdot CP}$. Therefore $\frac{AX \cdot BY}{AY \cdot BX} = \frac{AY \cdot BX}{AX \cdot BY}$, hence (b).

15.7. Assume that (AB) meets $(A'B')$ at O . Since $(AB') \parallel (BA')$, we get that $\triangle OAB' \sim \triangle OBA'$ and $\frac{OA}{OB} = \frac{OB'}{OA'}$.

Similarly, $(AC') \parallel (CA') \implies \frac{OA}{OC} = \frac{OC'}{OA'}$.

Therefore $\frac{OB}{OC} = \frac{OC'}{OB'}$. Applying the SAS similarity condition, we get that $\triangle OBC' \sim \triangle OCB'$. Consequently, $(BC') \parallel (CB')$.

The case $(AB) \parallel (A'B')$ is similar.

15.8. Observe that the statement is equivalent to Pappus' theorem.

15.9; (a). Assume that the parallelogram is formed by the two pairs of parallel lines $(AB) \parallel (A'B')$ and $(BC) \parallel (B'C')$ and $\ell = (AC)$ in the notation of Desargues' theorem (15.5).

(b). Suppose that the parallelogram is formed by the two pairs of parallel lines $(AB') \parallel (A'B)$ and $(BC') \parallel (B'C)$ and $\ell = (AC')$ in the notation of Pappus' theorem (15.6).

15.10; (a). Observe and use that $\square ABCD$ and $\square ABDX$ are parallelograms.

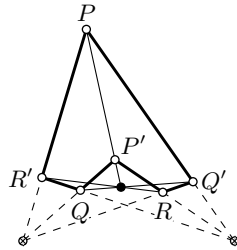
(b). Draw $a = (KN)$, $b = (KL)$, $c = (LM)$, $d = (MN)$, mark $P = b \cap d$, and continue.

15.11. Assume there is a duality. Choose two distinct parallel lines ℓ and m . Let L and M be their dual points. Set $s = (ML)$, then its dual point S has to lie on both ℓ and m — a contradiction.

15.13. Assume $M = (a, b)$ and the line s is given by the equation $p \cdot x + q \cdot y = 1$. Then $M \in s$ is equivalent to $p \cdot a + q \cdot b = 1$.

This, in turn, is equivalent to $m \ni S$ where m is the line given by the equation $a \cdot x + b \cdot y = 1$ and $S = (p, q)$.

To extend this bijection to the whole projective plane, assume that (1) the ideal line corresponds to the origin and (2) the ideal point is given by the pencil of lines $b \cdot x - a \cdot y = c$ for different values of c corresponds to the line defined by $a \cdot x + b \cdot y = 0$.



15.15. Assume one set of concurrent lines a, b, c , and another set of concurrent lines a', b', c' are given. Set

$$\begin{aligned} P &= b \cap c', & Q &= c \cap a', & R &= a \cap b', \\ P' &= b' \cap c, & Q' &= c' \cap a, & R' &= a' \cap b. \end{aligned}$$

Then the lines (PP') , (QQ') , and (RR') are concurrent.

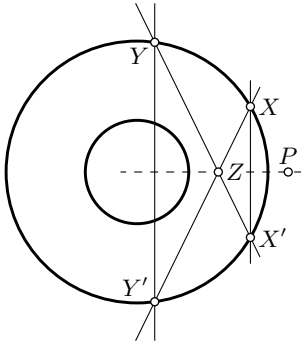
(Note that the obtained configuration of nine points and nine lines is the same as in the original theorem and the obtained result is its reformulation.)

15.16. (a). Assume (AA') and (BB') are the given lines and C is the given point. Apply the dual Desargues' theorem (15.14) to construct C' so that (AA') , (BB') , and (CC') are concurrent. Since $(AA') \parallel (BB')$, we get that $(AA') \parallel (BB') \parallel (CC')$.

(b). Assume that P is the given point and $(R'Q)$, $(P'R)$ are the given parallel lines. Try to construct point Q' as in the dual Pappus' theorem (see the solution of 15.15).

15.18. Suppose $p = (QR)$; denote by q and r the dual lines produced by the construction. Then, by 15.17, P is the point of intersection of q and r .

15.19. The line v polar to V is tangent to Γ . Since $V \in p$, by 15.17, we get that $P \in v$; that is, $(PV) = v$. Hence the statement follows.



15.20. Choose a point P outside of the larger circle. Construct the lines dual to P for both circles. Note that these two lines are parallel.

Assume that the lines intersect the bigger circle at two pairs of points X, X' and Y, Y' . Set $Z = (XY) \cap (X'Y')$. Note that the line (PZ) passes thru the common center.

The center is the intersection of (PZ) and another line constructed in the same way.

15.21. Construct polar lines for two points on ℓ . Denote their intersection by L . Note that ℓ is polar to L and therefore $(OL) \perp \ell$.

16.1. (a). Observe and use that $OA' = OB' = OC'$.

(b). Notice that the medians of spherical triangle ABC map to the medians of Euclidean a triangle $A'B'C'$. It remains to apply 8.5 for $\triangle A'B'C'$.

16.2. Apply the reflection in the plane thru O, N , and P .

16.4. Apply 10.11b and 16.3e.

16.5. Apply 16.3b.

16.6. Set $z = P'Q'$. Note that $\frac{z}{x} \rightarrow 1$ as $x \rightarrow 0$. It remains to show that

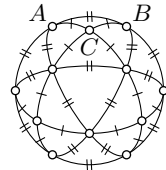
$$\lim_{x \rightarrow 0} \frac{z}{x} = \frac{2}{1 + OP^2}.$$

Recall that the stereographic projection is the inversion across the sphere Υ with the center at the south pole S restricted to the plane Π . Show that there is a plane Λ passing thru S, P, Q, P' , and Q' . In the plane Λ , the map $Q \rightarrow Q'$ is an inversion across the circle $\Upsilon \cap \Lambda$.

This reduces the problem to Euclidean plane geometry. The remaining calculations in Λ are similar to those in the proof of 13.13.

16.9. Consider the inversion of the base circle across a sphere with its center at the tip of the cone and apply 16.3.

16.11. Apply the spherical Pythagorean theorem to show that $\cos AB_s = \frac{1}{2}$, and conclude that $\widehat{AB}_s = \frac{\pi}{3}$.



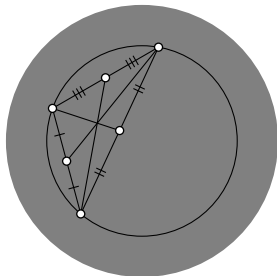
Alternatively, look at the tessellation of the hemisphere in the picture; it is made from 12 copies of $\triangle_s ABC$ and 4 equilateral spherical triangles. Due to the symmetry of this tessellation, it follows that $[AB]_s$ occupies $\frac{1}{6}$ of the equator, meaning $\widehat{AB}_s = \frac{\pi}{3}$.

16.12. Use Euler's formula (18D) to show that $\sin(i \cdot x) = i \cdot \text{sh } x$ and apply it. You should get the following answers:

$$\begin{aligned} \text{ch } c &= \text{ch } a \cdot \text{ch } b - \text{sh } a \cdot \text{sh } b \cdot \cos \gamma, \\ \cos \gamma &= -\cos \alpha \cdot \cos \beta + \sin \alpha \cdot \sin \beta \cdot \text{ch } c, \\ \frac{\sin \alpha}{\text{sh } a} &= \frac{\sin \beta}{\text{sh } b} = \frac{\sin \gamma}{\text{sh } c}. \end{aligned}$$

17.2. Consider the bijection $P \leftrightarrow \hat{P}$ of the h-plane with the absolute Ω . Note that $\hat{P} \in [A_i B_i]$ if and only if $P \in \Gamma_i$.

17.3. Apply 17.1 and the definition of h-distance in 12A.



17.6. The observation follows since the reflection across the perpendicular bisector of $[PQ]$ is a motion of the Euclidean plane and a motion of the h-plane as well.

We can assume that the center of the circumcircle coincides with the center of the absolute. In this case, the h-medians of the triangle coincide with the Euclidean medians. It remains to apply 8.5.

17.7. Use the projective model. Assume that two h-altitudes intersect at a point H . Move H to the center of the absolute. By 17.5 these h-altitudes become Euclidean altitudes of the triangle. By 8.3, the remaining Euclidean altitude passes thru H . By 17.5 this Euclidean altitude is also an h-altitude.

17.8. Let $\hat{\ell}$ and \hat{m} denote the h-lines in the conformal model that correspond to ℓ and m . We need to show that $\hat{\ell} \perp \hat{m}$ as arcs in the Euclidean plane.

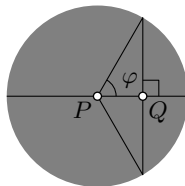
The point Z , where s meets t , is the center of the circle Γ containing $\hat{\ell}$.

If \hat{m} is passing thru Z , then the inversion across Γ exchanges the ideal points of $\hat{\ell}$. Consequently, $\hat{\ell}$ maps to itself. Hence the result.

17.9. Let Q be the footpoint of P on the line and φ be the angle of parallelism.

We can assume that P is the center of the absolute. Therefore $PQ = \cos \varphi$ and

$$PQ_h = \frac{1}{2} \cdot \ln \frac{1 + \cos \varphi}{1 - \cos \varphi}.$$



17.10. Apply 17.9 for $\varphi = \frac{\pi}{3}$.

17.11. Note that $b = \frac{1}{2} \cdot \ln \frac{1+t}{1-t}$; therefore

$$\textcircled{1} \quad \text{ch } b = \frac{1}{2} \cdot \left(\sqrt{\frac{1+t}{1-t}} + \sqrt{\frac{1-t}{1+t}} \right) = \frac{1}{\sqrt{1-t^2}}.$$

The same way, we get

$$\textcircled{2} \quad \text{ch } c = \frac{1}{\sqrt{1-u^2}}.$$

Let X and Y be the ideal points of $(BC)_h$. Applying the Pythagorean theorem (6.4) again, we get that $CX = CY = \sqrt{1-t^2}$. Therefore,

$$a = \frac{1}{2} \cdot \ln \frac{\sqrt{1-t^2} + s}{\sqrt{1-t^2} - s},$$

and

$$\begin{aligned} \text{ch } a &= \frac{1}{2} \cdot \sqrt{\frac{\sqrt{1-t^2} + s}{\sqrt{1-t^2} - s}} + \\ &+ \frac{1}{2} \cdot \sqrt{\frac{\sqrt{1-t^2} - s}{\sqrt{1-t^2} + s}} = \\ \textcircled{3} \quad &= \frac{\sqrt{1-t^2}}{\sqrt{1-t^2 - s^2}} = \\ &= \frac{\sqrt{1-t^2}}{\sqrt{1-u^2}}. \end{aligned}$$

Finally, note that $\textcircled{1}$, $\textcircled{2}$, and $\textcircled{3}$ imply the theorem.

17.13. In the Euclidean plane, the circle Γ_2 is tangent to k ; that is, T is the only point at intersection of Γ_2 and k . It defines a unique line (PT) parallel to ℓ .

17.15. Choose two points P and Q on ℓ . Drop perpendiculars p and q from P and Q to m (follow 5.22). Drop perpendiculars from P to q and from Q to p ; label their point of intersection by H . (Assume H exists, if not choose other P and Q .) Drop perpendicular n from H to m .

To justify the construction, we need to show that $n \perp \ell$. To do this, move H to the center of the absolute and apply 17.5, 17.8, and 8.3.

18.1. Use that $|z|^2 = z \cdot \bar{z}$ and $\bar{z} \cdot \bar{u} = \overline{z \cdot u}$.

18.2. Choose a quadrangle $ABCD$. Assume that $0, u, v,$ and w are complex coordinates of $A, B, C,$ and D respectively. Rewrite Ptolemy's inequality using $u, v,$ and w . Deduce this inequality from the provided identity and the triangle inequality.

18.3. Let z , v , and w denote the complex coordinates of Z , V , and W respectively. Then

$$\begin{aligned} \angle ZVW + \angle VWZ + \angle WZV &\equiv \\ &\equiv \arg \frac{w-v}{z-v} + \arg \frac{z-w}{v-w} + \arg \frac{v-z}{w-z} \equiv \\ &\equiv \arg \frac{(w-v) \cdot (z-w) \cdot (v-z)}{(z-v) \cdot (v-w) \cdot (w-z)} \equiv \\ &\equiv \arg(-1) \equiv \pi. \end{aligned}$$

18.4. Note and use that $\angle EOZ = \angle WOZ = \angle EOV = \angle WOZ = \arg v$ and $\frac{OW}{OZ} = \frac{OZ}{OW} = |v|$.

18.6. Note that

$$\begin{aligned} \arg \frac{(v-u) \cdot (z-w)}{(v-w) \cdot (z-u)} &\equiv \\ &\equiv \arg \frac{v-u}{z-u} + \arg \frac{z-w}{v-w} \equiv \\ &\equiv \angle ZUV + \angle VWZ. \end{aligned}$$

The statement follows since the value $\frac{(v-u) \cdot (z-w)}{(v-w) \cdot (z-u)}$ is real if and only if

$$2 \cdot \arg \frac{(v-u) \cdot (z-w)}{(v-w) \cdot (z-u)} \equiv 0.$$

18.8. We can choose the complex coordinates so that the points O , E , A , B , and C have coordinates 0 , 1 , $1+i$, $2+i$, and $3+i$ respectively. Set $\angle EOA = \alpha$, $\angle EOB = \beta$, and $\angle EOC = \gamma$. Note that

$$\begin{aligned} \alpha + \beta + \gamma &\equiv \\ &\equiv \arg(1+i) + \arg(2+i) + \arg(3+i) \equiv \\ &\equiv \arg[(1+i) \cdot (2+i) \cdot (3+i)] \equiv \\ &\equiv \arg[10 \cdot i] = \\ &= \frac{\pi}{2}. \end{aligned}$$

Note that these three angles are acute and conclude that $\alpha + \beta + \gamma = \frac{\pi}{2}$.

18.9. The identity can be verified by straightforward computations.

By 18.5, five out of the six cross-ratios in this identity are real. Consequently, the sixth cross-ratio must also be real. It remains to apply the theorem again.

18.10. Use 3.7 and 3.10 to show that $\angle UAB$, $\angle BVA$, and $\angle ABW$ have the same sign. By SAS, we have

$$\frac{AU}{AB} = \frac{VB}{VA} = \frac{BA}{BW},$$

and

$$\angle UAB = \angle BVA = \angle ABW.$$

The latter means that

$$\left| \frac{u-a}{b-a} \right| = \left| \frac{b-v}{a-v} \right| = \left| \frac{a-b}{w-b} \right|,$$

and

$$\arg \frac{b-a}{u-a} = \arg \frac{a-v}{b-v} = \arg \frac{a-b}{w-b}.$$

It implies the first two equalities in

$$\bullet \quad \frac{b-a}{u-a} = \frac{a-v}{b-v} = \frac{w-b}{a-b} = \frac{w-v}{u-v};$$

the last equality holds since

$$\frac{(b-a) + (a-v) + (w-b)}{(u-a) + (b-v) + (a-b)} = \frac{w-v}{u-v}.$$

To prove (b), rewrite \bullet using angles and distances between the points and apply SAS.

18.14. Show that the inverse of each elementary transformation is elementary and use 18.12.

18.15. The fractional linear transformation

$$f(z) = \frac{(z_1 - z_\infty) \cdot (z - z_0)}{(z_1 - z_0) \cdot (z - z_\infty)}$$

meets the conditions.

To show the uniqueness, assume there is another fractional linear transformation $g(z)$ that meets the conditions. Then the composition $h = g \circ f^{-1}$ is a fractional linear transformation; set $h(z) = \frac{a \cdot z + b}{c \cdot z + d}$.

Note that $h(\infty) = \infty$; therefore, $c = 0$. Furthermore, $h(0) = 0$ implies $b = 0$. Finally, since $h(1) = 1$, we get that $\frac{a}{d} = 1$. Therefore, h is the identity; that is, $h(z) = z$ for any z . It follows that $g = f$.

18.16. Let Z' be the inverse of the point Z . Assume that the circle of the inversion has center W and radius r . Let z , z' , and w denote the complex coordinates of the points Z , Z' , and W respectively.

By the definition of an inversion, $\arg(z - w) = \arg(z' - w)$ and $|z - w| \cdot |z' - w| = r^2$. It follows that $(z' - w) \cdot (z - w) = r^2$. Equivalently,

$$z' = \frac{\bar{w} \cdot z + [r^2 - |w|^2]}{z - w}.$$

18.18. Check the statement for each elementary transformation. Then apply 18.12.

18.20. Note that $f: z \mapsto \frac{a \cdot z + b}{c \cdot z + d}$ preserves the unit circle $|z| = 1$. Use 10.26 and 18.12 to show

that f commutes with the inversion $z \mapsto 1/\bar{z}$. In other words, $1/\overline{f(z)} = f(1/\bar{z})$ or

$$\frac{\bar{c} \cdot \bar{z} + \bar{d}}{\bar{a} \cdot \bar{z} + \bar{b}} = \frac{a/\bar{z} + b}{c/\bar{z} + d}$$

for any $z \in \hat{\mathbb{C}}$. The latter identity leads to the required statement. The condition $|w| < |v|$ follows since $f(0) \in \mathbb{D}$.

18.21. Note that the inverses of the points z and w have complex coordinates $1/\bar{z}$ and $1/\bar{w}$. Apply 12.25 and simplify.

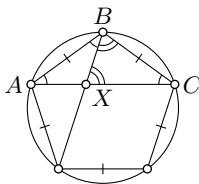
The second part follows since the function $x \mapsto \text{th}(\frac{1}{2} \cdot x)$ is increasing.

18.22. Apply Schwarz–Pick theorem for a function f such that $f(0) = 0$ and then apply 12.8.

19.7. To construct $\sqrt{a \cdot b}$: (1) construct points A, B , and $D \in [AB]$ such that $AD = a$ and $BD = b$; (2) construct the circle Γ on the diameter $[AB]$; (3) draw the line ℓ thru D perpendicular to (AB) ; (4) let C be an intersection of Γ and ℓ . Then $DC = \sqrt{a \cdot b}$.

The construction of $\frac{a^2}{b}$ is analogous.

19.9, (a). Look at the diagram; show that the angles marked the same way have the same angle measure. Conclude that $XC = BC$ and $\triangle ABC \sim \triangle AXB$. Therefore



$$\frac{AB}{AC} = \frac{AX}{AB} = \frac{AC - AB}{AB} = \frac{AC}{AB} - 1.$$

It remains to solve for $\frac{AC}{AB}$.

(b). Choose two points P and Q and use the ruler-and-compass calculator to construct two points V and W such that $VW = \frac{1+\sqrt{5}}{2} \cdot PQ$. Then construct a pentagon with the sides PQ and diagonals VW .

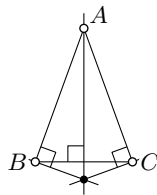
19.10. Note that with a set-square we can construct a line parallel to a given line thru the given point. It remains to modify the construction in 14.6.

19.12. Choose a coordinate system so that the given vertices are $(0, 0)$ and $(1, 0)$. Show that the remaining vertex is $(\frac{1}{2}, \pm \frac{\sqrt{3}}{2})$. Observe that it is an irrational point; apply 19.11.¹

19.13. Assume that one can construct a bisector of $\angle AOB$, where $A = (1, 0)$, $O = (0, 0)$, and $C = (1, 1)$. Let D be the point of intersection of the bisector with the line (AB) . Show that D is an irrational point. Apply 19.11 and arrive at a contradiction.

19.14. Suppose that every initial point has coordinates $(a, b \cdot \sqrt{3})$ for rational values a and b . Show and use that any point that can be constructed with the 30° -set-square has coordinates of the same type.

19.15, (a). Observe that three perpendiculars on the diagram meet at one point if and only if the triangle is isosceles.



Use this observation a couple of times to verify that the given triangle is equilateral.

(b). Suppose that a line ℓ passes thru the vertex of the given angle. Choose a point $P \in \ell$. Suppose X and Y are the footpoints of P on the sides of the angle. Show and use that $(XY) \perp \ell$ if and only if ℓ bisects the angle.

19.17. Consider the perspective projection $(x, y) \mapsto (\frac{1}{x}, \frac{y}{x})$ (see 15D). Let $A = (1, 1)$, $B = (3, 1)$, and $M = (2, 1)$. Note that M is the midpoint of $[AB]$.

Their images are $A' = (1, 1)$, $B' = (\frac{1}{3}, \frac{1}{3})$, and $M' = (\frac{1}{2}, \frac{1}{2})$. Clearly, M' is not the midpoint of $[A'B']$.

19.20. (a) is strictly stronger than (b), (b) is strictly stronger than (c), (a) is strictly stronger than (d), and (d) is not comparable with (b) and (c). Most of these statements follow from 5.22, 7.1, 10.5, 14.9, 19.12, 19.16.

To show that (d) is not stronger than (c), show that one cannot construct a midpoint using the set (d) and use the solution of 14.6. To

¹It is okay to use that $\sqrt{3}$ is irrational without proving it. But let us explain why it is true. Assume the contrary; that is, $\frac{m}{n} = \sqrt{3}$ for integers m and n . We can assume that m and n do not share a prime factor; in particular, if m is divisible by 3, then n is not. Observe that $m^2 = 3 \cdot n^2$. It follows that m is divisible by 3; that is, $m = 3 \cdot k$ for an integer k . It follows that $3 \cdot k^2 = n^2$. Therefore, n is divisible by 3 — a contradiction.

show that (b) is not stronger than (d), show that given the initial configuration of 6 points (0, 0), (1, 0), (2, 0), (0, 1), (1, 1), (2, 1), one can construct an equilateral triangle using the set (d) and apply 19.12.

20.1. Assume the contrary; that is, there is a point $W \in [XY]$ such that $W \notin \triangle ABC$.

Without loss of generality, we may assume that W and A lie on opposite sides of the line (BC) .

It implies that both segments $[WX]$ and $[WY]$ intersect (BC) . By Axiom II, $W \in (BC)$ – a contradiction.

20.3. To prove the “only if” part, consider the line passing thru the vertex that is parallel to the opposite side.

To prove the “if” part, use Pasch’s theorem (3.12).

20.4. Assume the contrary; that is, a solid square \mathcal{Q} can be presented as a union of a finite collection of segments $[A_1B_1], \dots, [A_nB_n]$ and one-point sets $\{C_1\}, \dots, \{C_k\}$.

Note that \mathcal{Q} contains an infinite number of mutually nonparallel segments. Therefore, we can choose a segment $[PQ]$ in \mathcal{Q} that is not parallel to any of the segments $[A_1B_1], \dots, [A_nB_n]$.

It follows that $[PQ]$ has at most one common point with each of the sets $[A_iB_i]$ and $\{C_i\}$. Since $[PQ]$ contains an infinite number of points, we arrive at a contradiction.

20.5. Show that among elementary sets only one-point sets can be subsets of a circle. It remains to note that any circle contains an infinite number of points.

20.13. Suppose that E denotes the point of intersection of the lines (BC) and $(C'D')$.

Use 20.12 to prove that the following solid parallelograms have the same area:

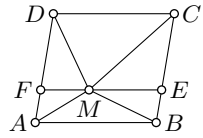
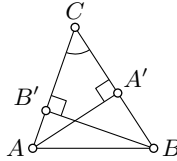
$\blacksquare ABCD$, $\blacksquare AB'ED$, and $\blacksquare AB'C'D'$.

20.15. Without loss of generality, we may assume that the angles ABC and BCA are acute.

Let A' and B' denote the footpoints of A and B on (BC) and (AC) respectively. Note that $h_A = AA'$ and $h_B = BB'$.

Note that $\triangle AA'C \sim \triangle BB'C$; indeed the angle at C is shared and the angles at A' and

B' are right. In particular $\frac{AA'}{BB'} = \frac{AC}{BC}$, or equivalently, $h_A \cdot BC = h_B \cdot AC$.



20.16. Draw the line ℓ thru M parallel to $[AB]$ and $[CD]$; it subdivides $\blacksquare ABCD$ into two solid parallelograms which we will denote as $\blacksquare ABEF$ and $\blacksquare CDFE$. In particular,

$$\begin{aligned} \text{area}(\blacksquare ABCD) &= \\ &= \text{area}(\blacksquare ABEF) + \text{area}(\blacksquare CDFE). \end{aligned}$$

By 20.12 and 20.14 we get that

$$\text{area}(\triangle ABM) = \frac{1}{2} \cdot \text{area}(\blacksquare ABEF),$$

$$\text{area}(\triangle CDM) = \frac{1}{2} \cdot \text{area}(\blacksquare CDFE)$$

and hence the result.

20.17. Let h_A and h_C denote the distances from A and C to the line (BD) respectively. According to 20.14,

$$\text{area}(\triangle ABM) = \frac{1}{2} \cdot h_A \cdot BM;$$

$$\text{area}(\triangle BCM) = \frac{1}{2} \cdot h_C \cdot BM;$$

$$\text{area}(\triangle CDM) = \frac{1}{2} \cdot h_C \cdot DM;$$

$$\text{area}(\triangle ADM) = \frac{1}{2} \cdot h_A \cdot DM.$$

Therefore

$$\begin{aligned} \text{area}(\triangle ABM) \cdot \text{area}(\triangle CDM) &= \\ &= \frac{1}{4} \cdot h_A \cdot h_C \cdot DM \cdot BM = \\ &= \text{area}(\triangle BCM) \cdot \text{area}(\triangle DAM). \end{aligned}$$

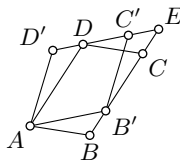
20.18. Let I be the incenter of $\triangle ABC$. Note that $\triangle ABC$ can be subdivided into $\triangle IAB$, $\triangle IBC$, and $\triangle ICA$.

It remains to apply 20.14 to each of these triangles and sum up the results.

20.19. Fix a polygonal set \mathcal{P} . Without loss of generality, we may assume that \mathcal{P} is a union of a finite collection of solid triangles. Cut \mathcal{P} along the extensions of the sides of all the triangles, it subdivides \mathcal{P} into convex polygons. Cutting each polygon by diagonals from one vertex produces a subdivision into solid triangles.

20.20. Assuming $a > b$, we subdivided \mathcal{Q}_c into \mathcal{Q}_{a-b} and four triangles congruent to \mathcal{T} . Therefore

❶ $\text{area } \mathcal{Q}_c = \text{area } \mathcal{Q}_{a-b} + 4 \cdot \text{area } \mathcal{T}.$



According to 20.14, $\text{area } \mathcal{T} = \frac{1}{2} \cdot a \cdot b$. Therefore, the identity ❶ can be written as

$$c^2 = (a - b)^2 + 2 \cdot a \cdot b.$$

Simplifying, we get the Pythagorean theorem.

Case $a = b$ is simpler. Case $b > a$ can be done in the same way.

20.21. If X is a point inside of $\triangle ABC$, then $\triangle ABC$ is subdivided into $\triangle ABX$, $\triangle BCX$, and $\triangle CAX$. Therefore

$$\begin{aligned} \text{area}(\triangle ABX) + \text{area}(\triangle BCX) + \\ + \text{area}(\triangle CAX) = \text{area}(\triangle ABC). \end{aligned}$$

Set $a = AB = BC = CA$. Let h_1 , h_2 , and h_3 denote the distances from X to the sides $[AB]$, $[BC]$, and $[CA]$. Then by 20.14,

$$\text{area}(\triangle ABX) = \frac{1}{2} \cdot h_1 \cdot a,$$

$$\text{area}(\triangle BCX) = \frac{1}{2} \cdot h_2 \cdot a,$$

$$\text{area}(\triangle CAX) = \frac{1}{2} \cdot h_3 \cdot a.$$

Therefore,

$$h_1 + h_2 + h_3 = \frac{2}{a} \cdot \text{area}(\triangle ABC).$$

20.24. Apply 20.22 to show that

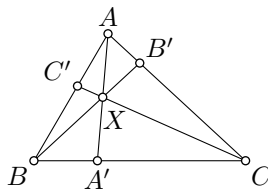
$$\frac{\text{area}(\triangle ABB')}{\text{area}(\triangle BCB')} = \frac{\text{area}(\triangle AXB')}{\text{area}(\triangle XCB')} = \frac{AB'}{B'C}.$$

And observe that

$$\begin{aligned} \text{area}(\triangle ABB') = \text{area}(\triangle ABX) + \\ + \text{area}(\triangle AXB'), \end{aligned}$$

$$\begin{aligned} \text{area}(\triangle BCB') = \text{area}(\triangle BCX) + \\ + \text{area}(\triangle XCB'). \end{aligned}$$

It implies the first identity; the rest is analogous.



20.25. To prove (a), apply 20.22 twice to the triangles OL_iL_j , OL_jM_i , and OM_iM_j .

To prove part (b), use 20.22 to rewrite the left-hand side using the areas of triangles OL_1L_2 , OL_2L_3 , OL_3L_4 , and OL_4L_1 . Furthermore, use part (a) to rewrite it using areas of OM_1M_2 , OM_2M_3 , OM_3M_4 , and OM_4M_1 and apply 20.22 again to get the right-hand side.

20.26. Let \mathcal{P}_n and \mathcal{Q}_n be the solid regular n -gons so that Γ is inscribed in \mathcal{Q}_n and circumscribed around \mathcal{P}_n . Clearly, $\mathcal{P}_n \subset \mathcal{D} \subset \mathcal{Q}_n$.

Show that $\frac{\text{area } \mathcal{P}_n}{\text{area } \mathcal{Q}_n} = (\cos \frac{\pi}{n})^2$; in particular,

$$\frac{\text{area } \mathcal{P}_n}{\text{area } \mathcal{Q}_n} \rightarrow 1 \quad \text{as } n \rightarrow \infty.$$

Next show that $\text{area } \mathcal{Q}_n < 100$ for any large n .

These two statements imply that

$$(\text{area } \mathcal{Q}_n - \text{area } \mathcal{P}_n) \rightarrow 0.$$

Hence the result.

Index

- \sphericalangle , \sphericalangle , 14
- \sphericalangle_h , \sphericalangle_h , 91
- \triangle , 16
- \triangle_h , 90
- \blacktriangle , 162
- \square , 45
- \blacksquare , 163
- \sim , 42
- \cong , 16, 163
- \equiv , 14
- \parallel , \nparallel , 47
- \perp , 34, 77
- ∞ , 74
- d_1 , d_2 , d_∞ , 11
- (PQ) , $[PQ]$, $[PQ]$, 13
- $(PQ)_h$, $[PQ]_h$, $[PQ]_h$, 90
- $[x]$, $[x]$, 167
- $(u, v; w, z)$, 147

- AA similarity condition, 43
- AAA congruence condition, 106
- absolute, 90
- absolute plane, 81
- absolute value, 144
- acute angle, 34
- affine transformation, 112, 122
- altitude, 57
- angle, 14
 - acute and obtuse angles, 34
 - angle of parallelism, 101
 - between arcs, 79
 - measure, 19
 - hyperbolic angle measure, 91
 - positive and negative angles, 23
 - right angle, 34
 - straight angle, 21
 - vertical angles, 22
- angle-preserving transformation, 43, 107
- Apollonian circle, 55, 72
- area, 164
- argument, 146
- ASA congruence condition, 30
- asymptotically parallel lines, 101

- base, 31
 - of cone, 133
- between, 21
- bijection, 12

- bisector
 - angle bisector, 58
 - external bisector, 58
 - of the triangle, 59
 - perpendicular bisector, 34
- bounded set, 175

- center, 29
 - center of the pencil, 119
 - of reflection, 49
- central projection, 130
- central symmetry, 49
- centroid, 58
- Ceva's theorem, 118, 173
- ch, 99, 110
- chord, 39
- circle, 29
- circline, 68, 74
 - arc, 68
- circular arc, 68
- circular cone, 133
- circumcenter, 56
- circumcircle, 56
- circumtool, 74, 78, 159
- collinear, 113
- collinear points, 12
- complex conjugate, 144
- complex coordinate, 144
- concurrent, 119
- conformal disc model, 99
- conformal factor, 107
- congruent
 - sets, 163
 - triangles, 16
- consistent, 87
- constructible numbers, 157
- continuous, 15
- convex set, 162
- cross-ratio, 72
 - complex cross-ratio, 147, 151
- curvature, 88, 174
- cyclic order, 69

- decidable construction, 159
- defect, 174
- defect of triangle, 85
- degenerate
 - triangle, 21

- polygonal set, 163
 - quadrangle, 53
- Desargues' theorem, 123, 127
- diagonal
 - of a regular n -gon, 155
 - of quadrangle, 45
- diameter, 39
- direct motion, 38
- discrete metric, 11
- distance, 10
 - between parallel lines, 54
 - from a point to a line, 38
 - spherical, 129
- distance-preserving map, 12
- doubling the ball, 175
- duality, 125

- elementary set, 163
- elementary transformation, 149
- ellipse, 139
- endpoint of arc, 68
- equidecomposable sets, 166
- equidistant, 105
- equilateral triangle, 31
- equivalence relation, 16, 42, 48
- Euclidean
 - metric, 11
 - plane, 19
 - space, 120
- Euler's formula, 145
- excenter, 181
- extended complex plane, 149

- Fermat prime, 155
- field automorphism, 116
- floor and ceiling, 167
- footpoint, 35
- fractional linear transformation, 149
- free points, 159
- Fundamental theorem of affine geometry, 115

- Gauss–Wantzel theorem, 155, 157
- great circle, 129

- h-angle measure, 91
- h-circle, 94
- h-half-line, 90
- h-line, 90
- h-plane, 90
- h-point, 90
- h-radius, 94
- h-segment, 90
- half-line, 13
- half-plane, 26
- holomorphic function, 153
- horocycle, 105
- hyperbolic
 - angle, 91
 - angle measure, 91
 - cosine, 99, 110
 - functions, 99
 - geometry, 86
 - plane, 90
 - sine, 99, 108
- tangent, 99
- hypercycle, 105
- hypotenuse, 44

- ideal
 - line, 119
 - point, 90, 119
- identity map, 190
- imaginary
 - number, 144
 - part, 143
- incenter, 61
- incidence structure, 112
- incircle, 61
- indirect motion, 38
- injective map, 12
- inradius, 61
- inscribed triangle, 64
- inside
 - a circle, 39
 - a triangle, 162
- intersecting lines, 47
- inverse, 12
- inversion, 71
 - center of inversion, 71, 132
 - circle of inversion, 71
 - inversion across a sphere, 132
 - inversion across the circline, 77
 - inversion across the line, 77
 - sphere of inversion, 132
- inverse
 - plane, 74
 - space, 132
 - transformation, 115
- inversor, 78, 159
- irrational point, 158
- isometric spaces, 12
- isometry, 12
- isosceles triangle, 31

- leg, 44
- line, 12
 - ideal line, 119
- Lobachevsky geometry, 86

- Möbius transformation, 149
- Manhattan plane, 11
- Menelaus's theorem, 117
- metric, 10
 - space, 10
- Mohr–Mascheroni theorem, 161
- motion, 12

- neutral plane, 81

- oblique circular cone, 133
- obtuse angle, 34
- opposite arc, 68
- orthic triangle, 62
- orthocenter, 57
- orthocentric system, 180
- outside a circle, 39

- Pappus' theorem, 124, 139

- parallel
 - lines, 47
 - tool, 113
 - translation, 149
- parallel lines
 - ultra parallel lines, 102
- parallelogram, 53
 - solid parallelogram, 163
- Pasch's theorem, 26
- pencil, 119
- perpendicular, 34
 - bisector, 34
 - circles, 77
- perspective projection, 121
- plane
 - absolute plane, 81
 - Euclidean plane, 19
 - h-plane, 90
 - hyperbolic plane, 90
 - inversive plane, 74
 - neutral plane, 81
 - plane in the space, 120
- point, 10
 - at infinity, 74
 - ideal point, 90, 119
- polar, 128
 - coordinates, 146
- polarity, 125
- pole, 128
- polygonal set, 163
 - degenerate polygonal set, 163
- Poncelet–Steiner theorem, 161
- power of a point, 65
- projective
 - completion, 119
 - model, 138
 - plane, 119
 - transformation, 122
- Pythagorean theorem, 44, 110, 133, 141, 171
- quadrable set, 174
- quadrangle, 45
 - degenerate quadrangle, 53
 - inscribed quadrangle, 66, 69
 - solid quadrangle, 163
- radius, 29
- rational point, 158
- real
 - complex number, 144
 - line, 11
 - part, 143
- rectangle, 53, 85
 - solid rectangle, 163
- reflection
 - across a line, 36
 - across a point, 49
- regular n -gon, 155
- rhombus, 53
- right circular cone, 133
- rotational homothety, 149
- ruler-and-compass calculator, 157
- ruler-and-compass construction, 40
- SAA congruence condition, 83
- SAS congruence condition, 30
- SAS similarity condition, 43
- scalar product, 134
- Schwarz–Pick theorem, 153
- secant line, 39
- segment, 13
- set-square, 158
- sh, 99, 108
- shear map, 112
- side
 - of a regular n -gon, 155
 - of quadrangle, 45
 - of the triangle, 26
- signed ratio, 118
- similar triangles, 42
- Simson line, 67
- solid
 - quadrangle, parallelogram, rectangle, square, 163
 - triangle, 162
- sphere, 129
- spherical distance, 129
- square, 53
 - solid square, 163
- SSS congruence condition, 32
- SSS similarity condition, 43
- stereographic projection, 131
- subdivision of polygonal set, 166
- tangent
 - circles, 40
 - half-line, 69
 - line, 39
- th, 99
- tip of cone, 133
- transformation, 43
- transversal, 50
- triangle, 16
 - congruent triangles, 16
 - degenerate triangle, 21
 - inequality, 10, 145
 - orthic triangle, 62
 - right triangle, 44
 - similar triangles, 42
 - solid triangle, 162
- unit complex number, 144
- Van Aubel's theorem, 118
- verifiable construction, 159
- vertex
 - of a regular n -gon, 155
 - of angle, 14
 - of quadrangle, 45
- vertical angles, 22

Used resources

- [1] A. Akopyan. *Geometry in figures*. 2017. [Translated to Bulgarian, Chinese, French, Hebrew, Polish, Russian, and Spanish.]
- [2] A. D. Aleksandrov. “Minimal foundations of geometry”. *Siberian Math. J.* 35.6 (1994), 1057–1069.
- [3] F. Bachmann. *Aufbau der Geometrie aus dem Spiegelungsbegriff*. 1959. [Translated to Russian.]
- [4] E. Beltrami. “Teoria fondamentale degli spazii di curvatura costante”. *Annali. di Mat., ser II* 2 (1868), 232–255. [Translated by J. Stillwell in *Sources of Hyperbolic Geometry*, pp. 41–62 (1996).]
- [5] G. D. Birkhoff. “A set of postulates for plane geometry, based on scale and protractor”. *Ann. of Math. (2)* 33.2 (1932), 329–345.
- [6] J. Bolyai. *Appendix*. 1832. [Translated by Ferenc Kárteszi in *Appendix. The theory of space*, (1987).]
- [7] O. Byrne. *The first six books of the Elements of Euclid: in which coloured diagrams and symbols are used instead of letters for the greater ease of learners*. 1847. URL: <https://github.com/jemmybutton/byrne>
- [8] E. Engeler. “Remarks on the theory of geometrical constructions”. *The syntax and semantics of infinitary languages*. 1968, 64–76.
- [9] *Euclid’s Elements*.
- [10] *Euclidean*. URL: <https://www.euclidean.xyz>.
- [11] J. Hadamard. *Leçons de géométrie élémentaire: Géométrie plane*. 1906. [Translated by M. Saul in *Lessons in geometry. I. Plane geometry*, (2008).]
- [12] А. П. Киселёв. *Элементарная геометрия*. [Translated by A. Givental in *Kiselev’s geometry*, (2006).]
- [13] J. H. Lambert. “Theorie der parallellinien”. *Leipziger Magazin für reine und angewandte Mathematik* 1.2 (1786), 137–164.
- [14] A.-M. Legendre. “Eléments de géométrie” (1794).
- [15] Н. И. Лобачевский. “О началах геометрии”. *Казанский вестник* 25–28 (1829–1830).
- [16] N. I. Lobatschewsky. “Geometrische Untersuchungen zur Theorie der Parallellinien”. 1840. [Translated by G. B. Halsted in *The Theory of Parallels*, (2015).]
- [17] В. В. Прасолов. *Задачи по планиметрии*. 1986. [Translated by D. Leites in *Problems in plane and solid geometry*, (2006).]
- [18] G. G. Saccheri. *Euclides ab omni nævo vindicatus*. 1733. [Translated by G. B. Halsted in *Euclides vindicatus*, (1986).]
- [19] И. Ф. Шарыгин. *Геометрия 7–9*. 1997.
- [20] A. Tarski. “What is elementary geometry?” *The axiomatic method (edited by L. Henkin, P. Suppes and A. Tarski)*. 1959, 16–29.
- [21] F. A. Taurinus. *Geometriae: Prima elementa. Recensuit et novas observationes adjecit*. Bachem, 1826.
- [22] *Задачи*. URL: <https://www.problems.ru/>.