

A Euclidean Ramsey result in the plane

Sergei Tsaturian*

4 April 2017

Abstract

An old question in Euclidean Ramsey theory asks, if the points in the plane are red-blue coloured, does there always exist a red pair of points at unit distance or five blue points in line separated by unit distances? An elementary proof answers this question in the affirmative.

1 Introduction

Many problems in Euclidean Ramsey theory ask, for some $d \in \mathbb{Z}^+$, if E^d is coloured with $r \geq 2$ colours, does there exist a colour class containing some desired geometric structure? Research in Euclidean Ramsey theory was surveyed in [2–4] by Erdős, Graham, Montgomery, Rothschild, Spencer, and Straus; for a more recent survey, see Graham [5].

Say that two geometric configurations are congruent iff there exists an isometry (distance preserving bijection) between them. For $d \in \mathbb{Z}^+$, and geometric configurations F_1, F_2 , let the notation $\mathbb{E}^d \rightarrow (F_1, F_2)$ mean that for any red-blue coloring of \mathbb{E}^d , either the red points contain a congruent copy of F_1 , or the blue points contain a congruent copy of F_2 . For a positive integer i , denote by ℓ_i the configuration of i collinear points with distance 1 between consecutive points. One of the results in [3] states that

$$\mathbb{E}^2 \rightarrow (\ell_2, \ell_4). \quad (1)$$

In the same paper, it was asked if $\mathbb{E}^2 \rightarrow (\ell_2, \ell_5)$, or perhaps a weaker result holds: $\mathbb{E}^3 \rightarrow (\ell_2, \ell_5)$.

The result (1) was generalised by Juhász[7], who proved that if T_4 is any configuration of 4 points, then $\mathbb{E}^2 \rightarrow (\ell_2, T_4)$. Juhász (personal communication, 10 February 2017) informed the author that Iván’s thesis [6] contains a proof that for any configuration T_5 of 5 points, $\mathbb{E}^3 \rightarrow (\ell_2, T_5)$ (which implies that $\mathbb{E}^3 \rightarrow (\ell_2, \ell_5)$). Arman and Tsaturian[1] proved that $\mathbb{E}^3 \rightarrow (\ell_2, \ell_6)$.

In this paper, it is proved that $\mathbb{E}^2 \rightarrow (\ell_2, \ell_5)$:

Theorem 1.1. *Let the Euclidean space \mathbb{E}^2 be coloured in red and blue so that there are no two red points distance 1 apart. Then there exist five blue points that form an ℓ_5 .*

*University of Manitoba, tsaturis@myumanitoba.ca

2 Proof of Theorem 1.1

The proof is by contradiction; it is assumed that there are no five blue points forming an ℓ_5 . The following lemmas are needed.

Lemma 2.1. *Let \mathbb{E}^2 be coloured in red and blue so that there is no red ℓ_2 . If there is no blue ℓ_5 , then there are no three blue points forming an equilateral triangle with side length 3 and with a red centre.*

Proof. Suppose that \mathbb{E}^2 is coloured in red and blue so that there is no red ℓ_2 and no blue ℓ_5 . Suppose that blue points A, B and C form an equilateral triangle with side length 3 and with red centre O . Consider the part of the unit triangular lattice shown in Figure 1(a). The points D, E, F, G are blue, since they are distance 1 apart from O . The point X is red; otherwise $XADEB$ is a red ℓ_5 . Similarly, Y is red (to prevent red $YAFGC$). Then X and Y are two red points distance 1 apart, which contradicts the assumption. \square

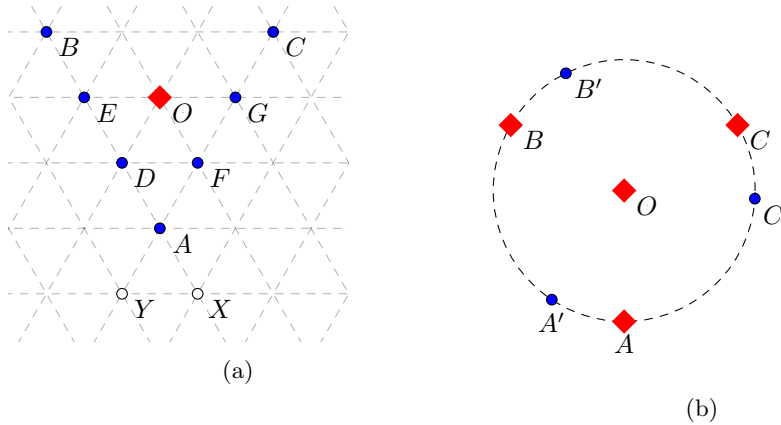


Figure 1: Red points are denoted by diamonds, blue points are denoted by discs.

Lemma 2.2. *Let \mathbb{E}^2 be coloured in red and blue so that there is no red ℓ_2 . If there is no blue ℓ_5 , then there are no three red points forming an equilateral triangle with side length $\sqrt{3}$ and with a red centre.*

Proof. Suppose that \mathbb{E}^2 is coloured in red and blue so that there is no red ℓ_2 and no blue ℓ_5 . Suppose that blue points A, B and C form an equilateral triangle with side length 3 and with red centre O . Let A', B', C' be the images of A, B and C , respectively, under a rotation about O so that $AA' = BB' = CC' = 1$ (see Figure 1(b)). Then A', B', C' are blue and form an equilateral triangle with side length $\sqrt{3}$ and red center O , which contradicts the result of Lemma 2.1. \square

Define $\mathfrak{T}_3, \mathfrak{T}_4, \mathfrak{T}_5, \mathfrak{T}_6, \mathfrak{T}_7$ to be the configurations of three, four, five, six and seven points (respectively), depicted in Figure 2 (all the smallest distances between the points are equal to $\sqrt{3}$).

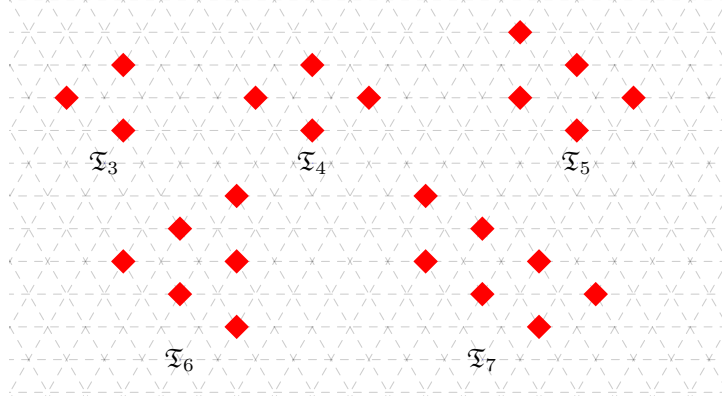


Figure 2

Lemma 2.3. *Let \mathbb{E}^2 be coloured in red and blue so that there is no red ℓ_2 . If there is no blue ℓ_5 , then there are no seven red points forming a \mathfrak{T}_7 .*

Proof. Suppose that \mathbb{E}^2 is coloured in red and blue so that there is no red ℓ_2 and no blue ℓ_5 . Suppose that A, B, C, D, E, F and G are red points forming a \mathfrak{T}_7 (as in Figure 3). Let X be the reflection of F in BC . Let X', A', F' be the images of X, A, F , respectively, under the clockwise rotation about B such that $XX' = AA' = FF' = 1$. Since A and F are red, A' and F' are blue. If X' is blue, then $X'A'F'$ is a blue equilateral triangle with side length 3 and red center B , which contradicts the result of Lemma 2.1. Therefore, X' is red. Let X'', D'', F'' be the images of X, D, F , respectively, under the clockwise rotation about C such that $XX'' = DD'' = FF'' = 1$. Since D and F are red, D'' and F'' are blue. If X'' is blue, then $X''D''F''$ is a blue equilateral triangle with side length 3 and red center C , which contradicts the result of Lemma 2.1. Therefore, X'' is red. Since X' can be obtained from X'' by the clockwise rotation through 60° about X , $XX'X''$ is a unit equilateral triangle, hence $XX'X''$ is a red ℓ_2 , which contradicts the assumption of the lemma. \square

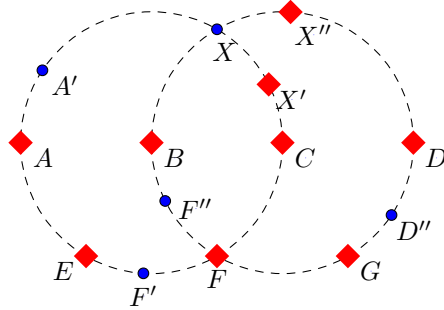


Figure 3

Lemma 2.4. *Let \mathbb{E}^2 be coloured in red and blue so that there is no red ℓ_2 . Let A, B, C be three red points forming a \mathfrak{T}_3 . If there is no blue ℓ_5 , then there exists a red \mathfrak{T}_6 that contains $\{A, B, C\}$ as a subset.*

Proof. Suppose that \mathbb{E}^2 is coloured in red and blue so that there is no red ℓ_2 and no blue ℓ_5 . Let A, B, C be three red points forming a \mathfrak{T}_3 . Consider the unit triangular lattice depicted in Figure 4.

Suppose that there is no red point D such that A, B, C, D form a \mathfrak{T}_4 . Then points X, Y, Z are blue. Points E, F, G, H, I, J are blue, since each of them is distance 1 apart from a red point. If the point K is red, then the points L and M are blue and $LMYGH$ is a blue ℓ_5 . Therefore, K is blue. Then N is red (otherwise $KJIZN$ is a blue ℓ_5), hence P and Q are blue, which leads to a blue ℓ_5 $PQFEX$. A contradiction is obtained, therefore there exists a red point D such that A, B, C, D form a \mathfrak{T}_4 .

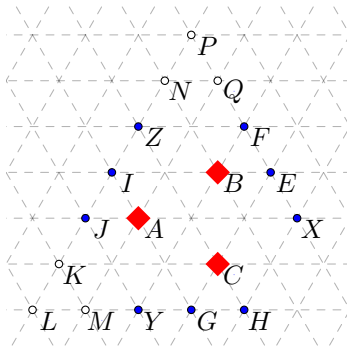


Figure 4

Let A, B, C, D form a red \mathfrak{T}_4 . Consider the part of the unit triangular lattice depicted in Figure 5. Suppose that there is no red point E such that A, B, C, D, E form a \mathfrak{T}_5 . Then the points X, F and G are blue. Points H, I, K, L, M, N are blue, since each of them is distance 1 apart from a red point. Point P is red (otherwise $FHIGP$ is a blue ℓ_5), therefore Q and R are blue. Then X, N, M, Q, R form a blue ℓ_5 , which gives a contradiction. Hence, there exists a red point E such that A, B, C, D, E form a \mathfrak{T}_5 .

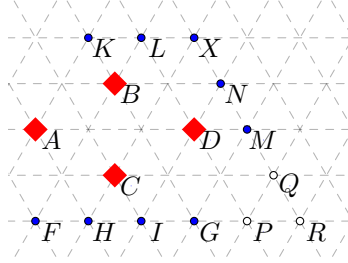


Figure 5

Let A, B, C, D, E form a \mathfrak{T}_5 (Figure 6). Suppose that F is blue. By Lemma 2.2, points X and Y are blue (otherwise X, E, C (Y, A, D) form a red triangle with side length 3 and red center B). Points G, H, I, J, K, L, M, N are blue, since each one of them is at distance 1 from a red point. If point P is blue, then Q is red (otherwise $QPKLF$ is a blue ℓ_5), U and T are blue and form a blue ℓ_5 with points G, H and X . Therefore, P is red. Similarly, R is red (otherwise S is red and $VWJIY$ is a blue ℓ_5). Then A, B, C, D, E, P and R form a red \mathfrak{T}_7 , which is not possible by Lemma 2.3. Therefore, F is red and A, B, C, D, E, F form a red \mathfrak{T}_6 .

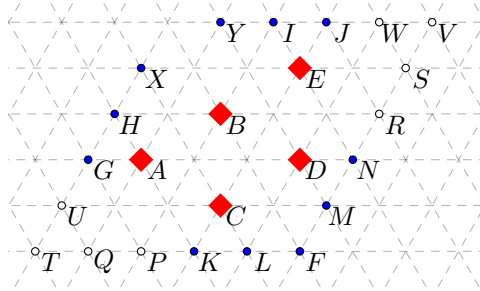


Figure 6

□

Lemma 2.5. *Let \mathbb{E}^2 be coloured in red and blue so that there is no red ℓ_2 . Let \mathfrak{L} be a unit triangular lattice that contains three red points forming a \mathfrak{T}_3 . If there is no blue ℓ_5 , then the colouring of \mathfrak{L} is unique (up to translation or rotation by a multiple of 60°), and is depicted in Figure 7.*

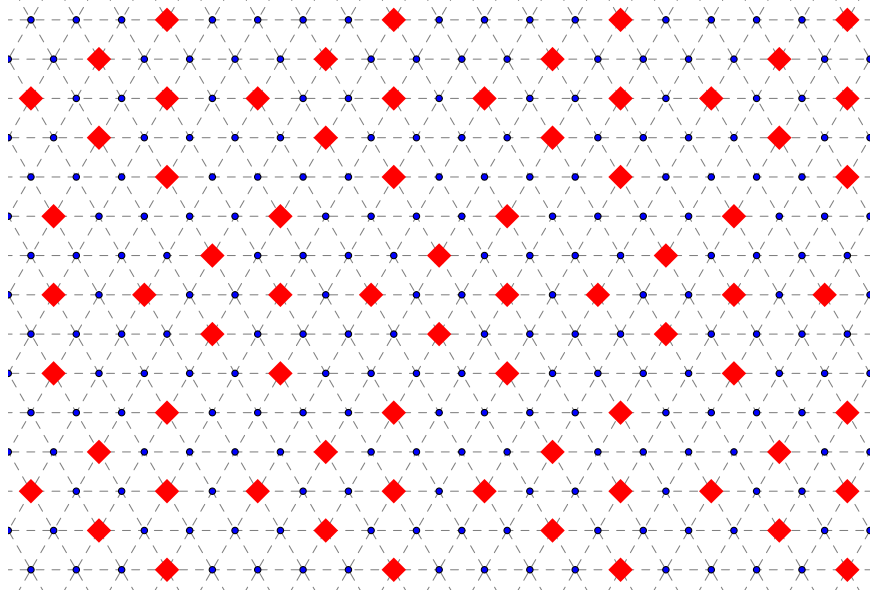


Figure 7

Proof. Suppose that \mathbb{E}^2 is coloured in red and blue so that there is no red ℓ_2 and no blue ℓ_5 . Suppose there exist three red points of \mathfrak{L} that form a \mathfrak{T}_3 . By Lemma 2.4, it may be assumed that there is a red \mathfrak{T}_6 . Denote its points by A, B, C, D, E, F (see Figure 8). It will be proved that the translate $A'B'C'D'E'F'$ of $ABCDEF$ by the vector of length 5 collinear to \overrightarrow{AD} is red.

Consider the points shown in Figure 8. Since A, D and F are red, by Lemma 2.2, I is blue. Since C, F and D are red, by Lemma 2.2, J is blue. Points K, L, M, N are blue, since each one is distance 1 apart from a red point. If R is red, then both P and Q are blue and form a blue ℓ_5 with K, L and I . Therefore R is blue. Then the point A' is red (otherwise $A'JNMR$ is a red ℓ_5).

Since S_1, S_2, S_3, S_4 are blue (as distance 1 apart from red points D and A'), B' is red. Similarly, F' is red. Points V and W are blue as they are distance 1 apart from C . Points U is blue by Lemma 2.2 (since A, D and B are red). If X is red, then X_1 and X_2 are blue and a blue ℓ_5 $UVWX_1X_2$ is formed. Therefore, X is blue. Similarly, Y is blue. By Lemma 2.4, $A'B'F'$ must be contained in a red \mathfrak{T}_6 , and since X and Y are blue, the only possible such \mathfrak{T}_6 is $A'B'C'D'E'F'$. Hence, A', B', C', D', E', F' are blue.

Similarly, the translates of $ABCDEF$ by vectors of length 5 collinear to \overrightarrow{EB}

and \overrightarrow{CF} are red. By repeatedly applying the same argument to the new red translates, it can be seen that all the translates of $ABCDEF$ by a multiple of 5 in \mathcal{L} are red. All the other points are blue, as each one is distance 1 apart from a red point. Hence, the colouring as in Figure 7 is obtained. \square

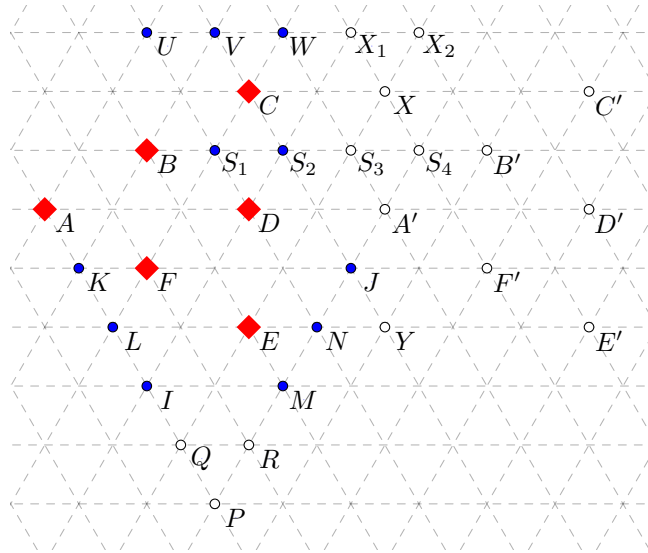


Figure 8

Lemma 2.6. *Let \mathbb{E}^2 be coloured in red and blue so that there is no red ℓ_2 . Let \mathcal{L} be a unit triangular lattice that does not contain three red points forming a \mathfrak{T}_3 . If there is no blue ℓ_5 , then the colouring of \mathcal{L} is unique (up to translation or rotation by a multiple of 60°), and is depicted in Figure 9.*

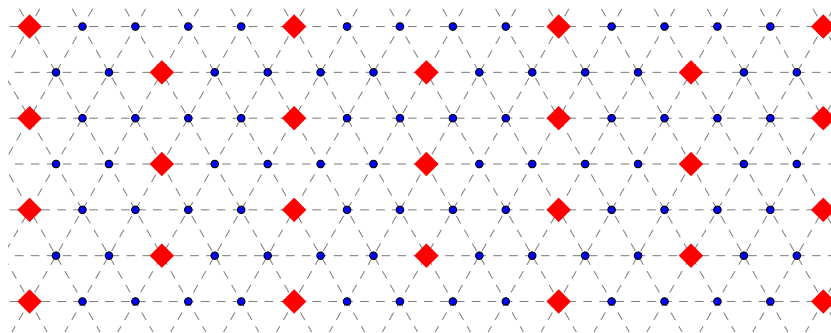


Figure 9

Proof. Suppose that \mathbb{E}^2 is coloured in red and blue so that there is no red ℓ_2 and no blue ℓ_5 . If \mathcal{L} does not contain a red point, then any ℓ_5 is blue, therefore \mathcal{L} contains a red point A . By Lemma 2.1, one of the points of \mathcal{L} at distance $\sqrt{3}$ to A is red (otherwise the three such points form a blue triangle with side length 3 and red centre A). Denote this point by B (Figure 10). Since \mathcal{L} does not contain a red \mathfrak{T}_3 , the points D and G are blue. Points E, F, I, H, K, J are blue, since they are distance 1 apart from B . Then the point B' is red (otherwise blue ℓ_5 $DEFG B'$ is formed). Point N is 1 apart from B' , hence blue. Then C and A' are red (otherwise a blue ℓ_5 is formed).

By repeating the same argument for points B and C , B and A (instead of A and B), and so on, it can be shown that any node of \mathcal{L} on the line AB is red. Similarly, since A' and B' are both red, any node of \mathcal{L} on the line $A'B'$ is red. By the same argument, A'', B'' and any node on the line containing them is red; A''', B''' and any node on the line containing them is red, and so on. By colouring all point distance 1 apart from red points blue, the colouring in Figure 9 is obtained. \square

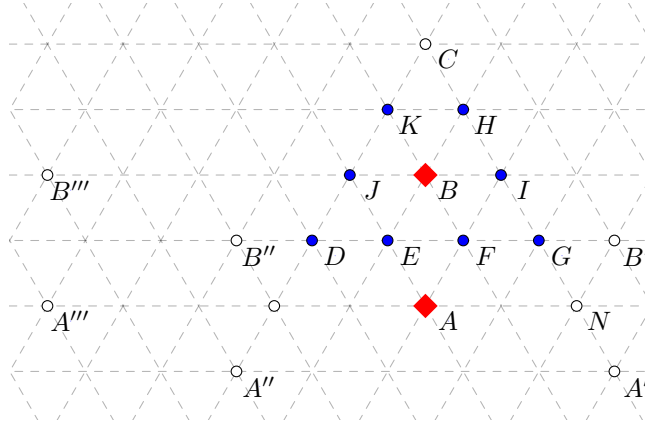


Figure 10

Proof of Theorem 1.1. Let the Euclidean space \mathbb{E}^2 be coloured in red and blue so that there are no two red points distance 1 apart. Suppose that there are no five blue points that form an ℓ_5 . Then there is a red point A . Consider two points B and C , both distance 5 apart from A , such that $|BC| = 1$. At least one of the points B and C (say, B) is blue. Consider the unit triangular lattice \mathcal{L} that contains A and B . By Lemma 2.5 and Lemma 2.6, \mathcal{L} is coloured either as in Figure 7 or as in Figure 9. But neither one of the colourings contains two points of different colour distance 5 apart, which gives a contradiction. Therefore, there exist five blue points that form an ℓ_5 . \square

3 Acknowledgements

The author would like to thank Ron Graham and Rozália Juhász for providing information about the current state of the problem, and David Gunderson for valuable comments.

References

- [1] A. Arman and S. Tsaturian, *A result in asymmetric Euclidean Ramsey theory* (2017). <https://arxiv.org/pdf/1702.04799.pdf>, accessed 27 March 2017.
- [2] P. Erdős, R. L. Graham, P. Montgomery, B. L. Rothschild, J. Spencer, and E. G. Straus, Euclidean Ramsey theorems. I, *J. Combin. Theory Ser. A* **14** (1973), 341–363.
- [3] P. Erdős, R. L. Graham, P. Montgomery, B. L. Rothschild, J. Spencer, and E. G. Straus, Euclidean Ramsey theorems. II, *Infinite and finite sets (Colloq., Keszthely, 1973; dedicated to P. Erdős on his 60th birthday), Vol. I*, North-Holland, Amsterdam, 1975, pp. 529–557. Colloq. Math. Soc. János Bolyai, Vol. 10.
- [4] P. Erdős, R. L. Graham, P. Montgomery, B. L. Rothschild, J. Spencer, and E. G. Straus, Euclidean Ramsey theorems. III, *Infinite and finite sets (Colloq., Keszthely, 1973; dedicated to P. Erdős on his 60th birthday), Vol. I*, North-Holland, Amsterdam, 1975, pp. 559–583. Colloq. Math. Soc. János Bolyai, Vol. 10.
- [5] R. L. Graham, Euclidean Ramsey theory, in *Handbook of discrete and computational geometry* (J. E. Goodman and J. O’Rourke, Eds.), 2nd ed., Chapman & Hall/CRC, Boca Raton, FL, 2004.
- [6] L. Iván, *Monochromatic point sets in the plane and in the space*, 1979. Masters Thesis, University of Szeged, Bolyai Institute (in Hungarian).
- [7] R. Juhász, Ramsey type theorems in the plane, *J. Combin. Theory Ser. A* **27** (1979), 152–160.