

Minor stars in plane graphs with minimum degree five

Yangfan Li Mengjiao Rao Tao Wang*

Institute of Applied Mathematics

Henan University, Kaifeng, 475004, P. R. China

Abstract

The weight of a subgraph H in G is the sum of the degrees in G of vertices of H . The *height* of a subgraph H in G is the maximum degree of vertices of H in G . A star in a given graph is minor if its center has degree at most five in the given graph. Lebesgue (1940) gave an approximate description of minor 5-stars in the class of normal plane maps with minimum degree five. In this paper, we give two descriptions of minor 5-stars in plane graphs with minimum degree five. By these descriptions, we can extend several results and give some new results on the weight and height for some special plane graphs with minimum degree five.

1 Introduction

A *normal plane map* (NPM for short) is a connected plane pseudograph in which loops and multiple edges are allowed, but the degree of each vertex and face is at least three. A *3-polytope* is a 3-connected plane graph. Clearly, each 3-polytope is a normal plane map. The class of normal plane maps with minimum degree five is denoted by \mathbf{M}_5 , and the class of 3-polytopes with minimum degree at least five is denoted by \mathbf{P}_5 . A $(k_1, k_2, k_3, k_4, k_5)$ -star is a star with $\deg(v_i) \leq k_i$, where v_i s are neighbors of the center in any order. A k -star is a star with k rays. A star in a given graph is *minor* if its center has degree at most five in the given graph.

The *weight* of a subgraph H in G is the sum of $\deg_G(v)$ by taking over all $v \in V(H)$. The *height* of a subgraph H in G is the maximum degree of vertices of H in G . Let Ω_Δ be the minimum integer such that there is a minor 5-star with weight at most Ω_Δ in every plane graph with minimum degree five and maximum degree Δ .

In 1904, Wernicke [22] proved that every M_5 has a 5-vertex adjacent to a 6⁻-vertex, that is a (5, 6)-edge. This was strengthened by Franklin [17] in 1922 to the existence of a minor (6, 6)-star, that is a (6, 5, 6)-path. In 1996, Jendrol' and Madaras [19] gave a precise description of minor 3-stars in \mathbf{M}_5 : there is a minor (6, 6, 6)- or (5, 6, 7)-star. In 1998, Borodin and Woodall [16] showed that the minimum weight of minor 4-star in \mathbf{M}_5 is at most 30, which is best possible. Furthermore, Borodin and Ivanova [3] gave a tight description of minor 4-stars in \mathbf{M}_5 .

In 1940, Lebesgue [21] gave an approximate description of minor 5-stars in \mathbf{M}_5 , which implies that $\Omega_\Delta \leq \Delta + 31$, and $\Omega_\Delta \leq \Delta + 27$ for $\Delta \geq 41$. In 1998, Borodin and Woodall [16] strengthened the first of these results to $\Omega_\Delta \leq \Delta + 30$. This result is sharp for $\Delta = 7$ due to Borodin [1] and Jendrol'–Madaras [19], $\Delta = 9$ due to Borodin–Ivanova [3], $\Delta = 10$ due to Jendrol'–Madaras [19], $\Delta = 12$ due to Borodin–Woodall [16]. Recently, Borodin and Ivanova [9] showed that $\Omega_8 = 38$, $\Omega_{11} = 41$ and $\Omega_{13} = 42$. Hence, Borodin–Woodall's bound $\Delta + 30$ is sharp for every integer Δ in $\{7, 8, \dots, 12\}$, and we have known the exact value of Ω_Δ for every integer Δ with $7 \leq \Delta \leq 13$. On the other hand, it is known that $\Omega_{20} = 48$.

As for Lebesgue's bound $\Omega_\Delta \leq \Delta + 27$ for $\Delta \geq 41$, it was strengthened by Borodin, Ivanova and Jensen [10] to $\Omega_\Delta \leq \Delta + 27$ for $\Delta \geq 28$, and further by Borodin and Ivanova [5] to $\Omega_\Delta \leq \Delta + 27$ for $\Delta \geq 24$.

In general, the description of minor stars is unordered for the neighbors of the center. In this paper, we give two descriptions of neighbors of 5-vertices in a cyclic order. A $(\kappa_1, \kappa_2, \kappa_3, \kappa_4, \kappa_5)$ -star is a star with center having degree five and the other vertices having degrees $\leq \kappa_1, \leq \kappa_2, \leq \kappa_3, \leq \kappa_4, \leq \kappa_5$ in a cyclic order.

The first purpose of this paper is to give the following description of minor 5-stars in plane graphs with minimum degree five. Furthermore, this description of minor 5-stars can imply the tight description of minor 4-stars. For a problem of complete (tight) description of minor 5-stars in plane graphs with minimum degree five, we refer the reader to [3].

*Corresponding author: wangtao@henu.edu.cn; iwangtao8@gmail.com

Theorem 1. If G is a plane graph with minimum degree five, then G contains at least one of the following minor 5-stars:

$\langle 5, 7, 7, 5, 17 \rangle$, $\langle 5, 7, 8, 5, 11 \rangle$, $\langle 5, 7, 5, 8, 8 \rangle$, $\langle 8, 5, 5, 11, 6 \rangle$, $\langle 8, 5, 5, 8, 7 \rangle$, $\langle 8, 5, 5, 7, 8 \rangle$,
 $\langle 8, 5, 5, 6, 9 \rangle$, $\langle 5, 6, 5, 8, 11 \rangle$, $\langle 5, 6, 6, 5, \infty \rangle$, $\langle 5, 6, 6, 6, 17 \rangle$, $\langle 6, 6, 6, 6, 11 \rangle$, $\langle 6, 6, 6, 7, 8 \rangle$,
 $\langle 6, 6, 7, 6, 8 \rangle$, $\langle 5, 6, 6, 11, 7 \rangle$, $\langle 5, 6, 11, 6, 7 \rangle$, $\langle 5, 6, 6, 8, 8 \rangle$, $\langle 5, 6, 8, 6, 8 \rangle$, $\langle 5, 7, 6, 8, 7 \rangle$,
 $\langle 5, 6, 7, 7, 7 \rangle$, $\langle 5, 6, 6, 7, 11 \rangle$, $\langle 5, 6, 7, 6, 11 \rangle$, $\langle 5, 7, 6, 7, 8 \rangle$, $\langle 5, 7, 7, 6, 8 \rangle$, $\langle 5, 7, 6, 6, 14 \rangle$,
 $\langle 5, 8, 6, 6, 11 \rangle$, $\langle 5, 5, 7, 6, 14 \rangle$, $\langle 5, 6, 7, 5, 35 \rangle$, $\langle 5, 6, 8, 5, 15 \rangle$, $\langle 5, 6, 9, 5, 10 \rangle$, $\langle 5, 6, 11, 5, 9 \rangle$,
 $\langle 5, 5, 10, 5, 12 \rangle$, $\langle 5, 7, 11, 5, 8 \rangle$, $\langle 5, 6, 5, 7, 14 \rangle$, $\langle 5, 5, 9, 5, 17 \rangle$. \square

The following theorems are immediate consequences of [Theorem 1](#). Recall that the bounds in [Theorem 2, 3, 5–7](#) are sharp.

Theorem 2 (Borodin and Ivanova [9]). Let Δ be an integer with $\Delta \geq 13$. Every 3-polytope with minimum degree five and maximum degree Δ has a minor 5-star with weight at most $\Delta + 29$.

Theorem 3 (Borodin and Woodall [16]). Every plane graph with minimum degree five has a minor 4-star with weight at most 30.

Theorem 4 (Jendrol' and Madaras [19]). Every plane graph with minimum degree five has a minor (10, 10, 10, 10)-star.

Theorem 5 (Jendrol' and Madaras [19]). Every plane graph with minimum degree five has a minor (5, 6, 7)-star or a minor (6, 6, 6)-star.

Theorem 6 (Franklin [17]). Every plane graph with minimum degree five has a (6, 5, 6)-path.

Theorem 7 (Wernicke [22]). Every plane graph with minimum degree five has a (5, 6)-edge.

Theorem 8. Every plane graph with minimum degree five having no 7-vertices and no 8-vertices contains at least one of the following minor 5-stars: a $\langle 5, 6, 6, 5, \infty \rangle$ -star, a $\langle 5, 6, 6, 6, 17 \rangle$ -star, a $\langle 6, 6, 6, 6, 11 \rangle$ -star, a $\langle 5, 6, 9, 5, 10 \rangle$ -star, a $\langle 5, 6, 11, 5, 9 \rangle$ -star, a $\langle 5, 5, 10, 5, 12 \rangle$ -star, a $\langle 5, 5, 9, 5, 17 \rangle$ -star.

Theorem 9. Every plane graph with minimum degree five having no vertices of degrees from 7 to 9 contains at least one of the following minor 5-stars: a $\langle 5, 6, 6, 5, \infty \rangle$ -star, a $\langle 5, 6, 6, 6, 17 \rangle$ -star, a $\langle 6, 6, 6, 6, 11 \rangle$ -star, a $\langle 5, 5, 10, 5, 12 \rangle$ -star.

Theorem 10. Every plane graph with minimum degree five having no vertices of degrees from 7 to 11 contains at least one of the following minor 5-stars: a $\langle 5, 6, 6, 5, \infty \rangle$ -star, a $\langle 5, 6, 6, 6, 17 \rangle$ -star, a $\langle 6, 6, 6, 6, 6 \rangle$ -star.

Theorem 11 (Borodin and Ivanova [6]). Every 3-polytope with minimum degree five having neither vertices of degrees from 6 to 9 nor $\langle 5, 5, 5, 5, \infty \rangle$ -star has a minor 5-star of weight at most 42 and a minor 5-star of height at most 12.

Remark 1. A tight description "a $\langle 5, 6, 6, 5, \infty \rangle$ -star, a $\langle 5, 6, 6, 6, 15 \rangle$ -star, a $\langle 6, 6, 6, 6, 6 \rangle$ -star" for 3-polytope with minimum degree 5 and without vertices of degrees from 7 to 11 was obtained in [11]. By [Theorem 1](#), the desired minor 5-star to achieve the upper bounds in [Theorem 11](#) is a $\langle 5, 5, 10, 5, 12 \rangle$ -star. Borodin and Ivanova [6] have provided a minor 5-star to show the sharpness of the bounds in [Theorem 11](#).

The second purpose of this paper is to give another description of minor 5-stars plane graph with minimum degree five.

Theorem 12. If G is a plane graph with minimum degree five, then G contains at least one of the following minor 5-stars:

$\langle 5, 5, 5, 7, 17 \rangle$, $\langle 7, 5, 5, 7, 11 \rangle$, $\langle 7, 5, 5, 8, 9 \rangle$, $\langle 7, 5, 5, 9, 8 \rangle$, $\langle 7, 5, 5, 11, 7 \rangle$, $\langle 5, 5, 5, 8, 11 \rangle$,
 $\langle 8, 5, 5, 9, 7 \rangle$, $\langle 8, 5, 5, 11, 6 \rangle$, $\langle 6, 6, 6, 6, 11 \rangle$, $\langle 6, 6, 6, 7, 9 \rangle$, $\langle 6, 6, 7, 6, 9 \rangle$, $\langle 6, 6, 7, 7, 7 \rangle$,
 $\langle 6, 7, 6, 7, 7 \rangle$, $\langle 5, 6, 6, 8, 9 \rangle$, $\langle 5, 6, 8, 6, 9 \rangle$, $\langle 5, 6, 7, 7, 9 \rangle$, $\langle 5, 6, 6, 7, 11 \rangle$, $\langle 5, 6, 7, 6, 11 \rangle$,
 $\langle 5, 7, 6, 7, 9 \rangle$, $\langle 5, 7, 7, 6, 9 \rangle$, $\langle 5, 6, 6, 6, 17 \rangle$, $\langle 5, 7, 6, 6, 11 \rangle$, $\langle 5, 8, 6, 6, 10 \rangle$, $\langle 5, 9, 6, 6, 9 \rangle$,
 $\langle 5, 5, 9, 6, 9 \rangle$, $\langle 5, 6, 6, 5, \infty \rangle$, $\langle 5, 6, 7, 5, 23 \rangle$, $\langle 5, 6, 8, 5, 15 \rangle$, $\langle 5, 6, 9, 5, 14 \rangle$, $\langle 5, 9, 5, 6, 10 \rangle$,
 $\langle 5, 8, 5, 6, 11 \rangle$, $\langle 5, 7, 5, 6, 17 \rangle$, $\langle 5, 7, 7, 5, 11 \rangle$, $\langle 5, 7, 8, 5, 9 \rangle$, $\langle 5, 8, 5, 7, 9 \rangle$, $\langle 5, 7, 5, 7, 11 \rangle$,
 $\langle 5, 7, 5, 8, 10 \rangle$, $\langle 5, 7, 5, 9, 9 \rangle$, $\langle 5, 5, 10, 5, 14 \rangle$, $\langle 5, 5, 11, 5, 13 \rangle$. \square

The following theorems are immediate consequences of [Theorem 12](#).

Theorem 13. If G is a plane graph with minimum degree 5 and maximum degree $\Delta \geq 16$, then G has a minor 5-star with weight at most $\Delta + 28$.

Theorem 14. Every plane graph with minimum degree five and no $\langle 5, 6, 6, 5, \infty \rangle$ -stars and no $\langle 5, 6, 7, 5, 23 \rangle$ -stars has a minor 5-star of weight at most 45 and height at most 17.

Theorem 15. Every plane graph with minimum degree five and no $\langle 5, 5, 5, 5, \infty \rangle$ -stars and no 6-vertices and no 7-vertices has a minor 5-star of weight at most 44 and height at most 15.

Theorem 16 (Borodin and Ivanova [5]). Every plane graph with minimum degree five and no $\langle 5, 6, 6, 5, \infty \rangle$ -star has a minor 5-star of weight at most 51 and height at most 23.

Remark 2. By [Theorem 12](#), the desired minor 5-star to achieve the upper bounds in [Theorem 16](#) is a $\langle 5, 6, 7, 5, 23 \rangle$ -star.

Note that our results do not require the "3-connected" condition for the plane graphs with minimum degree five, so the class of graphs we considered is a little bit bigger than \mathbf{P}_5 . For other results related to minor stars, we refer the reader to [2, 4, 7, 8, 11–15, 18], and more general results on the theory of light subgraphs in plane graphs has been presented recently in a nice survey [20]. We use the classic discharging method and the ideas in [5, 6, 9] to give a proof of [Theorem 1](#) in [Section 2](#) and a proof of [Theorem 12](#) in [Section 3](#).

Notions: In a plane graph with minimum degree five, let $v_1, v_2, \dots, v_\kappa$ be the neighbors of a κ -vertex v in a cyclic order. If v_i is a 5-vertex and two of v_{i-1}, v_{i+1} are 6^+ -vertices, then v_i is called a *strong* 5-neighbor of v ; if v_i is a 5-vertex but it is not a strong 5-neighbor of v , then v_i is called a *non-strong* 5-neighbor; if v_{i-1}, v_i, v_{i+1} are all 5-vertices, then v_i is called a *weak* 5-neighbor of v ; if $v_{i-2}, v_{i-1}, v_i, v_{i+1}, v_{i+2}$ are all 5-vertices, then v_i is called a *twice-weak* 5-neighbor of v .

2 Proof of [Theorem 1](#)

Let G be a connected counterexample to [Theorem 1](#) with maximum number of edges.

(*₁) The graph G is a triangulation.

Proof of (*₁). Suppose that w_1, w_2, w_3, w_4 are four consecutive vertices on the boundary of a 4^+ -face. Since G is a simple graph, we have that $w_1 \neq w_3$ and $w_2 \neq w_4$. Note that G is also a plane graph, thus we have that $w_1w_3 \notin E(G)$ or $w_2w_4 \notin E(G)$, otherwise the two lines representing w_1w_3 and w_2w_4 would cross each other outside the 4^+ -face. But an insertion of a diagonal w_1w_3 or w_2w_4 into the 4^+ -face would create a simple counterexample with more edges, which contradicts the assumption of G . \square

Euler's formula $|V| - |E| + |F| = 2$ for G can be rewritten as the following:

$$\sum_{v \in V(G)} (\deg(v) - 6) + \sum_{f \in F(G)} (2 \deg(f) - 6) = \sum_{v \in V(G)} (\deg(v) - 6) = -12.$$

Initially, we give every vertex v an initial charge $\mu(v) = \deg(v) - 6$, and give every face f an initial charge $\mu(f) = 2 \deg(f) - 6$. Note that every face has an initial charge zero and every vertex has a nonnegative initial charge except the 5-vertices. Next, we redistribute the charges among the vertices, preserving their sum, such that the final charge $\mu'(v)$ of every vertex v is nonnegative, which contradicts the fact that the sum of the initial charges is negative.

Let

$$\alpha(\kappa) = \begin{cases} \frac{\kappa-6}{\kappa}, & \text{if } \kappa \geq 8 \text{ and } \kappa \notin \{11, 13, 14\}; \\ \frac{2}{5}, & \text{if } \kappa = 11; \\ \frac{1}{2}, & \text{if } \kappa = 13, 14. \end{cases}$$

2.1 Discharging rules

R1a Each 7-vertex sends $\frac{1}{3}$ to each strong 5-neighbor.

R1b Each 7-vertex sends $\frac{1}{6}$ to each non-strong 5-neighbor.

R2 Let $w w_1 w_2$ be a 3-face with $\deg(w) = \kappa$, where $\kappa \geq 8$ and $\kappa \notin \{10, 11\}$.

R2a If both w_1 and w_2 are 5-vertices, then w sends $\frac{\alpha(\kappa)}{2}$ to each of w_1 and w_2 through this face.

R2b If w_1 is a 5-vertex and w_2 is a 6^+ -vertex, then w sends $\alpha(\kappa)$ to w_1 through this face.

R3 Let w be a κ -vertex with $\kappa = 10, 11$. Each such vertex w sends $\frac{2}{3}$ to each adjacent vertex. Let w_0, w_1, w_2 be three consecutive neighbors of w in a cyclic order. Suppose that w_0 is a 6^+ -vertex and w_1 is a 5-vertex.

R3a If w_2 is a 6^+ -vertex, then w_0 transfers a charge of $\frac{1}{5}$ to w_1 .

R3b If w_2 is a 5-vertex, then w_0 transfers a charge of $\frac{1}{10}$ to each of w_1 and w_2 .

R4 Each 11-vertex additionally sends $\frac{1}{10}$ to each twice-weak 5-neighbor.

R5 Each 13-vertex or 14-vertex additionally sends $\frac{1}{20}$ to each weak 5-neighbor.

R6 Suppose that w is a 5-vertex with neighbors w_0, w_1, w_2, w_3, w_4 in a cyclic order, and w_0, w_1, w_2, w_3, w_4 have degrees $\kappa_0, 5, \kappa_2, \kappa_3, 5$, respectively.

R6a If $\kappa_2, \kappa_3 \geq 8$ and $\kappa_0 = 13$, then w returns $\frac{1}{4}$ to w_0 .

R6b If $\kappa_2, \kappa_3 \geq 9$, $\kappa_0 = 11$ and w is a twice-weak 5-neighbor of w_0 , then w returns $\frac{1}{2}$ to w_0 .

R6c If $\kappa_2, \kappa_3 = 8$, $\kappa_0 = 11$ and w is a twice-weak 5-neighbor of w_0 , then w returns $\frac{1}{4}$ to w_0 .

R6d If $\kappa_2, \kappa_3 \geq 9$ and $\kappa_0 = 7$, then w returns $\frac{1}{6}$ to w_0 .

R7 Suppose that w is a 5-vertex with neighbors w_1, w_2, w_3, w_4, w_5 in a cyclic order, and w_1, w_2, w_3, w_4 have degrees $\kappa_1, 5, 5, \kappa_4$, respectively.

R7a If $\kappa_1 \geq 12$ and $\kappa_4 \geq 16$, then w donates $\frac{1}{8}$ to w_3 .

R7b If $\kappa_1 \geq 12$ and $\kappa_4 = 13, 14, 15$, then w donates $\frac{1}{20}$ to w_3 .

R7c If $\kappa_1 = 8$ and $\kappa_4 \leq 11$, then w donates $\frac{1}{8}$ to w_2 .

Remark 3. By **R3**, each 10-vertex sends $\frac{4}{5}$ to each strong 5-neighbor, sends $\frac{2}{5}$ to each adjacent twice-weak 5-neighbor, and sends at least $\frac{1}{2}$ to any other 5-neighbor.

Remark 4. By **R3** and **R4**, each 11-vertex sends $\frac{4}{3}$ to each strong 5-neighbor, and sends at least $\frac{1}{2}$ to any other 5-neighbor.

2.2 The final charge of every vertex is nonnegative

Case 1. If v is a κ -vertex with $\kappa \geq 8$ and $\kappa \notin \{11, 13, 14\}$, then $\mu'(v) \geq \kappa - 6 - \kappa \cdot \alpha(\kappa) = 0$.

Case 2. If v is a 14-vertex, then $\mu'(v) \geq 14 - 6 - 14 \cdot \alpha(14) - 14 \cdot \frac{1}{20} \geq 0$.

Case 3. The vertex v is a 13-vertex.

If v has one 6^+ -neighbor, then it has at most ten weak 5-neighbors, which implies that $\mu'(v) \geq 13 - 6 - 13 \cdot \alpha(13) - 10 \cdot \frac{1}{20} = 0$. So we may assume that v is adjacent to thirteen 5-vertices. By the oddness of the integer 13 and the absence of $\langle 5, 7, 7, 5, 17 \rangle$ -stars, the vertex v is involved as the receiver in **R6a**, so $\mu'(v) \geq 13 - 6 - 13 \cdot (\frac{1}{2} + \frac{1}{20}) + \frac{1}{4} \geq 0$.

Case 4. The vertex v is an 11-vertex.

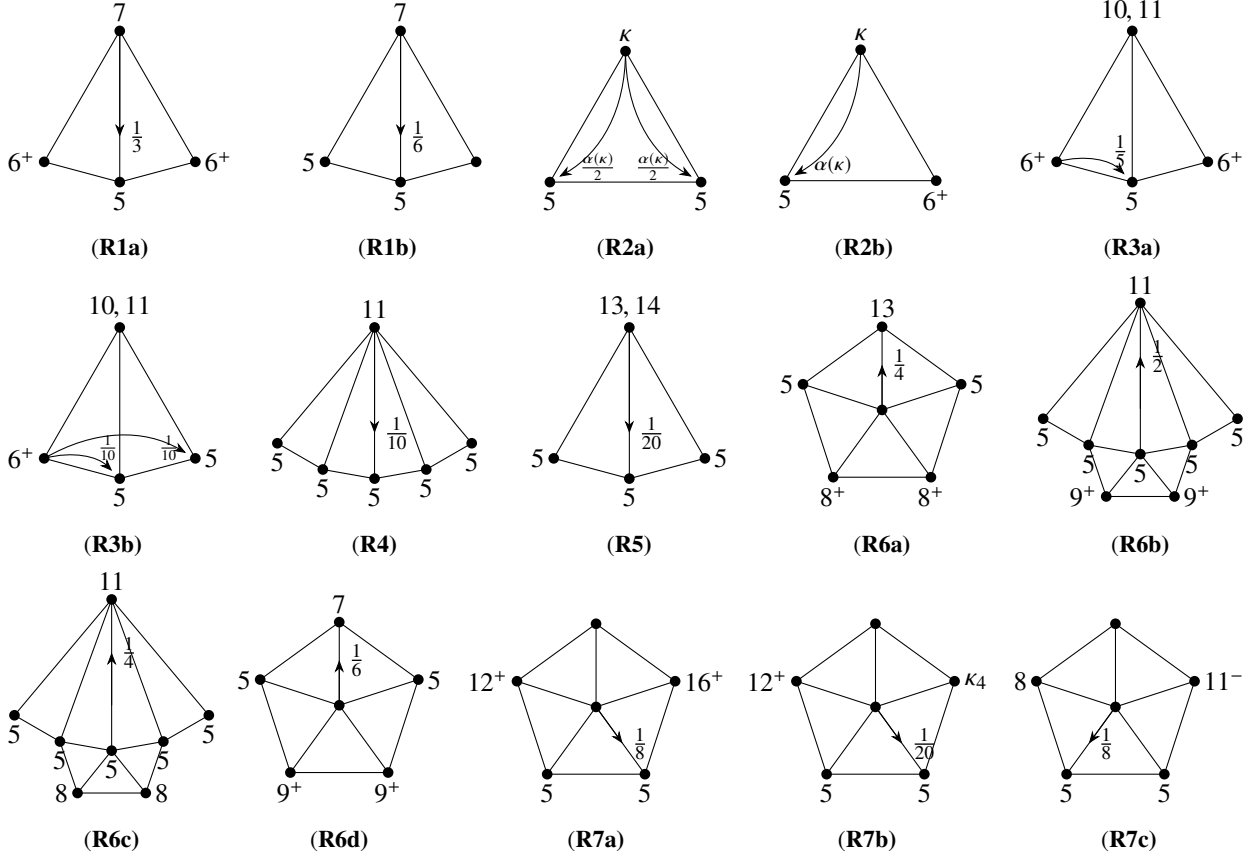


Fig. 1: Discharging rules for [Theorem 1](#). Note that $\kappa \geq 8$ and $\kappa \notin \{10, 11\}$ in [\(R2a\)](#) and [\(R2b\)](#), while $\kappa_4 \in \{13, 14, 15\}$ in [\(R7b\)](#).

If v has a 6^+ -neighbor, then it has at most six twice-weak neighbors, which implies that $\mu'(v) \geq 11 - 6 - 11 \cdot \frac{2}{5} - 6 \cdot \frac{1}{10} = 0$. It remains to assume that v has eleven 5-neighbors. If v is involved as the receiver in [R6b](#), then $\mu'(v) \geq 11 - 6 - 11 \cdot (\frac{2}{5} + \frac{1}{10}) + \frac{1}{2} = 0$. In the final case, the vertex v is in a $\langle 5, 8, 8, 5, 11 \rangle$ -star due to the oddness of the integer 11, so we have that $\mu'(v) \geq 11 - 6 - 11 \cdot (\frac{2}{5} + \frac{1}{10}) + 3 \cdot \frac{1}{4} \geq 0$ by [R6c](#); otherwise, there is a $\langle 5, 7, 8, 5, 11 \rangle$ -star.

Case 5. The vertex v is a 7-vertex.

If v has at most three 5-neighbors, then $\mu'(v) \geq 7 - 6 - 3 \cdot \frac{1}{3} = 0$. If v has exactly four 5-neighbors, then v has exactly three 6^+ -neighbors and has at most two strong 5-neighbors, which implies that $\mu'(v) \geq 7 - 6 - 2 \cdot \frac{1}{3} - 2 \cdot \frac{1}{6} = 0$. If v has exactly five 5-neighbors, then v has at most one strong 5-neighbor, which implies that $\mu'(v) \geq 7 - 6 - \frac{1}{3} - 4 \cdot \frac{1}{6} = 0$. If v has exactly six 5-neighbors, then v has no strong 5-neighbor, which implies that $\mu'(v) \geq 7 - 6 - 6 \cdot \frac{1}{6} = 0$. If v has seven 5-neighbors, then [R6d](#) is involved and $\mu'(v) \geq 7 - 6 - 7 \cdot \frac{1}{6} + \frac{1}{6} = 0$, for otherwise there is a $\langle 5, 7, 5, 8, 8 \rangle$ -star.

Case 6. The vertex v is a 5-vertex with neighbors v_1, v_2, v_3, v_4, v_5 in a cyclic order. Suppose that v_1, v_2, v_3, v_4, v_5 have degrees $\kappa_1, \kappa_2, \kappa_3, \kappa_4, \kappa_5$ respectively. Note that the initial charge of v is -1 .

If v is the sender in [R6a](#), then $\mu'(v) \geq -1 + 2 \cdot \frac{3}{8} + \frac{1}{2} - \frac{1}{4} = 0$. If v is the sender in [R6b](#), then $\mu'(v) \geq -1 + 2 \cdot \frac{1}{2} + (\frac{2}{5} + \frac{1}{10}) - \frac{1}{2} = 0$. If v is the sender in [R6c](#), then $\mu'(v) \geq -1 + 2 \cdot \frac{3}{8} + (\frac{2}{5} + \frac{1}{10}) - \frac{1}{4} = 0$. If v is the sender in [R6d](#), then $\mu'(v) \geq -1 + 2 \cdot \frac{1}{2} + \frac{1}{6} - \frac{1}{6} = 0$.

Suppose that $\kappa_1, \kappa_4 \geq 12$ and $\kappa_2 = \kappa_3 = 5$. If $\kappa_4 = 12$, then v receives at least $\frac{1}{2}$ from v_4 and sends nothing to v_3 . If $\kappa_4 = 13, 14, 15$, then v receives at least $\frac{11}{20}$ from v_4 and sends $\frac{1}{20}$ to v_3 by [R2](#), [R5](#) and [R7b](#), which implies that v keeps at least $\frac{1}{2}$ from v_4 . If $\kappa_4 \geq 16$, then v receives at least $\frac{5}{8}$ from v_4 and sends $\frac{1}{8}$ to v_3 by [R2](#) and [R7a](#), which implies that v keeps at least $\frac{1}{2}$ from v_4 . In conclusion, v keeps at least $\frac{1}{2}$ from v_4 whenever $\kappa_4 \geq 12$, and symmetrically v keeps at least $\frac{1}{2}$ from v_1 , which implies that $\mu'(v) \geq -1 + 2 \cdot \frac{1}{2} = 0$.

Suppose that $\kappa_1 = 8$, $\kappa_2 = \kappa_3 = 5$ and $\kappa_4 \leq 11$. Then v is involved as a sender in **R7c**. By the absence of $\langle 8, 5, 5, 11, 6 \rangle$ -star, we have that $\kappa_5 \geq 7$. If $\kappa_5 = 7$, then $\kappa_4 \geq 9$ and $\mu'(v) \geq -1 + (\frac{3}{8} - \frac{1}{8}) + \frac{1}{3} + \frac{1}{2} \geq 0$, for otherwise there is a $\langle 8, 5, 5, 8, 7 \rangle$ -star. If $\kappa_5 = 8$, then $\kappa_4 \geq 8$ and $\mu'(v) \geq -1 + (\frac{3}{8} - \frac{1}{8}) + \frac{1}{2} + \frac{1}{4} \geq 0$, for otherwise there is a $\langle 8, 5, 5, 7, 8 \rangle$ -star. If $\kappa_5 = 9$, then $\kappa_4 \geq 7$ and $\mu'(v) \geq -1 + (\frac{3}{8} - \frac{1}{8}) + \frac{2}{3} + \frac{1}{6} \geq 0$, for otherwise there is a $\langle 8, 5, 5, 6, 9 \rangle$ -star. If $\kappa_5 = 10, 11$, then $\kappa_4 \geq 6$ and $\mu'(v) \geq -1 + (\frac{3}{8} - \frac{1}{8}) + \frac{4}{5} \geq 0$, for otherwise there is a $\langle 8, 5, 5, 5, 11 \rangle$ -star. If $\kappa_5 \geq 12$, then $\mu'(v) \geq -1 + (\frac{3}{8} - \frac{1}{8}) + \frac{3}{4} \geq 0$.

So we may assume that the 5-vertex v is just a receiver in what follows. Suppose that $\kappa_1, \kappa_2, \kappa_3, \kappa_4 \leq 6$, in other words, the vertex v is the center of a $\langle 6, 6, 6, 6, \infty \rangle$ -star. By the absence of $\langle 5, 6, 6, 5, \infty \rangle$ -stars, we have that $\max\{\kappa_1, \kappa_4\} = 6$. If $\min\{\kappa_1, \kappa_4\} = 5$, then $\mu'(v) \geq -1 + \frac{12}{18} + \frac{12}{36} = -1 + \frac{3}{2} \cdot \frac{2}{3} = 0$, for otherwise there is a $\langle 5, 6, 6, 6, 17 \rangle$ -star. If $\min\{\kappa_1, \kappa_4\} = 6$, then $\mu'(v) \geq -1 + 2 \cdot \frac{1}{2} = 0$, for otherwise there is a $\langle 6, 6, 6, 6, 11 \rangle$ -star. So we may further assume that v has at least two 7^+ -neighbors in what follows.

Subcase 6.1. The 5-vertex v has no 5-neighbor.

If v has at least three 7^+ -neighbors, then $\mu'(v) \geq -1 + 3 \cdot \frac{1}{3} = 0$. If v has at least two 8^+ -neighbors, then $\mu'(v) \geq -1 + 2 \cdot \frac{1}{2} = 0$. Hence, the vertex v has exactly three 6-neighbors and at most one 8^+ -neighbor, which implies that $\mu'(v) \geq -1 + \frac{1}{3} + \frac{2}{3} = 0$, for otherwise there is a $\langle 6, 6, 6, 7, 8 \rangle$ -, or $\langle 6, 6, 7, 6, 8 \rangle$ -star.

Subcase 6.2. The 5-vertex v has precisely one 5-neighbor v_1 .

By symmetry, we may assume that $\kappa_3 \leq \kappa_4$. If $\kappa_4 \geq 12$, then $\mu'(v) \geq -1 + 1 = 0$ and we are done.

Suppose that $\kappa_4 \in \{9, 10, 11\}$. If $\kappa_3 \geq 7$, then $\mu'(v) \geq -1 + \frac{2}{3} + \frac{1}{3} = 0$. If $\min\{\kappa_2, \kappa_5\} \geq 7$, then $\mu'(v) \geq -1 + \frac{2}{3} + 2 \cdot \frac{1}{6} = 0$. If $\min\{\kappa_2, \kappa_5\} = \kappa_3 = 6$, then $\mu'(v) \geq -1 + \frac{2}{3} + \frac{3}{8} \geq 0$, for otherwise there is a $\langle 5, 6, 6, 11, 7 \rangle$ - or $\langle 5, 6, 11, 6, 7 \rangle$ -star.

Suppose that v_4 is an 8-vertex. If $\kappa_3 = 8$, then $\mu'(v) \geq -1 + 2 \cdot \frac{1}{2} = 0$. If $\kappa_3 = 7$, then $\mu'(v) \geq -1 + \frac{1}{2} + \frac{1}{3} + \frac{1}{6} = 0$, for otherwise there is a $\langle 5, 6, 7, 8, 6 \rangle$ -star. If $\min\{\kappa_2, \kappa_5\} = \kappa_3 = 6$, then $\mu'(v) \geq -1 + 2 \cdot \frac{1}{2} = 0$, for otherwise there is a $\langle 5, 6, 6, 8, 8 \rangle$ -, or $\langle 5, 6, 8, 6, 8 \rangle$ -star. If $\kappa_3 = 6$ and $\min\{\kappa_2, \kappa_5\} \geq 7$, then $\mu'(v) \geq -1 + \frac{1}{2} + \frac{1}{6} + \frac{3}{8} \geq 0$, for otherwise there is a $\langle 5, 7, 6, 8, 7 \rangle$ -star.

Suppose that $\kappa_3 = \kappa_4 = 7$. If $\min\{\kappa_2, \kappa_5\} \geq 7$, then $\mu'(v) \geq -1 + 2 \cdot \frac{1}{3} + 2 \cdot \frac{1}{6} = 0$. If $\min\{\kappa_2, \kappa_5\} = 6$, then $\mu'(v) \geq -1 + 2 \cdot \frac{1}{3} + \frac{3}{8} \geq 0$, for otherwise there is a $\langle 5, 6, 7, 7, 7 \rangle$ -star.

Suppose that $\kappa_3 = 6$ and $\kappa_4 = 7$. If $\min\{\kappa_2, \kappa_5\} = 6$, then $\mu'(v) \geq -1 + \frac{1}{3} + \frac{3}{4} \geq 0$, for otherwise there is a $\langle 5, 6, 6, 7, 11 \rangle$ -, or $\langle 5, 6, 7, 6, 11 \rangle$ -star. If $\min\{\kappa_2, \kappa_5\} = 7$, then $\mu'(v) \geq -1 + \frac{1}{3} + \frac{1}{6} + \frac{1}{2} = 0$, for otherwise there is a $\langle 5, 7, 6, 7, 8 \rangle$ -, or $\langle 5, 7, 7, 6, 8 \rangle$ -star. If $\min\{\kappa_2, \kappa_5\} \geq 8$, then $\mu'(v) \geq -1 + \frac{1}{3} + 2 \cdot \frac{3}{8} \geq 0$.

Suppose that $\kappa_3 = \kappa_4 = 6$. If $\min\{\kappa_2, \kappa_5\} = 7$, then $\mu'(v) \geq -1 + \frac{1}{6} + \frac{3}{2} \cdot \frac{15-6}{15} \geq 0$, for otherwise there is a $\langle 5, 7, 6, 6, 14 \rangle$ -star. If $\min\{\kappa_2, \kappa_5\} = 8$, then $\mu'(v) \geq -1 + \frac{3}{8} + \frac{3}{4} \geq 0$, for otherwise there is a $\langle 5, 8, 6, 6, 11 \rangle$ -star. If $\min\{\kappa_2, \kappa_5\} \geq 9$, then $\mu'(v) \geq -1 + 2 \cdot \frac{1}{2} = 0$.

Subcase 6.3. The 5-vertex v has precisely two 5-neighbors v_2 and v_3 .

If $\min\{\kappa_1, \kappa_4\} \geq 9$, then $\mu'(v) \geq -1 + 2 \cdot \frac{1}{2} \geq 0$. If $\min\{\kappa_1, \kappa_4\} = 8$ and $\max\{\kappa_1, \kappa_4\} \geq 12$, then $\mu'(v) \geq -1 + \frac{3}{8} + \frac{3}{4} \geq 0$. Recall that the vertex v is just a receiver, so we may assume that $\min\{\kappa_1, \kappa_4\} \leq 7$ and $\max\{\kappa_1, \kappa_4\} \neq 8$ in the following of Subcase 6.3.

Suppose that $\min\{\kappa_1, \kappa_4\} = 6$. If $\max\{\kappa_1, \kappa_4\} = 7$, then $\kappa_5 \geq 12$ and $\mu'(v) \geq -1 + 1 + \frac{1}{6} \geq 0$, for otherwise there is a $\langle 6, 5, 5, 7, 11 \rangle$ -star. If $\max\{\kappa_1, \kappa_4\} = 9, 10, 11$, then $\kappa_5 \geq 8$ and $\mu'(v) \geq -1 + 2 \cdot \frac{1}{2} \geq 0$, for otherwise there is a $\langle 6, 5, 5, 11, 7 \rangle$ -star. If $\max\{\kappa_1, \kappa_4\} \geq 12$, then $\mu'(v) \geq -1 + \frac{1}{3} + \frac{3}{4} \geq 0$.

Suppose that $\min\{\kappa_1, \kappa_4\} = 7$. If $\max\{\kappa_1, \kappa_4\} = 7$, then $\kappa_5 \geq 9$ and $\mu'(v) \geq -1 + 2 \cdot \frac{1}{6} + \frac{2}{3} \geq 0$, for otherwise there is a $\langle 7, 5, 5, 7, 8 \rangle$ -star. If $9 \leq \max\{\kappa_1, \kappa_4\} \leq 14$, then $\kappa_5 \geq 7$ and $\mu'(v) \geq -1 + \frac{1}{6} + \frac{1}{2} + \frac{1}{3} \geq 0$, for otherwise there is a $\langle 7, 5, 5, 14, 6 \rangle$ -star. If $\max\{\kappa_1, \kappa_4\} \geq 15$, then $\mu'(v) \geq -1 + \frac{1}{6} + \frac{3}{2} \cdot \frac{3}{5} \geq 0$.

Subcase 6.4. The 5-vertex v has precisely two 5-neighbors v_1 and v_3 .

As before, we may assume that $\kappa_4 \leq \kappa_5$. If $\kappa_4 \geq 9$, then $\mu'(v) \geq -1 + 2 \cdot \frac{1}{2} = 0$.

Suppose that v_4 is a 6-vertex. If $\kappa_5 = 7$, then $\mu'(v) \geq -1 + \frac{1}{6} + \frac{36-6}{36} \geq 0$, for otherwise there is a $\langle 5, 6, 7, 5, 35 \rangle$ -star. If $\kappa_5 = 8$, then $\mu'(v) \geq -1 + \frac{3}{8} + \frac{16-6}{16} \geq 0$, for otherwise there is a $\langle 5, 6, 8, 5, 15 \rangle$ -star. If $\kappa_5 = 9$, then $\mu'(v) \geq -1 + 2 \cdot \frac{1}{2} = 0$, for otherwise there is a $\langle 5, 6, 9, 5, 10 \rangle$ -star. If $\kappa_5 \geq 15$, then $\mu'(v) \geq -1 + \frac{1}{6} + \frac{3}{2} \cdot \frac{15-6}{15} \geq 0$. If $12 \leq \kappa_5 \leq 14$, then

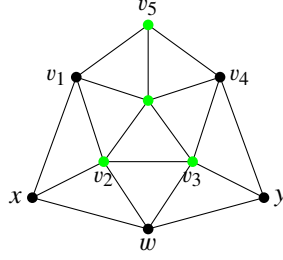


Fig. 2: v_5 is a 5-vertex

$\mu'(v) \geq -1 + \frac{3}{4} + \frac{1}{4} = 0$, for otherwise there is a $\langle 5, 7, 6, 6, 14 \rangle$ -star. The remaining case is $\kappa_5 = 10, 11$. By the absence of $\langle 5, 6, 11, 5, 9 \rangle$ -stars, we have that $\kappa_2 \geq 10$. If v receives at least $\frac{1}{2}$ from v_2 , then $\mu'(v) \geq -1 + 2 \cdot \frac{1}{2} = 0$. So we may assume that $\kappa_2 = 10$ and v is a twice-weak neighbor of v_2 . Let x, y, v_2, v, v_5 be the neighbors of v_1 in a cyclic order. Since v is a twice-weak neighbor of v_2 , the vertex y must be a 5-vertex. Note that v_1 is not the center of a $\langle 5, 5, 10, 5, 12 \rangle$ -star, thus x cannot be a 5-vertex. By **R3**, we have that $\mu'(v) \geq -1 + \frac{2}{5} + (\frac{2}{5} + 2 \cdot \frac{1}{10}) = 0$.

Suppose that v_4 is a 7-vertex. If $\kappa_5 = 7$, then $\mu'(v) \geq -1 + 2 \cdot \frac{1}{6} + \frac{18-6}{18} \geq 0$, for otherwise there is a $\langle 5, 7, 7, 5, 17 \rangle$ -star. If $\kappa_5 = 8$, then $\mu'(v) \geq -1 + \frac{1}{6} + \frac{3}{8} + \frac{1}{2} \geq 0$, for otherwise there is a $\langle 5, 7, 8, 5, 11 \rangle$ -star. If $9 \leq \kappa_5 \leq 11$, then $\mu'(v) \geq -1 + \frac{1}{6} + \frac{1}{2} + \frac{1}{3} = 0$, for otherwise there is a $\langle 5, 7, 11, 5, 8 \rangle$ -star. If $12 \leq \kappa_5 \leq 14$, then $\mu'(v) \geq -1 + 2 \cdot \frac{1}{6} + \frac{3}{4} \geq 0$, for otherwise there is a $\langle 5, 6, 5, 7, 14 \rangle$ -star. If $\kappa_5 \geq 15$, then $\mu'(v) \geq -1 + \frac{1}{6} + \frac{3}{2} \cdot \frac{15-6}{15} \geq 0$.

Suppose that v_4 is an 8-vertex. If $\kappa_2 \geq 8$, then $\mu'(v) \geq -1 + 2 \cdot \frac{3}{8} + \frac{1}{4} = 0$. If $\kappa_2 = 7$, then $\mu'(v) \geq -1 + \frac{1}{6} + \frac{3}{8} + \frac{1}{2} \geq 0$, for otherwise there is a $\langle 5, 7, 5, 8, 8 \rangle$ -star. If $\kappa_2 = 6$, then $\mu'(v) \geq -1 + \frac{3}{8} + \frac{3}{4} \geq 0$, for otherwise there is a $\langle 5, 6, 5, 8, 11 \rangle$ -star.

Subcase 6.5. The 5-vertex v has precisely three 5-neighbors v_1, v_2 and v_3 .

Note that v is just a receiver and it has at least two 7^+ -neighbors, so we have that $\min\{\kappa_4, \kappa_5\} \neq 6, 8$. If $\min\{\kappa_4, \kappa_5\} = 7$, then $\mu'(v) \geq -1 + \frac{1}{6} + \frac{3}{2} \cdot \frac{15-6}{15} \geq 0$, for otherwise there is a $\langle 5, 6, 5, 7, 14 \rangle$ -star. If $\min\{\kappa_4, \kappa_5\} \geq 9$, then $\mu'(v) \geq -1 + 2 \cdot \frac{1}{2} = 0$.

Subcase 6.6. The 5-vertex v has precisely three 5-neighbors v_2, v_3 and v_5 .

If $\min\{\kappa_1, \kappa_4\} \geq 11$, then $\mu'(v) \geq -1 + 2 \cdot \frac{1}{2} = 0$. If $\min\{\kappa_1, \kappa_4\} = 7$, then $\mu'(v) \geq -1 + \frac{1}{6} + \frac{36-6}{36} \geq 0$, for otherwise there is a $\langle 5, 6, 7, 5, 35 \rangle$ -star. If $\min\{\kappa_1, \kappa_4\} = 9$, then $\mu'(v) \geq -1 + \frac{1}{3} + \frac{18-6}{18} \geq 0$, for otherwise there is a $\langle 5, 5, 9, 5, 17 \rangle$ -star.

Suppose that $\min\{\kappa_1, \kappa_4\} = \kappa_1 = 8$. Since there is no $\langle 5, 5, 8, 5, 15 \rangle$ -stars, we must have that $\kappa_4 \geq 16$, see **Fig. 2**. The 5-vertex v receives $\frac{1}{8}$ from v_2 whenever w is a 11^- -vertex by **R7a**, otherwise it receives $\frac{1}{8}$ from v_3 whenever w is a 12^+ -vertex by **R7c**. Thus, $\mu'(v) \geq -1 + \frac{1}{4} + \frac{16-6}{16} + \frac{1}{8} = 0$.

It suffices to consider $\min\{\kappa_1, \kappa_4\} = \kappa_1 = 10$. By the absence of $\langle 5, 5, 10, 5, 12 \rangle$ -stars, we have that $\kappa_4 \geq 13$, see **Fig. 2**. If v is not a twice-weak 5-neighbor of v_1 , then $\mu'(v) \geq -1 + (\frac{2}{5} + \frac{1}{10}) + \frac{1}{2} = 0$ by **R2** and **R3**. So we may assume that v is a twice-weak 5-neighbor of v_1 , thus $\deg(w) \geq 13$ again by the absence of $\langle 5, 5, 10, 5, 12 \rangle$ -stars. If $\kappa_4 \in \{13, 14\}$, then v receives $\frac{1}{2}$ from v_4 by **R2**, and additionally $\frac{1}{20}$ from each of v_3 and v_4 by **R5** and **R7b**, then $\mu'(v) \geq -1 + \frac{2}{5} + (\frac{1}{2} + \frac{1}{20}) + \frac{1}{20} = 0$. If $\kappa_4 \geq 15$, then v receives $\frac{2}{5}$ from v_1 and at least $\alpha(15) = \frac{3}{5}$ from v_4 , then $\mu'(v) \geq -1 + \frac{2}{5} + \frac{3}{5} = 0$. This completes the proof of **Theorem 1**.

3 Proof of **Theorem 12**

Let G be a connected counterexample to **Theorem 12** with maximum number of edges.

(*₂) The graph G is a triangulation.

The proof of (*₂) is the same as that of (*₁), so we omit it. Euler's formula $|V| - |E| + |F| = 2$ for G can be rewritten as the following:

$$\sum_{v \in V(G)} (\deg(v) - 6) + \sum_{f \in F(G)} (2 \deg(f) - 6) = \sum_{v \in V(G)} (\deg(v) - 6) = -12.$$

Initially, we give every vertex v an initial charge $\mu(v) = \deg(v) - 6$, and give every face f an initial charge $\mu(f) = 2 \deg(f) - 6$. Note that every face has an initial charge zero and every vertex has a nonnegative initial charge except the 5-vertices. Next, we redistribute the charges among the vertices, preserving their sum, such that the final charge $\mu'(v)$ of every vertex v is nonnegative, which contradicts the fact that the sum of the initial charges is negative.

Let

$$\beta(\kappa) = \frac{\kappa-6}{\kappa}, \quad \text{if } \kappa \geq 8.$$

3.1 Discharging rules

R1 Each 7-vertex sends $\frac{1}{4}$ to each non-weak 5-neighbor.

R2 Let $w w_1 w_2$ be a 3-face with $\deg(w) = \kappa$, where $\kappa \geq 8$ and $\kappa \neq 9$.

R2a If both w_1 and w_2 are 5-vertices, then w sends $\frac{\beta(\kappa)}{2}$ to each of w_1 and w_2 through this face.

R2b If w_1 is a 5-vertex and w_2 is a 6^+ -vertex, then w sends $\beta(\kappa)$ to w_1 through this face.

R3 Each 9-vertex sends $\frac{1}{3}$ to each adjacent vertex. Let w_0, w_1, w_2 be three consecutive neighbors of a 9-vertex in a cyclic order. Suppose that w_0 is a 6^+ -vertex and w_1 is a 5-vertex.

R3a If w_2 is a 6^+ -vertex, then w_0 transfers a charge of $\frac{1}{6}$ to w_1 .

R3b If w_2 is a 5-vertex, then w_0 transfers a charge of $\frac{1}{12}$ to each of w_1 and w_2 .

R4 Suppose that w is a 5-vertex with neighbors w_1, w_2, w_3, w_4, w_5 in a cyclic order, and w_1, w_2, w_3, w_4 have degrees $\kappa_1, 5, 5, \kappa_4$, respectively.

R4a If $\kappa_1 \geq 12$ and $\kappa_4 \geq 12$, then w donates $\beta(\kappa_1) - \frac{1}{2}$ to w_2 , and donates $\beta(\kappa_4) - \frac{1}{2}$ to w_3 .

R4b If $\kappa_1 = 7$ and $\kappa_4 \leq 11$, then w donates $\frac{1}{4}$ to w_2 .

R4c If $\kappa_1 = 8$ and $\kappa_4 \leq 11$, then w donates $\frac{1}{8}$ to w_2 .

Remark 5. By **R3**, each 9-vertex sends $\frac{2}{3}$ to each strong 5-neighbor, sends $\frac{1}{3}$ to each twice-weak neighbor, and sends at least $\frac{5}{12}$ to any other 5-neighbor.

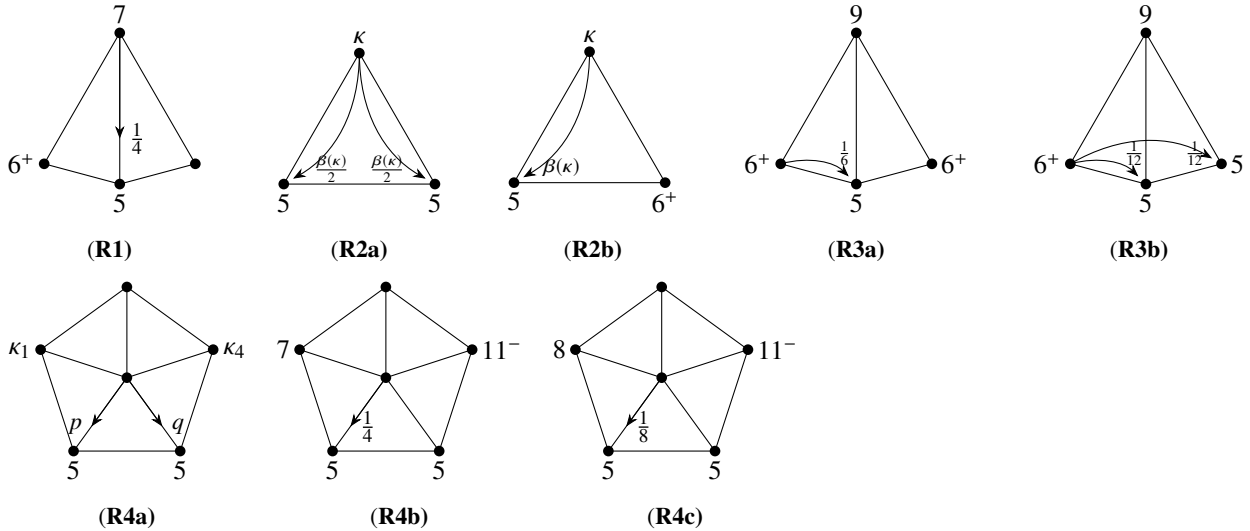


Fig. 3: Discharging rules for **Theorem 12**. Note that $\kappa \geq 8$ but $\kappa \neq 9$ in **(R2a)** and **(R2b)**, while $\kappa_1, \kappa_4 \geq 12$ and $p = \beta(\kappa_1) - \frac{1}{2}, q = \beta(\kappa_4) - \frac{1}{2}$ in **(R4a)**.

3.2 The final charge of every vertex is nonnegative

Case 1. If v is a κ -vertex with $\kappa \geq 8$, then $\mu'(v) \geq \kappa - 6 - \kappa \cdot \beta(\kappa) = 0$.

Case 2. The vertex v is a 7-vertex.

If v has at most four 5-neighbors, then $\mu'(v) \geq 7 - 6 - 4 \cdot \frac{1}{4} = 0$. If v has at least five 5-neighbors, then it has at most two 6^+ -vertices and at most four non-weak 5-neighbors, which also implies that $\mu'(v) \geq 7 - 6 - 4 \cdot \frac{1}{4} = 0$.

Case 3. The vertex v is a 5-vertex with neighbors v_1, v_2, v_3, v_4, v_5 in a cyclic order. Suppose that v_1, v_2, v_3, v_4 and v_5 have degrees $\kappa_1, \kappa_2, \kappa_3, \kappa_4$ and κ_5 respectively. Note that the initial charge of v is -1 .

If v is the sender in **R4a** with $\kappa_2 = \kappa_3 = 5$, then $\mu'(v) \geq -1 + \beta(\kappa_1) + \beta(\kappa_4) - (\beta(\kappa_1) - \frac{1}{2}) - (\beta(\kappa_4) - \frac{1}{2}) = 0$. Suppose that v is the sender in **R4b** with $\kappa_2 = \kappa_3 = 5$ and $\kappa_1 = 7$. If $\kappa_4 = 5$, then $\mu'(v) \geq -1 + \frac{1}{4} + \frac{3}{2} \cdot \frac{2}{3} - \frac{1}{4} = 0$, for otherwise there is a $\langle 5, 5, 5, 7, 17 \rangle$ -star. If $\kappa_4 = 6, 7$, then $\mu'(v) \geq -1 + \frac{1}{4} + 1 - \frac{1}{4} = -1 + 2 \cdot \frac{1}{4} + 1 - 2 \cdot \frac{1}{4} = 0$, for otherwise there is a $\langle 7, 5, 5, 7, 11 \rangle$ -star. If $\kappa_4 = 8$, then $\mu'(v) \geq -1 + \frac{1}{4} + \frac{3}{8} + \frac{4}{5} - \frac{1}{4} - \frac{1}{8} \geq 0$, for otherwise there is a $\langle 7, 5, 5, 8, 9 \rangle$ -star. If $\kappa_4 = 9$, then $\mu'(v) \geq -1 + \frac{1}{4} + \frac{5}{12} + \frac{2}{3} - \frac{1}{4} \geq 0$, for otherwise there is a $\langle 7, 5, 5, 9, 8 \rangle$ -star. If $\kappa_4 = 10, 11$, then $\mu'(v) \geq -1 + \frac{1}{4} + \frac{3}{5} + \frac{1}{2} - \frac{1}{4} \geq 0$, for otherwise there is a $\langle 7, 5, 5, 11, 7 \rangle$ -star.

Suppose that v is the sender in **R4c** with $\kappa_2 = \kappa_3 = 5$ and $\kappa_1 = 8$. If $\kappa_4 = 5$, then $\mu'(v) \geq -1 + \frac{3}{8} + \frac{3}{2} \cdot \frac{1}{2} - \frac{1}{8} = 0$, for otherwise there is a $\langle 5, 5, 5, 8, 11 \rangle$ -star. If $\kappa_4 = 6$, then $\mu'(v) \geq -1 + \frac{3}{8} + \frac{4}{5} - \frac{1}{8} \geq 0$, for otherwise there is a $\langle 6, 5, 5, 8, 9 \rangle$ -star. If $\kappa_4 = 7$, then $\mu'(v) \geq -1 + \frac{3}{8} + \frac{4}{5} + \frac{1}{4} - \frac{1}{8} - \frac{1}{4} \geq 0$, for otherwise there is a $\langle 7, 5, 5, 8, 9 \rangle$ -star. If $\kappa_4 = 8$, then $\mu'(v) \geq -1 + 2 \cdot \frac{3}{8} + \frac{1}{2} - 2 \cdot \frac{1}{8} = 0$, for otherwise there is an $\langle 8, 5, 5, 8, 7 \rangle$ -star. If $\kappa_4 = 9$, then $\mu'(v) \geq -1 + \frac{3}{8} + \frac{5}{12} + \frac{1}{2} - \frac{1}{8} \geq 0$, for otherwise there is an $\langle 8, 5, 5, 9, 7 \rangle$ -star. If $\kappa_4 = 10, 11$, then $\mu'(v) \geq -1 + \frac{3}{8} + \frac{1}{4} + \frac{3}{5} - \frac{1}{8} \geq 0$, for otherwise there is an $\langle 8, 5, 5, 11, 6 \rangle$ -star.

So we may assume that the 5-vertex v is just a receiver in what follows.

Subcase 3.1. The 5-vertex v has no 5-neighbor.

If v has four 6-neighbors, then $\mu'(v) \geq -1 + 1 = 0$, for otherwise there is a $\langle 6, 6, 6, 6, 11 \rangle$ -star. If v has at least two 8^+ -neighbors, then $\mu'(v) \geq -1 + 2 \cdot \frac{1}{2} = 0$. If v has exactly three 6-neighbors and one 7-neighbor, then $\mu'(v) \geq -1 + \frac{1}{4} + \frac{4}{5} \geq 0$, for otherwise there is a $\langle 6, 6, 6, 7, 9 \rangle$ -star or a $\langle 6, 6, 7, 6, 9 \rangle$ -star. If v has exactly two 6-neighbors, then $\mu'(v) \geq -1 + 2 \cdot \frac{1}{4} + \frac{1}{2} = 0$, for otherwise there is a $\langle 6, 6, 7, 7, 7 \rangle$ -star or a $\langle 6, 7, 6, 7, 7 \rangle$ -star. If v has at most one 6-neighbor, then $\mu'(v) \geq -1 + 4 \cdot \frac{1}{4} = 0$.

Subcase 3.2. The 5-vertex v has precisely one 5-neighbor v_1 .

By symmetry, we may assume that $\kappa_3 \leq \kappa_4$. If $\kappa_3 \geq 8$, then v receives at least $\frac{1}{2}$ from each of v_3 and v_4 , which implies that $\mu'(v) \geq -1 + 2 \cdot \frac{1}{2} = 0$. If $\kappa_4 \in \{10, 11\}$, then $\mu'(v) \geq -1 + \frac{4}{5} + \frac{1}{4} \geq 0$, for otherwise there is a $\langle 6, 6, 6, 6, 11 \rangle$ -star. If $\kappa_4 \geq 12$, then $\mu'(v) \geq -1 + 1 = 0$ and we are done. So we may assume that $\kappa_3 \leq 7$ and $\kappa_4 \leq 9$.

Suppose that v_4 is a 9-vertex. If $\kappa_3 = 7$, then $\mu'(v) \geq -1 + \frac{2}{3} + 2 \cdot \frac{1}{4} \geq 0$, for otherwise there is a $\langle 6, 5, 6, 7, 9 \rangle$ -star. If $\min\{\kappa_2, \kappa_5\} = \kappa_3 = 6$, then $\mu'(v) \geq -1 + \frac{2}{3} + \frac{3}{8} \geq 0$, for otherwise there is a $\langle 6, 6, 6, 7, 9 \rangle$ - or $\langle 6, 6, 7, 6, 9 \rangle$ -star. If $\min\{\kappa_2, \kappa_5\} \geq 7$, then $\mu'(v) \geq -1 + \frac{2}{3} + 2 \cdot \frac{1}{4} \geq 0$.

Suppose that v_4 is an 8-vertex. If $\kappa_3 = 7$, then $\mu'(v) \geq -1 + \frac{1}{2} + 2 \cdot \frac{1}{4} = 0$, for otherwise there is a $\langle 6, 6, 6, 7, 9 \rangle$ -star. If $\kappa_3 = 6$ and $\min\{\kappa_2, \kappa_5\} \geq 7$, then $\mu'(v) \geq -1 + \frac{1}{2} + 2 \cdot \frac{1}{4} = 0$. If $\min\{\kappa_2, \kappa_5\} = \kappa_3 = 6$, then $\mu'(v) \geq -1 + \frac{1}{2} + \frac{3}{5} \geq 0$, for otherwise there is a $\langle 5, 6, 6, 8, 9 \rangle$ - or $\langle 5, 6, 8, 6, 9 \rangle$ -star.

Suppose that $\kappa_3 = \kappa_4 = 7$. If $\min\{\kappa_2, \kappa_5\} \geq 7$, then $\mu'(v) \geq -1 + 4 \cdot \frac{1}{4} = 0$. If $\min\{\kappa_2, \kappa_5\} = 6$, then $\mu'(v) \geq -1 + 2 \cdot \frac{1}{4} + \frac{3}{5} \geq 0$, for otherwise there is a $\langle 5, 6, 7, 7, 9 \rangle$ -star.

Suppose that $\kappa_4 = 7$ and $\kappa_3 = 6$. If $\min\{\kappa_2, \kappa_5\} = 6$, then $\mu'(v) \geq -1 + \frac{1}{4} + \frac{3}{4} = 0$, for otherwise there is a $\langle 5, 6, 6, 7, 11 \rangle$ - or $\langle 5, 6, 7, 6, 11 \rangle$ -star. If $\min\{\kappa_2, \kappa_5\} = 7$, then $\mu'(v) \geq -1 + 2 \cdot \frac{1}{4} + \frac{3}{5} \geq 0$, for otherwise there is a $\langle 5, 7, 6, 7, 9 \rangle$ - or $\langle 5, 7, 7, 6, 9 \rangle$ -star. If $\min\{\kappa_2, \kappa_5\} \geq 8$, then $\mu'(v) \geq -1 + 2 \cdot \frac{3}{8} + \frac{1}{4} = 0$.

Suppose that $\kappa_3 = \kappa_4 = 6$. If $\min\{\kappa_2, \kappa_5\} = 6$, then $\mu'(v) \geq -1 + \frac{3}{2} \cdot \frac{18-6}{18} \geq 0$, for otherwise there is a $\langle 5, 6, 6, 6, 17 \rangle$ -star. If $\min\{\kappa_2, \kappa_5\} = 7$, then $\mu'(v) \geq -1 + \frac{1}{4} + \frac{3}{4} = 0$, for otherwise there is a $\langle 5, 7, 6, 6, 11 \rangle$ -star. If $\min\{\kappa_2, \kappa_5\} = 8$, then $\mu'(v) \geq -1 + \frac{3}{8} + \frac{15}{22} \geq 0$, for otherwise there is a $\langle 5, 8, 6, 6, 10 \rangle$ -star. If $\min\{\kappa_2, \kappa_5\} \geq 9$, then $\mu'(v) \geq -1 + \frac{5}{12} + \frac{3}{5} \geq 0$, for otherwise there is a $\langle 5, 9, 6, 6, 9 \rangle$ -star.

Subcase 3.3. The 5-vertex v has precisely two 5-neighbors v_2 and v_3 .

If $\min\{\kappa_1, \kappa_4\} \in \{7, 8\}$ and $\max\{\kappa_1, \kappa_4\} \geq 12$, then $\mu'(v) \geq -1 + \frac{1}{4} + \frac{3}{4} = 0$. Recall that the vertex v is just a receiver, so we may assume that $\kappa_1 \neq 7, 8$ and $\kappa_4 \neq 7, 8$ in the following of Subcase 3.3.

Suppose that $\min\{\kappa_1, \kappa_4\} = 6$. If $\kappa_5 \geq 12$, then $\mu'(v) \geq -1 + 1 = 0$. If $\kappa_5 = 10, 11$, then $\mu'(v) \geq -1 + \frac{4}{5} + \frac{1}{4} \geq 0$, for otherwise there is a $\langle 6, 5, 5, 6, 11 \rangle$ -star. If $\kappa_5 = 9$, then $\mu'(v) \geq -1 + \frac{2}{3} + \frac{3}{8} \geq 0$, for otherwise there is a $\langle 6, 5, 5, 7, 9 \rangle$ -star. If $\kappa_5 = 8$, then $\mu'(v) \geq -1 + \frac{1}{2} + \frac{3}{5} \geq 0$, for otherwise there is a $\langle 5, 5, 6, 8, 9 \rangle$ -star. If $\kappa_5 = 7$, then $\mu'(v) \geq -1 + \frac{1}{4} + \frac{3}{4} = 0$, for otherwise there is a $\langle 5, 5, 6, 7, 11 \rangle$ -star. If $\kappa_5 = 6$, then $\mu'(v) \geq -1 + \frac{3}{2} \cdot \frac{2}{3} = 0$, for otherwise there is a $\langle 5, 5, 6, 6, 17 \rangle$ -star.

Suppose that $\min\{\kappa_1, \kappa_4\} \geq 9$. If $\max\{\kappa_1, \kappa_4\} \geq 10$, then $\mu'(v) \geq -1 + \frac{5}{12} + \frac{3}{5} \geq 0$. If $\max\{\kappa_1, \kappa_4\} = 9$, then $\kappa_1 = \kappa_4 = 9$, which implies that $\mu'(v) \geq -1 + 2 \cdot \frac{5}{12} + \frac{1}{4} \geq 0$, for otherwise there is a $\langle 5, 5, 9, 6, 9 \rangle$ -star.

Subcase 3.4. The 5-vertex v has precisely two 5-neighbors v_1 and v_3 .

As before, we may assume that $\kappa_4 \leq \kappa_5$. If $\kappa_4 \geq 10$, then $\mu'(v) \geq -1 + 2 \cdot \frac{3}{5} \geq 0$.

Suppose that v_4 is a 6-vertex. By the absence of $\langle 5, 6, 6, 5, \infty \rangle$ -stars, we have that $\kappa_5 \geq 7$. If $\kappa_5 = 7$, then $\mu'(v) \geq -1 + \frac{1}{4} + \frac{24-6}{24} \geq 0$, for otherwise there is a $\langle 5, 6, 7, 5, 23 \rangle$ -star. If $\kappa_5 = 8$, then $\mu'(v) \geq -1 + \frac{3}{8} + \frac{5}{8} = 0$, for otherwise, there is a $\langle 5, 6, 8, 5, 15 \rangle$ -star. If $\kappa_5 = 9$, then $\mu'(v) \geq -1 + \frac{5}{12} + \frac{3}{5} \geq 0$, for otherwise there is a $\langle 5, 6, 9, 5, 14 \rangle$ -star. If $\kappa_5 = 10$, then $\mu'(v) \geq -1 + \frac{3}{5} + \frac{2}{5} = 0$, for otherwise there is a $\langle 5, 9, 5, 6, 10 \rangle$ -star. If $\kappa_5 = 11$, then $\mu'(v) \geq -1 + \frac{15}{22} + \frac{1}{3} \geq 0$, for otherwise there is a $\langle 5, 8, 5, 6, 11 \rangle$ -star. If $12 \leq \kappa_5 \leq 17$, then $\mu'(v) \geq -1 + \frac{3}{4} + \frac{1}{4} = 0$, for otherwise there is a $\langle 5, 7, 5, 6, 17 \rangle$ -star. If $\kappa_5 \geq 18$, then $\mu'(v) \geq -1 + \frac{3}{2} \cdot \frac{18-6}{18} \geq 0$.

Suppose that v_4 is a 7-vertex. If $\kappa_5 = 7$, then $\mu'(v) \geq -1 + 2 \cdot \frac{1}{4} + \frac{1}{2} = 0$, for otherwise there is a $\langle 5, 7, 7, 5, 11 \rangle$ -star. If $\kappa_5 = 8$, then $\mu'(v) \geq -1 + \frac{1}{4} + \frac{3}{8} + \frac{2}{5} \geq 0$, for otherwise there is a $\langle 5, 7, 8, 5, 9 \rangle$ -star. If $\kappa_5 = 9$, then $\mu'(v) \geq -1 + \frac{1}{4} + \frac{5}{12} + \frac{1}{3} = 0$, for otherwise there is a $\langle 5, 8, 5, 7, 9 \rangle$ -star. If $\kappa_5 \in \{10, 11\}$, then $\mu'(v) \geq -1 + \frac{3}{5} + 2 \cdot \frac{1}{4} \geq 0$, for otherwise there is a $\langle 5, 7, 5, 7, 11 \rangle$ -star. If $\kappa_5 \geq 12$, then $\mu'(v) \geq -1 + \frac{1}{4} + \frac{3}{4} = 0$.

Suppose that v_4 is an 8-vertex. If $\kappa_2 \geq 8$, then $\mu'(v) \geq -1 + 2 \cdot \frac{3}{8} + \frac{1}{4} = 0$. If $\kappa_2 \leq 7$, then $\mu'(v) \geq -1 + \frac{3}{8} + \frac{15}{22} \geq 0$, for otherwise there is a $\langle 5, 7, 5, 8, 10 \rangle$ -star.

Suppose that v_4 is a 9-vertex. If $\kappa_5 = 9$, then $\mu'(v) \geq -1 + 2 \cdot \frac{5}{12} + \frac{1}{4} \geq 0$, for otherwise there is a $\langle 5, 7, 5, 9, 9 \rangle$ -star. If $\kappa_5 \geq 10$, then $\mu'(v) \geq -1 + \frac{5}{12} + \frac{3}{5} \geq 0$.

Subcase 3.5. The 5-vertex v has precisely three 5-neighbors v_2, v_3 and v_4 .

Note that the vertex v is just a receiver, so we have that $\min\{\kappa_1, \kappa_5\} \neq 7, 8$. If $\min\{\kappa_1, \kappa_5\} = 6$, then $\mu'(v) \geq -1 + \frac{3}{2} \cdot \beta(18) \geq 0$, for otherwise there is a $\langle 5, 6, 6, 6, 17 \rangle$ -star. If $\min\{\kappa_1, \kappa_5\} \geq 9$, then $\mu'(v) \geq 5 - 6 + \frac{5}{12} + \frac{3}{5} \geq 0$, for otherwise there is a $\langle 5, 7, 5, 9, 9 \rangle$ -star.

Subcase 3.6. The 5-vertex v has precisely three 5-neighbors v_2, v_3 and v_5 .

Suppose that $\kappa_4 = 7$ and v_2v_3 lies in another 3-face uv_2v_3 . If u is a 12^+ -vertex, then v receives at least $\frac{1}{4}$ from v_2 by **R4a**, and then $\mu'(v) \geq -1 + \frac{1}{4} + \frac{3}{4} = 0$, for otherwise v is the center of a $\langle 5, 5, 7, 5, 23 \rangle$ -star. If u is an 11^- -vertex, then v receives $\frac{1}{4}$ from v_3 by **R4b**, and then $\mu'(v) \geq -1 + \frac{1}{4} + \frac{3}{4} = 0$, for otherwise v is the center of a $\langle 5, 5, 7, 5, 23 \rangle$ -star.

If $\min\{\kappa_1, \kappa_4\} = 8$, then v receives at least $\frac{1}{8}$ from v_2 or v_3 due to **R4a** and **R4c**, which implies that $\mu'(v) \geq -1 + \frac{1}{4} + \frac{1}{8} + \frac{5}{8} \geq 0$, for otherwise there is a $\langle 5, 5, 8, 5, 15 \rangle$ -star.

If $\min\{\kappa_1, \kappa_4\} = \kappa_1 = 9$. By the absence of $\langle 5, 5, 9, 5, 14 \rangle$ -stars, we have that $\kappa_4 \geq 15$. If v is a twice-weak 5-neighbor of v_1 , then $\mu'(v) \geq -1 + \frac{1}{3} + \frac{3}{5} + (\frac{3}{5} - \frac{1}{2}) \geq 0$ by **R4a**; otherwise we have that $\mu'(v) \geq -1 + (\frac{1}{3} + \frac{1}{12}) + \frac{3}{5} \geq 0$.

If $\min\{\kappa_1, \kappa_4\} = 10$, then $\mu'(v) \geq -1 + \frac{2}{5} + \frac{3}{5} = 0$, for otherwise there is a $\langle 5, 5, 10, 5, 14 \rangle$ -star. If $\min\{\kappa_1, \kappa_4\} = 11$, then $\mu'(v) \geq -1 + \frac{5}{11} + \frac{4}{7} \geq 0$, for otherwise there is a $\langle 5, 5, 11, 5, 13 \rangle$ -star. If $\min\{\kappa_1, \kappa_4\} \geq 12$, then $\mu'(v) \geq -1 + 2 \cdot \frac{1}{2} = 0$ by **R4a**. This completes the proof of **Theorem 12**.

Acknowledgments. This work was supported by the National Natural Science Foundation of China (xxxxxxx) and partially supported by the Fundamental Research Funds for Universities in Henan (YQPY20140051). The authors would like to thank the anonymous referees for their valuable comments and careful reading of this paper.

References

- [1] O. V. Borodin, Structural properties of planar maps with the minimal degree 5, *Math. Nachr.* 158 (1992) 109–117.

- [2] O. V. Borodin, M. A. Bykov and A. O. Ivanova, Low 5-stars at 5-vertices in 3-polytopes with minimum degree 5 and no vertices of degree from 7 to 9, *Discuss. Math. Graph Theory* (2019+) in press. <https://dx.doi.org/10.7151/dmgt.2159>.
- [3] O. V. Borodin and A. O. Ivanova, Describing 4-stars at 5-vertices in normal plane maps with minimum degree 5, *Discrete Math.* 313 (17) (2013) 1710–1714.
- [4] O. V. Borodin and A. O. Ivanova, Describing $(d - 2)$ -stars at d -vertices, $d \leq 5$, in normal plane maps, *Discrete Math.* 313 (17) (2013) 1700–1709.
- [5] O. V. Borodin and A. O. Ivanova, Light and low 5-stars in normal plane maps with minimum degree 5, *Sib. Math. J.* 57 (3) (2016) 470–475.
- [6] O. V. Borodin and A. O. Ivanova, Light neighborhoods of 5-vertices in 3-polytopes with minimum degree 5, *Sib. Èlektron. Mat. Izv.* 13 (2016) 584–591.
- [7] O. V. Borodin and A. O. Ivanova, Low stars in normal plane maps with minimum degree 4 and no adjacent 4-vertices, *Discrete Math.* 339 (2) (2016) 923–930.
- [8] O. V. Borodin and A. O. Ivanova, All tight descriptions of 3-stars in 3-polytopes with girth 5, *Discuss. Math. Graph Theory* 37 (1) (2017) 5–12.
- [9] O. V. Borodin and A. O. Ivanova, On light neighborhoods of 5-vertices in 3-polytopes with minimum degree 5, *Discrete Math.* 340 (9) (2017) 2234–2242.
- [10] O. V. Borodin, A. O. Ivanova and T. R. Jensen, 5-stars of low weight in normal plane maps with minimum degree 5, *Discuss. Math. Graph Theory* 34 (3) (2014) 539–546.
- [11] O. V. Borodin, A. O. Ivanova and O. N. Kazak, Describing neighborhoods of 5-vertices in 3-polytopes with minimum degree 5 and without vertices of degrees from 7 to 11, *Discuss. Math. Graph Theory* 38 (3) (2018) 615–625.
- [12] O. V. Borodin, A. O. Ivanova and D. V. Nikiforov, Low and light 5-stars in 3-polytopes with minimum degree 5 and restrictions on the degrees of major vertices, *Sib. Math. J.* 58 (4) (2017) 600–605.
- [13] O. V. Borodin, A. O. Ivanova and D. V. Nikiforov, Low minor 5-stars in 3-polytopes with minimum degree 5 and no 6-vertices, *Discrete Math.* 340 (7) (2017) 1612–1616.
- [14] O. V. Borodin, A. O. Ivanova and D. V. Nikiforov, Describing neighborhoods of 5-vertices in a class of 3-polytopes with minimum degree 5, *Sib. Math. J.* 59 (1) (2018) 43–49.
- [15] O. V. Borodin, A. O. Ivanova and E. I. Vasil’eva, Light minor 5-stars in 3-polytopes with minimum degree 5 and no 6-vertices, *Discuss. Math. Graph Theory* (2019+) in press. <https://dx.doi.org/10.7151/dmgt.2155>.
- [16] O. V. Borodin and D. R. Woodall, Short cycles of low weight in normal plane maps with minimum degree 5, *Discuss. Math. Graph Theory* 18 (2) (1998) 159–164.
- [17] P. Franklin, The four color problem, *Amer. J. Math.* 44 (3) (1922) 225–236.
- [18] J. Harant and S. Jendrol’, On the existence of specific stars in planar graphs, *Graphs Combin.* 23 (5) (2007) 529–543.
- [19] S. Jendrol’ and T. Madaras, On light subgraphs in plane graphs of minimum degree five, *Discuss. Math. Graph Theory* 16 (2) (1996) 207–217.
- [20] S. Jendrol’ and H.-J. Voss, Light subgraphs of graphs embedded in the plane—a survey, *Discrete Math.* 313 (4) (2013) 406–421.
- [21] H. Lebesgue, Quelques conséquences simples de la formule d’Euler, *J. Math. Pures Appl.* 19 (1940) 27–43.
- [22] P. Wernicke, Über den kartographischen Vierfarbensatz, *Math. Ann.* 58 (3) (1904) 413–426.