

# Planar Turán Number of the 6-Cycle

Debarun Ghosh<sup>1</sup>      Ervin Győri<sup>1,2</sup>      Ryan R. Martin<sup>3</sup>  
Addisu Paulos<sup>1</sup>      Chuanqi Xiao<sup>1</sup>

<sup>1</sup>Central European University, Budapest  
chuanqixm@gmail.com,  
ghosh\_debarun@phd.ceu.edu, addisu\_2004@yahoo.com

<sup>2</sup>Alfréd Rényi Institute of Mathematics, Budapest  
gyori.ervin@renyi.mta.hu

<sup>3</sup>Iowa State University, Ames, IA, USA  
rymartin@iastate.edu

## Abstract

Let  $\text{ex}_{\mathcal{P}}(n, T, H)$  denote the maximum number of copies of  $T$  in an  $n$ -vertex planar graph which does not contain  $H$  as a subgraph. When  $T = K_2$ ,  $\text{ex}_{\mathcal{P}}(n, T, H)$  is the well studied function, the planar Turán number of  $H$ , denoted by  $\text{ex}_{\mathcal{P}}(n, H)$ . The topic of extremal planar graphs was initiated by Dowden (2016). He obtained sharp upper bound for both  $\text{ex}_{\mathcal{P}}(n, C_4)$  and  $\text{ex}_{\mathcal{P}}(n, C_5)$ . Later on, Y. Lan, et al. continued this topic and proved that  $\text{ex}_{\mathcal{P}}(n, C_6) \leq \frac{18(n-2)}{7}$ . In this paper, we give a sharp upper bound  $\text{ex}_{\mathcal{P}}(n, C_6) \leq \frac{5}{2}n - 7$ , for all  $n \geq 18$ , which improves Lan's result. We also pose a conjecture on  $\text{ex}_{\mathcal{P}}(n, C_k)$ , for  $k \geq 7$ .

**Keywords** Planar Turán number, Extremal planar graph

## 1 Introduction and Main Results

In this paper, all graphs considered are planar, undirected, finite and contain neither loops nor multiple edges. We use  $C_k$  to denote the cycle on  $k$  vertices and  $K_r$  to denote the complete graph on  $r$  vertices.

One of the well-known results in extremal graph theory is the Turán Theorem [5], which gives the maximum number of edges that a graph on  $n$  vertices can have without containing

a  $K_r$  as a subgraph. The Erdős-Stone-Simonovits Theorem [2, 3] then generalized this result and asymptotically determines  $\text{ex}(n, H)$  for all non-bipartite graphs  $H$ :  $\text{ex}(n, H) = (1 - \frac{1}{\chi(H)-1})\binom{n}{2} + o(n^2)$ , where  $\chi(H)$  denotes the chromatic number of  $H$ . Over the last decade, a considerable amount of research work has been carried out in Turán-type problems, i.e., when host graphs are  $K_n$ ,  $k$ -uniform hypergraphs or  $k$ -partite graphs, see [3, 6].

In 2016, Dowden [1] initiated the study of Turán-type problems when host graphs are planar, i.e., how many edges can a planar graph on  $n$  vertices have, without containing a given smaller graph? The planar Turán number of a graph  $H$ ,  $\text{ex}_{\mathcal{P}}(n, H)$ , is the maximum number of edges in a planar graph on  $n$  vertices which does not contain  $H$  as a subgraph. Dowden [1] obtained the tight bounds  $\text{ex}_{\mathcal{P}}(n, C_4) \leq \frac{15(n-2)}{7}$ , for all  $n \geq 4$  and  $\text{ex}_{\mathcal{P}}(n, C_5) \leq \frac{12n-33}{5}$ , for all  $n \geq 11$ . Later on, Y. Lan, et al. [4] obtained bounds  $\text{ex}_{\mathcal{P}}(n, \Theta_4) \leq \frac{12(n-2)}{5}$ , for all  $n \geq 4$ ,  $\text{ex}_{\mathcal{P}}(n, \Theta_5) \leq \frac{5(n-2)}{2}$ , for all  $n \geq 5$  and  $\text{ex}_{\mathcal{P}}(n, \Theta_6) \leq \frac{18(n-2)}{7}$ , for all  $n \geq 7$ , where  $\Theta_k$  is obtained from a cycle  $C_k$  by adding an additional edge joining any two non-consecutive vertices. They also demonstrated that their bounds for  $\Theta_4$  and  $\Theta_5$  are tight by showing infinitely many values of  $n$  and planar graph on  $n$  vertices attaining the stated bounds. As a consequence of the bound for  $\Theta_6$  in the same paper, they presented the following corollary.

**Corollary 1** (Y. Lan, et al.[4]).

$$\text{ex}_{\mathcal{P}}(n, C_6) \leq \frac{18(n-2)}{7}$$

for all  $n \geq 6$ , with equality when  $n = 9$ .

In this paper we present a tight bound for  $\text{ex}_{\mathcal{P}}(n, C_6)$ . In particular, we prove the following two theorems to give the tight bound.

We denote the vertex and the edge sets of a graph  $G$  by  $V(G)$  and  $E(G)$  respectively. We also denote the number of vertices and edges of  $G$  by  $v(G)$  and  $e(G)$  respectively. The minimum degree of  $G$  is denoted  $\delta(G)$ . The main ingredient of the result is as follows:

**Theorem 2.** *Let  $G$  be a 2-connected,  $C_6$ -free plane graph on  $n$  ( $n \geq 6$ ) vertices with  $\delta(G) \geq 3$ . Then  $e(G) \leq \frac{5}{2}n - 7$ .*

We use Theorem 2, which considers only 2-connected graphs with no degree 2 (or 1) vertices and order at least 6, in order to establish our desired result, which bounds gives the desired bound of  $\frac{5}{2}n - 7$  for all  $C_6$ -free plane graphs with at least 18 vertices.

**Theorem 3.** *Let  $G$  be a  $C_6$ -free plane graph on  $n$  ( $n \geq 18$ ) vertices. Then*

$$e(G) \leq \frac{5}{2}n - 7.$$

Indeed, there are 17-vertex graphs on 17 vertices with 36 edges, but  $\frac{5}{2}(17) - 7 = 35.5 < 36$ . One such graph can be seen in Figure 1.

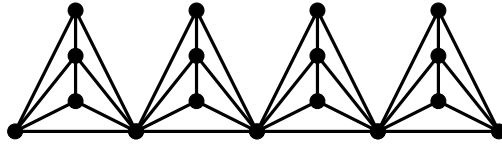


Figure 1: Example of  $G$  on 17 vertices such that  $e(G) > (5/2)v(G) - 7$ .

We show that, for large graphs, Theorem 3 is tight:

**Theorem 4.** *For every  $n \cong 2 \pmod{5}$ , there exists a  $C_6$ -free plane graph  $G$  with  $v(G) = \frac{18n+14}{5}$  and  $e(G) = 9n$ , hence  $e(G) = \frac{5}{2}v(G) - 7$ .*

For a vertex  $v$  in  $G$ , the neighborhood of  $v$ , denoted  $N_G(v)$ , is the set of all vertices in  $G$  which are adjacent to  $v$ . We denote the degree of  $v$  by  $d_G(v) = |N_G(v)|$ . We may avoid the subscripts if the underlying graph is clear. The minimum degree of  $G$  is denoted by  $\delta(G)$ , the number of components of  $G$  is denoted by  $c(G)$ . For the sake of simplicity, we may use the term  $k$ -cycle to mean a cycle of length  $k$  and  $k$ -face to mean a face bounded by a  $k$ -cycle. A  $k$ -path is a path with  $k$  edges.

## 2 Proof of Theorem 4: Extremal Graph Construction

First we show that for a plane graph  $G_0$  with  $n$  vertices ( $n \cong 7 \pmod{10}$ ), each face having length 7 and each vertex in  $G_0$  having degree either 2 or 3, we can construct  $G$ , where  $G$  is a  $C_6$ -free plane graph with  $v(G) = \frac{18n+14}{5}$  and  $e(G) = 9n$ . We then give a construction for such a  $G_0$  as long as  $n \cong 7 \pmod{10}$ .

Using Euler's formula, the fact that every face has length 7 and every degree is 2 or 3, we have  $e(G_0) = \frac{7(n-2)}{5}$  and the number of degree 2 and degree 3 vertices in  $G_0$  are  $\frac{n+28}{5}$  and  $\frac{4n-28}{5}$ , respectively.

Given  $G_0$ , we construct first an intermediate graph  $G'$  by step (1):

- (1) Add halving vertices to each edge of  $G_0$  and join the pair of halving vertices with distance 2, see an example in Figure 2. Let  $G'$  denote this new graph, then  $v(G') = v(G_0) + e(G_0) = \frac{12n-14}{5}$  and the number of degree 2 and degree 3 vertices in  $G'$  is equal to the number of degree 2 and degree 3 vertices in  $G_0$ , respectively.

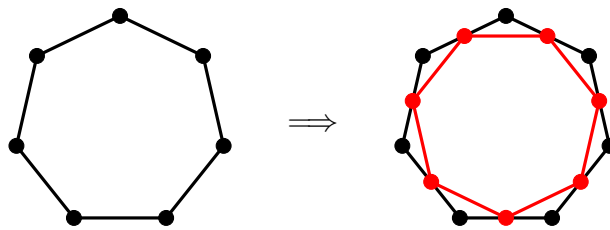


Figure 2: Adding a halving vertex to each edge of  $G_0$ .

To get  $G$ , we apply the following steps (2) and (3) on the degree 2 and 3 vertices in  $G'$ , respectively.

- (2) For each degree 2 vertex  $v$  in  $G_0$ , let  $N(v) = \{v_1, v_2\}$ , and so  $v_1vv_2$  forms an induced triangle in  $G'$ . Fix  $v_1$  and  $v_2$ , replace  $v_1vv_2$  with a  $K_5^-$  by adding vertices  $v'_1, v'_2$  to  $V(G')$  and edges  $v'_1v, v'_1v'_2, v'_1v_1, v'_1v_2, v'_2v_1, v'_2v_2$  to  $E(G')$ . See Figure 3.

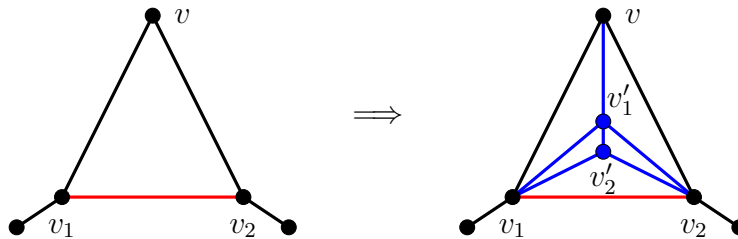


Figure 3: Replacing a degree-2 vertex of  $G_0$  with a  $K_5^-$ .

- (3) For each degree 3 vertex  $v$  in  $G_0$ , such that  $N(v) = \{v_1, v_2, v_3\}$ , the set of vertices  $\{v, v_1, v_2, v_3\}$  then forms an induced  $K_4$  in  $G'$ . Fix  $v_1, v_2$  and  $v_3$ , replace this  $K_4$  with a  $K_5^-$  by adding a new vertex  $v'$  to  $V(G')$  and edges  $v'v, v'v_1, v'v_2$  to  $E(G')$ . See Figure 4.

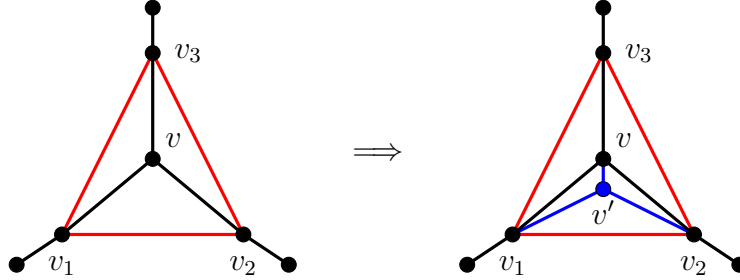


Figure 4: Replacing a degree-3 vertex of  $G_0$  with a  $K_5^-$ .

For each integer  $k \geq 0$ , and  $n = 10k + 7$  we present a construction for such a  $G_0$ , call it  $G_0^k$ : Let  $v_i^t$  and  $v_i^b$  ( $1 \leq i \leq k + 1$ ) be the top and bottom vertices of the heptagonal grids with 3 layers and  $k$  columns, respectively (see the red vertices in Figure 5) and  $v$  be the extra vertex in  $G_0^k$  but not in the heptagonal grid. We join  $v_1^t v, v v_1^b$  and  $v_i^t v_i^b$  ( $2 \leq i \leq k + 1$ ). Clearly,  $G_0^k$  is a  $(10k + 7)$ -vertex plane graph and each face of  $G_0^k$  is a 7-face. Obviously  $e(G_0^k) = 14k + 7$ , and the number of degree 2 and 3 vertices are  $2k + 7 = \frac{n+28}{5}$  and  $8k = \frac{4n-28}{5}$  respectively.

After applying steps (1), (2), and (3) on  $G_0^k$ , we get  $G$ . It is easy to verify that  $G$  is a  $C_6$ -free plane graph with

$$v(G) = v(G_0^k) + e(G_0^k) + 2(2k + 7) + 8k = (10k + 7) + (14k + 7) + 12k + 14 = 36k + 28$$

$$e(G) = 9v(G_0^k) = 90k + 63.$$

Thus,  $e(G) = \frac{5}{2}v(G) - 7$ .

**Remark 1.** In fact, for  $k \geq 1$  and  $n = 10k + 2$ , there exists a graph  $H_0^k$  which is obtained from  $G_0^k$  by deleting vertices (colored green in Figure 5)  $x_1, x_2, x_3, x_4, x_5$  and adding the edge  $v_1^t y$ . Clearly,  $H_0^k$  is an  $10k + 2$ -vertex plane graph such that all faces have length 7. Moreover,  $e(H_0^k) = 14k$ , the number of degree-2 and degree-3 vertices are  $2k + 6 = \frac{n+28}{5}$  and

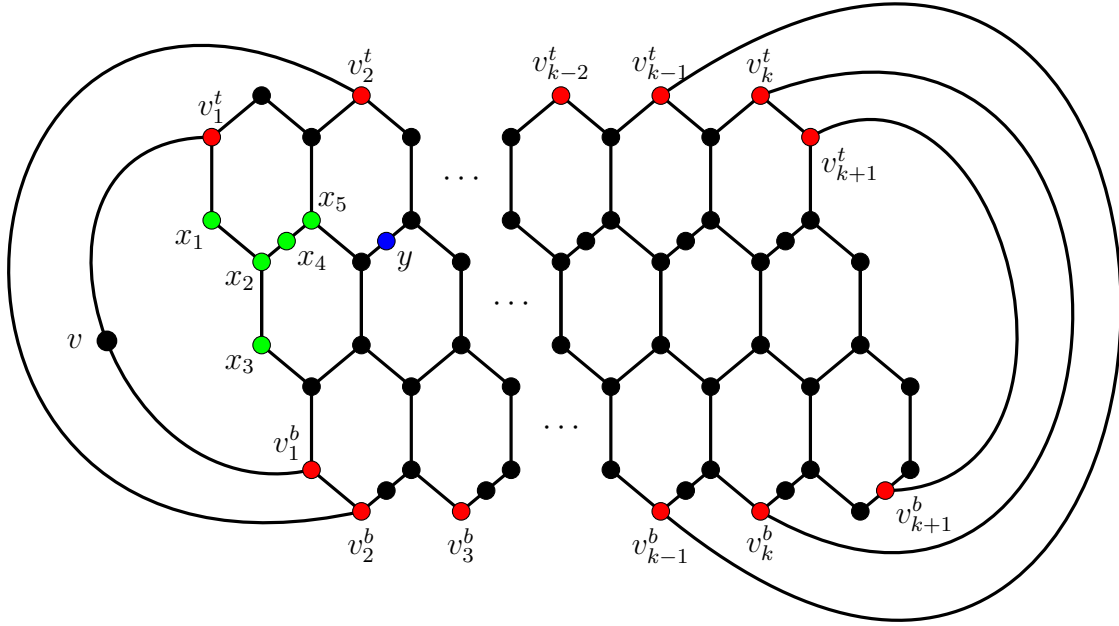


Figure 5: The graph  $G_0^k$ ,  $k \geq 1$ , in which each face has length 7. The graph  $H_0^k$  (see Remark 1) is obtained by deleting  $x_1, \dots, x_5$  and adding the edge  $v_1^t y$ .

$8k - 4 = \frac{4n-28}{5}$ , respectively. After applying steps (1), (2), and (3) to  $H_0^k$ , we get a graph  $H$  that is a  $C_6$ -free plane graph with  $e(H) = (5/2)v(H) - 7$ .

Thus, for any  $k \cong 2 \pmod{5}$ , we have the graphs above such that each face is a 7-gon and we get a  $C_6$ -free plane graph on  $n$  vertices with  $(5/2)n - 7$  edges for  $n \cong 10 \pmod{18}$  if  $n \geq 28$ .

### 3 Definitions and Preliminaries

We give some necessary definitions and preliminary results which are needed in the proof of Theorems 2 and 3.

**Definition 5.** Let  $G$  be a plane graph and  $e \in E(G)$ . If  $e$  is not in a 3-face of  $G$ , then we call it a **trivial triangular-block**. Otherwise, we recursively construct a **triangular-block** in the following way. Start with  $H$  as a subgraph of  $G$ , such that  $E(H) = \{e\}$ .

- (1) Add the other edges of the 3-face containing  $e$  to  $E(H)$ .

(2) Take  $e' \in E(H)$  and search for a 3-face containing  $e'$ . Add these other edge(s) in this 3-face to  $E(H)$ .

(3) Repeat step (2) till we cannot find a 3-face for any edge in  $E(H)$ .

We denote the triangular-block obtained from  $e$  as the starting edge, by  $B(e)$ .

Let  $G$  be a plane graph. We have the following three observations:

- (i) If  $H$  is a non-trivial triangular-block and  $e_1, e_2 \in E(H)$ , then  $B(e_1) = B(e_2) = H$ .
- (ii) Any two triangular-blocks of  $G$  are edge disjoint.
- (iii) If  $B$  is a triangular-block with the unbounded region being a 3-face, then  $B$  is a triangulation graph.

Let  $\mathcal{B}$  be the family of triangular-blocks of  $G$ . From observation (ii) above, we have

$$e(G) = \sum_{B \in \mathcal{B}} e(B),$$

where  $e(G)$  and  $e(B)$  are the number of edges of  $G$  and  $B$  respectively.

Next, we distinguish the types of triangular-blocks that a  $C_6$ -free plane graph may contain. The following lemma gives us the bound on the number of vertices of triangular-blocks.

**Lemma 6.** *Every triangular-block of  $G$  contains at most 5 vertices.*

*Proof.* We prove it by contradiction. Let  $B$  be a triangular-block of  $G$  containing at least 6 vertices. We perform the following operations: delete one vertex from the boundary of the unbounded face of  $B$  sequentially until the number of vertices of the new triangular block  $B'$  is 6. Next, we show that  $B'$  is not a triangular-block in  $G$ . Suppose that it is. We consider the following two cases to complete the proof.

**Case 1.**  $B'$  contains a separating triangle.

Let  $v_1v_2v_3$  be the separating triangle. Without loss of generality, assume that the inner region of the triangle contains two vertices say,  $v_4$  and  $v_5$ . The outer region of the triangle

contains one vertex, say  $v_6$ . Since the unbounded face is a 3-face, the inner structure is a triangulation. Without loss of generality, let the inner structure be as shown in Figure 6(a). Now consider the vertex  $v_6$ . If  $v_1, v_2 \in N(v_6)$ , then  $v_3v_4v_5v_2v_6v_1v_3$  is a 6-cycle in  $G$ , a contradiction. Similarly for the cases when  $v_1, v_3 \in N(v_6)$  and  $v_2, v_3 \in N(v_6)$ .

**Case 2.**  $B'$  contains no separating triangle.

Consider a triangular face  $v_1v_2v_3v_1$ . Let  $v_4$  be a vertex in the triangular-block such that  $v_2v_3v_4v_2$  is a 3-face. Notice that  $v_1v_4 \notin E(B')$ , otherwise we get a separating triangle in  $B'$ . Let  $v_5$  be a vertex in  $B'$  such that  $v_2v_4v_5v_2$  is a 3-face. Notice that  $v_6$  cannot be adjacent to both vertices in any of the pairs  $\{v_1, v_2\}$ ,  $\{v_1, v_3\}$ ,  $\{v_2, v_5\}$ ,  $\{v_3, v_4\}$ , or  $\{v_4, v_5\}$ . Otherwise,  $C_6 \subset G$ . Also  $v_3v_5 \notin E(B')$ , otherwise we have a separating triangle. So, let  $v_1v_5 \in E(B')$  and  $v_1, v_5 \in N(v_6)$  (see Figure 6(b)). In this case  $v_1v_6v_5v_2v_4v_3v_1$  results in a 6-cycle, a contradiction.  $\square$

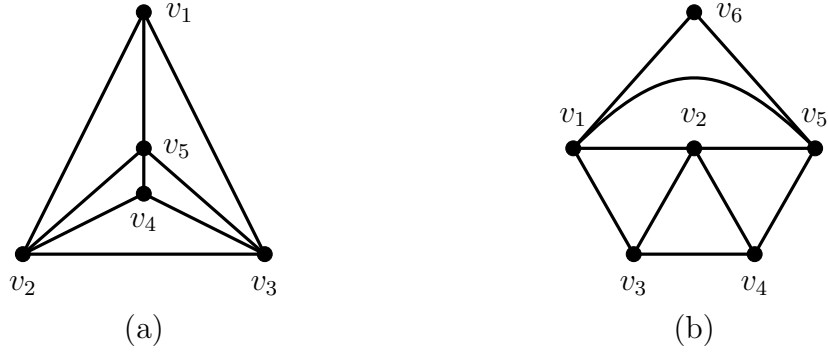


Figure 6: The structure of  $B'$  when it contains a separating triangle or not, respectively.

Now we describe all possible triangular-blocks in  $G$  based on the number of vertices the block contains. For  $k \in \{2, 3, 4, 5\}$ , we denote the triangular-blocks on  $k$  vertices as  $B_k$ .

### Triangular-blocks on 5 vertices.

There are four types of triangular-blocks on 5 vertices (see Figure 7). Notice that  $B_{5,a}$  is a  $K_5^-$ .



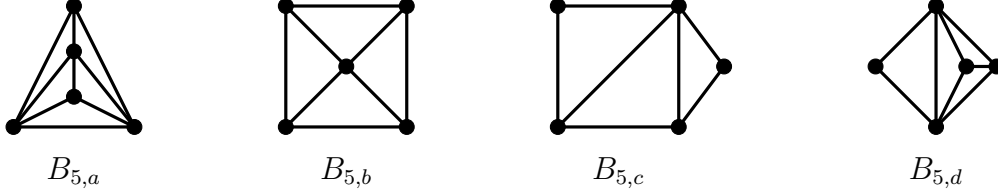


Figure 7: Triangular-blocks on 5 vertices.

**Triangular-blocks on 4, 3, and 2 vertices.**

There are two types of triangular-blocks on 4 vertices. See Figure 8. Observe that  $B_{4,a}$  is a  $K_4$ . The 3-vertex and 2-vertex triangular-blocks are simply  $K_3$  and  $K_2$  (the trivial triangular-block), respectively.

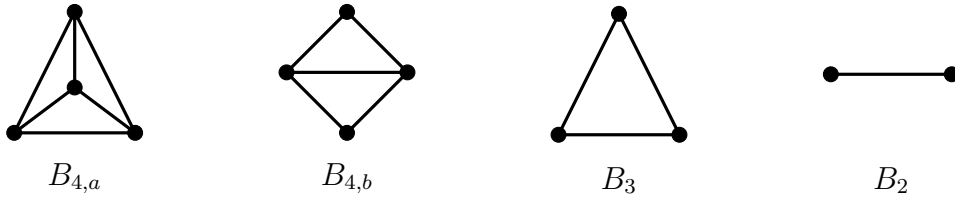


Figure 8: Triangular-blocks on 4,3 and 2 vertices.

**Definition 7.** Let  $G$  be a plane graph.

- (i) A vertex  $v$  in  $G$  is called a **junction vertex** if it is in at least two distinct triangular-blocks of  $G$ .
- (ii) Let  $B$  be a triangular-block in  $G$ . An edge of  $B$  is called an **exterior edge** if it is on a boundary of non-triangular face of  $G$ . Otherwise, we call it an **interior edge**. An endvertex of an exterior edge is called an **exterior vertex**. We denote the set of all exterior and interior edges of  $B$  by  $Ext(B)$  and  $Int(B)$  respectively. Let  $e \in Ext(B)$ , a non-triangular face of  $G$  with  $e$  on the boundary is called the **exterior face** of  $e$ .

Notice that an exterior edge of a non-trivial triangular-block has exactly one exterior face. On the other hand, if  $G$  is a 2-connected plane graph, then every trivial triangular-block has two exterior faces. For a non-trivial triangular-block  $B$  of a plane graph  $G$ , we

call a path  $P = v_1v_2v_3 \dots v_k$  an *exterior path* of  $B$ , if  $v_1$  and  $v_k$  are junction vertices and  $v_iv_{i+1}$  are exterior edges of  $B$  for  $i \in \{1, 2, \dots, k-1\}$  and  $v_j$  is not junction vertex for all  $j \in \{2, 3, \dots, k-1\}$ . The corresponding face in  $G$  where  $P$  is on the boundary of the face is called the *exterior face* of  $P$ .

Next, we give the definition of the contribution of a vertex and an edge to the number of vertices and faces of  $C_6$ -free plane graph  $G$ . All graphs discussed from now on are  $C_6$ -free plane graph.

**Definition 8.** Let  $G$  be a plane graph,  $B$  be a triangular-block in  $G$  and  $v \in V(B)$ . The contribution of  $v$  to the vertex number of  $B$  is denoted by  $n_B(v)$ , and is defined as

$$n_B(v) = \frac{1}{\# \text{ triangular-blocks in } G \text{ containing } v}.$$

We define the contribution of  $B$  to the number of vertices of  $G$  as  $n(B) = \sum_{v \in V(B)} n_B(v)$ .

Obviously,  $v(G) = \sum_{B \in \mathcal{B}} n(B)$ , where  $v(G)$  is the number of vertices in  $G$  and  $\mathcal{B}$  is the family of triangular-blocks of  $G$ .

Let  $B_{K_5^-}$  be a triangular-block of  $G$  isomorphic to a  $B_{5,a}$  with exterior vertices  $v_1, v_2, v_3$ , where  $v_1$  and  $v_3$  are junction vertices, see Figure 9 for an example. Let  $F$  be a face in  $G$  such that  $V(F)$  contains all exterior vertices  $v_{1,1}, \dots, v_{1,m}, v_{2,1}, \dots, v_{2,m}, v_{3,1}, \dots, v_{3,m}$  of  $m$  ( $m \geq 1$ ) copies of  $B_{K_5^-}$ , such that  $v_{1,i}, v_{2,i}, v_{3,i}$  are the exterior vertices of the  $i$ -th  $B_{K_5^-}$  and  $v_{1,i}, v_{3,i}$  ( $1 \leq i \leq m$ ) are junction vertices. Let  $C_F$  denote the cycle associated with the face  $F$ . We alter  $E(C_F)$  in the following way:

$$E(C'_F) := E(C_F) - \{v_{1,1}v_{2,1}v_{3,1}\} - \dots - \{v_{1,m}v_{2,m}v_{3,m}\} \cup \{v_{1,1}v_{3,1}\} \cup \dots \cup \{v_{1,m}, v_{3,m}\}.$$

Hence, the length of  $F$  as  $|E(C'_F)| = |E(C_F)| - m$ . For example, in Figure 9,  $|E(C_F)| = 11$  but  $|E(C'_F)| = 9$ .

Now we are able to define the **contribution** of an “edge” to the number of faces of  $C_6$ -free plane graph  $G$ .

**Definition 9.** Let  $F$  be a exterior face of  $G$  and  $C_F := \{e_1, e_2, \dots, e_k\}$  be the cycle associated with  $F$ . The contribution of an exterior edge  $e$  to the face number of the exterior face  $F$ , is denoted by  $f_F(e)$ , and is defined as follows.

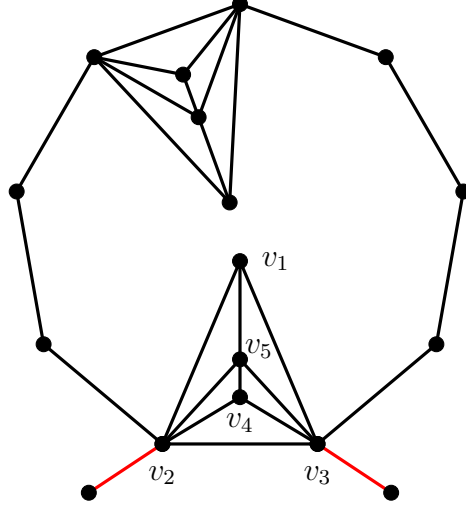


Figure 9: An example of a face containing all the exterior vertices of at least one  $B_{K_5^-}$ .

(i) If  $e_1$  and  $e_2$  are adjacent exterior edges of  $B_{K_5^-}$ , then  $f_F(e_1) + f_F(e_2) = \frac{1}{|C'_F|}$ , and  $f_F(e_i) = \frac{1}{|C'_F|}$ , where  $i \in \{3, 4, \dots, k\}$ .

(ii) Otherwise,  $f_F(e) = \frac{1}{|C_F|}$ .

Note that  $\sum_{e \in E(F)} f_F(e) = 1$ . For a triangular-block  $B$ , the total face contribution of  $B$  is denoted by  $f_B$  and defined as  $f_B = (\# \text{ interior faces of } B) + \sum_{e \in \text{Ext}(B)} f_F(e)$ , where  $F$  is the exterior face of  $B$  with respect to  $e$ . Obviously,  $f(G) = \sum_{B \in \mathcal{B}} f(B)$ , where  $f(G)$  is the number of faces of  $G$ .

## 4 Proof of Theorem 2

We begin by outlining our proof. Let  $f$ ,  $n$ , and  $e$  be the number of faces, vertices, and edges of  $G$  respectively. Let  $\mathcal{B}$  be the family of all triangular-blocks of  $G$ .

The main target of the proof is to show that

$$7f + 2n - 5e \leq 0. \quad (1)$$

Once we show (1), then by using Euler's Formula,  $e = f + n - 2$ , we can finish the proof of Theorem 2. To prove (1), we show the existence of a partition  $\mathcal{P}_1, \mathcal{P}_2, \dots, \mathcal{P}_m$  of  $\mathcal{B}$  such that

$7 \sum_{B \in \mathcal{P}_i} f(B) + 2 \sum_{B \in \mathcal{P}_i} n(B) - 5 \sum_{B \in \mathcal{P}_i} e(B) \leq 0$ , for all  $i \in \{1, 2, 3, \dots, m\}$ . Since  $f = \sum_{B \in \mathcal{B}} f(B)$ ,  $n = \sum_{B \in \mathcal{B}} n(B)$  and  $e = \sum_{B \in \mathcal{B}} e(B)$  we have

$$\begin{aligned} 7f + 2n - 5e &= 7 \sum_i^m \sum_{B \in \mathcal{P}_i} f(B) + 2 \sum_i^m \sum_{B \in \mathcal{P}_i} n(B) - 5 \sum_i^m \sum_{B \in \mathcal{P}_i} e(B) \\ &= \sum_i^m \left( 7 \sum_{B \in \mathcal{P}_i} f(B) + 2 \sum_{B \in \mathcal{P}_i} n(B) - 5 \sum_{B \in \mathcal{P}_i} e(B) \right) \leq 0. \end{aligned}$$

The following proposition will be useful in many lemmas.

**Proposition 10.** *Let  $G$  be a 2-connected,  $C_6$ -free plane graph on  $n$  ( $n \geq 6$ ) vertices with  $\delta(G) \geq 3$ .*

- (i) *If  $B$  is a nontrivial triangular-block (that is, not  $B_2$ ), then none of the exterior faces can have length 5.*
- (ii) *If  $B$  is in  $\{B_{5,a}, B_{5,b}, B_{5,c}, B_{4,a}\}$ , then none of the exterior faces can have length 4.*
- (iii) *If  $B$  is in  $\{B_{5,d}, B_{4,b}\}$  and an exterior face of  $B$  has length 4, then that 4-face must share a 2-path with  $B$  (shown in blue in Figures 13 and 14) and the other edges of the face must be in trivial triangular-blocks.*
- (iv) *No two 4-faces can be adjacent to each other.*

*Proof.* (i) Observe that any pair of consecutive exterior vertices of a nontrivial triangular-block has a path of length 2 (counted by the number of edges) between them and any pair of nonconsecutive exterior vertices has a path of length 3 between them. So having a face of length 5 incident to this triangular-block would yield a  $C_6$ , a contradiction.

- (ii) If  $B$  is in  $\{B_{5,a}, B_{5,b}, B_{5,c}, B_{4,a}\}$ , then any pair of consecutive exterior vertices of the listed triangular-blocks has a path of length 3 between them. It remains to consider nonconsecutive vertices for  $\{B_{5,b}, B_{5,c}\}$ . For  $B_{5,b}$  each pair of nonconsecutive exterior vertices has a path of length 3 between them. In the case where  $B$  is  $B_{5,c}$ , this is true for all pairs without an edge between them. As for the other pairs, if they are in the

same 4-face, then at least one of the degree-2 vertices in  $B$  must have degree 2 in  $G$ , a contradiction.

- (iii) In both  $B_{5,d}$  and  $B_{4,b}$ , any pair of consecutive exterior vertices has a path of length 3 between them. For  $B_{5,d}$ , in Figure 13, we see that there is a path of length 4 between  $v_2$  and  $v_4$  and so the only way a 4-face can be adjacent to  $B$  is via a 2-path with endvertices  $v_1$  and  $v_3$ . In fact, because there is no vertex of degree 2, the path must be  $v_1v_4v_3$ . For  $B_{4,b}$ , in Figure 13, we see that because  $B$  cannot have a vertex of degree 2, the 4-face and  $B$  cannot share the path  $v_2v_1v_4$  or the path  $v_2v_3v_4$ . Thus the only paths that can share a boundary with a 4-face are  $v_1v_4v_3$  and  $v_1v_2v_3$ .

As to the other blocks that form edges of such a 4-face. In Figure 10, we see that if, say,  $v_1u$  is in a nontrivial triangular-block, then there is a vertex  $w$  in that block, in which case  $wv_1xv_4v_3uw$  forms a 6-cycle, a contradiction.

- (iv) If two 4-faces share an edge, then there is a 6-cycle formed by deleting that edge. If two 4-faces share a 2-path, then the midpoint of that path is a vertex of degree 2 in  $G$ . In both cases, a contradiction.

□



Figure 10: Proposition 10(iii): The blocks defined by blue edges must be trivial.

To show the existence of such a partition we need the following lemmas.

**Lemma 11.** *Let  $G$  be a 2-connected,  $C_6$ -free plane graph on  $n$  ( $n \geq 6$ ) vertices with  $\delta(G) \geq 3$ . If  $B$  is a triangular-block in  $G$  such that  $B \notin \{B_{5,d}, B_{4,b}\}$ , then  $7f(B) + 2n(B) - 5e(B) \leq 0$ .*

*Proof.* We separate the proof into several cases.

**Case 1:  $B$  is  $B_{5,a}$ .**

Let  $v_1, v_2$  and  $v_3$  be the exterior vertices of  $K_5^-$ . At least two of them must be junction vertices, otherwise  $G$  contains a cut vertex. We consider 2 possibilities to justify this case.

- (a) Let  $B$  be  $B_{5,a}$  with 3 junction vertices (see Figure 11(a)). By Proposition 10, every exterior edge in  $B$  is contained in an exterior face with length at least 7. Thus,  $f(B) = (\# \text{ interior faces of } B) + \sum_{e \in \text{Ext}(B)} f_F(e) \leq 5 + 3/7$ . Moreover, every junction vertex is contained in at least 2 triangular-blocks, so we have  $n(B) \leq 2 + 3/2$ . With  $e(B) = 9$ , we obtain  $7f(B) + 2n(B) - 5e(B) \leq 0$ .
- (b) Let  $B$  be  $B_{5,a}$  with 2 junction vertices, say  $v_2$  and  $v_3$  (see Figure 11(b)). Let  $F$  and  $F_1$  are exterior faces of the exterior edge  $v_2v_3$  and exterior path  $v_2v_1v_3$  of the triangular-block respectively. Notice that  $v_1v_2$  and  $v_2v_3$  are the adjacent exterior edges in the same face  $F_1$ , hence  $|C(F_1)| \geq 8$ . By Definition 9, we have  $f_{F_1}(v_1v_2) + f_{F_1}(v_1v_3) \leq 1/7$ . Because there can be no  $C_6$ , one can see that regardless of the configuration of the  $B_{K_5^-}$ , it is the case that  $f_F(v_2v_3) \leq 1/7$ . Thus,  $f(B) \leq 5 + 2/7$ . Moreover, since  $v_1$  and  $v_3$  are contained in at least 2 triangular-blocks, we have  $n(B) \leq 3 + 2/2$ . With  $e(B) = 9$ , we obtain  $7f(B) + 2n(B) - 5e(B) \leq 0$ .

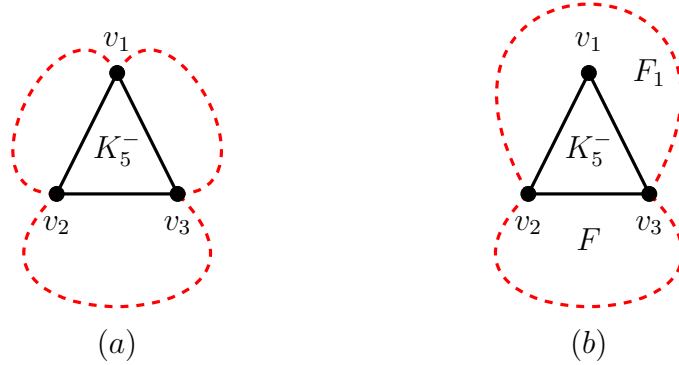


Figure 11: A  $B_{5,a}$  triangular-block with 3 and 2 junction vertices, respectively.

**Case 2:  $B$  is in  $\{B_{4,a}, B_{5,b}, B_{5,c}\}$ .**

- (a) Let  $B$  be a  $B_{4,a}$ . By Proposition 10, each face incident to this triangular-block has length at least 7. So,  $f(B) \leq 3 + 3/7$ . Because there is no cut-vertex, this triangular-block must have at least two junction vertices, hence  $n(B) \leq 2 + 2/2$ . With  $e(B) = 6$ , we obtain  $7f(B) + 2n(B) - 5e(B) \leq 0$ .
- (b) Let  $B$  be a  $B_{5,b}$ . There are 4 faces inside the triangular-block and each face incident to this triangular-block has length at least 7. So,  $f(B) \leq 4 + 4/7$ . Because there is no cut-vertex, this triangular-block must have at least two junction vertices, hence  $n(B) \leq 3 + 2/2$ . With  $e(B) = 8$ , we obtain  $7f(B) + 2n(B) - 5e(B) \leq 0$ , as seen in Table 2.
- (c) Let  $B$  be a  $B_{5,c}$ . Similarly,  $f(B) \leq 3 + 5/7$  and because there are at least two junction vertices,  $n(B) \leq 3 + 2/2$ . With  $e(B) = 7$ , we obtain  $7f(B) + 2n(B) - 5e(B) \leq -1$ .

**Case 3:  $B$  is  $B_3$ .**

Let  $v_1, v_2$  and  $v_3$  be the exterior vertices of triangular-block  $B$ . Each of these three must be junction vertices since there is no degree 2 vertex in  $G$ , which implies that each is contained in at least 2 triangular-blocks. We consider two possibilities:

- (a) Let the three exterior vertices be contained in exactly 2 triangular-blocks. By Proposition 10(i), the length of each exterior face is either 4 or at least 7. We want to show that at most one exterior face has length 4.

If not, then let  $x_1$  be a vertex that is in two such faces. Consider the triangular-block incident to  $B$  at  $x_1$ , call it  $B'$ . By Proposition 10,  $B'$  is not in  $\{B_{5,a}, B_{5,b}, B_{5,c}, B_{4,a}\}$ .

If  $B'$  is in  $\{B_{5,d}, B_{4,b}, B_3\}$ , then the triangular-block has vertices  $\ell_2, \ell_3$ , each adjacent to  $x_1$  and the length-4 faces consist of  $\{v_1, \ell_2, m_2, v_2\}$  and  $\{v_1, \ell_3, m_3, v_3\}$ . Either  $\ell_2 \sim \ell_3$  (in which case  $\ell_2 m_2 v_2 v_3 m_3 \ell_3 \ell_2$  is a 6-cycle, see Figure 12(a)) or there is a  $\ell'$  distinct from  $v_1$  that is adjacent to both  $\ell_2$  and  $\ell_3$  (in which case  $\ell' \ell_2 m_2 v_2 v_1 \ell_3 \ell_2$  is a 6-cycle, see Figure 12(b)).

If  $B'$  is  $B_2$ , then the trivial triangular-block is  $\{v_1, \ell\}$ , in which case  $\{\ell, m_2, v_2, v_1, v_3, m_3\}$  is a  $C_6$ , see Figure 12(c). Thus, we may conclude that if each of the three exterior vertices are in exactly 2 triangular-blocks, then  $f(B) \leq 1 + 2/7 + 1/4$  and  $n(B) \leq 3/2$ . With  $e(B) = 3$ , we obtain  $7f(B) + 2n(B) - 5e(B) \leq -5/4$ .

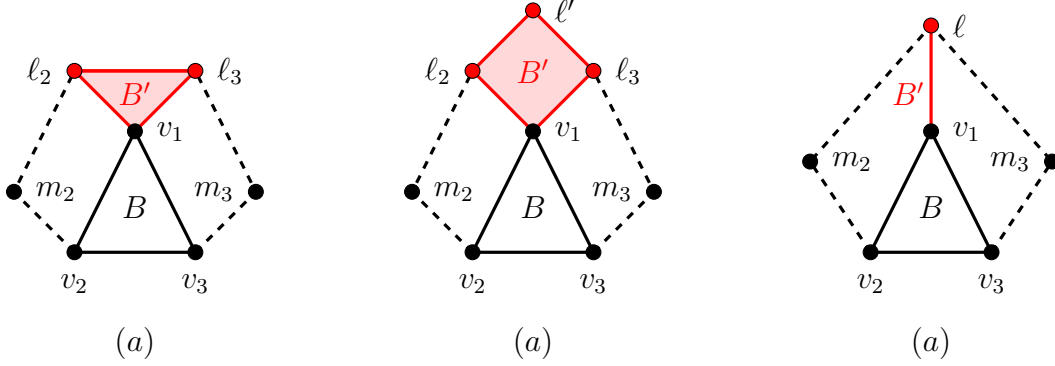


Figure 12: A  $B_3$  triangular-block,  $B$  and the various cases of what must occur if  $B$  is incident to two 4-faces.

- (b) Let at least one exterior vertex be contained in at least 3 triangular-blocks and the others be contained at least 2 triangular-blocks. In this case, we have  $f(B) \leq 1 + 3/4$  and  $n(B) \leq 2/2 + 2/3$ . With  $e(B) = 3$ , we obtain  $7f(B) + 2n(B) - 5e(B) \leq -1/12$ .

**Case 4:  $B$  is  $B_2$ .**

Note that the fact that there is no vertex of degree 2 gives that if an endvertex is in exactly two triangular-blocks, then the other one cannot be a  $B_2$ . We consider three possibilities:

- (a) Let each endvertex be contained in exactly 2 triangular-blocks. Since neither of the triangular-blocks incident to  $B$  can be trivial, they cannot be incident to a face of length 5 by Proposition 10(i). Thus,  $B$  cannot be incident to a face of length 5. Moreover, the two faces incident to  $B$  cannot both be of length 4, again by Proposition 10(iv). Hence,  $f(B) \leq 1/4 + 1/7$ . Clearly  $n(B) \leq 2/2$  and with  $e(B) = 1$ , we obtain  $7f(B) + 2n(B) - 5e(B) \leq -1/4$ .
- (b) Let one endvertex be contained in exactly 2 triangular-blocks and the other endvertex be contained in at least 3 triangular-blocks. This is similar to case (a) in that neither



face can have length 5 and they cannot both have length 4. The only difference is that  $n(B) \leq 1/2 + 1/3$  and so  $7f(B) + 2n(B) - 5e(B) \leq -7/12$ .

- (c) Let each endvertex be contained in at least 3 triangular-blocks. The two faces cannot both be of length 4 by Proposition 10(iv). Hence,  $f(B) \leq 1/4 + 1/5$  and  $n(B) \leq 2/3$ . With  $e(B) = 1$ , we obtain  $7f(B) + 2n(B) - 5e(B) \leq -31/60$ .

□

**Lemma 12.** *Let  $G$  be a 2-connected,  $C_6$ -free plane graph on  $n$  ( $n \geq 6$ ) vertices with  $\delta(G) \geq 3$ . If  $B$  is  $B_{5,d}$ , then  $7f(B) + 2n(B) - 5e(B) \leq 1/2$ . Moreover,  $7f(B) + 2n(B) - 5e(B) \leq 0$  unless  $B$  shares a 2-path with a 4-face.*

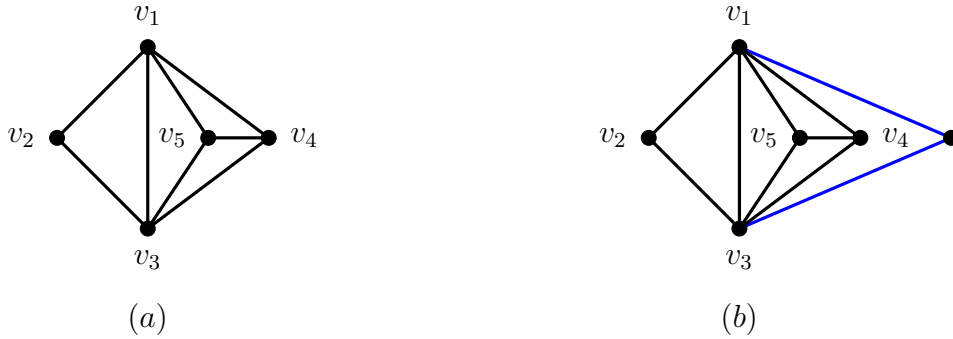


Figure 13: A  $B_{5,d}$  triangular-block and how a 4-face must be incident to it.

*Proof.* Let  $B$  be  $B_{5,d}$  with vertices  $v_1, v_2, v_3, v_4$ , and  $v_5$ , as shown in Figure 13(a). By Proposition 10(i), no exterior face of  $B$  can have length 5. By Proposition 10(iii), if there is an exterior face of  $B$  that has length 4, this 4-face must contain the path  $v_1v_4v_3$ .

Moreover, since there is no vertex of degree 2,  $v_2$  is a junction vertex. Because  $G$  has no cut-vertex, there is at least one other junction vertex. We may consider the following cases:

- (a) Let  $v_4$  be a junction vertex. This prevents an exterior face of length 4. Thus, each exterior face has length at least 7. Hence,  $f(B) \leq 4 + 4/7$  and  $n(B) \leq 3 + 2/2$ . With  $e(B) = 8$ , we obtain  $7f(B) + 2n(B) - 5e(B) \leq 0$ .

- (b) Let  $v_4$  fail to be a junction vertex and exactly one of  $v_1, v_3$  be a junction vertex. Without loss of generality let it be  $v_3$ . In this case, again, each exterior face has length<sup>1</sup> at least 7. Again,  $f(B) \leq 4 + 4/7$  and  $n(B) \leq 3 + 2/2$ . With  $e(B) = 8$ , we obtain  $7f(B) + 2n(B) - 5e(B) \leq 0$ .
- (c) Let  $v_4$  fail to be a junction vertex and both  $v_1$  and  $v_3$  be junction vertices. Here either the exterior path  $v_1v_4v_3$  is part of an exterior face of length at least 4 or each edge must be in a face of length at least 7. If the exterior face is of length at least 7, then  $f(B) \leq 4 + 4/7$ , otherwise  $f(B) \leq 4 + 2/4 + 2/7$ . In both cases,  $n(B) \leq 2 + 3/2$  and  $e(B) = 8$ . Hence we obtain  $7f(B) + 2n(B) - 5e(B) \leq -1$  in the first instance and  $7f(B) + 2n(B) - 5e(B) \leq 1/2$  in the case where  $B$  is incident to a 4-face.

□

**Lemma 13.** *Let  $G$  be a 2-connected,  $C_6$ -free plane graph on  $n$  ( $n \geq 6$ ) vertices with  $\delta(G) \geq 3$ . If  $B$  is  $B_{4,b}$ , then  $7f(B) + 2n(B) - 5e(B) \leq 4/3$ . Moreover,  $7f(B) + 2n(B) - 5e(B) \leq 1/6$  if  $B$  shares a 2-path with exactly one 4-face and  $7f(B) + 2n(B) - 5e(B) \leq 0$  if  $B$  fails to share a 2-path with any 4-face.*

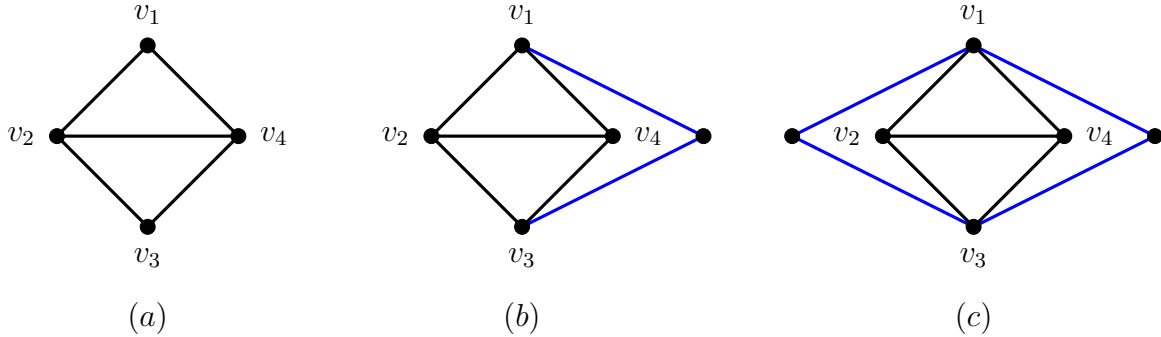


Figure 14: A  $B_{4,b}$  triangular-block and how a 4-face must be incident to it.

*Proof.* Let  $B$  be with vertices  $v_1, v_2, v_3$ , and  $v_4$ , as shown in Figure 14(a). By Proposition 10(i), no exterior face of  $B$  can have length 5. If there is an exterior face of  $B$  that has

<sup>1</sup>In fact, it can be shown that the length of the exterior face containing the path  $v_2v_1v_4v_3$  is at least 9. This yields  $f(B) \leq 4 + 1/7 + 3/9$  and  $7f(B) + 2n(B) - 5e(B) \leq -2/3$ . However, this precision is unnecessary.

length 4, it is easy to verify that being  $C_6$ -free and having no vertex of degree 2 means that the junction vertices must be  $v_1$  and  $v_3$ . We may consider the following cases.

- (a) Let either  $v_2$  or  $v_4$  be a junction vertex and, without loss of generality, let it be  $v_2$ . All the exterior faces have length at least 7 except for the possibility that the path  $v_1v_4v_3$  may form two sides of a 4-face. Hence,  $f(B) \leq 2 + 2/4 + 2/7$  and  $n(B) \leq 1 + 3/2$ . With  $e(B) = 5$ , we obtain  $7f(B) + 2n(B) - 5e(B) \leq -1/2$ .
- (b) Let neither  $v_2$  nor  $v_4$  be a junction vertex. Because there is no cut-vertex, this requires both  $v_1$  and  $v_3$  to be junction vertices. Hence, there are two exterior faces: One that shares the exterior path  $v_1v_4v_3$  and the other shares the exterior path  $v_1v_2v_3$ . Each exterior face has length either 4 or at least 7. We consider several subcases:
  - (i) If both faces are of length at least 7, then  $f(B) \leq 2 + 4/7$ , and  $n(B) \leq 2 + 2/2$ . With  $e(B) = 5$ , we obtain  $7f(B) + 2n(B) - 5e(B) \leq -1$ .
  - (ii) If only one of the exterior faces is of length 4, then  $f(B) \leq 2 + 2/7 + 2/4$ . Moreover, at least one of  $v_1, v_3$  must be a junction vertex for more than two triangular-blocks, otherwise either  $v(G) = 5$  or the vertex incident to two blue edges in Figure 14(b) is a cut-vertex. Hence,  $n(B) \leq 2 + 1/3 + 1/2$  and with  $e(B) = 5$ , we have  $7f(B) + 2n(B) - 5e(B) \leq 1/6$ .
  - (iii) Both exterior faces are of length 4. Thus  $f(B) \leq 2 + 4/4$ . By Proposition 10(iii), the blocks represented by the blue edges in Figure 14(c) are each trivial. Hence  $n(B) \leq 2 + 2/3$ . With  $e(B) = 5$ , we get  $7f(B) + 2n(B) - 5e(B) \leq 4/3$ .

□

Tables 2 and 3 in Appendix A give a summary of Lemmas 11, 12, and 13.

**Lemma 14.** *Let  $G$  be a 2-connected,  $C_6$ -free plane graph on  $n$  ( $n \geq 6$ ) vertices with  $\delta(G) \geq 3$ . Then the triangular-blocks of  $G$  can be partitioned into sets,  $\mathcal{P}_1, \mathcal{P}_2, \dots, \mathcal{P}_m$  such that*

$$7 \sum_{B \in \mathcal{P}_i} f(B) + 2 \sum_{B \in \mathcal{P}_i} n(B) - 5 \sum_{B \in \mathcal{P}_i} e(B) \leq 0 \text{ for all } i \in [m].$$

*Proof.* As it can be seen from Tables 2 and 3 in Appendix A, there are three possible cases where  $7f(B) + 2n(B) - 5e(B)$  assumes a positive value. We deal with each of these blocks as follows.

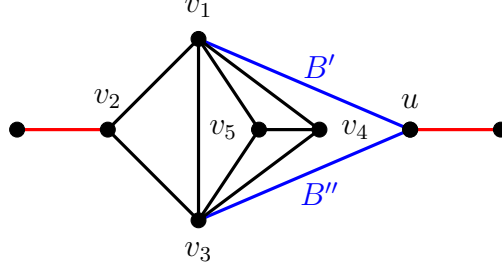


Figure 15: Structure of a  $B_{5,d}$  if it is incident to a 4-face, as in Lemma 14. The triangular-blocks  $B'$  and  $B''$  are trivial.

- (1) Let  $B$  be a  $B_{5,d}$  triangular-block as described in the proof of Lemma 12(c). See Figure 15.

By Proposition 10(iii), the edges  $v_1u$  and  $v_3u$  are trivial triangular-blocks. Denote these triangular-blocks as  $B'$  and  $B''$ . Consider  $B'$ . One of the exterior faces of  $B'$  has length 4 whereas by Proposition 10(iv), the other has length at least 5. It must have length at least 7 because if it had length 5, then the path  $v_1v_3u$  would complete it to a 6-cycle. Thus,  $f(B') \leq 1/4 + 1/7$ . Since the vertex  $u$  cannot be of degree 2, then this vertex is shared in at least three triangular-blocks. Thus,  $n(B') \leq 1/2 + 1/3$ . With  $e(B') = 1$ , we obtain  $7f(B') + 2n(B') - 5e(B') \leq -7/12$  and similarly,  $7f(B'') + 2n(B'') - 5e(B'') \leq -7/12$ . Define  $\mathcal{P}' = \{B, B', B''\}$ . Thus,  $7 \sum_{B^* \in \mathcal{P}'} f(B^*) + 2 \sum_{B^* \in \mathcal{P}'} n(B^*) - 5 \sum_{B^* \in \mathcal{P}'} e(B^*) \leq 1/2 + 2(-7/12) = -2/3$ .

Therefore, for each triangular-block in  $G$  as described in Lemma 12(c), it belongs to a set  $\mathcal{P}'$  of three triangular-blocks such that  $7 \sum_{B^* \in \mathcal{P}'} f(B^*) + 2 \sum_{B^* \in \mathcal{P}'} n(B^*) - 5 \sum_{B^* \in \mathcal{P}'} e(B^*) \leq 0$ . Denote such sets as  $\mathcal{P}_1, \mathcal{P}_2, \dots, \mathcal{P}_{m_1}$  if they exist.

- (2) Let  $B$  be a  $B_{4,b}$  triangular-block as described in the proof of Lemma 13(b)(ii). See Figure 16(a).

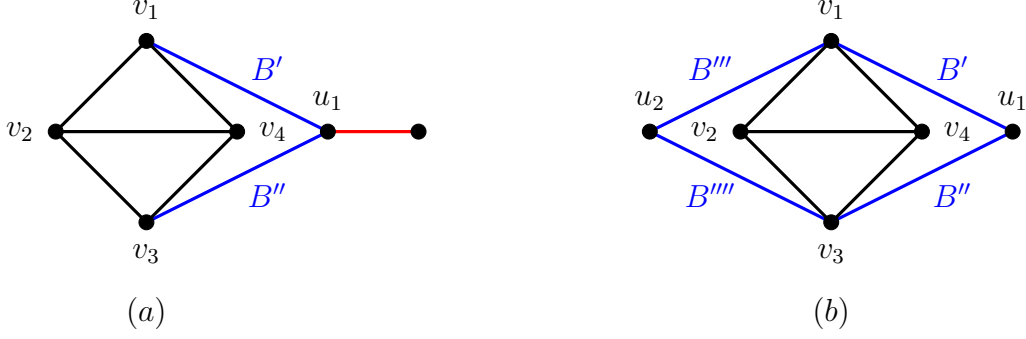


Figure 16: Structure of a  $B_{4,b}$  triangular-block if it is incident to a 4-face, as in Lemma 14. The triangular-blocks  $B'$ ,  $B''$ ,  $B'''$ , and  $B''''$  are all trivial.

By Proposition 10(iii), the edges  $v_1u_1$  and  $v_3u_1$  are trivial triangular-blocks. Denote them as  $B'$  and  $B''$ , respectively. Consider  $B'$ . One of the exterior faces of  $B'$  has length 4 and by Proposition 10(iv), the other has length at least 5. Thus,  $f(B') \leq 1/4 + 1/5$ . Since the vertex  $u_1$  cannot be of degree 2, then this vertex is shared in at least three triangular-blocks. Thus,  $n(B') \leq 1/2 + 1/3$ . With  $e(B') = 1$ , we obtain  $7f(B') + 2n(B') - 5e(B') \leq -11/60$  and similarly,  $7f(B'') + 2n(B'') - 5e(B'') \leq -11/60$ . Define  $\mathcal{P}'' = \{B, B', B''\}$ . Thus,  $7 \sum_{B^* \in \mathcal{P}''} f(B^*) + 2 \sum_{B^* \in \mathcal{P}''} n(B^*) - 5 \sum_{B^* \in \mathcal{P}''} e(B^*) \leq 1/6 + 2(-11/60) = -1/5$ .

Therefore, for each triangular-block in  $G$  as described in Lemma 13(b)(ii), it belongs to a set  $\mathcal{P}''$  of three triangular-blocks such that  $7 \sum_{B^* \in \mathcal{P}''} f(B^*) + 2 \sum_{B^* \in \mathcal{P}''} n(B^*) - 5 \sum_{B^* \in \mathcal{P}''} e(B^*) \leq 0$ . Denote such sets as  $\mathcal{P}_{m_1+1}, \mathcal{P}_{m_1+2}, \dots, \mathcal{P}_{m_2}$  if they exist.

- (3) Let  $B$  be a  $B_{4,b}$  triangular-block as described in the proof of Lemma 13(b)(iii). See Figure 16(b).

By Proposition 10(iii), the edges  $v_1u_1$ ,  $v_3u_1$ ,  $v_1u_2$ , and  $v_3u_2$  are trivial triangular-blocks. Denote them as  $B'$ ,  $B''$ ,  $B'''$  and  $B''''$  respectively. Consider  $B'$ . One of the exterior faces of  $B'$  has length 4 whereas the other has length at least 5. Thus,  $f(B') \leq 1/4 + 1/5$ . Since the vertex  $u_1$  cannot be of degree 2, then this vertex is shared in at least three triangular-blocks. Clearly  $v_1$  is in at least three triangular-blocks. Thus,  $n(B') \leq 2/3$ . With  $e(B') = 1$ , we obtain  $7f(B') + 2n(B') - 5e(B') \leq -31/60$  and the same inequality

holds for  $B''$ ,  $B'''$ , and  $B''''$ .

Define  $\mathcal{P}''' = \{B, B', B'', B''', B''''\}$ . Thus,  $7 \sum_{B^* \in \mathcal{P}''} f(B^*) + 2 \sum_{B^* \in \mathcal{P}''} n(B^*) - 5 \sum_{B^* \in \mathcal{P}''} e(B^*) \leq 4/3 + 4(-31/60) = -11/15$ .

Therefore, for each triangular-block in  $G$  as described in Lemma 13(b)(iii), it belongs to a set  $\mathcal{P}'$  of three triangular-blocks such that  $7 \sum_{B^* \in \mathcal{P}'''} f(B^*) + 2 \sum_{B^* \in \mathcal{P}'''} n(B^*) - 5 \sum_{B^* \in \mathcal{P}'''} e(B^*) \leq 0$ . Denote such sets as  $\mathcal{P}_{m_2+1}, \mathcal{P}_{m_2+2}, \dots, \mathcal{P}_{m_3}$  if they exist.

Now define  $\mathcal{P}_{m_3+1} = \mathcal{B} - \bigcup_{i=1}^{m_3} \mathcal{P}_i$ , where  $\mathcal{B}$  is the set of all blocks of  $G$ . Clearly, for each block  $B \in \mathcal{P}_{m_3+1}$ ,  $7f(B) + 2n(B) - 5e(B) \leq 0$ . Thus,  $7 \sum_{B \in \mathcal{P}_{m_3+1}} f(B) + 2 \sum_{B \in \mathcal{P}_{m_3+1}} n(B) - 5 \sum_{B \in \mathcal{P}_{m_3+1}} e(B) \leq 0$ . Putting  $m := m_3 + 1$  we got the partition  $\mathcal{P}_1, \mathcal{P}_2, \dots, \mathcal{P}_m$  of  $\mathcal{B}$  meeting the condition of the lemma.  $\square$

This completes the proof of Theorem 2.

## 5 Proof of Theorem 3

Let  $G$  be a  $C_6$ -free plane graph. We will show that either  $5v(G) - 2e(G) \geq 14$  or  $v(G) \leq 17$ .

If we delete a vertex  $x$  from  $G$ , then

$$\begin{aligned} 5v(G-x) - 2e(G-x) &= 5(v(G) - 1) - 2(e(G) - \deg(x)) \\ &= 5v(G) - 2e(G) - 5 + 2\deg(x) \\ &\geq 5v(G) - 2e(G) - 1. \end{aligned}$$

So, graph  $G$  has an induced subgraph  $G'$  with  $\delta(G) \geq 3$  with

$$5v(G) - 2e(G) \geq 5v(G') - 2e(G') + (v(G) - v(G')) \quad (2)$$

In line with usual graph theoretic terminology, we call a maximal 2-connected subgraph a **block**. Let  $\mathcal{B}'$  denote the set of blocks of  $G'$  with the  $i^{\text{th}}$  block having  $n_i$  vertices and  $e_i$  edges. Let  $b$  be the total number of blocks of  $G'$ . Specifically, let  $b_2, b_3, b_4$ , and  $b_5$  denote

	min of $5n - 2e - 5$	
$n \geq 6$	$14 - 5 \geq 9$	Theorem 2
$n = 5$	$5(5) - 2(9) - 5 \geq 2$	$B_{5,a}$ , Figure 7
$n = 4$	$5(4) - 2(6) - 5 \geq 3$	$B_{4,a}$ , Figure 8
$n = 3$	$5(3) - 2(3) - 5 \geq 4$	$B_3$ , Figure 8
$n = 2$	$5(2) - 2(2) - 5 \geq 3$	$B_2$ , Figure 8

Table 1: Estimates of  $5n - 2e - 5$  for various block sizes.

the number of blocks of size 2, 3, 4, and 5, respectively. Let  $b_6$  denote the number of blocks of size at least 6. Then we have  $b = b_6 + b_5 + b_4 + b_3 + b_2$  and, using Table 1:

$$\begin{aligned}
5v(G') - 2e(G') &= 5 \left( \sum_{i=1}^b n_i - (b-1) \right) - 2 \sum_{i=1}^b e_i \\
&= \sum_{i=1}^b (5n_i - 2e_i - 5) + 5 \\
&\geq 9b_6 + 2b_5 + 3b_4 + 4b_3 + 3b_2 + 5
\end{aligned} \tag{3}$$

Combining (2) and (3), we obtain

$$5v(G) - 2e(G) \geq 9b_6 + 2b_5 + 3b_4 + 4b_3 + 3b_2 + 5 + (v(G) - v(G')) \tag{4}$$

If  $b_6 \geq 1$ , then the right-hand side of (4) is at least 14, as desired.

So, let us assume that  $b_6 = 0$  and  $b = b_5 + b_4 + b_3 + b_2$ . Furthermore,

$$\begin{aligned}
v(G') &= 5b_5 + 4b_4 + 3b_3 + 2b_2 - (b-1) \\
&= 4b_5 + 3b_4 + 2b_3 + b_2 + 1.
\end{aligned} \tag{5}$$

So, substituting  $2b_5$  from (5) into (4), we have

$$\begin{aligned}
5v(G) - 2e(G) &\geq 2b_5 + 3b_4 + 4b_3 + 3b_2 + 5 + (v(G) - v(G')) \\
&= \left( \frac{1}{2}v(G') - \frac{3}{2}b_4 - b_3 - \frac{1}{2}b_2 - \frac{1}{2} \right) + 3b_4 + 4b_3 + 3b_2 + 5 + (v(G) - v(G')) \\
&= v(G) - \frac{1}{2}v(G') + \frac{3}{2}b_4 + 3b_3 + \frac{5}{2}b_2 + \frac{9}{2} \\
&\geq \frac{1}{2}v(G) + \frac{9}{2},
\end{aligned}$$

which is strictly larger than 13 if  $v(G) \geq 18$ . Since  $5v(G) - 2e(G)$  is an integer, it is at least 14 and this completes the proof of Theorem 3.

**Remark 2.** *Observe that for  $n \geq 17$ , the only graphs on  $n$  vertices with  $e$  edges such that  $e > (5/2)n - 7$  have blocks of order 5 or less and by (4), there are at most 4 such triangular blocks. A bit of analysis shows that the maximum number of edges is achieved when the number of blocks of order 5 is as large as possible.*

## 6 Conclusions

We note that the proof of Theorem 2, particularly Lemma 14, can be rephrased in terms of a discharging argument.

We believe that our construction in Theorem 4 can be generalized to prove  $\text{exp}(n, C_\ell)$  for  $\ell$  sufficiently large. That is, for certain values of  $n$ , we try to construct  $G_0$ , a plane graph with all faces of length  $\ell + 1$  with all vertices having degree 3 or degree 2.

If such a  $G_0$  exists, then the number of degree-2 and degree-3 vertices are  $\frac{(\ell-5)n+4(\ell+1)}{\ell-1}$  and  $\frac{4(n-\ell-1)}{\ell-1}$ , respectively. We could then apply steps similar to (1), (2), and (3) in the proof of Theorem 4 in that we add halving vertices and insert a graph  $B_{\ell-1}$  (see Figure 17) in place of vertices of degree 2 and 3. For the resulting graph  $G$ ,

$$\begin{aligned} v(G) &= v(G_0) + e(G_0) + (\ell - 4) \frac{(\ell - 5)n + 4(\ell + 1)}{\ell - 1} + (\ell - 5) \frac{4(n - \ell - 1)}{\ell - 1} \\ &= n + \frac{\ell + 1}{\ell - 1}(n - 2) + \frac{(\ell^2 - 5\ell)n + 2(\ell + 1)}{\ell - 1} \\ &= \frac{\ell^2 - 3\ell}{\ell - 1}n + \frac{2(\ell + 1)}{\ell} \\ e(G) &= (3\ell - 9)v(G_0) = (3\ell - 9)n \end{aligned}$$

Therefore,  $e(G) = \frac{3(\ell-1)}{\ell}v(G) - \frac{6(\ell+1)}{\ell}$ . We conjecture that this is the maximum number of edges in a  $C_\ell$ -free planar graph.

**Conjecture 15.** *Let  $G$  be an  $n$ -vertex  $C_\ell$ -free plane graph ( $\ell \geq 7$ ), then there exists an integer  $N_0 > 0$ , such that when  $n \geq N_0$ ,  $e(G) \leq \frac{3(\ell-1)}{\ell}n - \frac{6(\ell+1)}{\ell}$ .*



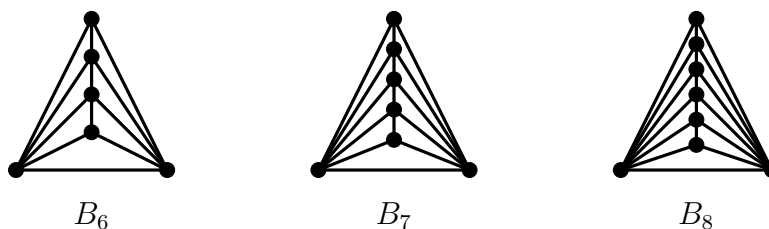


Figure 17:  $B_{\ell-1}$  is used in the construction of a  $C_\ell$ -free graph.

## 7 Acknowledgements

Gyóri's research was partially supported by the National Research, Development and Innovation Office NKFIH, grants K132696, K116769, and K126853. Martin's research was partially supported by Simons Foundation Collaboration Grant #353292 and by the J. William Fulbright Educational Exchange Program.

## References

- [1] C. Dowden, Extremal  $C_4$ -free/ $C_5$ -free planar graphs, *J. Graph Theory* **83** (2016), 213–230.
- [2] P. Erdős. On the structure of linear graphs. *Israel Journal of Mathematics* **1** (1963) 156–160.
- [3] P. Erdős. On the number of complete subgraphs contained in certain graphs. *Publ. Math. Inst. Hung. Acad. Sci.* **7** (1962) 459–464.
- [4] Y. Lan, Y. Shi, Z. Song. Extremal theta-free planar graphs. *Discrete Mathematics* **342**(12) (2019), Article 111610.
- [5] P. Turán. On an extremal problem in Graph Theory. *Mat. Fiz. Lapok* (in Hungarian). **48** (1941) 436–452.
- [6] A. Zykov. On some properties of linear complexes. *Mat. Sb. (N.S.)* **24**(66) (1949) 163–188.

# A Tables

The following tables give a summary of the results from Lemmas 11, 12, and 13.

A red edge incident to a vertex of a triangular-block indicates the corresponding vertex is a junction vertex. Moreover, if a vertex has only one red edge, it is to indicate the vertex is shared in at least two triangular-blocks. Whereas if a vertex has two red edges, it means that the vertex is shared in at least three blocks.

A pair of blue edges indicates the boundary of a 4-face.

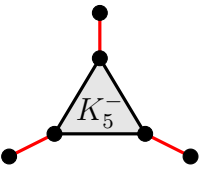
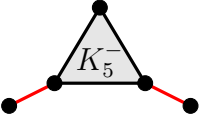
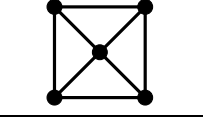
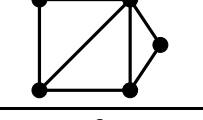
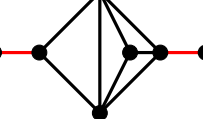
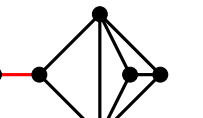
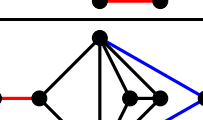
Case	$B$	Diagram	$f(B) \leq$	$n(B) \leq$	$e(B) =$	$7f + 2n - 5e \leq$
Lemma 11 1(a)	$B_{5,a}$		$5 + \frac{3}{7}$	$2 + \frac{3}{2}$	9	0
Lemma 11 1(b)	$B_{5,a}$		$5 + \frac{2}{7}$	$3 + \frac{2}{2}$	9	0
Lemma 11 2(b)	$B_{5,b}$		$4 + \frac{4}{7}$	$3 + \frac{2}{2}$	8	0
Lemma 11 2(c)	$B_{5,c}$		$3 + \frac{5}{7}$	$3 + \frac{2}{2}$	7	-1
Lemma 12 (a)	$B_{5,d}$		$4 + \frac{4}{7}$	$3 + \frac{2}{2}$	8	0
Lemma 12 (b)	$B_{5,d}$		$4 + \frac{4}{7}$	$3 + \frac{2}{2}$	8	0
Lemma 12 (c)	$B_{5,d}$		$4 + \frac{2}{4} + \frac{2}{7}$	$2 + \frac{3}{2}$	8	$\frac{1}{2} \star$

Table 2: All possible  $B_5$  blocks in  $G$  and the estimation of  $7f(B) + 2n(B) - 5e(B)$ .

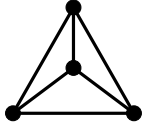
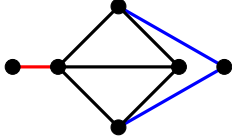
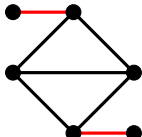
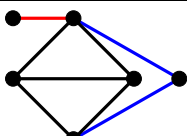
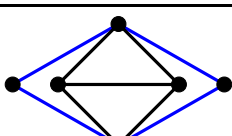
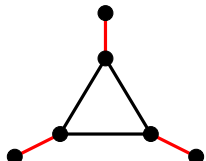
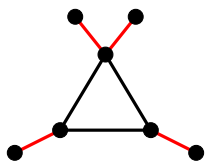

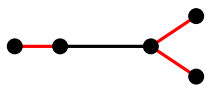
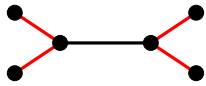
Case	$B$	Diagram	$f(B) \leq$	$n(B) \leq$	$e(B) =$	$7f + 2n - 5e \leq$
Lemma 11 2(a)	$B_{4,a}$		$3 + \frac{3}{7}$	$2 + \frac{2}{2}$	6	0
Lemma 13 (a)	$B_{4,b}$		$2 + \frac{2}{4} + \frac{2}{7}$	$1 + \frac{3}{2}$	5	$-\frac{1}{2}$
Lemma 13 (b)(i)	$B_{4,b}$		$2 + \frac{4}{7}$	$2 + \frac{2}{2}$	5	-1
Lemma 13 (b)(ii)	$B_{4,b}$		$2 + \frac{2}{4} + \frac{2}{7}$	$2 + \frac{1}{3} + \frac{1}{2}$	5	$\frac{1}{6} \star$
Lemma 13 (b)(iii)	$B_{4,b}$		$2 + \frac{2}{4} + \frac{2}{4}$	$2 + \frac{2}{3}$	5	$\frac{4}{3} \star$
Lemma 13 3(a)	$B_3$		$1 + \frac{2}{7} + \frac{1}{4}$	$\frac{3}{2}$	3	$-\frac{5}{4}$
Lemma 13 3(b)	$B_3$		$1 + \frac{3}{4}$	$\frac{2}{2} + \frac{1}{3}$	3	$-\frac{1}{12}$
Lemma 13 4(a)	$B_2$		$\frac{1}{4} + \frac{1}{7}$	$\frac{2}{2}$	1	$-\frac{1}{4}$
Lemma 13 4(b)	$B_2$		$\frac{1}{4} + \frac{1}{7}$	$\frac{1}{2} + \frac{1}{3}$	1	$-\frac{7}{12}$
Lemma 13 4(c)	$B_2$		$\frac{1}{4} + \frac{1}{5}$	$\frac{2}{3}$	1	$-\frac{31}{60}$

Table 3: All possible  $B_4, B_3$  and  $B_2$  blocks in  $G$  and the estimate of  $7f(B) + 2n(B) - 5e(B)$ .