

On the Graovac-Ghorbani index for bicyclic graphs with no pendant vertices

Diego Pacheco¹, Leonardo de Lima², Carla Silva Oliveira³

¹*Departamento de Engenharia de Produção, Centro Federal de Educação Tecnológica Celso Suckow da Fonseca, Rio de Janeiro, Brazil*

²*Departamento de Administração Geral e Aplicada -Universidade Federal do Paraná, Av. Prefeito Lothário Meissner -2º andar, 80210-170, Curitiba, PR, Brazil*

³*Escola Nacional de Ciências Estatísticas, Rua André Cavalcanti 106, Bairro de Fátima, 20231-050, RJ, Brazil*

diego.pacheco@aluno.cefet-rj.br, leonardo.delima@ufpr.br, carla.oliveira@ibge.gov.br

Abstract

Let $G = (V, E)$ be a simple undirected and connected graph on n vertices. The Graovac–Ghorbani index of a graph G is defined as

$$ABC_{GG}(G) = \sum_{uv \in E(G)} \sqrt{\frac{n_u + n_v - 2}{n_u n_v}},$$

where n_u is the number of vertices closer to vertex u than vertex v of the edge $uv \in E(G)$ and n_v is defined analogously. It is well-known that all bicyclic graphs with no pendant vertices are composed by three families of graphs, which we denote by $\mathcal{B}_n = B_1(n) \cup B_2(n) \cup B_3(n)$. In this paper, we give an lower bound to the ABC_{GG} index for all graphs in $B_1(n)$ and prove it is sharp by presenting its extremal graphs. Additionally, we conjecture a sharp lower bound to the ABC_{GG} index for all graphs in \mathcal{B}_n .

Keywords: *Graovac-Ghorbani index, Lower bound, Bicyclic graphs, Extremal graph*

1 Introduction

Let $G = (V, E)$ be a simple undirected and connected graph such that $n = |V|$ and $m = |E|$. The degree of a vertex $v \in V$, denoted by d_v , is the number of edges incident to v . The Graovac-Ghorbani index, [7], is defined as

$$ABC(G) = \sum_{uv \in E(G)} \sqrt{\frac{n_u + n_v - 2}{n_u n_v}}, \quad (1)$$

where n_u is the number of vertices closer to vertex u than vertex v of the edge $uv \in E(G)$ and n_v is defined analogously. Note that equidistant vertices from u and v are not taken into account to compute n_u and n_v in Equation (1). The problem of finding graphs with maximum or minimum Graovac-Ghorbani index turns to be a difficult problem for general graphs. Some papers has been published in order to find extremal graphs to the Graovac-Ghorbani index of trees [9], unicyclic [3] and bipartite graphs [4]. Some interesting results on this topic can be found at [1,2,5,6,11]. In 2016, Das in [1] posed the following question: “Which graph has minimal ABC_{GG} index among all bicyclic graphs?” Motivated by this question we considered the ABC_{GG} index for bicyclic graphs with no pendant vertices.

In this paper, we explicitly give the ABC_{GG} index for some bicyclic graphs of no pendant vertices and present a sharp lower bound. Also, we conjecture a lower bound to the ABC_{GG} for all bicyclic graphs with no pendant vertices.

2 Preliminaries

A connected graph G of order n is called a bicyclic graph if G has $n + 1$ edges. Bicyclic graphs with no vertex of degree one are bicyclic graphs with no pendant vertices. Let \mathcal{B}_n be the set of all bicyclic graphs of order n with no pendant vertices. It is well-known, [8], that there are three types of bicyclic graphs containing no pendant vertices, which we denote here by $B_1(n)$, $B_2(n)$ and $B_3(n)$. We use integers $p, q \geq 3$ to denote the size of the cycles, and $l \geq 1$ to denote the length of a path (i.e., the number of edges of a path). Let $B_1(p, q)$ be the set of bicyclic graphs obtained from two vertex-disjoint cycles C_p and C_q by identifying a vertex u of C_p and a vertex v of C_q such that $n = p + q - 1$. Observe that all graphs in $B_1(p, q)$ have the same number of vertices but are not isomomorphic since the size of the cycles are not the same. Let $B_2(p, l, q)$ be the bicyclic graph obtained from

two vertex-disjoint cycles C_p e C_q , by joining vertices v_1 of C_p and u_l of C_q by a new path $v_1u_1, \dots, u_{l-1}u_l$ with length l , such that $n = p + q + l - 1$. Let $B_3(p, l, q)$ be the bicyclic graph obtained from a cycle C_{p+q-2l} with vertex set given by $v_1v_2v_3, \dots, v_{p+q-2l-1}v_{p+q-2l}v_1$ by joining vertices v_1 and v_{p-l-2} by a new path $v_1u_1u_2, \dots, u_{l-2}u_{l-1}u_lv_{p-l-2}$ with length l , where $n = p + q - l - 1$. Thus,

$$B_1(n) = \bigcup_{p,q \geq 3} B_1(p, q), \quad B_2(n) = \bigcup_{p,q \geq 3, l \geq 1} B_2(p, l, q) \text{ and } B_3(n) = \bigcup_{p,q \geq 3, l \geq 1} B_3(p, l, q).$$

Now, it is clear that $\mathcal{B}_n = B_1(n) \cup B_2(n) \cup B_3(n)$. In Figure 1 the general form of the graphs in families $B_1(n)$, $B_2(n)$ and $B_3(n)$ is displayed.

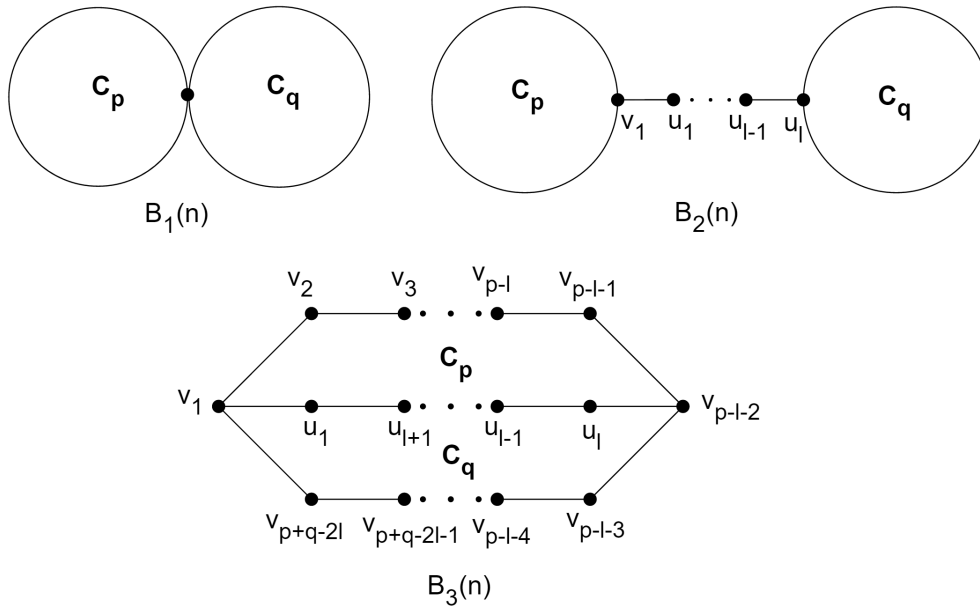


Figure 1. Families $B_1(n)$, $B_2(n)$ and $B_3(n)$ of bicyclic graphs with no pendant vertices

3 ABC_{GG} index for all graphs $G \in B_1(n)$

In this section, we give an explicit formula to the ABC_{GG} index of any graph in $B_1(n)$. In order to prove it, we consider the following cases:

- If n is odd there are two possibilities: either C_p and C_q are both odd cycles or C_p and C_q are both even cycles.
- If n is even C_p is an odd cycle and C_q is an even cycle.

Throughout the proofs of next lemmas, we define

$$f(u, v) = \sqrt{\frac{n_u + n_v - 2}{n_u n_v}},$$

for any edge $uv \in E(G)$, and we write $G[H]$ for the subgraph induced in G by the vertex set of graph H . In Lemmas 3.1, 3.2 and 3.3 we present the ABC_{GG} for all graphs in $B_1(n)$. Note that for a fixed n some non-isomorphic graphs can be obtained by varying p and q such that $n = p + q - 1$.

Lemma 3.1. *Let $G \in B_1(n)$ be a graph on $n = p + q - 1$ vertices such that C_p and C_q are odd cycles. Then*

$$\begin{aligned} ABC_{GG}(G) &= 2(p-1) \sqrt{\frac{p+q-4}{(p-1)(p+2q-3)}} + \frac{2\sqrt{p-3}}{p-1} + \\ &+ 2(q-1) \sqrt{\frac{p+q-4}{(2p+q-3)(q-1)}} + \frac{2\sqrt{q-3}}{q-1}. \end{aligned} \quad (2)$$

Proof. Let G be the graph labeled as Figure 2. Let $H_1 = G[C_p]$ be the graph induced by vertices $\{v_1, v_2, \dots, v_p\}$ and consider the edge $(v_1, v_p) \in E(H_1)$. Note that $n_{v_1} = \frac{p+2q-3}{2}$ and $n_{v_p} = \frac{p-1}{2}$. Taking the advantage of the symmetry, we can observe that this same situation occurs $p-1$ times which can be written as $n_{v_i} = \frac{p+2q-3}{2}$ and $n_{v_{i+1}} = \frac{p-1}{2}$ for $i = \{1, \dots, \frac{p-1}{2}\}$. For $i \in \{\frac{p+3}{2}, \dots, p-1\}$ $n_{v_i} = \frac{p-1}{2}$ and $n_{v_{i+1}} = \frac{p+2q-3}{2}$. The remaining edge $(v_{\frac{p+1}{2}}, v_{\frac{p+3}{2}})$ has $n_{v_{\frac{p+1}{2}}} = n_{v_{\frac{p+3}{2}}} = \frac{p-1}{2}$. Thus

$$\sum_{uv \in E(H_1)} f(u, v) = (p-1) \sqrt{\frac{\left(\frac{p-1}{2}\right) + \left(\frac{p+2q-3}{2}\right) - 2}{\left(\frac{p-1}{2}\right) \left(\frac{p+2q-3}{2}\right)}} + \sqrt{\frac{\left(\frac{p-1}{2}\right) + \left(\frac{p-1}{2}\right) - 2}{\left(\frac{p-1}{2}\right) \left(\frac{p-1}{2}\right)}} \quad (3)$$

$$= 2(p-1) \sqrt{\frac{p+q-4}{(p-1)(p+2q-3)}} + \frac{2\sqrt{p-3}}{p-1}. \quad (4)$$

Now, let $H_2 = G[C_q]$ be the graph induced by vertices $\{v_1, v_{p+1}, \dots, v_n\}$. Considering the edge (v_1, v_n) , we get $n_{v_1} = \frac{2p+q-3}{2}$ and $n_{v_n} = \frac{q-1}{2}$. Analogously to the previous case, $n_{v_j} = \frac{2p+q-3}{2}$ and $n_{v_{j+1}} = \frac{q-1}{2}$ for $j = \{p+1, \dots, \frac{2p+q-3}{2}\}$. For $j \in \{\frac{2p+q+1}{2}, \dots, n\}$ then $n_{v_j} = \frac{q-1}{2}$ and $n_{v_{j+1}} = \frac{2p+q-3}{2}$. The remaining edge $(u, v) = \left(v_{\frac{2p+q-1}{2}}, v_{\frac{2p+q+1}{2}}\right)$ has $n_u = n_v = \frac{q-1}{2}$. Thus,

$$\sum_{uv \in E(H_2)} f(u, v) = (q-1) \sqrt{\frac{\left(\frac{q-1}{2}\right) + \left(\frac{2p+q-3}{2}\right) - 2}{\left(\frac{q-1}{2}\right) \left(\frac{2p+q-3}{2}\right)}} + \sqrt{\frac{\left(\frac{q-1}{2}\right) + \left(\frac{q-1}{2}\right) - 2}{\left(\frac{q-1}{2}\right) \left(\frac{q-1}{2}\right)}}$$

$$= 2(q-1) \sqrt{\frac{p+q-4}{(2p+q-3)(q-1)}} + \frac{2\sqrt{q-3}}{q-1}.$$

Therefore,

$$\begin{aligned}
ABC_{GG}(G) &= \sum_{uv \in H_1} f(u, v) + \sum_{uv \in H_2} f(u, v) \\
&= 2(p-1) \sqrt{\frac{p+q-4}{(p+2q-3)(p-1)}} + \frac{2\sqrt{p-3}}{p-1} \\
&\quad + 2(q-1) \sqrt{\frac{p+q-4}{(2p+q-3)(q-1)}} + \frac{2\sqrt{q-3}}{q-1},
\end{aligned}$$

and the result follows.

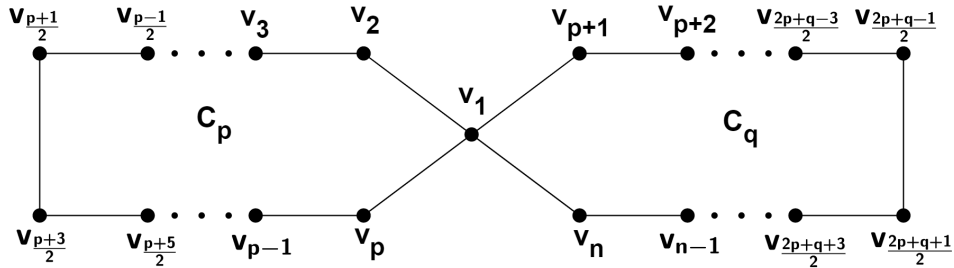


Figure 2. Vertex labeling of a graph $G \in B_1(n)$ where C_p and C_q are odd cycles

□

Lemma 3.2. Let $G \in B_1(n)$ be a graph on $n = p + q - 1$ vertices such that C_p and C_q are even cycles. Then

$$ABC_{GG}(G) = 2p \sqrt{\frac{p+q-3}{p(p+2q-2)}} + 2q \sqrt{\frac{p+q-3}{q(2p+q-2)}} \quad (5)$$

Proof. Let G be the graph labeled as Figure 3. Let $H_1 = G[C_p]$ be the graph induced by vertices $\{v_1, v_2, \dots, v_p\}$ and consider the edge $(v_1, v_p) \in E(H_1)$. Note that $n_{v_1} = \frac{p+2q-2}{2}$ and $n_{v_p} = \frac{p}{2}$. Taking the advantage of the symmetry, we can observe that this same situation occurs p times which can be written as $n_{v_i} = \frac{p+2q-2}{2}$ and $n_{v_{i+1}} = \frac{p}{2}$ for $i \in \{1, \dots, \frac{p}{2}\}$. For $i \in \{\frac{p}{2}, \dots, p-1\}$, $n_{v_i} = \frac{p}{2}$ and $n_{v_{i+1}} = \frac{p+2q-2}{2}$. Thus,

$$\begin{aligned}
\sum_{uv \in H_1} f(u, v) &= p \sqrt{\frac{\left(\frac{p}{2}\right) + \left(\frac{p+2q-2}{2}\right) - 2}{\left(\frac{p}{2}\right) \left(\frac{p+2q-2}{2}\right)}} \\
&= p \sqrt{\frac{\left(\frac{2p+2q-2-4}{2}\right) 4}{p(p+2q-2)}} = 2p \sqrt{\frac{p+q-3}{p(p+2q-2)}}.
\end{aligned}$$

Now, let $H_2 = G[C_q]$ be the induced graph by vertices $\{v_1, v_{p+1}, \dots, v_n\}$. Considering edge (v_1, v_n) , we get $n_{v_1} = \frac{2p+q-2}{2}$ and $n_{v_n} = \frac{q}{2}$. Analogously to the previous case, we have $n_{v_j} = \frac{2p+q-2}{2}$ and $n_{v_{j+1}} = \frac{q}{2}$ for $j \in \{p+1, \dots, \frac{2p+q-2}{2}\}$. For $j \in \{\frac{2p+q}{2}, \dots, n-1\}$, we obtain $n_{v_j} = \frac{q}{2}$ and $n_{v_{j+1}} = \frac{2p+q-2}{2}$. Thus,

$$\sum_{uv \in E(H_2)} f(u, v) = q \sqrt{\frac{\left(\frac{q}{2}\right) + \left(\frac{q+2p-2}{2}\right) - 2}{\left(\frac{q}{2}\right) \left(\frac{q+2p-2}{2}\right)}} = q \sqrt{\frac{\left(\frac{2p+2q-2-4}{2}\right) 4}{q(p+2q-2)}} = 2q \sqrt{\frac{p+q-3}{q(2p+q-2)}}.$$

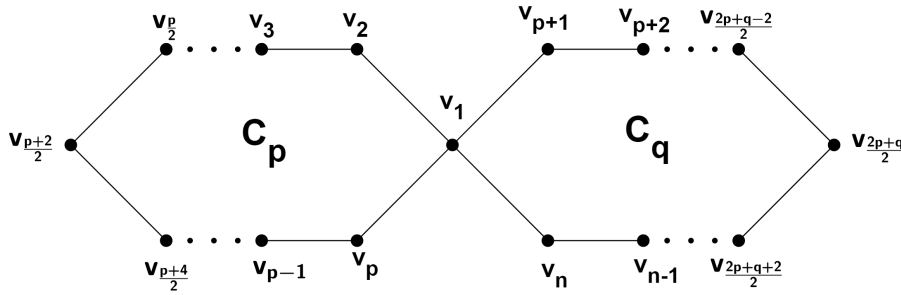


Figure 3. Vertex labeling of a graph $G \in B_1(n)$ where C_p and C_q are even cycles

Therefore,

$$ABC_{GG}(G) = \sum_{uv \in H_1} f(u, v) + \sum_{uv \in H_2} f(u, v) = 2p \sqrt{\frac{p+q-3}{p(p+2q-2)}} + 2q \sqrt{\frac{p+q-3}{q(2p+q-2)}},$$

and the result follows. \square

Lemma 3.3. *Let $G \in B_1(n)$ be a graph on $n = p + q - 1$ vertices such that C_p is an odd cycle and C_q is an even cycle. Then*

$$ABC_{GG}(G) = \frac{2\sqrt{p-3}}{p-1} + 2(p-1) \sqrt{\frac{p+q-4}{(p+2q-3)(p-1)}} + 2q \sqrt{\frac{p+q-3}{q(2p+q-2)}}. \quad (6)$$

Proof. Let G be the graph labeled as Figure 4. Let $H_1 = G[C_p]$ be the graph induced by vertices $\{v_1, v_2, \dots, v_p\}$ and consider the edge $(v_1, v_p) \in E(H_1)$. Note that $n_{v_1} = \frac{p+2q-3}{2}$ and $n_{v_p} = \frac{p-1}{2}$. Taking the advantage of the symmetry, we can observe that this same situation occurs $p-1$ times which can be written as $n_{v_i} = \frac{p+2q-3}{2}$ and $n_{v_{i+1}} = \frac{p-1}{2}$ for $i \in \{1, \dots, \frac{p-1}{2}\}$. For $i \in \{\frac{p+3}{2}, \dots, p-1\}$, then $n_{v_i} = \frac{p-1}{2}$ and $n_{v_{i+1}} = \frac{p+2q-3}{2}$. The remaining edge $(v_{\frac{p+1}{2}}, v_{\frac{p+3}{2}})$ has $n_{v_{\frac{p+1}{2}}} = n_{v_{\frac{p+3}{2}}} = \frac{p-1}{2}$. Thus,

$$\begin{aligned} \sum_{uv \in H_1} f(u, v) &= (p-1) \sqrt{\frac{\left(\frac{p-1}{2}\right) + \left(\frac{p+2q-3}{2}\right) - 2}{\left(\frac{p-1}{2}\right) \left(\frac{p+2q-3}{2}\right)}} + \sqrt{\frac{\left(\frac{p-1}{2}\right) + \left(\frac{p-1}{2}\right) - 2}{\left(\frac{p-1}{2}\right) \left(\frac{p-1}{2}\right)}} \\ &= 2(p-1) \sqrt{\frac{p+q-4}{(p-1)(p+2q-3)}} + \frac{2\sqrt{p-3}}{p-1}. \end{aligned}$$

Now, let $H_2 = G[C_q]$ be the graph induced by vertices $\{v_1, v_{p+1}, \dots, v_n\}$. Considering the edge (v_1, v_n) , we get $n_{v_1} = \frac{2p+q-2}{2}$ and $n_{v_n} = \frac{q}{2}$. Analogously to the previous case, $n_{v_j} = \frac{2p+q-2}{2}$ and $n_{v_{j+1}} = \frac{q}{2}$ for $j \in \{p+1, \dots, \frac{2p+q-2}{2}\}$. For $j \in \{\frac{2p+q}{2}, \dots, n-1\}$ then $n_{v_j} = \frac{q}{2}$ and $n_{v_{j+1}} = \frac{2p+q-2}{2}$. Thus,

$$\begin{aligned} \sum_{uv \in E(H_2)} f(u, v) &= q \sqrt{\frac{\left(\frac{q}{2}\right) + \left(\frac{2p+q-2}{2}\right) - 2}{\left(\frac{q}{2}\right) \left(\frac{2p+q-2}{2}\right)}} \\ &= 2q \sqrt{\frac{p+q-3}{q(2p+q-2)}}. \end{aligned}$$

Therefore,

$$\begin{aligned} ABC_{GG}(G) &= \sum_{uv \in H_1} f(u, v) + \sum_{uv \in H_2} f(u, v) = 2(p-1) \sqrt{\frac{p+q-4}{(p+2q-3)(p-1)}} + \frac{2\sqrt{p-3}}{p-1} + \\ &\quad + 2q \sqrt{\frac{p+q-3}{q(2p+q-2)}}, \end{aligned}$$

and the result follows.

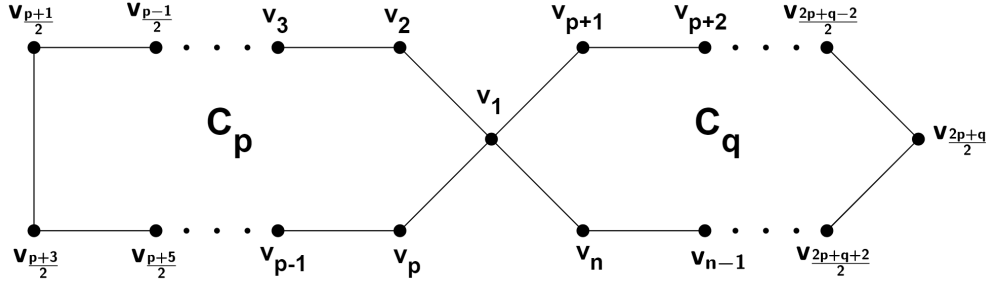


Figure 4. Vertex labeling of a graph $G \in B_1(n)$ where C_p is an odd cycle and C_q is an even cycle

□

4 Minimizing $ABC_{GG}(G)$ for all $G \in B_1(n)$

In order to characterize the graphs with minimal Graovac-Ghorbani index in $B_1(n)$, we performed computational experiments to bicyclic graphs with no pendant vertices up to 16 vertices. These graphs were generated by using Nauty-Traces package [10] and the ABC_{GG} indexes were computed in BlueJ software [12, 13].

4.1 When n is odd

We first consider the case when both cycles has odd length. Since $n \geq 9$ and n is odd, we have that $n = 2k - 1$, where $k \geq 5$ and $k \in \mathbb{N}$.

Case (i) : C_p and C_q are odd cycles.

From the symmetry of the process of removing vertices from cycle C_p and adding them to C_q , we get that: if k is odd, $3 \leq p \leq \frac{n+1}{2}$ and $\frac{n+1}{2} \leq q \leq n-2$; if k is even, $3 \leq p \leq \frac{n-1}{2}$ and $\frac{n+3}{2} \leq q \leq n-2$. From these inequalities, we obtain that: if k is odd, then $3 \leq p \leq k$ and $k \leq q \leq 2k-3$; if k is even, then $3 \leq p \leq k-1$ and $k+1 \leq q \leq 2k-3$.

Let $x \in \mathbb{N}$ be the number of vertices removed from C_q and added to C_p . Note that in this process, x should be even to keep both cycles of odd length and that $p = 3 + x$ and $q = 2k - 3 - x$. The following facts are true:

(F1) If $k \geq 5$ is odd, then $0 \leq x \leq k - 3$;

(F2) If $k \geq 5$ is even, then $0 \leq x \leq k - 4$.

Let $G^1(p, q)$ be a graph of order n belonging to $B_1(p, q)$ with fixed p and q such that $n = p + q - 1$. Our proof initially considers the graph with $p = 3$ and $q = n - 2$, which we denote by $G_0^1(3, n - 2)$. Removing two vertices from cycle C_{n-2} of the graph $G_0^1(3, n - 2)$ and adding them to C_3 , we obtain the graph $G_1^1(5, n - 4)$. If n and k are odd, we prove that $G_0^1(3, n - 2)$ has minimal ABC_{GG} among all graphs $G_x^1(3 + x, n - 2 - x)$, where $0 \leq x \leq (n - 5)/2$. If n is odd and k is even, we prove that $G_0^1(3, n - 2)$ has minimal ABC_{GG} among all graphs $G_x^1(3 + x, n - 2 - x)$, where $0 \leq x \leq (n - 7)/2$.

For instance, for $n = 17$ we have $k = 9$ and all graphs in $B_1(17)$ are: $G_0^1(3, 15)$, $G_2^1(5, 13)$, $G_4^1(7, 11)$, $G_6^1(9, 9)$. In the other hand, if $n = 19$, we have $k = 10$ and all graphs in $B_1(19)$ are: $G_0^1(3, 17)$, $G_2^1(5, 15)$, $G_4^1(7, 13)$, $G_6^1(9, 11)$. In both cases, we will prove in the next lemmas that graph $G_0^1(3, n - 2)$ has minimal ABC_{GG} .

Recall Equation (2) of Lemma 3.1 and rewrite it as:

$$\begin{aligned}
 f_1(x) : &= ABC_{GG}(G) = 2(x+2)\sqrt{\frac{2k-4}{(4k-x-6)(x+2)}} + \\
 &+ 2(2k-x-4)\sqrt{\frac{2k-4}{(2k+x)(2k-x-4)}} + \frac{2\sqrt{2k-x-6}}{2k-x-4} + \frac{2\sqrt{x}}{x+2}. \quad (7)
 \end{aligned}$$

Next, we prove that the first three terms of $f_1(x)$ is an increasing function in x .

Lemma 4.1. *Let $n = 2k - 1$ such that $k \geq 5$ and let $x \geq 0$. Then, the function*

$$g_1(x) = 2(x+2)\sqrt{\frac{2k-4}{(4k-x-6)(x+2)}} + 2(2k-x-4)\sqrt{\frac{2k-4}{(2k+x)(2k-x-4)}} \\ + \frac{2\sqrt{2k-x-6}}{2k-x-4}$$

is increasing in x .

Proof. We will use Facts (F1) and (F2) to prove our result. We split $g_1(x)$ into two cases:

Case 1. Let $h(x) = \frac{2\sqrt{2k-x-6}}{2k-x-4}$. We have that $h'(x)$ is given by

$$h'(x) = \frac{2k-x-8}{(2k-x-4)^2\sqrt{2k-x-6}}.$$

Assume that $k \geq 5$ is odd. From (F1), we have $2k-x-8 \geq 0$ and $2k-x-6 \geq 0$. Now, assume that $k \geq 5$ is even. From (F2), we have $2k-x-8 \geq 0$ and $2k-x-6 \geq 0$. Then $h'(x) > 0$, which means that $h(x)$ is increasing in x for all $k \geq 5$.

Case 2. Let $m(x) = 2(x+2)\sqrt{\frac{2k-4}{(4k-x-6)(x+2)}} + 2(2k-x-4)\sqrt{\frac{2k-4}{(2k+x)(2k-x-4)}}$. We have that $m'(x)$ is given by

$$m'(x) = \frac{8(k-1)(k-2)}{(x+2)(4k-x-6)^2\sqrt{\frac{2k-4}{(x+2)(4k-x-6)}}} - \frac{8(k-1)(k-2)}{(2k-x-4)(2k+x)^2\sqrt{\frac{2k-4}{(2k-x-4)(2k+x)}}} \\ = \frac{8(k-1)(k-2)}{\sqrt{(2k-4)}\left(\frac{(x+2)(4k-x-6)^2}{\sqrt{(x+2)(4k-x-6)}}\right)} - \frac{8(k-1)(k-2)}{\sqrt{(2k-4)}\left(\frac{(2k-x-4)(2k+x)^2}{\sqrt{(2k-x-4)(2k+x)}}\right)}$$

Define $d_1(x)$ and $d_2(x)$ as

$$d_1(x) = \frac{(x+2)(4k-x-6)^2}{\sqrt{(x+2)(4k-x-6)}} = (4k-x-6)\sqrt{(4k-x-6)(x+2)}, \\ d_2(x) = \frac{(2k-x-4)(2k+x)^2}{\sqrt{(2k-x-4)(2k+x)}} = (2k+x)\sqrt{(2k+x)(2k-x-4)}.$$

If $d_2(x) \geq d_1(x)$, then $m'(x) \geq 0$ and $m(x)$ is increasing in x . Let $t(x) = d_2(x)^2 - d_1(x)^2$. By algebraic manipulations, we have that

$$\begin{aligned}
t(x) &= d_2(x)^2 - d_1(x)^2 \\
&= (2k+x)^3(2k-x-4) - (x+2)(4k-x-6)^3 \\
&= 16k^4 + 16k^3x - 4kx^3 - x^4 - 32k^3 - 48k^2x - 24kx^2 - \\
&\quad - 4x^3 \\
&\quad - (64k^3x - 48k^2x^2 + 12kx^3 - x^4 + 128k^3 - 384k^2x + \\
&\quad + 168kx^2 - 20x^3 - 576k^2 + 720kx - 144x^2 + 864k - \\
&\quad - 432x - 432) \\
&= 16k^4 - 48k^3x + 48k^2x^2 - 16kx^3 - 160k^3 + 336k^2x - \\
&\quad - 192kx^2 + 16x^3 + 576k^2 - 720kx + \\
&\quad + 144x^2 - 864k + 432x + 432 \\
t(x) &= 16(k-1)(k-x-3)^3.
\end{aligned}$$

Note that $x = k-3$ is the root of $t(x)$. Using Facts (F1) and F(4), we get $t(x) > 0$. We have that $t(x) = d_2(x)^2 - d_1(x)^2 = (d_2(x) - d_1(x))(d_2(x) + d_1(x)) \geq 0$, then $d_2(x) - d_1(x) \geq 0$. Thus, $m'(x) > 0$, which means that $m(x)$ is increasing in x for all $k \geq 5$.

Therefore, from Cases 1 and 2, we have that $g'_1(x) > 0$, and so $g_1(x)$ is increasing in x for all $k \geq 5$. \square

Lemma 4.2. *Let $n = 2k - 1$ such that $k \geq 5$. Let $x \geq 0$ and*

$$\begin{aligned}
f_1(x) &= 2(x+2)\sqrt{\frac{2k-4}{(4k-x-6)(x+2)}} + 2(2k-x-4)\sqrt{\frac{2k-4}{(2k+x)(2k-x-4)}} \\
&\quad + \frac{2\sqrt{2k-x-6}}{2k-x-4} + \frac{2\sqrt{x}}{x+2}.
\end{aligned}$$

Then, we have that $f_1(0)$ is the minimal value of $f_1(x)$.

Proof. Let $g_1(x)$ be defined by

$$\begin{aligned}
g_1(x) &= 2(x+2)\sqrt{\frac{2k-4}{(4k-x-6)(x+2)}} + 2(2k-x-4)\sqrt{\frac{2k-4}{(2k+x)(2k-x-4)}} \\
&\quad + \frac{2\sqrt{2k-x-6}}{2k-x-4}.
\end{aligned}$$

From Lemma 4.1 we have that $g_1(x)$ is increasing in x for all $k \geq 5$, which implies that

$$g_1(x) \geq g_1(0).$$

So, $f_1(x) \geq g_1(x) \geq g_1(0) = f_1(0)$, and the result follows. \square

Note that $f_1(0) = ABC_{GG}(G_0^1(3, n-2))$ and Lemma 4.2 implies that $f_1(x)$ is minimized to the graph $G_0^1(3, n-2)$ among all graphs $G_i^1(3, n-2)$ when C_p and C_q have odd lengths.

Case (ii) : C_p and C_q are even cycles.

From the symmetry of the process of removing vertices from cycle C_p and adding them to C_q , we get that: if k is odd, $4 \leq p \leq \frac{n-1}{2}$ and $\frac{n+3}{2} \leq q \leq n-3$; if k is even, $4 \leq p \leq \frac{n+1}{2}$ and $\frac{n+1}{2} \leq q \leq n-3$. From these inequalities, we get: if k is odd, $4 \leq p \leq k-1$ and $k+1 \leq q \leq 2k-4$; if k is even, $4 \leq p \leq k$ and $k \leq q \leq 2k-4$.

Let $x \in \mathbb{N}$ be the number of vertices removed from C_q and added to C_p . Note that in this process, x should be even to keep both cycles of even length and that $p = 4 + x$ and $q = 2k - 4 - x$. The following facts are true:

(F3) If $k \geq 5$ is odd, then $0 \leq x \leq k-5$;

(F4) If $k \geq 5$ is even, then $0 \leq x \leq k-4$.

We will prove that for $k \geq 11$, the graph $G_0^1(4, n-3)$ has minimal ABC_{GG} index among all graph when C_p and C_q are both even cycles.

So, we can rewrite Equation (5) of Lemma 3.2 as:

$$f_2(x) := 2(x+4)\sqrt{\frac{2k-3}{(4k-x-6)(x+4)}} + 2(2k-x-4)\sqrt{\frac{2k-3}{(2k+x+2)(2k-x-4)}}. \quad (8)$$

Lemma 4.3. *Let $n = 2k - 1$ with $k \geq 5$. Let $x \geq 0$ and*

$$f_2(x) = 2(x+4)\sqrt{\frac{2k-3}{(4k-x-6)(x+4)}} + 2(2k-x-4)\sqrt{\frac{2k-3}{(2k+x+2)(2k-x-4)}}.$$

If $k \geq 11$, then $f_2(0)$ is the minimal value of $f_2(x)$. If k is odd and $5 \leq k \leq 10$, then $f_2(k-5)$ is the minimal value of $f_2(x)$. If k is even and $5 \leq k \leq 10$, then $f_2(k-4)$ is the minimal value of $f_2(x)$.

Proof. The functions $f_2'(x)$ and $f_2''(x)$ are given by

$$f_2'(x) = \frac{2(2k-1)(2k-3)}{(4k-x-6)^2(x+4)\sqrt{\frac{2k-3}{(4k-x-6)(x+4)}}} - \frac{2(2k-1)(2k-3)}{(2k+x+2)^2(2k-x-4)\sqrt{\frac{2k-3}{(2k+x+2)(2k-x-4)}}}$$

$$f_2''(x) = \frac{2(2k-1)(2k-3)^2(2k-2x-7)}{(2k+x+2)^4(2k-x-4)^3\left(\frac{2k-3}{(2k+x+2)(2k-x-4)}\right)^{\frac{3}{2}}} - \frac{2(2k-1)(2k-3)^2(2k-2x-9)}{(x+4)^3(4k-x-6)^4\left(\frac{2k-3}{(x+4)(4k-x-6)}\right)^{\frac{3}{2}}}$$

Taking $f_2'(x) = 0$, we obtain $4(k-x-4)(4kx^2 - 3x^2 - 8k^2x + 38kx - 24x + 4k^3 - 44k^2 + 100k - 52) = 0$, which has critical points $x_1 = k - 4$, $x_2 = k - 4 + \frac{(3k-2)}{\sqrt{(4k-3)}}$ and $x_3 = k - 4 - \frac{(3k-2)}{\sqrt{(4k-3)}}$. Suppose that x_3 is integer. In this case, $(4k-3)$ should be a perfect square, that is, $4k-3 = m^2$. Thus, $\frac{(3k-2)}{\sqrt{4k-3}} = \frac{3m^2+1}{m} = \frac{3m}{4} + \frac{1}{4m}$ cannot be integer for $m > 1$, and we get a contradiction. So, the only critical points are $x = 0$ and $x = k - 4$.

We get that

$$f_2''(k-4) = \frac{4(2k-1)(2k-3)^2}{(3k-2)^4 k^3 \left(\frac{2k-3}{k(3k-2)}\right)^{\frac{3}{2}}},$$

is positive, and so $x = k - 4$ is a minimum of the function $f_2(x)$.

Let $k \geq 5$ and k is odd. In this case, $0 \leq x \leq k - 5$ and we need to prove whether $f_2(0) > f_2(k-5)$ or $f_2(0) < f_2(k-5)$. Let

$$m(k) = f_2(k-5) - f_2(0) = 2(k+1)\sqrt{\frac{2k-3}{3(k+1)(k-1)}} + 2(k-1)\sqrt{\frac{2k-3}{(3k-1)(k-1)}} - 2(k-2)\sqrt{\frac{2k-3}{(k+1)(k-2)}} - 2\sqrt{2}$$

The derivatives of $m(k)$ are given as follows:

$$m'(k) = \frac{2\sqrt{3}(k^2-2k+2)}{3\sqrt{(2k-3)(k+1)(k-1)(k-1)}} + \frac{2(3k^2-2k-2)}{\sqrt{(3k-1)(2k-3)(k-1)(3k-1)}} - \frac{2k^2+4k-13}{\sqrt{(2k-3)(k+1)(k-2)(k+1)}}$$

$$m''(k) = \frac{4k^4+16k^3-156k^2+316k-191}{2\sqrt{(2k-3)(k+1)(k-2)(2k-3)(k+1)^2(k-2)}} - \frac{2\sqrt{3}(k^4-4k^3+12k^2-10k-2)}{3\sqrt{(2k-3)(k+1)(k-1)(2k-3)(k+1)(k-1)^2}}$$

$$- \frac{2(9k^4-12k^3-36k^2+78k-38)}{\sqrt{(3k-1)(2k-3)(k-1)(3k-1)^2(2k-3)(k-1)}}$$

We know that $m(k)$ and $m'(k)$ are continuous in this interval. Using a numerical method, we get $k_1 = 5$ and $k_2 \simeq 10.3147$ as exact real roots for $m(k)$. Using a numerical method for $m'(k)$, we obtain $k_1' \simeq 7.5248$. Evaluating $m''(k)$ for k_1' , we have that $m''(7.5248) > 0$, and k_1' is an absolute minimum. Since $m(k) < 0$ for $5 < k \leq 10$,

$h(k'_1) < 0$ and $h(11) > 0$, then, we have that $m(k) \geq 0$ for all $k \geq 10.3147$. Therefore, $m(k) \geq 11$, which implies that $f_2(x) \geq f_2(0)$, and the graph $G_0(4, n-3)$ minimizes $f_2(x)$. Now, let k be odd and $5 \leq k \leq 10$. In this case, $m(k) \leq 0$, which implies that $f_2(k-5)$ is minimum and the graph $G_{k-5}^1(p, q) = G_{k-5}^1(k-1, k+1)$ minimizes $f_2(x)$.

If k is even, since $0 \leq x \leq k-4$, we need to prove that $f_2(0) < f_2(k-4)$. Replacing the extremes $x_1 = 0$ and $x_2 = k-4$ in $f_2(x)$ we obtain

$$f_2(0) = 2(k-2)\sqrt{\frac{2k-3}{(k+1)(k-2)}} + 2\sqrt{2},$$

$$f_2(k-4) = 4k\sqrt{\frac{2k-3}{k(3k-2)}}.$$

Consider the function

$$h(k) = f_2(k-4) - f_2(0) = 4k\sqrt{\frac{2k-3}{k(3k-2)}} - 2(k-2)\sqrt{\frac{2k-3}{(k+1)(k-2)}} - 2\sqrt{2}$$

The derivatives of $h(k)$ are given as follows:

$$h'(k) = \frac{4(3k^2-4k+3)}{\sqrt{(3k-2)(2k-3)k(3k-2)}} - \frac{2k^2+4k-13}{\sqrt{(2k-3)(k+1)(k-2)(k+1)}}$$

$$h''(k) = \frac{4k^4+16k^3-156k^2+316k-191}{2\sqrt{(2k-3)(k+1)(k-2)(2k-3)(k+1)^2(k-2)}} - \frac{12(3k^4-8k^3+18k^2-18k+3)}{\sqrt{(3k-2)(2k-3)k(3k-2)^2(2k-3)k}}.$$

We know that $h(k)$ and $h'(k)$ are continuous in this interval. Using a numerical method, we get $k_1 = \frac{21+5\sqrt{17}}{4} \simeq 10.4039$ and $k_2 = 4$ (with multiplicity 2) as exact real roots for $h(k)$. Making $h'(k) = 0$, we obtain

$$(36k^7 - 312k^6 + 172k^5 + 1600k^4 - 2595k^3 + 1546k^2 - 332k + 72)(2k-3)(k-4) = 0,$$

and the critical points are $k'_1 = 4$ and $k'_2 = 7.3648$. Evaluating $h''(k)$ in k'_2 , we have that $h''(7.3648) > 0$, and k_2 is an absolute minimum. Since $h(3) < 0$, $h(8) < 0$, $h(k'_2) < 0$ and $h(11) > 0$, we have that $h(k) \geq 0$ for all $k \geq \frac{21+5\sqrt{17}}{4}$. Therefore, $h(k) > 0$ for all $k \geq 11$, which implies that $f_2(x) \geq f_2(0)$, and the graph $G_0^1(4, n-3)$ minimizes $f_2(x)$. Now, let k be even and $6 \leq k \leq 10$. In this case, $h(k) < 0$, which implies that $f_2(k-4)$ is minimum and the graph $G_{k-4}^1(p, q) = G_{k-4}^1(k, k)$ minimizes $f_2(x)$.

□

The next result shows that $G_0^1(3, n-2)$ has minimal ABC_{GG} among all graphs G in $B_1(n)$ when n is odd.

Lemma 4.4. *Let $G \in B_1(n)$ with odd n and $n \geq 9$. Then,*

$$ABC_{GG}(G) \geq ABC_{GG}(G_0^1(3, n-2)).$$

Proof. Let $n = 2k - 1$ such that $n \geq 9$. First, suppose that $k \geq 11$. From Lemmas 4.2 and 4.3, we should prove that $f_1(0) < f_2(0)$. Considering $h(k) = f_2(0) - f_1(0)$, we have that

$$\begin{aligned} h(k) &= 2(k-2)\sqrt{\frac{2k-3}{(k+1)(k-2)}} + 2\sqrt{2} - \left(\frac{2\sqrt{2}(k-2)}{\sqrt{k}} + 2\sqrt{\frac{2k-4}{2k-3} + \frac{\sqrt{2k-6}}{k-2}} \right) \\ h(k) &= 2(k-2)\sqrt{\frac{2k-3}{(k+1)(k-2)}} + \frac{\sqrt{2}}{5} + \frac{9\sqrt{2}}{5} - \left(\frac{2\sqrt{2}(k-2)}{\sqrt{k}} + 2\sqrt{\frac{2k-4}{2k-3} + \frac{\sqrt{2k-6}}{k-2}} \right) \\ h(k) &= \underbrace{2(k-2)\sqrt{\frac{2k-3}{(k+1)(k-2)}} + \frac{\sqrt{2}}{5} - \frac{2\sqrt{2}(k-2)}{\sqrt{k}}}_i + \underbrace{\frac{9\sqrt{2}}{5} - 2\sqrt{\frac{2k-4}{2k-3} + \frac{\sqrt{2k-6}}{k-2}}}_{ii} \end{aligned}$$

Case (i). Let $m(k)$ be defined as

$$\begin{aligned} m(k) &= 2(k-2)\sqrt{\frac{2k-3}{(k+1)(k-2)}} + \frac{\sqrt{2}}{5} - \frac{2\sqrt{2}(k-2)}{\sqrt{k}} \\ &= \frac{\sqrt{k}\sqrt{2k-3}(10k-20) - \sqrt{2}\sqrt{k-2}\sqrt{k+1}(10k-\sqrt{k}-20)}{5\sqrt{k-2}\sqrt{k}\sqrt{k+1}}. \end{aligned}$$

Let $t(k) = d_1(k)^2 - d_2(k)^2$, where $d_1(k) = \sqrt{k}\sqrt{2k-3}(10k-20)$ and $d_2(k) = -\sqrt{2}\sqrt{k-2}\sqrt{k+1}(10k-\sqrt{k}-20)$. We need to verify if $t(k) > 0$. Then, we have that,

$$\begin{aligned} t(k) &= d_1(k)^2 - d_2(k)^2 \\ &= k(2k-3)(10k-20)^2 - 2(k-2)(k+1)(10k-\sqrt{k}-20)^2 \\ &= 2(k-2)(20k^2\sqrt{k} - 51k^2 - 20k\sqrt{k} + 299k - 40\sqrt{k} - 400) \end{aligned}$$

Let $\sqrt{k} = u \geq 0$ and $r(k) = 20k^2\sqrt{k} - 51k^2 - 20k\sqrt{k} + 299k - 40\sqrt{k} - 400$. Then, $r(u) = 20u^5 - 51u^4 - 20u^3 + 299u^2 - 40u - 400$. We have that $r(u) \geq 0$ for all $u \geq u_1 \simeq 1.42596$ (the unique real root). Then, $r(k) \geq 0$ for all $k \geq k_1 \simeq 2.03336$. Since $k \geq 5$, we get $t(k) > 0$ and consequently $m(k) > 0$ for all $k \geq 5$.

Case (ii). Let $g(k)$ be defined as

$$\begin{aligned} g(k) &= \frac{9\sqrt{2}}{5} - 2\sqrt{\frac{2k-4}{2k-3}} - \frac{\sqrt{2k-6}}{k-2} \\ &= \frac{\sqrt{2}\sqrt{2k-3}(9k-5\sqrt{k-3}-18) - 10\sqrt{k-2}\sqrt{2}(k-2)}{5(k-2)\sqrt{2k-3}}. \end{aligned}$$

Let $t(k) = d_1(k)^2 - d_2(k)^2$, where $d_1(k) = 2(2k-3)(9k-5\sqrt{k-3}-18)^2$ and $d_2(k) = -10\sqrt{k-2}\sqrt{2}(k-2)$. We need to check whether $t(k) \geq 0$. Note that

$$\begin{aligned} t(k) &= d_1(k)^2 - d_2(k)^2 \\ &= 2(2k-3)(9k-5\sqrt{k-3}-18)^2 - 200(k-2)^3 \\ &= 2(62k^3 - 180k^2\sqrt{k-3} - 241k^2 + 630k\sqrt{k-3} + 195k - 540\sqrt{k-3} + 53). \end{aligned}$$

By making the variable change $u = \sqrt{k-3}$ we can prove that $t(k) \geq 0$ for all $k \geq 3$, which implies that $g(k) \geq 0$. Therefore, from Cases (i) and (ii), we have that $h(k) > 0$.

Let k be even such that $5 \leq k \leq 10$. From Lemmas 4.2 and 4.3, we should prove that $f_1(0) < f_2(k-4)$. Let $h(k) = f_2(k-4) - f_1(0)$ defined as

$$h(k) = 4k\sqrt{\frac{2k-3}{(3k-2)k}} - \frac{2\sqrt{2}(k-2)}{\sqrt{k}} - 2\sqrt{\frac{2k-4}{2k-3}} - \frac{\sqrt{2k-6}}{k-2}.$$

By replacing each k in $h(k)$ we obtain that $h(k) \geq 0$.

Let k be odd such that $5 \leq k \leq 10$. From Lemmas 4.2 and 4.3, we should prove that $f_1(0) < f_2(k-5)$. Let $h(k) = f_2(k-5) - f_1(0)$ defined as

$$\begin{aligned} h(k) &= 2(k+1)\sqrt{\frac{2k-3}{3(k+1)(k-1)}} + 2(k-1)\sqrt{\frac{2k-3}{(3k-1)(k-1)}} - \frac{2\sqrt{2}(k-2)}{\sqrt{k}} - \\ &\quad - 2\sqrt{\frac{2k-4}{2k-3}} - \frac{\sqrt{2k-6}}{k-2}. \end{aligned}$$

By replacing each k in $h(k)$ we obtain that $h(k) \geq 0$.

Now, the proof is complete. □

4.2 When n is even

Note that when $n = 2k$ such that $n = p+q-1$, We should have that one of the cycles has odd length and other has even length. Recall the graph $G_0^1(3, n-2)$. From the symmetry

of the process of removing vertices from cycle C_q and adding them to C_p , we get that $3 \leq p \leq n - 3$ and $4 \leq q \leq n - 2$, which imply that

$$(F5) \quad 3 \leq p \leq 2k - 3 \text{ and } 4 \leq q \leq 2k - 2.$$

Let $x \in \mathbb{N}$ be the number of vertices removed from C_q and added to C_p . Note that in this process, x should be even to keep both cycles of even length such that $p = 3 + x$, $q = 2k - 2 - x$ and

$$0 \leq x \leq 2k - 6.$$

Next, we prove that $G_0^1(3, n - 2)$ has minimal $ABC_{GG}(G)$ among all graphs $G \in B_1(n)$ with n even. Equation (6) of Lemma 3.3 can be rewritten as a function of n and x :

$$f_2(x) = 2(n - x - 2)\sqrt{\frac{n - 2}{(n + x + 2)(n - x - 2)}} + 2(x + 2)\sqrt{\frac{n - 3}{(2n - x - 4)(x + 2)}} + \frac{2\sqrt{x}}{x + 2}.$$

Note that $f(0)$ is equal to $ABC_{GG}(G_0^1(3, n - 2))$.

Lemma 4.5. *Let $n \geq 5$ and $x \geq 0$. Let $g_2(x)$ be defined as*

$$g_2(x) = 2(n - x - 2)\sqrt{\frac{n - 2}{(n + x + 2)(n - x - 2)}} + 2(x + 2)\sqrt{\frac{n - 3}{(2n - x - 4)(x + 2)}}.$$

Then, $g_2(x)$ has its minimum value in $g_2(0)$.

Proof. Let $n \geq 5$, $x_1 = x$ and $x_2 = x + 2$. In order to prove that $g_2(x)$ is increasing in x , we need to prove that $g_2(x_2) - g_2(x_1) \geq 0$. Take $h(x) = g_2(x_2) - g_2(x_1)$. Note that

$$\begin{aligned} h(x) &= -2(n - x - 2)\sqrt{\frac{n - 2}{(n + x + 2)(n - x - 2)}} + 2(n - x - 4)\sqrt{\frac{n - 2}{(n + x + 4)(n - x - 4)}} \\ &+ 2(x + 4)\sqrt{\frac{n - 3}{(2n - x - 6)(x + 4)}} - 2(x + 2)\sqrt{\frac{n - 3}{(2n - x - 4)(x + 2)}}. \end{aligned}$$

One can prove that

$$h(0) = 2(n - 4)\sqrt{\frac{n - 2}{(n + 4)(n - 4)}} + 2\sqrt{2} - \frac{2(n - 2)}{\sqrt{n + 2}} - 2\sqrt{\frac{n - 3}{n - 2}} \geq 0,$$

and

$$h(n - 6) = -2(n - 4)\sqrt{\frac{n - 3}{(n + 2)(n - 4)}} + 2(n - 2)\sqrt{\frac{n - 3}{(n - 2)n}} - 2\sqrt{2} + 2\sqrt{\frac{n - 2}{n - 1}} \geq 0.$$

By using numerical analysis, we get that polynomial $h(x)$ has no root for $0 \leq x \leq n - 6$.

So, $h(x) \geq 0$, which implies that $g_2(x)$ is increasing and the result follows. \square

Lemma 4.6. Let $n \geq 5$ and $x \geq 0$. Let $f_2(x)$ be defined as

$$f_2(x) = 2(n-x-2)\sqrt{\frac{n-2}{(n+x+2)(n-x-2)}} + 2(x+2)\sqrt{\frac{n-3}{(2n-x-4)(x+2)}} + \frac{2\sqrt{x}}{x+2}. \quad (9)$$

Then, $f_2(x)$ has its minimum value in $f_2(0)$ for all $n \geq 5$.

Proof. Note that $f_2(x) \geq g_2(x)$. From Lemma 4.5, $g_2(x) \geq g_2(0)$. Therefore, $f_2(x) \geq g_2(x) \geq g_2(0) = f_2(0)$, and the result follows. \square

Next, we state the main result of this paper.

Theorem 4.7. Let $G \in B_1(n)$ be a graph of order $n \geq 9$. If n is odd, then

$$ABC_{GG}(G) \geq \frac{2(n-3)}{\sqrt{n-1}} + 2\sqrt{\frac{n-3}{n-2}} + \frac{2\sqrt{n-5}}{n-3}.$$

If n is even, then

$$ABC_{GG}(G) \geq 2\sqrt{\frac{n-3}{n-2}} + \frac{2(n-2)}{\sqrt{n+2}}.$$

Equality holds in both cases if and only if $G \cong G_0^1(3, n-2)$.

Proof. Let $G \in B_1(n)$. Suppose that n is odd. From Lemma 4.4, $ABC_{GG}(G) = f(x) \geq f(0) = ABC_{GG}(G_0^1(3, n-2))$. Now, suppose that n is even. From Lemma 4.6, $ABC_{GG}(G) = f''(x) \geq f''(0) = ABC_{GG}(G_0^1(3, n-2))$ and the result follows. \square

In Figure 5, the extremal graph $G_0^1(3, 8)$ is displayed.

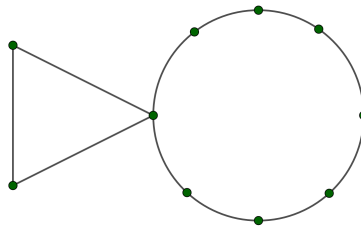


Figure 5. Graph of $B_1(n)$ family with minimal value of the ABC_{GG} index for $n = 10$.

Note that Theorem 4.7 states the extremal graphs for $n \geq 9$. In Figure 6, we display all graphs up to 10 vertices that are extremal to the ABC_{GG} index in the family $B_1(n)$ obtained by exhaustive computational search.

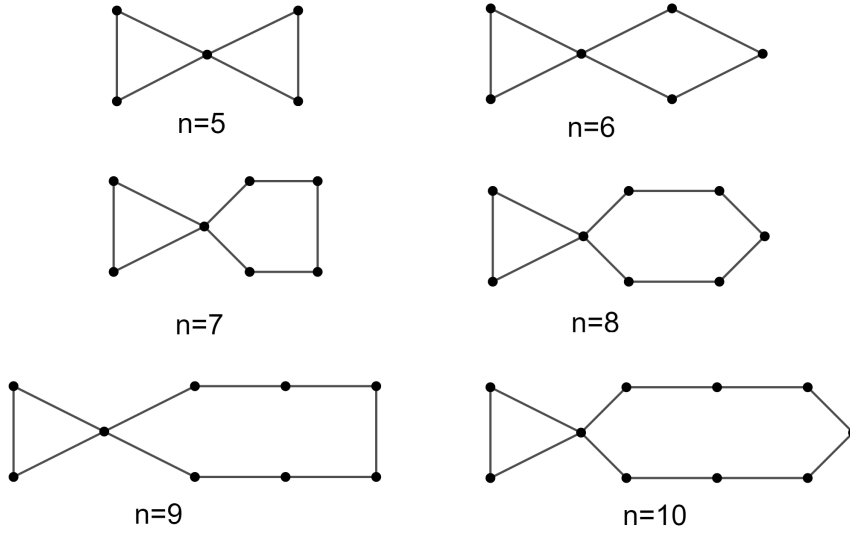


Figure 6. Graph of $B_1(n)$ family with minimal value of the ABC_{GG} index for $5 \leq n \leq 10$.

5 Conclusion

We finish this paper by presenting two conjectures related to the ABC_{GG} index for any bicyclic graph. The following conjectures were motivated by computational experiments for all bicyclic graphs up to 16 vertices. The computational routines in Python are freely available at <https://github.com/20445/ProjetoTeste/blob/master/README.md>.

Let \mathcal{B}'_n be the family of all bicyclic graphs on n vertices. The next conjecture states a lower bounds to the ABC_{GG} index among all graphs in \mathcal{B}'_n . It is worth mentioning that the extremal graphs belong to the family \mathcal{B}_n , that is, the bicyclic graphs with no pendant vertices. This fact makes the study of all graphs in $B_1(n)$, $B_2(n)$, and $B_3(n)$ useful to prove the general case.

Conjecture 5.1. *Let $G \in \mathcal{B}'_n$ be a bicyclic graph of order $n \geq 9$. If n is odd, then*

$$ABC_{GG}(G) \geq 2(n+1)\sqrt{\frac{n-2}{n^2-1}}.$$

If n is even, then

$$ABC_{GG}(G) \geq \frac{6}{n}\sqrt{n-2} + 2(n-2)\sqrt{\frac{1}{n+2}}.$$

For n odd, equality holds if and only if $G \cong B_3(4, 2, n-1)$. For n even, equality holds if and only if $G \cong B_3(6, 3, n-2)$.

Figure 7 displays the extremal graphs of Conjecture 5.1 according to the parity of n .

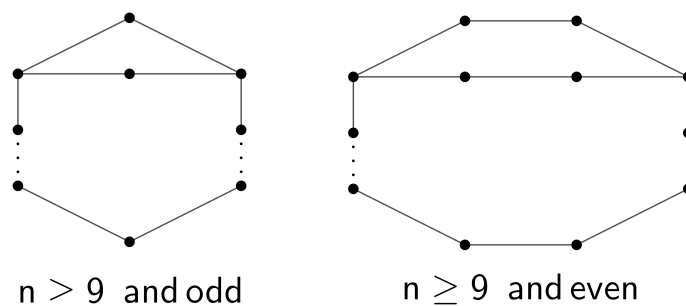


Figure 7. Bicyclic graphs with minimal value of ABC_{GG} index for $n \geq 9$.

Next, we present a conjecture about the upper bound to the ABC_{GG} index for all bicyclic graphs. Let H be the graph obtained by adding $n - 4$ pendant vertices to one vertex of degree 3 of the complete graph a K_4 minus an edge. Figure 8 displays the graphs with maximal ABC_{GG} index for $n \geq 4$, and the graph H is the last graph for $n \geq 8$.

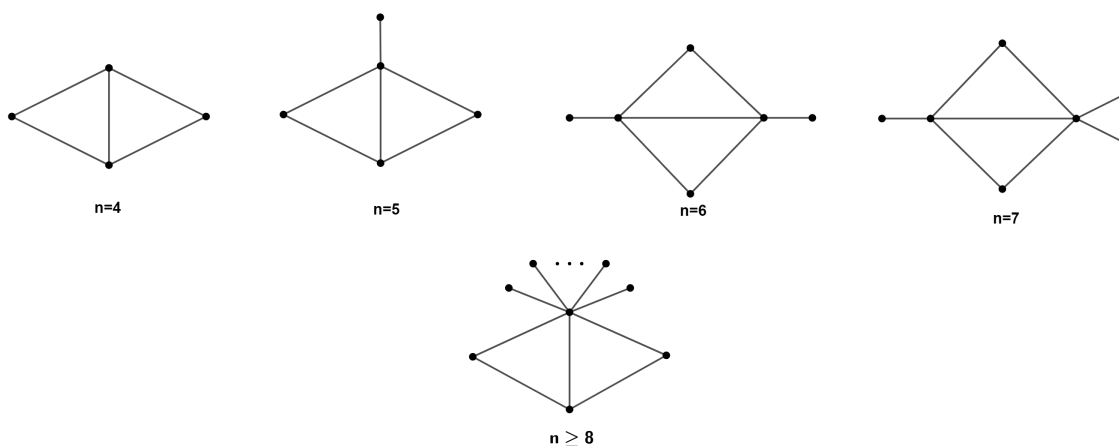


Figure 8. Bicyclic graphs with maximal value of ABC_{GG} index for $n \geq 4$.

Conjecture 5.2. Let $G \in \mathcal{B}'_n$ a bicyclic graph with order $n \geq 8$. Then,

$$ABC_{GG}(G) \leq (n-4)\sqrt{\frac{n-2}{n-1}} + \sqrt{\frac{n-4}{n-3}} + 2\sqrt{\frac{n-3}{n-2}} + \frac{\sqrt{2}}{2}.$$

Equality holds if and only if G is isomorphic to H .

References

- [1] K. Das, On the Graovac–Ghorbani index of graphs, *App. Math. Comp.* **275** (2016) 353–360.

- [2] K. Das, M. Mohammed, I. Gutman, K. Atan, Comparison between Atom-Bond Connectivity Indices of Graphs, *MATCH Commun. Math. Comput. Chem.* **76** (2016) 159–170.
- [3] K. Das, K. Xu, A. Graovac, Maximal unicyclic graphs with respect to new atom-bond connectivity index, *Acta Chim. Slov.* **60** (2013) 34–42.
- [4] D. Dimitrov, B. Ikić, R. Škrekovski, Remarks on the maximum atom-bond connectivity index of graphs with given parameters, *Disc. App. Math.* **222** (2017) 222–226.
- [5] D. Dimitrov, B. Ikić, R. Škrekovski. Remarks on the Graovac–Ghorbani index of bipartite graphs, *Appl. Math. Comp.* **293** (2017) 370–376.
- [6] B. Furtula, Atom–Bond Connectivity Index Versus Graovac-Ghorbani Analog, *MATCH Commun. Math. Comput. Chem.* **75** (2016) 233–242.
- [7] A. Graovac, M. Ghorbani, A new version of atom-bond connectivity index, *Acta Chim. Slov* **57** (2010) 609–612.
- [8] C.X. He, Y. Liu, J.Y Shao, On the spectral radii of bicyclic graphs, *J. Math. Res. Exp.* **30** (2007) 93–99.
- [9] M. Rostami, M. Sohrab-Haghifhat, M. Ghorbani, On Second Atom-Bond Connectivity Index, *Iranian J. Math. Chem.* **4** (2013) 265–270.
- [10] B. McKay, A. Piperno, Practical graph isomorphism II, *J. Symb. Comp.* **60** (2014) 94–112.
- [11] M. Rostami, M. Sohrabi-Haghighat, Further Results on New Version of Atom Bond Connectivity Index, *MATCH Commun. Math. Comput. Chem.* **71** (2014) 21–32.
- [12] M. Ghebleh, A. Kanso, D. Stevanović, Graph6Java: A Researcher-Friendly Java Framework for Testing Conjectures in Chemical Graph Theory, *MATCH Commun. Math. Comput. Chem.* **81** (2019) 737–770.
- [13] D. Barnes, M. Killing, *Objects First with Java, A Practical Introduction using BlueJ*, Pearson Prentice Hall, London, 2016.