

Max/Min Puzzles in Geometry III†

Revised

James M. Parks
Dept. of Math.
SUNY Potsdam
Potsdam, NY
parksjm@potsdam.edu
February, 22, 2022

Abstract. The first two installments of this series of papers dealt with the maximum area polygons: Parallelograms, Rectangles, Squares or Equilateral Triangles, in given triangles. Minimum area polygons were also considered in the second paper on Equilateral Triangles. In this paper the puzzle will be turned the other way around. Given the regular unit polygons, a Square, Pentagon, or Hexagon, we searched for the smallest area triangle(s) which contains it.

The Dynamic Geometry Software *Sketchpad v5.10 BETA* was used for all figures in the paper.

I. The first regular polygon we consider is the *unit square*. It will be assumed that triangles which enclose the square *inscribe it*, that is *the vertices of the square are all on the sides of the triangle*. It can be assumed that one side of the square is on a side of the triangle [4].

The following observation will be of use throughout the study of squares.

Let $\triangle ABC$ be a given triangle with base AB , in which a unit square $DEFG$ is inscribed, with DE on side AB , and assume there are no obtuse angles at vertices A or B , Fig. 1.

Then $\triangle ABC \sim \triangle GFC$, since the corresponding angles are equal [1].

Let h be the height of $\triangle ABC$ at C , $c = AB$, h' is the height of $\triangle GFC$ at C , and $c' = GF$. Then $h/c = h'/c'$, but $h = (h' + 1)$, and $c' = 1$, so $c = (h' + 1)/h'$.

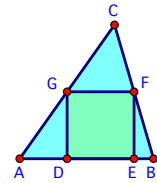


Figure 1

Thus the following Lemma is established.

Lemma 1. *If $\triangle ABC$ inscribes the unit square $DEFG$ with DE on AB , and AB has no obtuse angles at vertices A or B , then $c = AB = (h' + 1)/h'$, where h' is the height of $\triangle GFC$ at C .*

Examples 1.

A. Let $\triangle ABC$ be the triangle which inscribes $DEFG$, as in Fig. 1, with $h' = 1$. Then, $c = 2$, and $(ABC) = 2u^2$, by Lemma 1, where (ABC) denotes the area of $\triangle ABC$.

B. Let $\triangle ABC$ be the right angle triangle which inscribes $DEFG$, with sides of length 2, and right angle at vertex A coinciding with the right angle in the unit square at vertex D , Fig. 2. Then $(ABC) = 2u^2$.

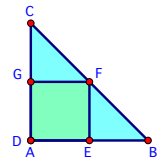


Figure 2

† Versions of some of these results have appeared in several settings previously [2], [3].

- C. Let $\triangle ABC$ be an equilateral triangle which inscribes the unit square $DEFG$, Fig. 3. Then $\triangle GFC$ is also an equilateral triangle, and has base $GF = 1$. Thus the height of $\triangle GFC$ is $h' = \sqrt{3}/2$, and the height of $\triangle ABC$ is $h = (1 + \sqrt{3}/2)$. Hence, $c = (2\sqrt{3} + 3)/3$, by Lemma 1, so $(ABC) = (12 + 7\sqrt{3})/12 u^2 \sim 2.01u^2$.
- D. Let $\triangle ABC$ be the isosceles triangle which inscribes $DEFG$, with $CA = CB$, and central angle $\angle C = 120^\circ$, Fig. 4. Then $AD = EB = \sqrt{3}$, and $\angle A = 30^\circ = \angle B$. So $c = AB = (1 + 2\sqrt{3})$, and by Lemma 1, $h = (\sqrt{3}/6 + 1)$. Thus, $(ABC) = (1 + 2\sqrt{3})(\sqrt{3}/6 + 1)/2 u^2 \sim 2.88u^2$.

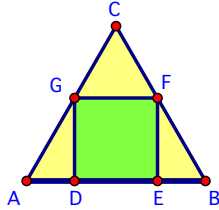


Figure 3

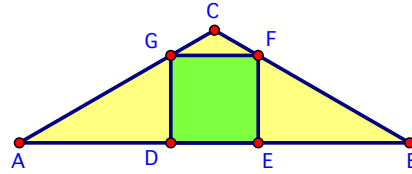


Figure 4

The above examples lead us to conjecture that $2u^2$ is a lower bound for the minimum area of a triangle which inscribes a unit square.

Theorem 1. *If a unit square $DEFG$ is inscribed in $\triangle ABC$, with DE on side AB , then $\min(ABC) = 2u^2$, and this occurs when the height h of $\triangle ABC$ from C satisfies $h = 2$.*

By Lemma 1, if $\triangle ABC$ is a triangle in which a unit square $DEFG$ is inscribed, and $\triangle ABC$ has height $h = 2$, measured from C , then the base $c = 2$, so $(ABC) = 2u^2$, Fig. 1.

Suppose $\triangle RST$ contains the inscribed unit square $DEFG$, with DE on side RS , and has height $h \neq 2$, say $h = (2 + e)$, for $e > 0$. By Lemma 1, $h' = (1 + e)$, so $c = (2 + e)/(1 + e)$, and $(RST) = (2 + e)^2/(2 + 2e)$. It then follows that $(RST) > 2u^2$, since the inequality $(2 + e)^2/(2 + 2e) > 2u^2$ is equivalent to $e^2 > 0$, which is obviously true.

A similar argument holds if $\triangle RST$ has height $h = (2 - e)$, for $0 < e < 1$.

Thus the Theorem is established.

II. The next polygon to be considered is the *regular unit pentagon*, Fig.5.

The interior angles of pentagon $DEFGH$ are 108° , since a pentagon interior can be divided into 3 triangles.

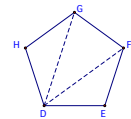


Figure 5

The major chords, such as HF , all have length $(1 + \sqrt{5})/2$, the Golden Ratio, by Ptolemy's Theorem. This follows since the chord HF , with length s , determines the quadrilateral $DEFH$, with sides of length $1, 1, 1$, and s . Also, the diagonals DF and EH have length s , because the interior triangles DFH and EFH are isosceles with base angles of 72° , Figs. 6 & 12. So the equation $s^2 = s + 1$ results, with positive solution $s = (1 + \sqrt{5})/2$.

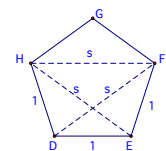


Figure 6

Another geometric argument is given in Theorem 2.

However, it is only possible to inscribe a pentagon in a triangle in a few ways. So it will be necessary to also consider triangles which ‘enclose’ a pentagon in a more general way, see Fig 7.

It will be assumed that there are no obtuse angles on the base side AB of ΔABC from here on, unless noted otherwise.

If the line segment HF is added to the unit regular pentagon $DEFGH$, then for any triangle ΔABC which encloses the pentagon such that DE is on side AB , F is on CB , and H is on CA , is similar to ΔHFC , by angle equality, Fig.7.

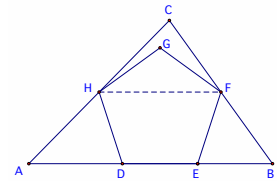


Figure 7

Thus, if h is the height of ΔABC from C , h' is the height of ΔHFC , $s = HF$, $c = AB$, and d is the height of $DEFH$, then $h/c = h'/s$. But $h = h' + d$, so $c = (h' + d)s/h'$.

This proves Lemma 2.

Lemma 2. *Let ΔABC enclose the unit regular pentagon $DEFGH$, with DE on AB , F on CB , and H on CA , and assume there are no obtuse angles on the base side AB . Also, assume h is the height of ΔABC from C , h' is the height of ΔHFC , $c = AB$, $s = HF$, and d is the distance from HF to base side AB . Then $c = (h' + d)s/h'$.*

Examples 2.

A. In Fig. 8, the triangle ΔABC which encloses the regular unit pentagon is special. The height is $h = \sqrt{(5 + \sqrt{5})/2} \sim 1.90$, which is twice the height of the line segment HF above the base AB (see below for details on this). The base $AB = 2s = (1 + \sqrt{5})$, where $s = HF$. Then, $(ABC) = \sqrt{(5 + \sqrt{5})/2}(1 + \sqrt{5})/2 \sim 3.08u^2$.

B. Let ΔABC be the triangle which encloses the regular unit pentagon $DEFGH$, and has height $h = 2$, Fig. 9. Then, by Lemma 2, the base $c = AB \sim 3.13$, and $(ABC) \sim 3.13u^2$.

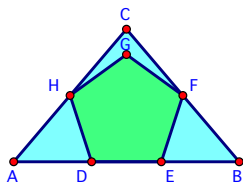


Figure 8

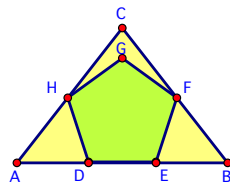


Figure 9

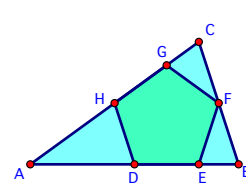
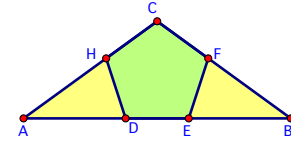


Figure 10

C. Let ΔABC be the triangle in which the regular unit pentagon $DEFGH$ is inscribed, and where $G = C$, and the sides CH and ED are extended to intersect at A , and the side BC is perpendicular to the line segment AF , Fig. 10. It then follows, that $(ABC) \sim 3.08u^2$, see Theorem 2.

D. Let $\triangle ABC$ be the triangle in which the regular unit pentagon $DEFGH$ is inscribed, and the vertex C coincides with vertex G , and the sides GH and GF are extended to intersect with the line on the base side DE at A and B , respectively, Fig. 11.



Then $\angle A = \angle B = 36^\circ$, and $\angle C = 108^\circ$.
Using *Sketchpad* it follows that $(ABC) \sim 3.26u^2$.

Figure 11

These examples lead us to conjecture Theorem 2.

Theorem 2. Let $DEFGH$ be a regular unit pentagon, and $\triangle ABC$ enclose the pentagon with side DE on side AB of the triangle, and no obtuse angles on AB . Let the side DE be reflected about chord line HF to form the segment ST , and assume that C is on ST . Then $\triangle ABC$ is a minimum enclosing triangle of the pentagon with area $(ABC) = \sqrt{(5 + 2\sqrt{5})}u^2 \sim 3.08u^2$. If vertex C is not on ST , then $(ABC) > \sqrt{(5 + 2\sqrt{5})}u^2$.

Proof. Construct the triangle $\triangle ABC$ as in Example C, Fig's.10 & 12. Since the exterior angles of the pentagon are 72° , the triangles $\triangle ABC$, $\triangle ADH$, $\triangle BFE$ and $\triangle CGF$ are all similar isosceles triangles with base angles of 72° , and central angles of 36° , Fig. 12.

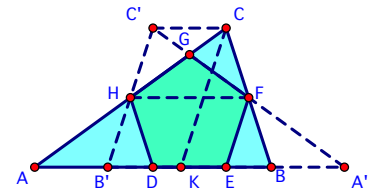


Figure 12

Also, a copy of $\triangle ABC$, labeled $\triangle A'B'C'$, can be constructed to the right of the pentagon with the same properties as $\triangle ABC$, see dashed lines in Fig. 12.

Since H and F are the midpoints of $B'C'$ and BC , chord HF is halfway between DE and $C'C$, and $BC = B'C' = 2$. Since $\triangle HFC \sim \triangle ABC$, it follows that $2/l = (s+1+e)/s$, where $s = HF = AD$, $e = EB$, and $c = AB = s + 1 + e$.

Then $s = 1 + e$, and $c = AB = 2s$, by Lemma 2.

Let K be the point on AB such that $\triangle KBC$ is an isosceles triangle, Fig. 12.

Then $KB = 2e$, so $2s/2 = 2/2e$, and $s = 1/(s-1)$, thus $s = (1 + \sqrt{5})/2$ (the Golden Ratio), $e = 1/s = (\sqrt{5} - 1)/2$, and $AB = 1 + \sqrt{5}$.

Thus, $\triangle EBC$ is a right triangle, since $\angle B = 72^\circ$, and $\angle ECB = 18^\circ$.

So, if $h = EC$, then $h^2 + e^2 = 4$, and $h = \sqrt{(5 + \sqrt{5})/2}$.

It then follows that $(ABC) = hc/2 = \sqrt{(5 + 2\sqrt{5})}u^2 \sim 3.08u^2$.

If $\triangle A''B''C''$ is a 3rd triangle which encloses the pentagon $DEFGH$ and has vertex C'' on ST , then $\triangle HFC \sim \triangle A''B''C''$, and the ratios satisfy $h/h'' = c/c''$, where $c = A''B''$, and $c'' = HF$, Fig. 13.

But $h = 2h''$, and $c = 2c''$, where $c'' = s$, so $(A''B''C'') = hc/2 = (ABC)$.

The area of $\triangle A''B''C''$ then satisfies $(A''B''C'') = \sqrt{(5 + 2\sqrt{5})}u^2$.

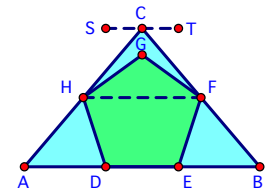


Figure 13

Now suppose $\triangle ABC$ is another triangle which encloses pentagon $DEFGH$, where vertex C is not on segment ST , and there are no obtuse angles on the base AB , Fig. 14. Then, for $c = AB$, and h'

the height of C over AB , $h'/c = (h' - h/2)/s$, by Lemma 2, where h is the distance from ST to AB , $s = HF$, and $h' \neq h$.

Thus $(ABC) = sh'^2/(2h' - h)$.

The area of the triangle above in Fig. 13, with vertex C on ST is sh , since $AB = 2s$. So the claim is that the area of the triangle in Fig. 14 is greater than the area of the triangle in Fig. 13, that is $sh'^2/(2h' - h) > sh$.

But this is equivalent to the inequality $(h' - h)^2 > 0$, which is obviously true, regardless of whether h' is greater than, or less than h .

Hence the claim is true.

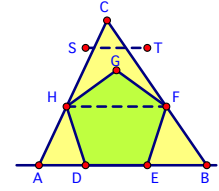


Figure 14

III. The last polygon we will considered is the *regular unit hexagon*, Fig.15. This polygon is special, since, as we will see, it does not follow the patterns of the areas for the square and the pentagon.

Generalizations to higher order polygons are considered in [3].

The interior angles of the hexagon are 120° , hence the exterior angles are 60° .

The regular hexagon can be divided into 6 equilateral triangles, each with sides of length l . So the height of the unit hexagon is $\sqrt{3}$, and, since the equilateral triangles each have area $\sqrt{3}/4u^2$, the area of the unit hexagon is $3\sqrt{3}/2u^2$.

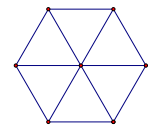


Figure 15

Examples 3.

- A. If ΔABC is the equilateral triangle which inscribes the unit regular hexagon $DEFGHJ$, Fig. 16. Then the height of ΔABC is $3\sqrt{3}/2$, and it's sides have length 3. Thus $(ABC) = 9\sqrt{3}/4u^2 \sim 3.90u^2$.
- B. Let ΔABC be the yellow isosceles triangle which encloses the unit regular hexagon $DEFGHJ$, and has height 3, and base $AB \sim 2.81$, Fig. 17. By *Sketchpad* the approximate area of the triangle is $(ABC) \sim 4.22u^2$.
- C. Let $\Delta A'B'C'$ be the blue triangle which encloses the unit regular hexagon $DEFGHJ$, and has height 2.25, and base $A'B' \sim 4.34$, Fig. 17. By *Sketchpad* the approximate area of the triangle is $(A'B'C') \sim 4.89u^2$.

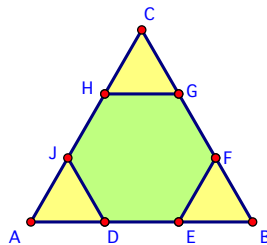


Figure 16

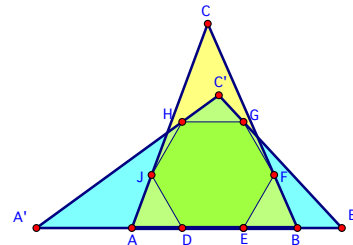


Figure 17

Using these Examples as a guide we conjecture Theorem 3.

Theorem 3. *The minimum triangle ΔABC in area which encloses the unit regular hexagon is an equilateral triangle with sides of length 3, and area $(ABC) = 9\sqrt{3}/4u^2 \sim 3.90u^2$.*

Proof. If ΔABC is the equilateral triangle in which is encloses the unit regular hexagon $DEFGHJ$, then $(ABC) = 9\sqrt{3}/4u^2$, Fig. 16.

Let $\Delta A'B'C'$ be another triangle which encloses the unit regular hexagon, with height $h > 3\sqrt{3}/2$.

We claim that $(A'B'C') > (ABC)$, Fig. 17.

Connect F and J for the chord FJ , then $\Delta JFC' \sim \Delta A'B'C'$, by equal angles.

Let $c' = A'B'$, then $h/c' = (h - \sqrt{3}/2)/2$, recall $JF = 2$. Hence $c' = 2h/(h - \sqrt{3}/2)$, and $(A'B'C') = h^2/(h - \sqrt{3}/2)u^2$.

Thus $(A'B'C') > (ABC)$ iff $h^2/(h - \sqrt{3}/2) > 9\sqrt{3}/4$ iff $h^2 - 9\sqrt{3}h/4 + 27/8 > 0$.

But $h^2 - 9\sqrt{3}h/4 + 27/8 = (h - 3\sqrt{3}/4)(h - 3\sqrt{3}/2)$, and this product is positive when $h > 3\sqrt{3}/2$.

Hence the inequality holds.

A similar argument holds for $h < 3\sqrt{3}/2$.

So the conjecture is true.

The general case for regular n -gons, the regular polygons with n sides, is considered in [3] for $n \geq 4$. In this paper the patterns of the minimum enclosing triangles which appear above are shown to hold in the more general case for all regular n -gons, $n \geq 4$.

If we let $n = r \bmod 3$, and assume $r = 0$, then it is demonstrated in [3] that these n -gons have minimum enclosing triangles which are equilateral triangles, as in the case of the regular hexagon, a 6-gon, in Section III above. If $r \neq 0$, then the n -gons have minimum enclosing triangles similar to the cases for the square, a 4-gon, Section I, and the regular pentagon, a 5-gon, Section II.

References.

1. Heath, T., *EUCLID, The Thirteen Books of THE ELEMENTS*, Vol. 1, 2nd ed., Dover, 1956.
2. Parks, J., *Puzzles on Regular Polygons Enclosed in Triangles*, NYSMTJ, Vol. 65, No.1, 2015.
3. _____, *Regular n -gons in Minimum Area Triangles*, IJG International Journal of Geometry, Vol. 6, No. 1 (2017), 36-48.
4. Sullivan, J. M., *Polygon in triangle: generalizing a theorem of Post*, <http://torus.math.uiuc.edu/jms/>, 1996.